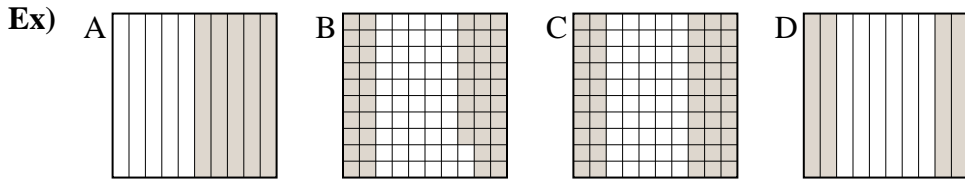




Put the boxes in order from least to greatest based on the shaded amount.

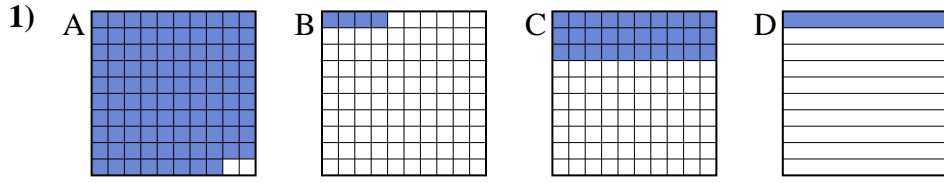
Answers



small 0.4 - D
0.48 - B
0.5 - A
 large 0.5 - A

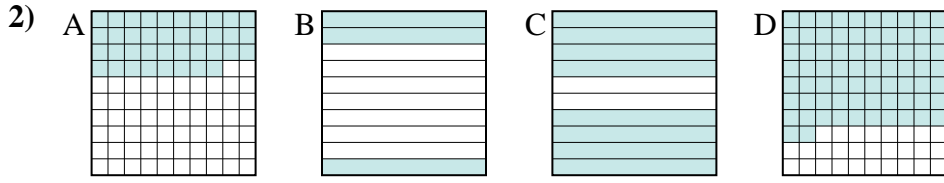
Ex. D,B,A,A

1. _____
2. _____
3. _____
4. _____
5. _____
6. _____
7. _____
8. _____



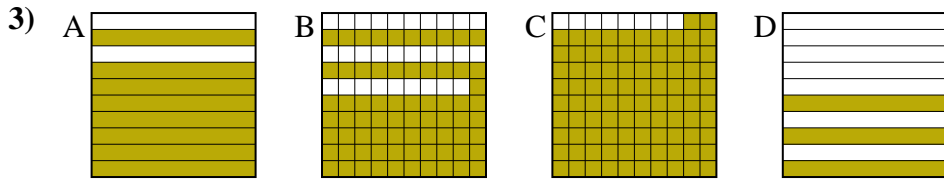
small _____

 large _____



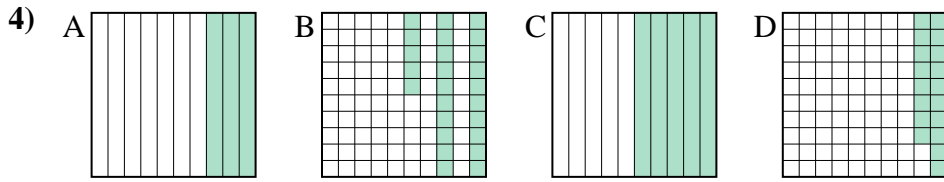
small _____

 large _____



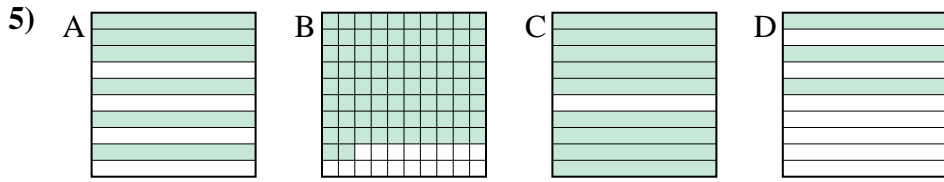
small _____

 large _____



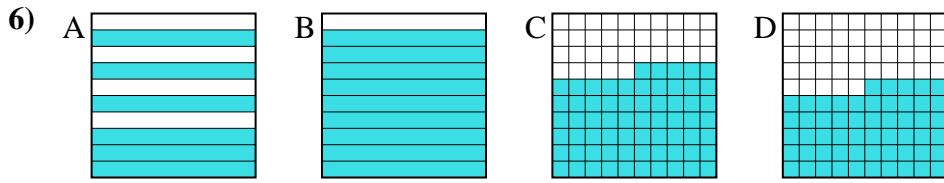
small _____

 large _____



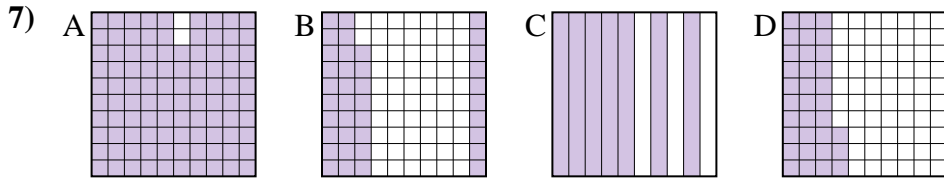
small _____

 large _____



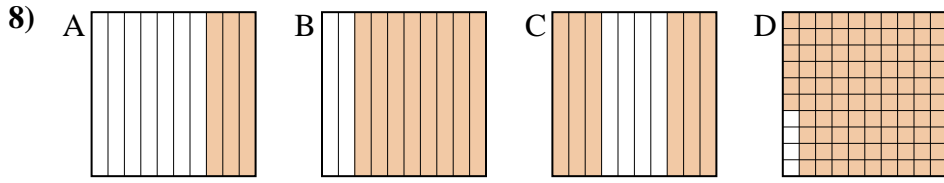
small _____

 large _____



small _____

 large _____




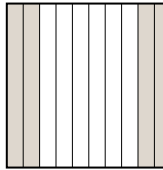


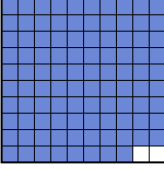
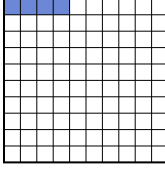
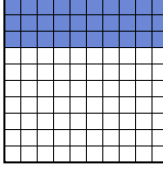
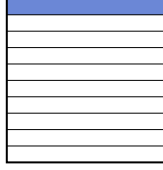
small _____

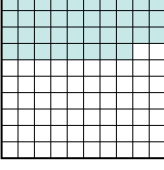


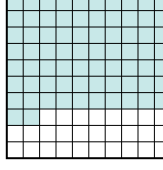
 large _____


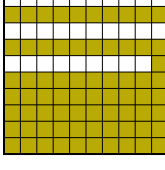
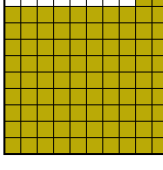







Put the boxes in order from least to greatest based on the shaded amount.





Ex) A  B  C  D  small $\frac{0.4 - D}{0.48 - B}$
large $\frac{0.5 - A}{0.5 - A}$



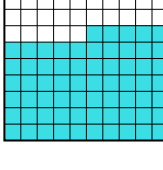
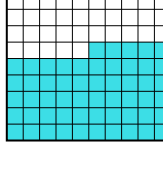
1) A  B  C  D  small $\frac{0.04 - B}{0.1 - D}$
large $\frac{0.3 - C}{0.98 - A}$


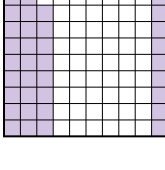
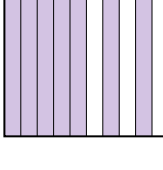
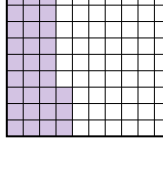
2) A  B  C  D  small $\frac{0.3 - B}{0.38 - A}$
large $\frac{0.72 - D}{0.8 - C}$

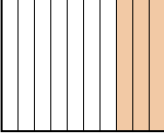
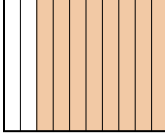
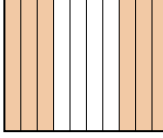
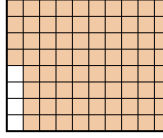
3) A  B  C  D  small $\frac{0.3 - D}{0.71 - B}$
large $\frac{0.8 - A}{0.92 - C}$

4) A  B  C  D  small $\frac{0.18 - D}{0.25 - B}$
large $\frac{0.3 - A}{0.5 - C}$

5) A  B  C  D  small $\frac{0.3 - D}{0.6 - A}$
large $\frac{0.82 - B}{0.9 - C}$

6) A  B  C  D  small $\frac{0.55 - D}{0.6 - A}$
large $\frac{0.65 - C}{0.9 - B}$

7) A  B  C  D  small $\frac{0.33 - D}{0.38 - B}$
large $\frac{0.7 - C}{0.98 - A}$

8) A  B  C  D  small $\frac{0.3 - A}{0.6 - C}$
large $\frac{0.8 - B}{0.96 - D}$

Answers

- Ex. D,B,A,A
1. B,D,C,A
2. B,A,D,C
3. D,B,A,C
4. D,B,A,C
5. D,A,B,C
6. D,A,C,B
7. D,B,C,A
8. A,C,B,D