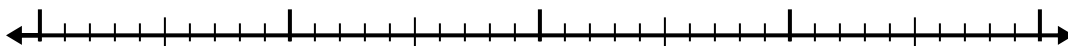





Use the number line to solve each problem.

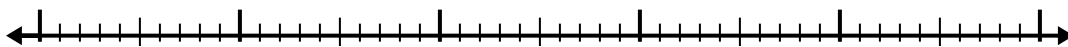
1)  $7.7 - 1.7 =$



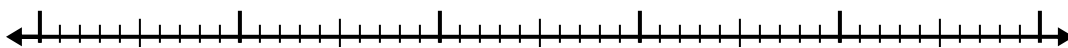
2)  $11 - 3.8 =$



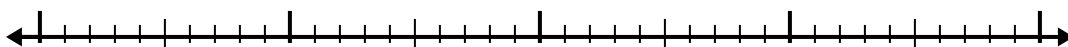
3)  $4.6 - 3.2 =$



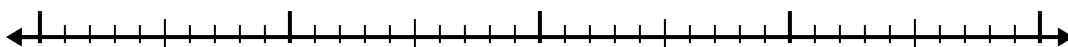
4)  $9 - 3.5 =$



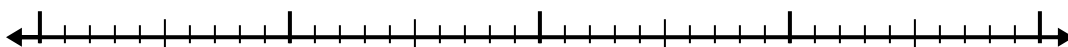
5)  $7.4 - 1.5 =$



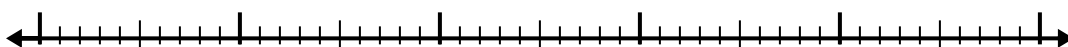
6)  $8.6 - 1.8 =$



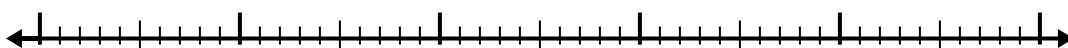
7)  $9 - 1.3 =$



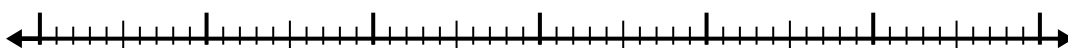
8)  $11.3 - 2.8 =$



9)  $5.2 - 3.5 =$



10)  $5.4 - 3.1 =$

**Answers**

1. \_\_\_\_\_

2. \_\_\_\_\_

3. \_\_\_\_\_

4. \_\_\_\_\_

5. \_\_\_\_\_

6. \_\_\_\_\_

7. \_\_\_\_\_

8. \_\_\_\_\_

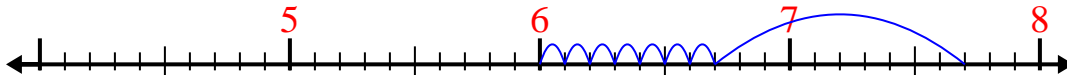
9. \_\_\_\_\_

10. \_\_\_\_\_

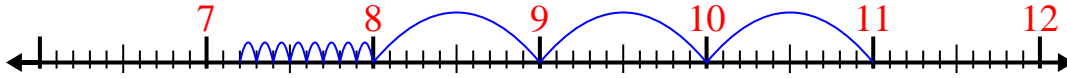


Use the number line to solve each problem.

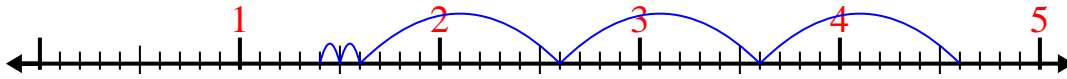
1)  $7.7 - 1.7 =$



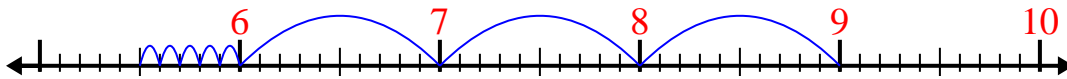
2)  $11 - 3.8 =$



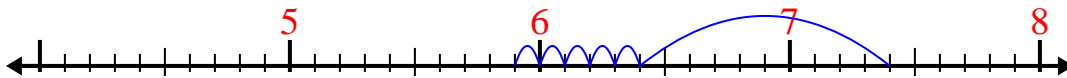
3)  $4.6 - 3.2 =$



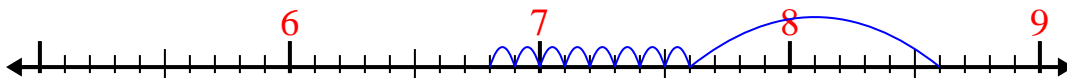
4)  $9 - 3.5 =$



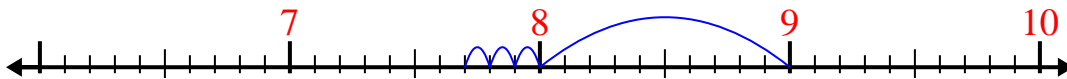
5)  $7.4 - 1.5 =$



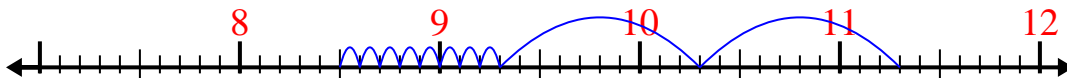
6)  $8.6 - 1.8 =$



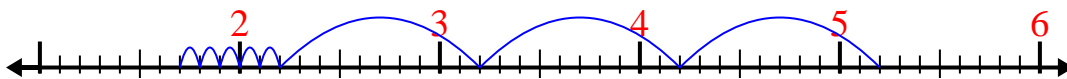
7)  $9 - 1.3 =$



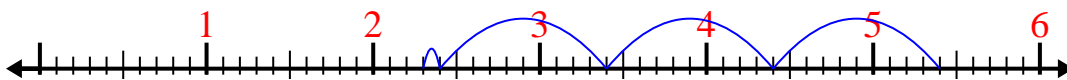
8)  $11.3 - 2.8 =$



9)  $5.2 - 3.5 =$



10)  $5.4 - 3.1 =$

Answers1. 62. 7.23. 1.44. 5.55. 5.96. 6.87. 7.78. 8.59. 1.710. 2.3