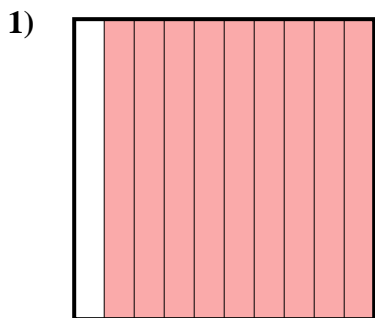


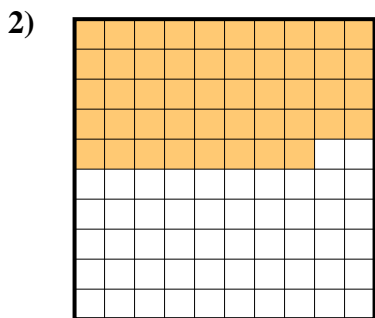


Determine which letter best represents the amount shaded of the whole.


Answers



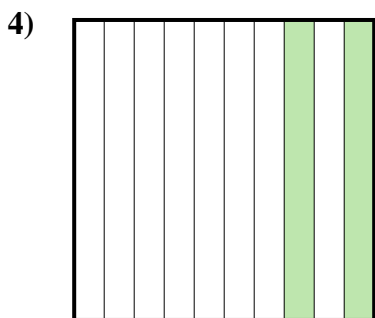
- A. 900.00
- B. 900.0
- C. 90
- D. 0.9



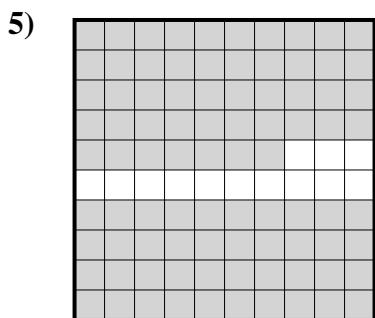
- A. 0.48
- B. 48
- C. 480.00
- D. 4.8



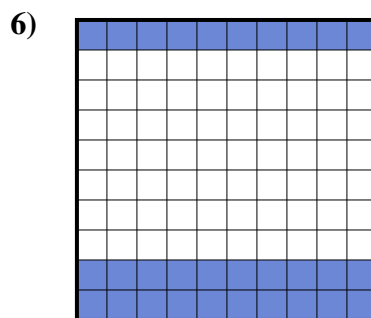
- A. 0.1
- B. 100.00
- C. 10
- D. 1



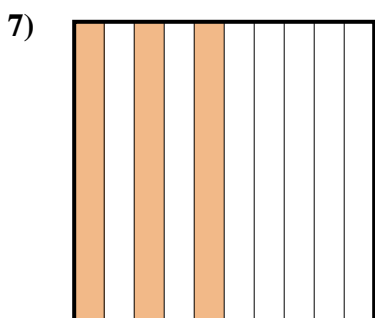
- A. 200.0
- B. 0.2
- C. 20
- D. 200.00



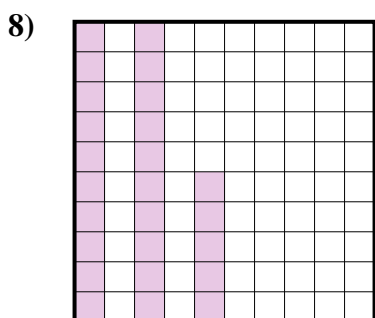
- A. 870.0
- B. 0.087
- C. 0.87
- D. 870.00




- A. 3
- B. 30
- C. 300.00
- D. 0.3



- A. 3
- B. 30
- C. 300.0
- D. 0.3



- A. 2.5
- B. 0.025
- C. 250.0
- D. 0.25



- A. 0.06
- B. 0.6
- C. 600.0
- D. 60

1. _____

2. _____

3. _____

4. _____

5. _____

6. _____

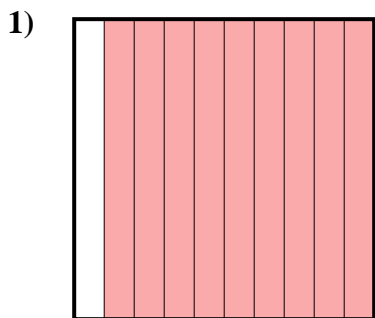
7. _____

8. _____

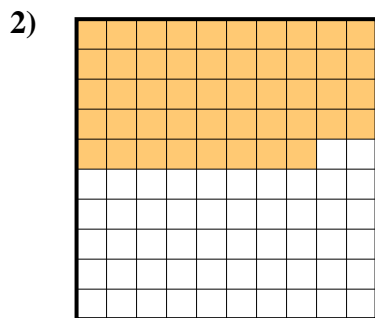
9. _____




Determine which letter best represents the amount shaded of the whole.



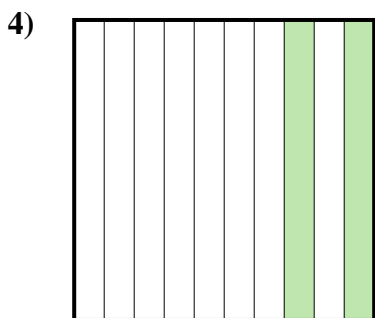
- A. 900.00
- B. 900.0
- C. 90
- D. 0.9



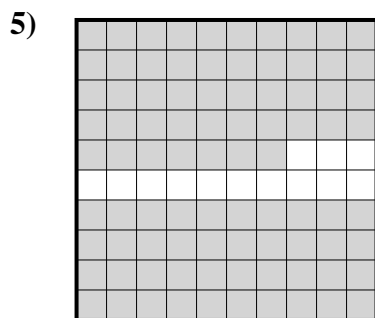
- A. 0.48
- B. 48
- C. 480.00
- D. 4.8



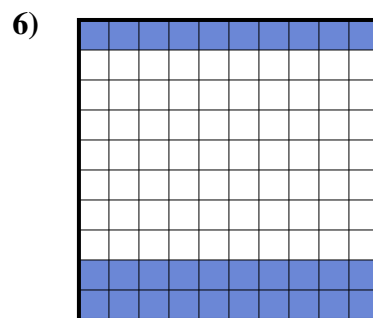
- A. 0.1
- B. 100.00
- C. 10
- D. 1



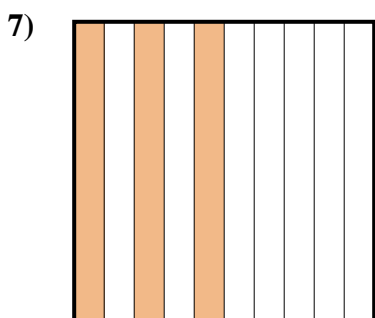
- A. 200.0
- B. 0.2
- C. 20
- D. 200.00



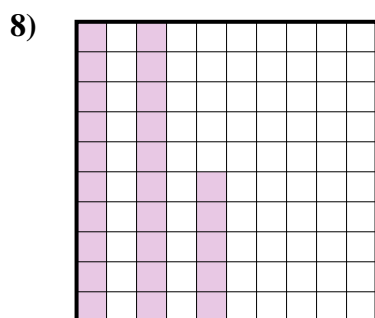
- A. 870.0
- B. 0.087
- C. 0.87
- D. 870.00




- A. 3
- B. 30
- C. 300.00
- D. 0.3



- A. 3
- B. 30
- C. 300.0
- D. 0.3



- A. 2.5
- B. 0.025
- C. 250.0
- D. 0.25



- A. 0.06
- B. 0.6
- C. 600.0
- D. 60

Answers

- 1. **D**
- 2. **A**
- 3. **A**
- 4. **B**
- 5. **C**
- 6. **D**
- 7. **D**
- 8. **D**
- 9. **B**