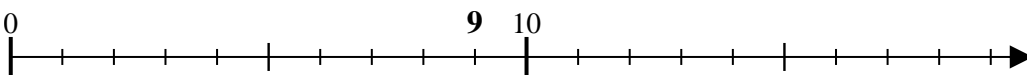


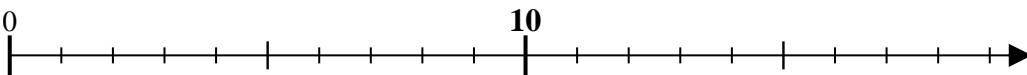


Use the numberline to solve each problem.

1) $9 \div 3 = 0$



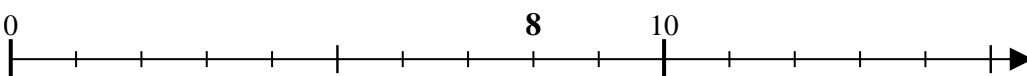
2) $10 \div 5 = 0$



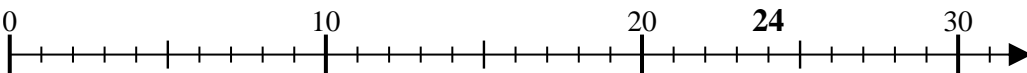
3) $32 \div 8 = 0$



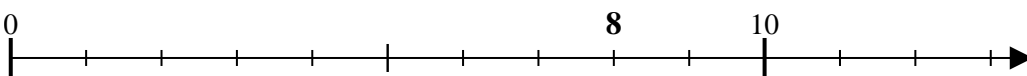
4) $8 \div 2 = 0$



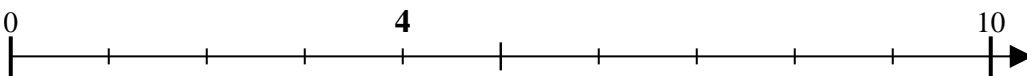
5) $24 \div 6 = 0$



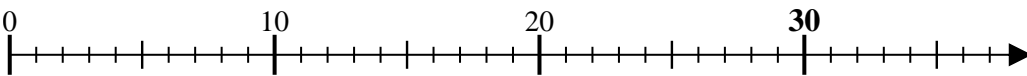
6) $8 \div 4 = 0$



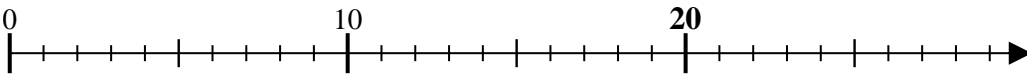
7) $4 \div 2 = 0$



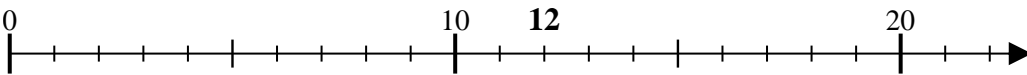
8) $30 \div 6 = 0$



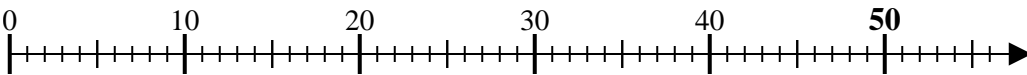
9) $20 \div 4 = 0$



10) $12 \div 4 = 0$



11) $50 \div 10 = 0$



Answers

1. _____

2. _____

3. _____

4. _____

5. _____

6. _____

7. _____

8. _____

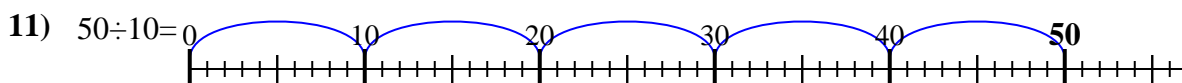
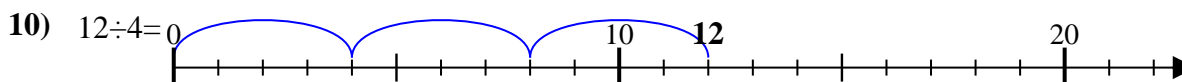
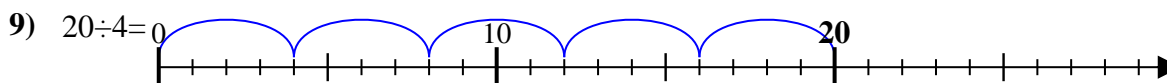
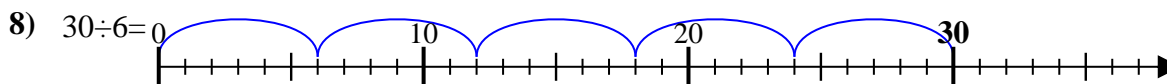

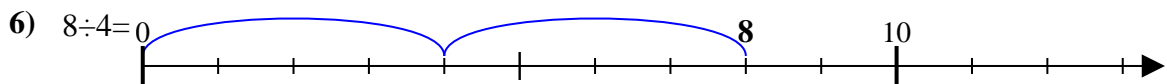
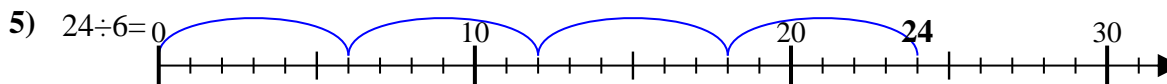
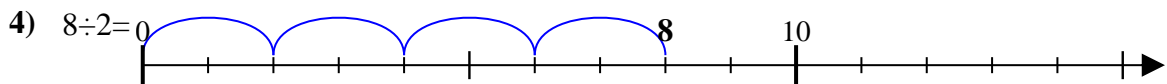
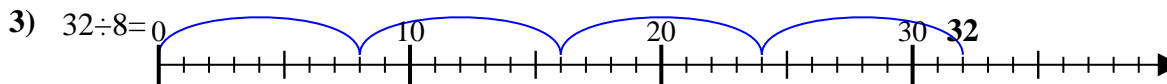
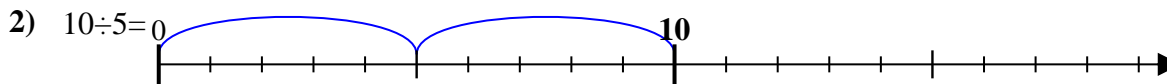
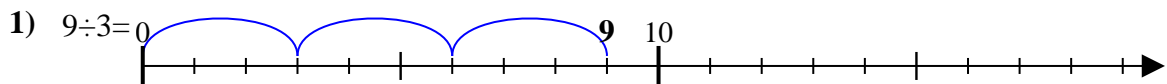
9. _____

10. _____

11. _____



Use the numberline to solve each problem.



Answers

1. 3

2. 2

3. 4

4. 4

5. 4

6. 2

7. 2

8. 5

9. 5

10. 3

11. 5