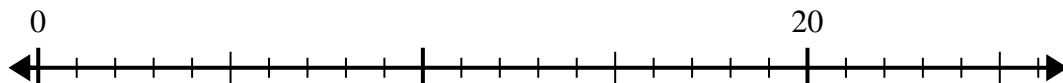


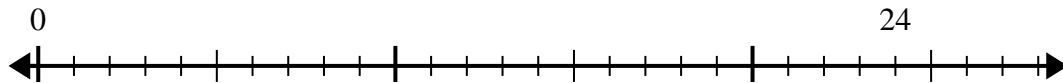


Use the number line to solve the division problem.

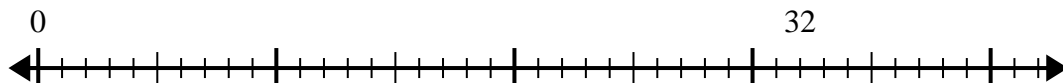
1)  $20 \div 5 =$



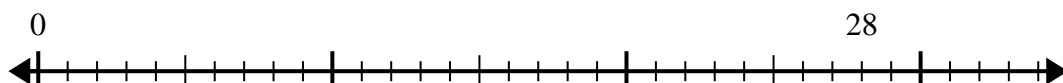
2)  $24 \div 6 =$



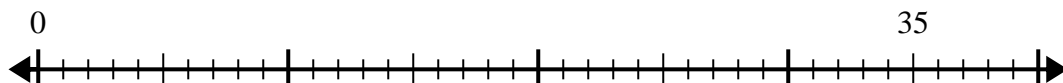
3)  $32 \div 8 =$



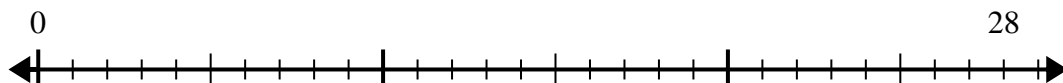
4)  $28 \div 7 =$



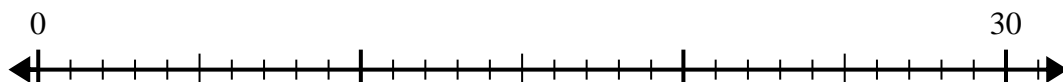
5)  $35 \div 5 =$



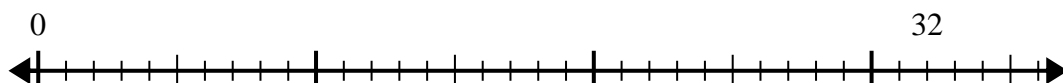
6)  $28 \div 4 =$



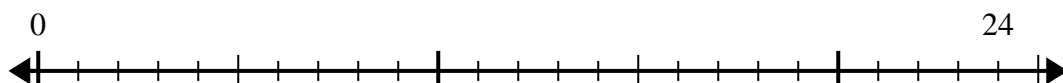
7)  $30 \div 6 =$



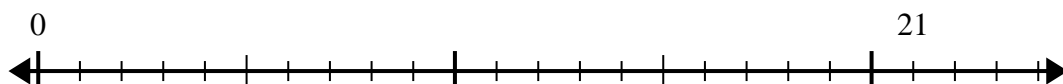
8)  $32 \div 4 =$



9)  $24 \div 4 =$



10)  $21 \div 7 =$

**Answers**

1. \_\_\_\_\_

2. \_\_\_\_\_

3. \_\_\_\_\_

4. \_\_\_\_\_

5. \_\_\_\_\_

6. \_\_\_\_\_

7. \_\_\_\_\_

8. \_\_\_\_\_

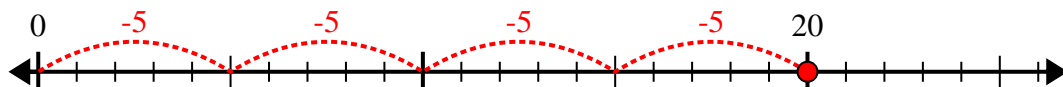
9. \_\_\_\_\_

10. \_\_\_\_\_

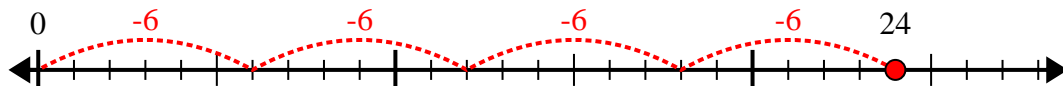


Use the number line to solve the division problem.

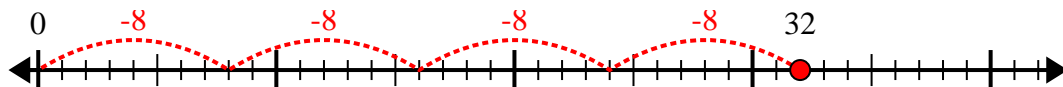
1)  $20 \div 5 =$



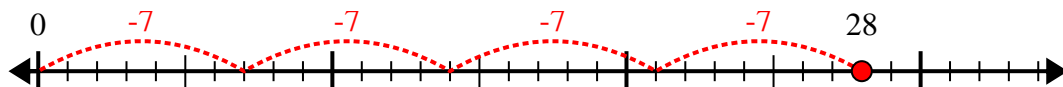
2)  $24 \div 6 =$



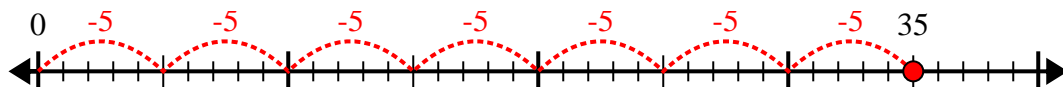
3)  $32 \div 8 =$



4)  $28 \div 7 =$



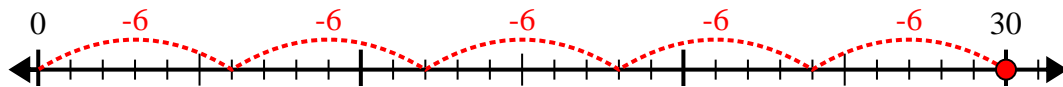
5)  $35 \div 5 =$



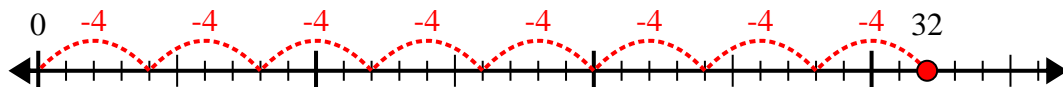
6)  $28 \div 4 =$



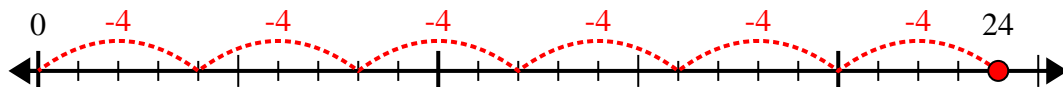
7)  $30 \div 6 =$



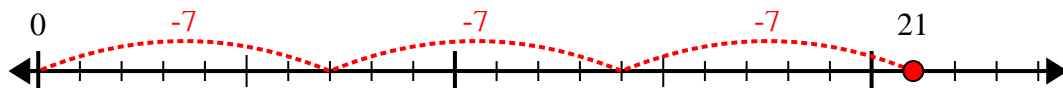
8)  $32 \div 4 =$



9)  $24 \div 4 =$



10)  $21 \div 7 =$



Answers

1. 4

2. 4

3. 4

4. 4

5. 7

6. 7

7. 5

8. 8

9. 6

10. 3