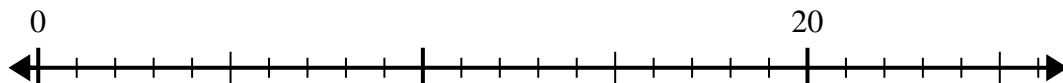


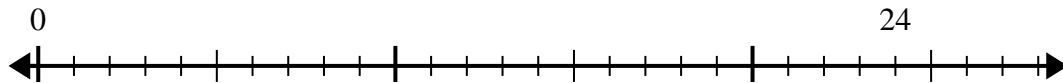


Use the number line to solve the division problem.

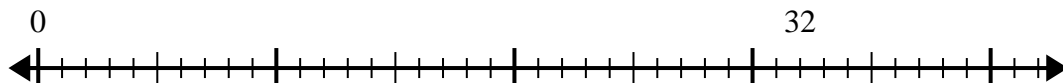
1) $20 \div 5 =$



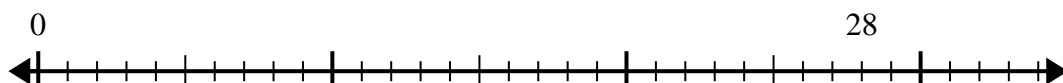
2) $24 \div 6 =$



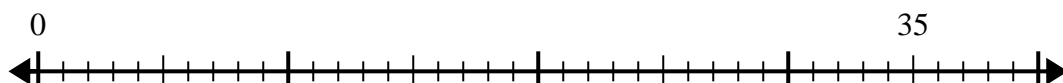
3) $32 \div 8 =$



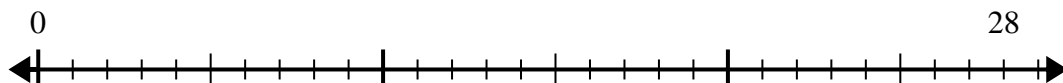
4) $28 \div 7 =$



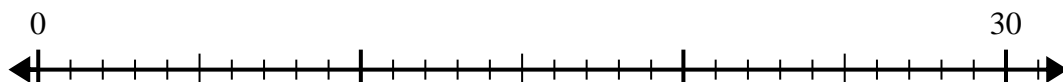
5) $35 \div 5 =$



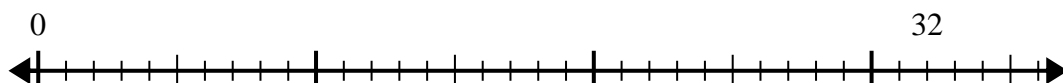
6) $28 \div 4 =$



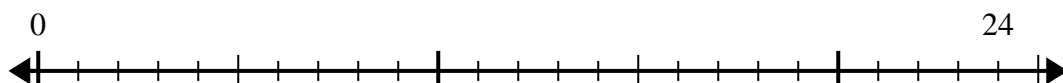
7) $30 \div 6 =$



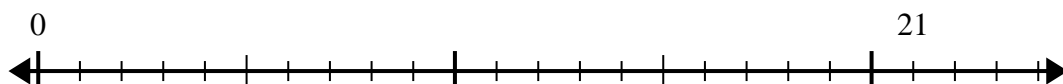
8) $32 \div 4 =$



9) $24 \div 4 =$



10) $21 \div 7 =$

**Answers**

1. _____

2. _____

3. _____

4. _____

5. _____

6. _____

7. _____

8. _____

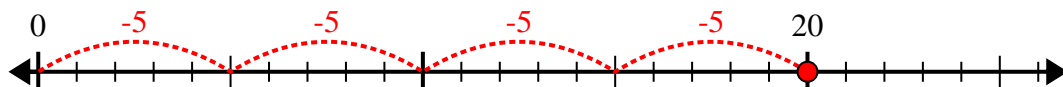
9. _____

10. _____

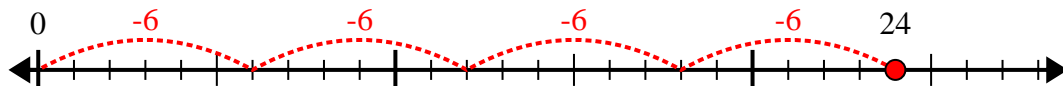


Use the number line to solve the division problem.

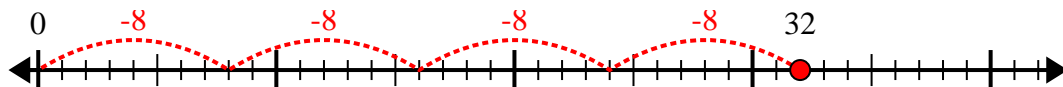
1) $20 \div 5 =$



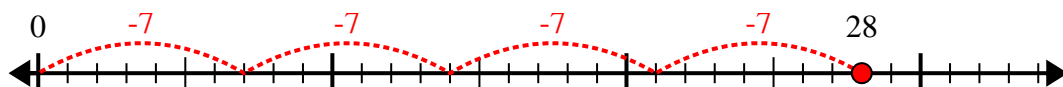
2) $24 \div 6 =$



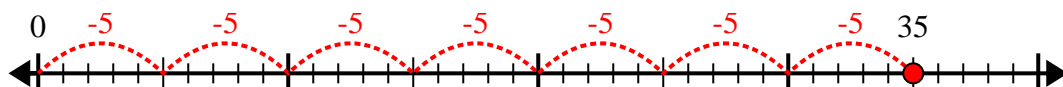
3) $32 \div 8 =$



4) $28 \div 7 =$



5) $35 \div 5 =$



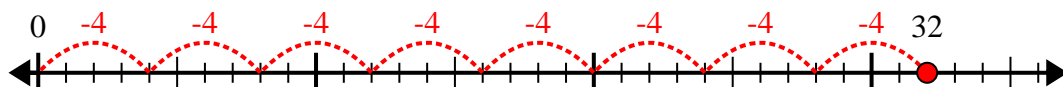
6) $28 \div 4 =$



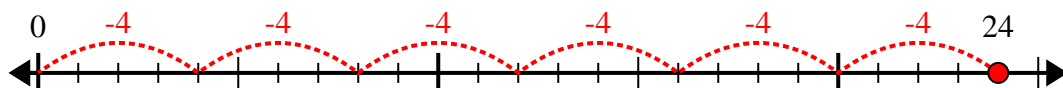
7) $30 \div 6 =$



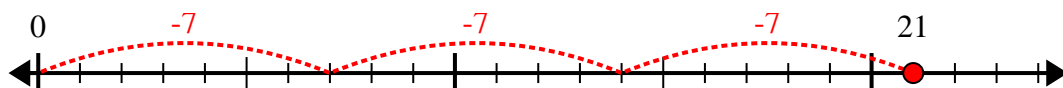
8) $32 \div 4 =$



9) $24 \div 4 =$



10) $21 \div 7 =$



Answers

1. 4

2. 4

3. 4

4. 4

5. 7

6. 7

7. 5

8. 8

9. 6

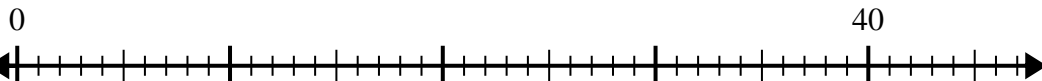
10. 3



Use the number line to solve the division problem.

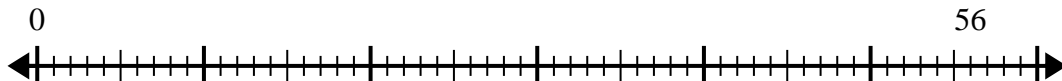
Answers

1) $40 \div 5 =$



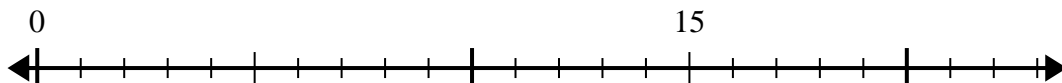
1. _____

2) $56 \div 7 =$



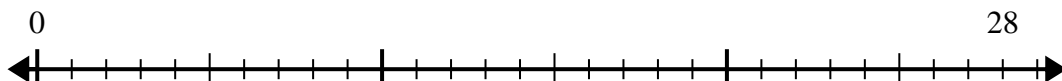
2. _____

3) $15 \div 5 =$



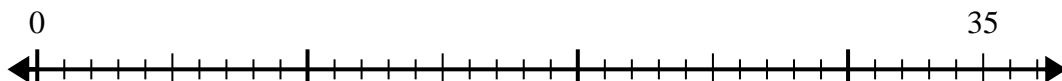
3. _____

4) $28 \div 4 =$



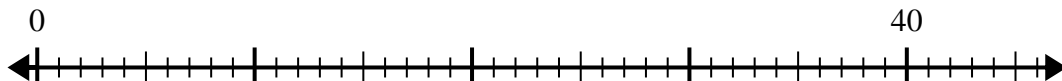
4. _____

5) $35 \div 7 =$



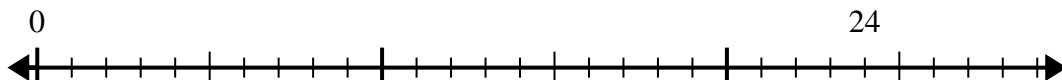
5. _____

6) $40 \div 8 =$



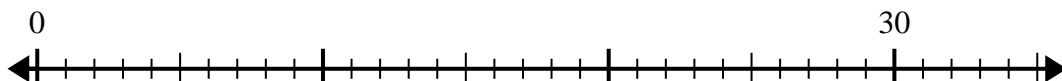
6. _____

7) $24 \div 4 =$



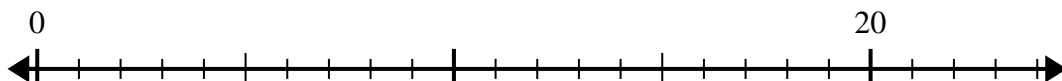
7. _____

8) $30 \div 5 =$



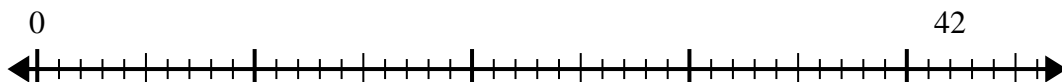
8. _____

9) $20 \div 4 =$



9. _____

10) $42 \div 6 =$

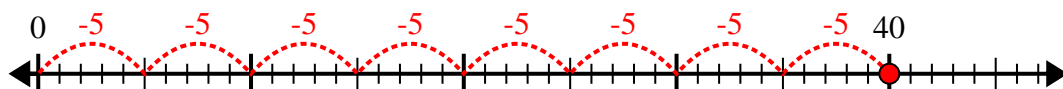


10. _____

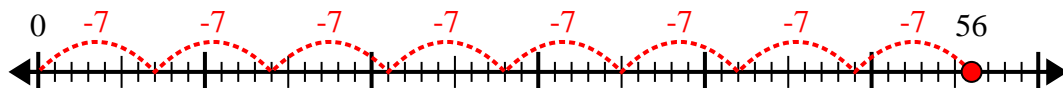


Use the number line to solve the division problem.

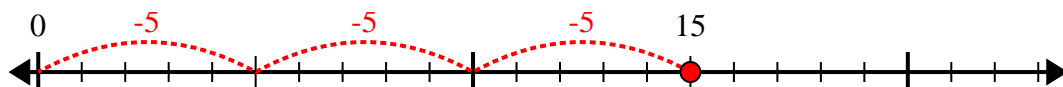
1) $40 \div 5 =$



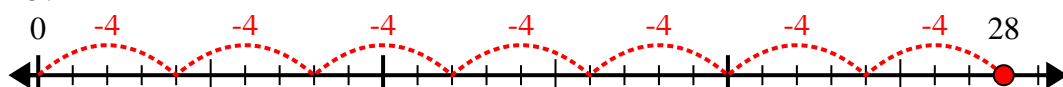
2) $56 \div 7 =$



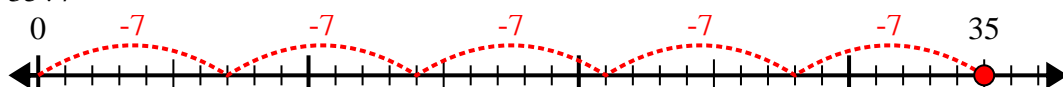
3) $15 \div 5 =$



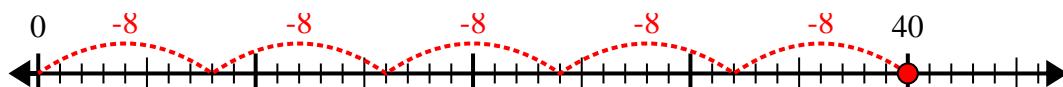
4) $28 \div 4 =$



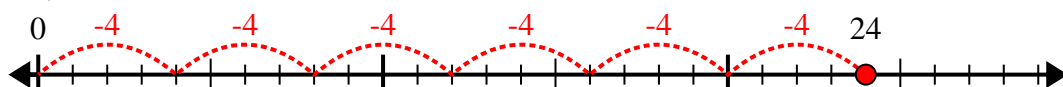
5) $35 \div 7 =$



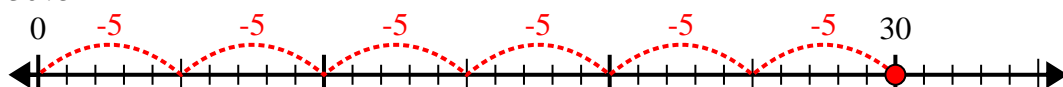
6) $40 \div 8 =$



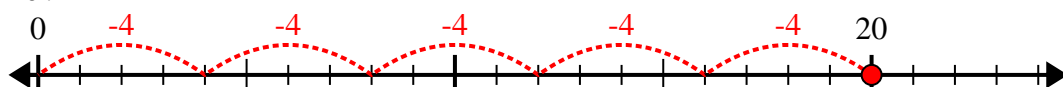
7) $24 \div 4 =$



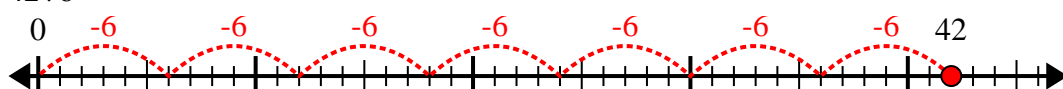
8) $30 \div 5 =$



9) $20 \div 4 =$



10) $42 \div 6 =$



Answers

1. 8

2. 8

3. 3

4. 7

5. 5

6. 5

7. 6

8. 6

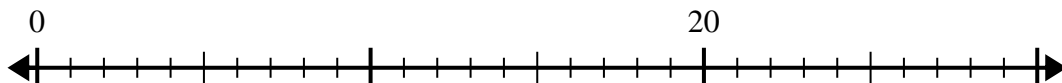
9. 5

10. 7

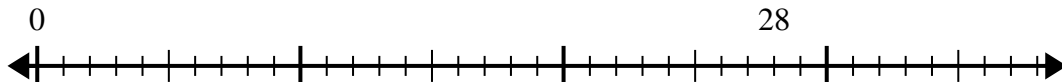


Use the number line to solve the division problem.

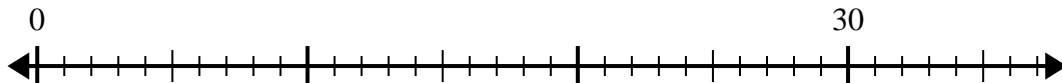
1) $20 \div 5 =$



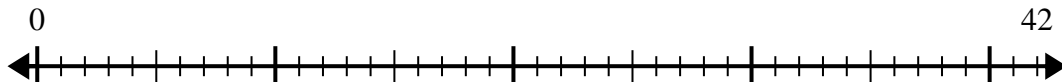
2) $28 \div 4 =$



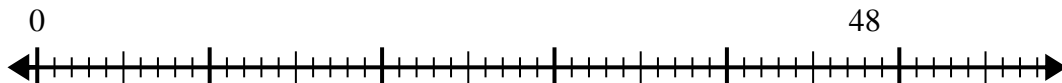
3) $30 \div 6 =$



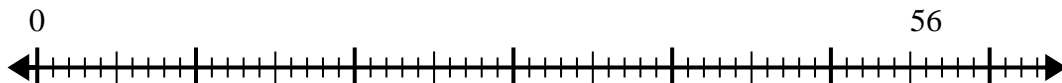
4) $42 \div 6 =$



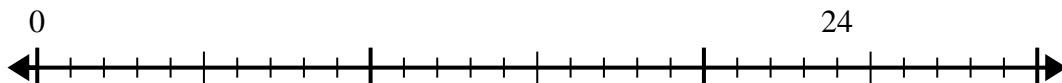
5) $48 \div 6 =$



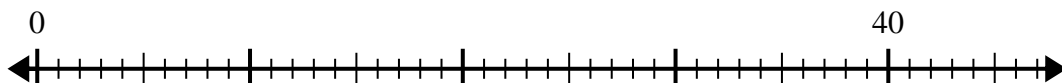
6) $56 \div 8 =$



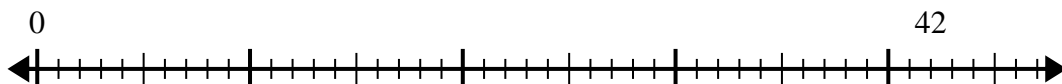
7) $24 \div 6 =$



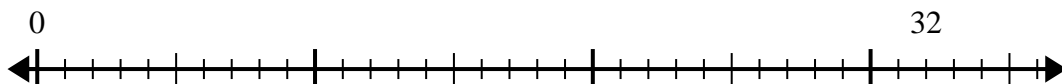
8) $40 \div 8 =$



9) $42 \div 7 =$



10) $32 \div 4 =$



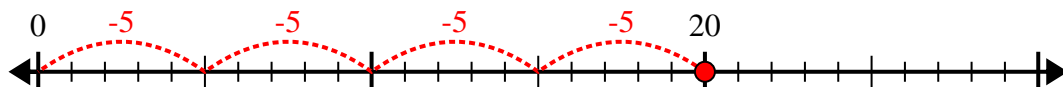
Answers

- 1. _____
- 2. _____
- 3. _____
- 4. _____
- 5. _____
- 6. _____
- 7. _____
- 8. _____
- 9. _____
- 10. _____

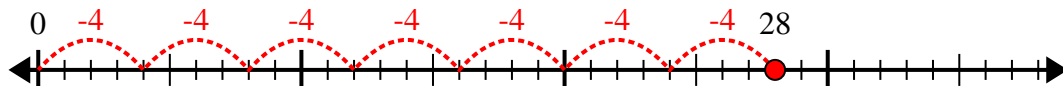


Use the number line to solve the division problem.

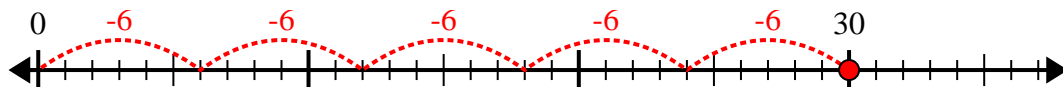
1) $20 \div 5 =$



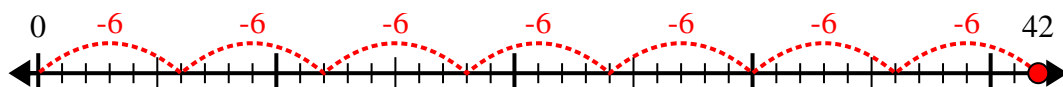
2) $28 \div 4 =$



3) $30 \div 6 =$



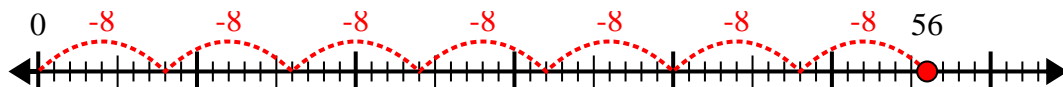
4) $42 \div 6 =$



5) $48 \div 6 =$



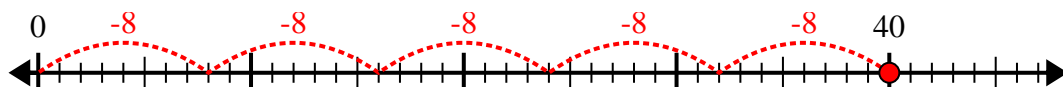
6) $56 \div 8 =$



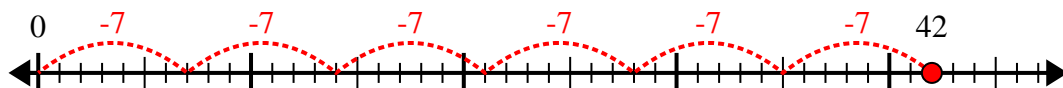
7) $24 \div 6 =$



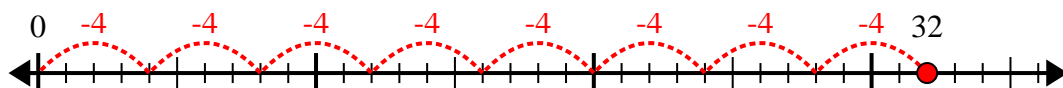
8) $40 \div 8 =$



9) $42 \div 7 =$



10) $32 \div 4 =$



Answers

1. 4

2. 7

3. 5

4. 7

5. 8

6. 7

7. 4

8. 5

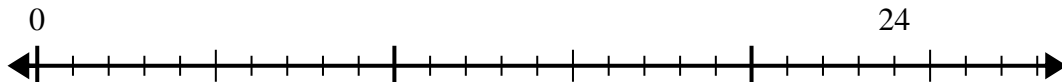
9. 6

10. 8

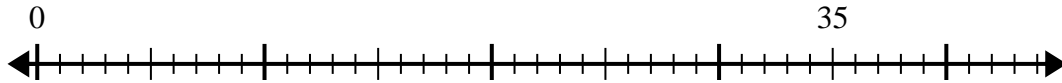


Use the number line to solve the division problem.

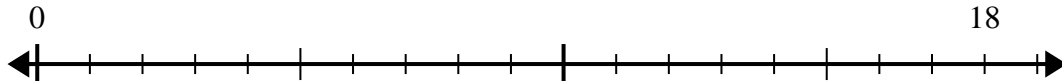
1) $24 \div 6 =$



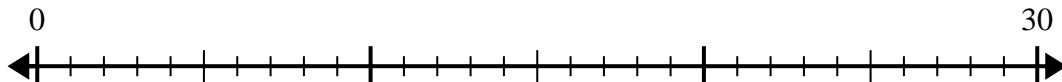
2) $35 \div 7 =$



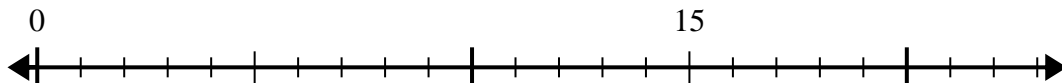
3) $18 \div 6 =$



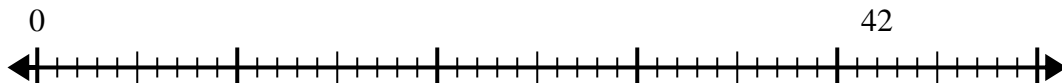
4) $30 \div 6 =$



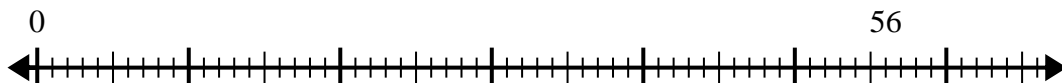
5) $15 \div 5 =$



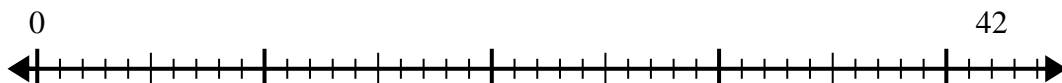
6) $42 \div 6 =$



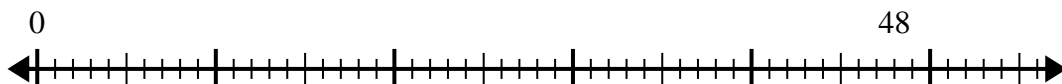
7) $56 \div 8 =$



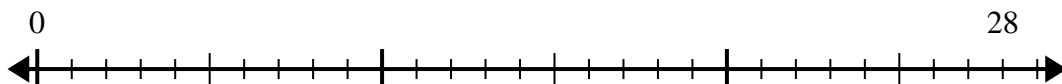
8) $42 \div 7 =$



9) $48 \div 8 =$



10) $28 \div 4 =$



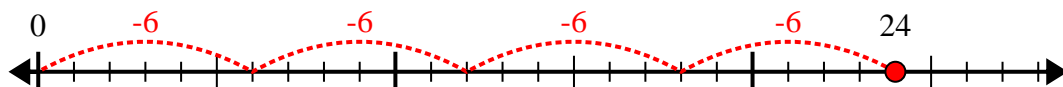
Answers

- 1. _____
- 2. _____
- 3. _____
- 4. _____
- 5. _____
- 6. _____
- 7. _____
- 8. _____
- 9. _____
- 10. _____

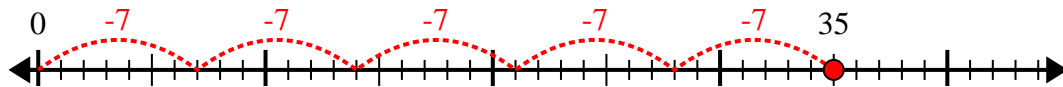


Use the number line to solve the division problem.

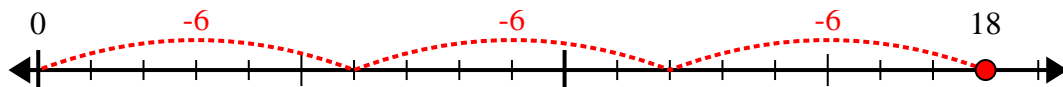
1) $24 \div 6 =$



2) $35 \div 7 =$



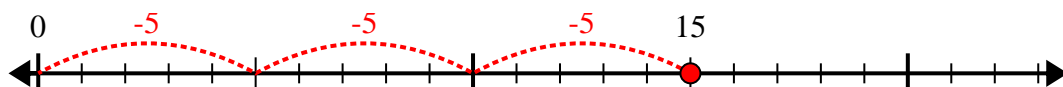
3) $18 \div 6 =$



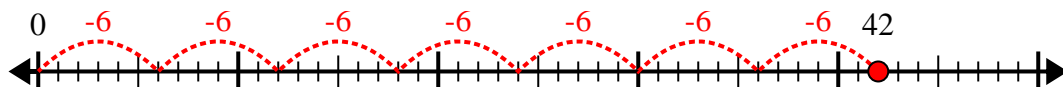
4) $30 \div 6 =$



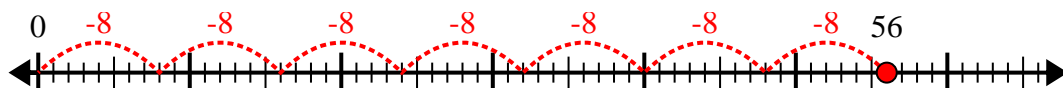
5) $15 \div 5 =$



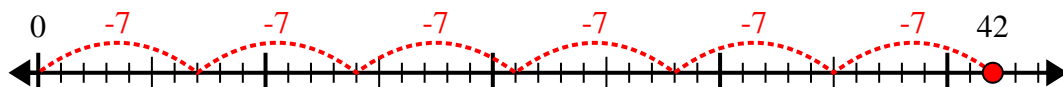
6) $42 \div 6 =$



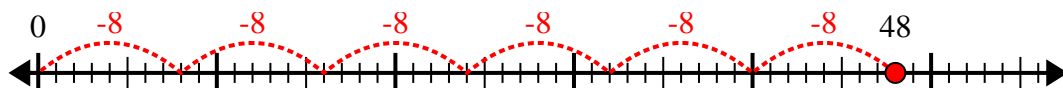
7) $56 \div 8 =$



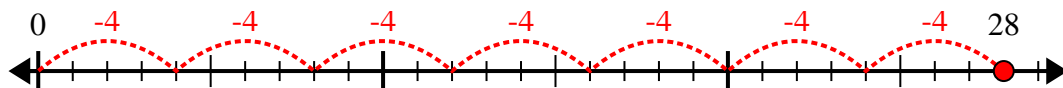
8) $42 \div 7 =$



9) $48 \div 8 =$



10) $28 \div 4 =$



Answers

1. 4

2. 5

3. 3

4. 5

5. 3

6. 7

7. 7

8. 6

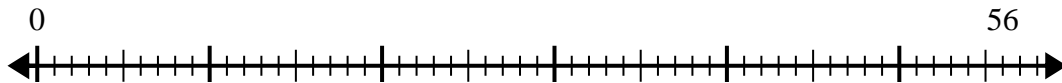
9. 6

10. 7

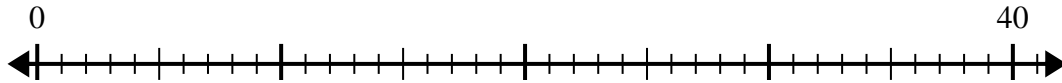


Use the number line to solve the division problem.

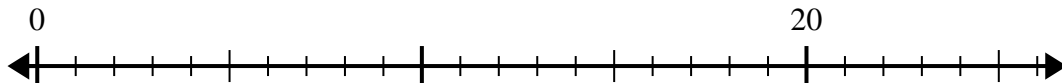
1) $56 \div 7 =$



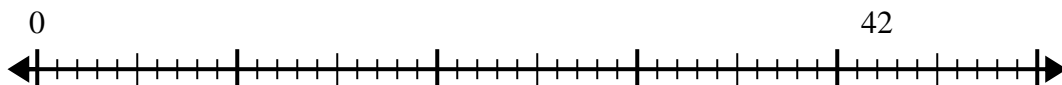
2) $40 \div 5 =$



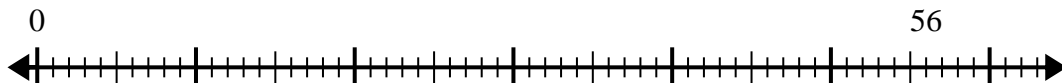
3) $20 \div 4 =$



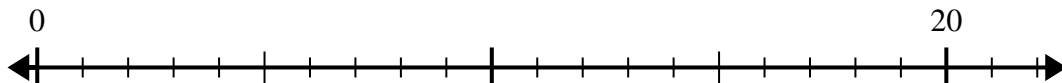
4) $42 \div 7 =$



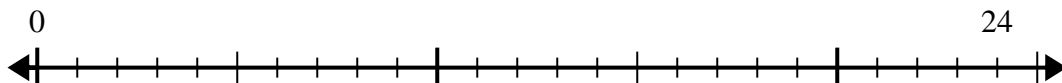
5) $56 \div 8 =$



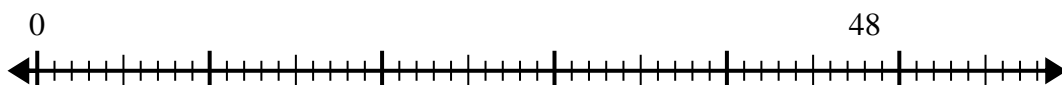
6) $20 \div 5 =$



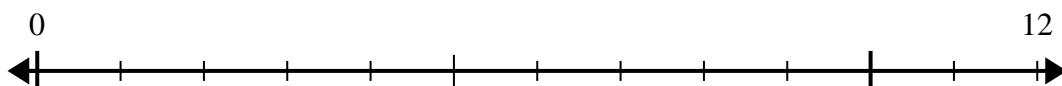
7) $24 \div 4 =$



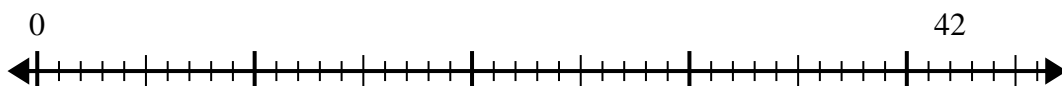
8) $48 \div 8 =$



9) $12 \div 4 =$



10) $42 \div 6 =$

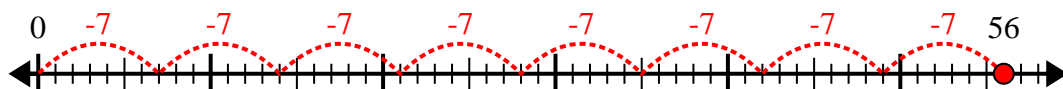
**Answers**

1. _____
2. _____
3. _____
4. _____
5. _____
6. _____
7. _____
8. _____
9. _____
10. _____

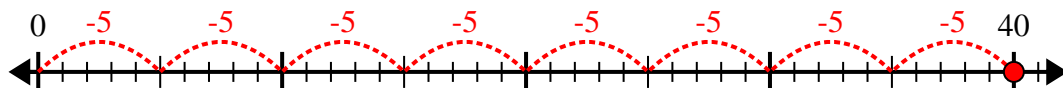


Use the number line to solve the division problem.

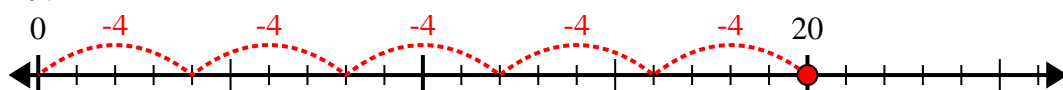
1) $56 \div 7 =$



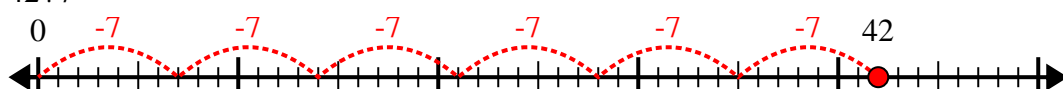
2) $40 \div 5 =$



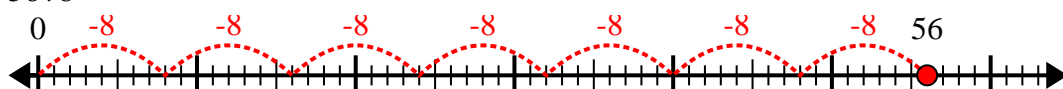
3) $20 \div 4 =$



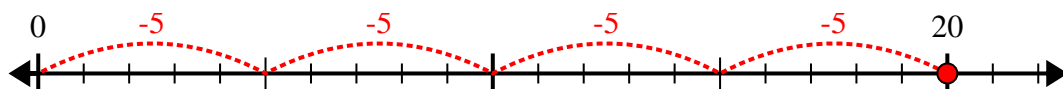
4) $42 \div 7 =$



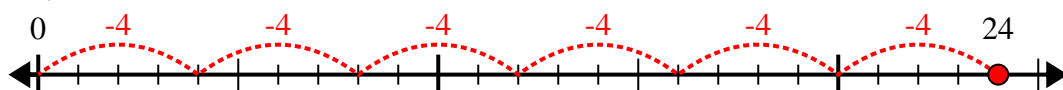
5) $56 \div 8 =$



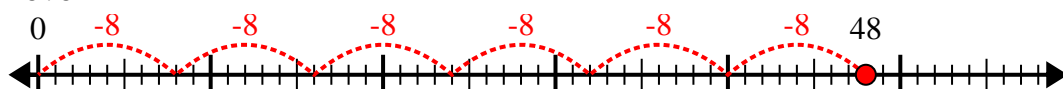
6) $20 \div 5 =$



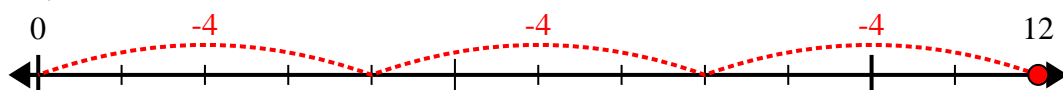
7) $24 \div 4 =$



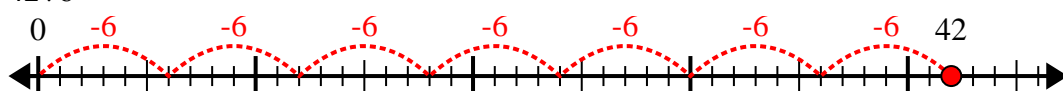
8) $48 \div 8 =$



9) $12 \div 4 =$



10) $42 \div 6 =$



Answers

1. 8

2. 8

3. 5

4. 6

5. 7

6. 4

7. 6

8. 6

9. 3

10. 7

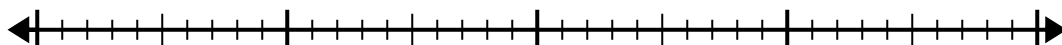


Use the number line to solve the division problem.

1) $30 \div 6 =$

0

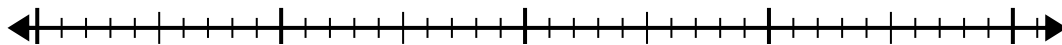
30



2) $32 \div 4 =$

0

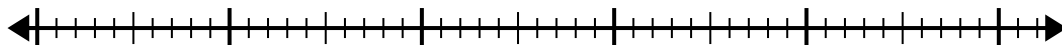
32



3) $42 \div 7 =$

0

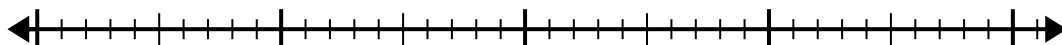
42



4) $40 \div 5 =$

0

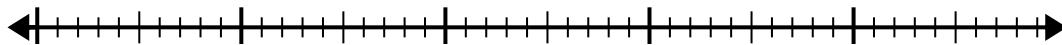
40



5) $40 \div 8 =$

0

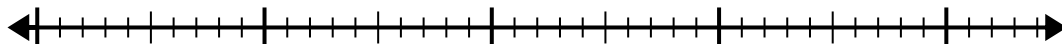
40



6) $42 \div 6 =$

0

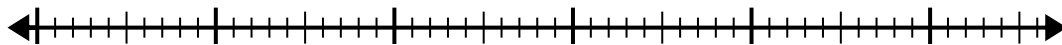
42



7) $48 \div 6 =$

0

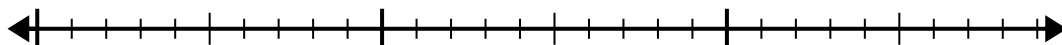
48



8) $20 \div 4 =$

0

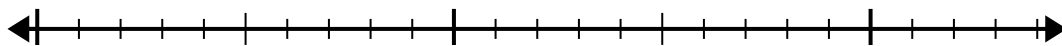
20



9) $20 \div 5 =$

0

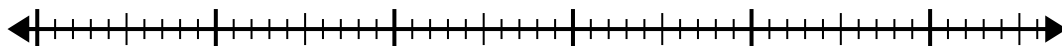
20



10) $56 \div 8 =$

0

56

**Answers**

1. _____

2. _____

3. _____

4. _____

5. _____

6. _____

7. _____

8. _____

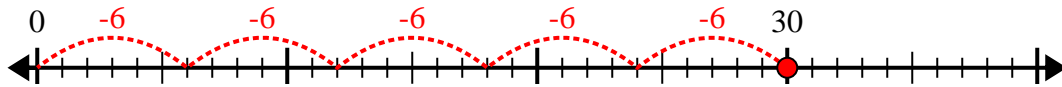
9. _____

10. _____

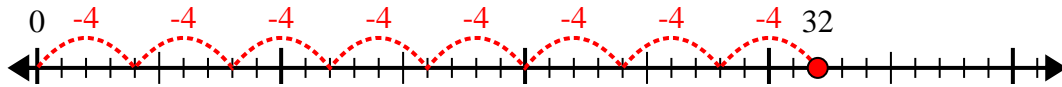


Use the number line to solve the division problem.

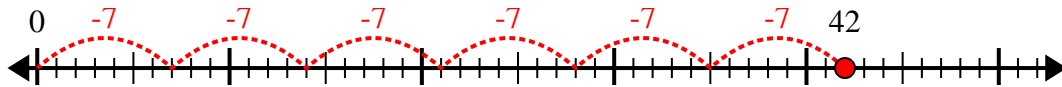
1) $30 \div 6 =$



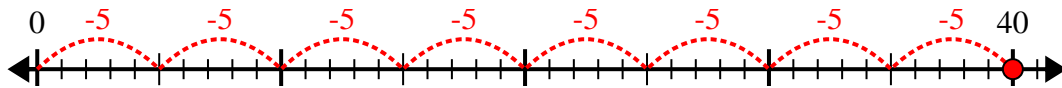
2) $32 \div 4 =$



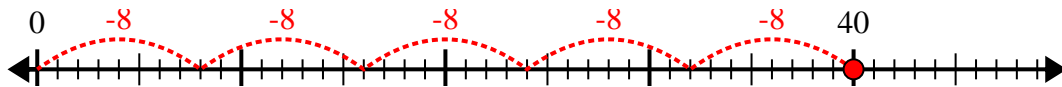
3) $42 \div 7 =$



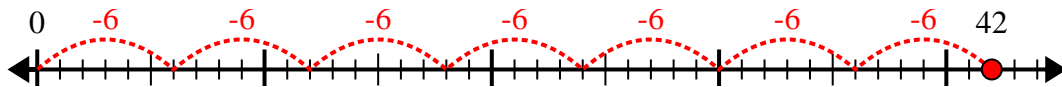
4) $40 \div 5 =$



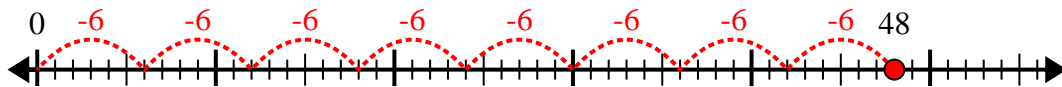
5) $40 \div 8 =$



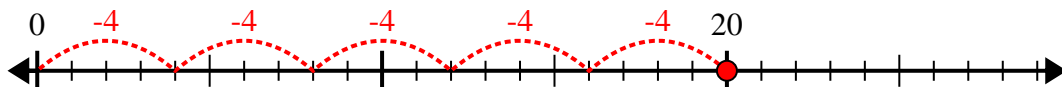
6) $42 \div 6 =$



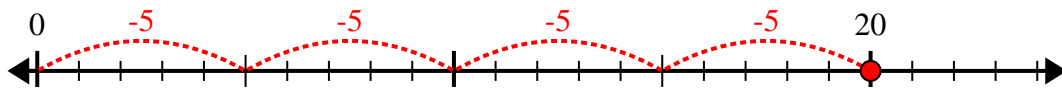
7) $48 \div 6 =$



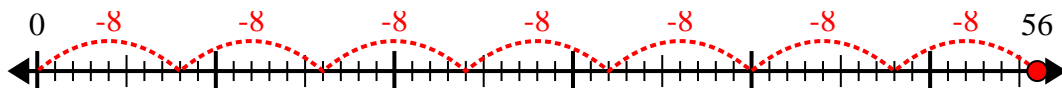
8) $20 \div 4 =$



9) $20 \div 5 =$



10) $56 \div 8 =$



Answers

1. 5

2. 8

3. 6

4. 8

5. 5

6. 7

7. 8

8. 5

9. 4

10. 7

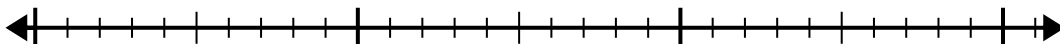


Use the number line to solve the division problem.

1) $24 \div 8 =$

0


24



2) $56 \div 8 =$

0

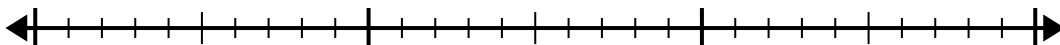
56



3) $24 \div 4 =$

0

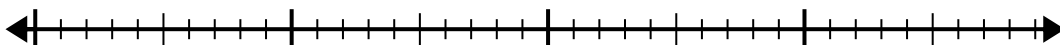
24



4) $32 \div 4 =$

0

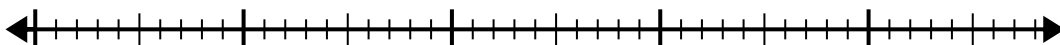
32



5) $48 \div 8 =$

0

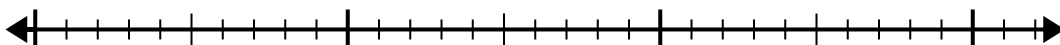
48



6) $24 \div 6 =$

0

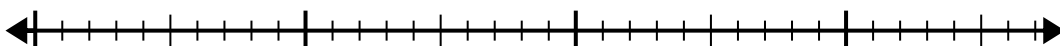
24



7) $28 \div 4 =$

0

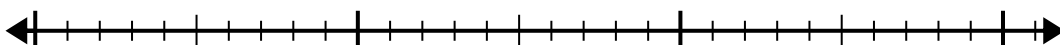
28



8) $21 \div 7 =$

0

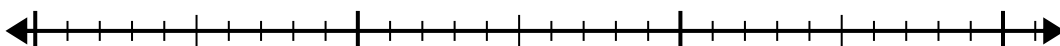
21



9) $28 \div 7 =$

0

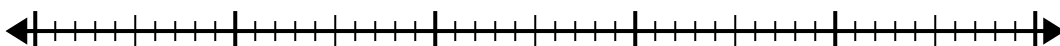
28



10) $40 \div 5 =$

0

40



Answers

1. _____

2. _____

3. _____

4. _____

5. _____

6. _____

7. _____

8. _____

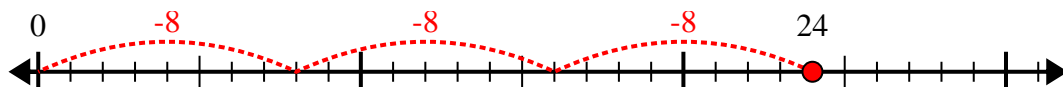
9. _____

10. _____

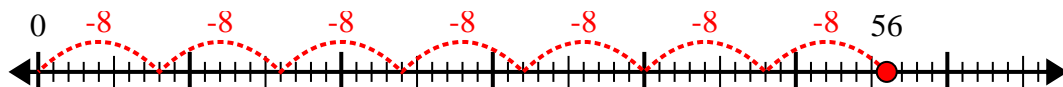


Use the number line to solve the division problem.

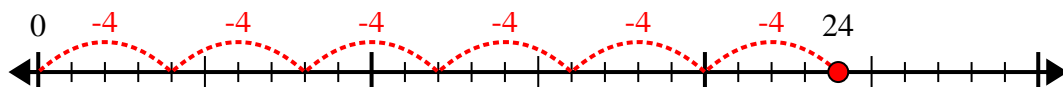
1) $24 \div 8 =$



2) $56 \div 8 =$



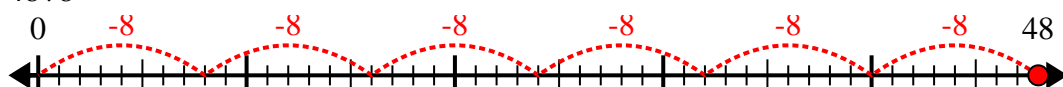
3) $24 \div 4 =$



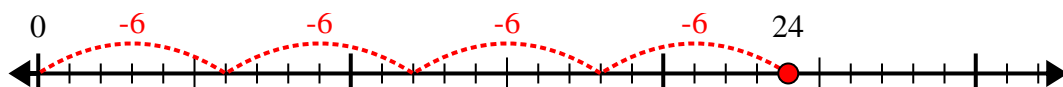
4) $32 \div 4 =$



5) $48 \div 8 =$



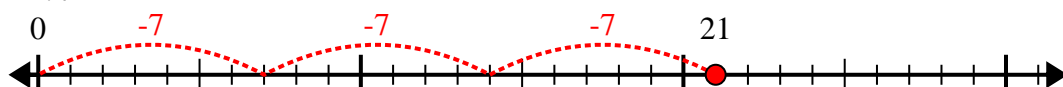
6) $24 \div 6 =$



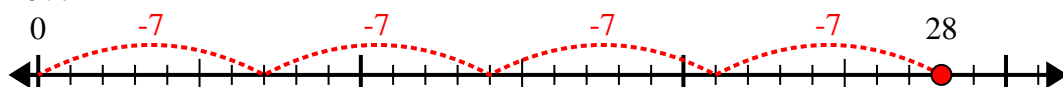
7) $28 \div 4 =$



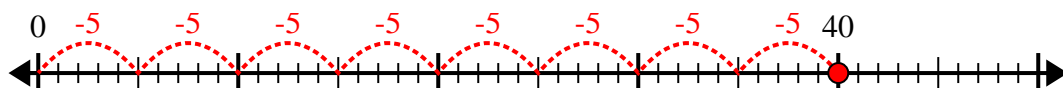
8) $21 \div 7 =$



9) $28 \div 7 =$



10) $40 \div 5 =$



Answers

1. 3

2. 7

3. 6

4. 8

5. 6

6. 4

7. 7

8. 3

9. 4

10. 8

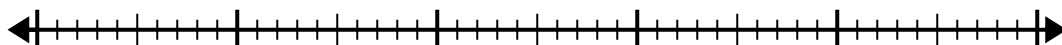


Use the number line to solve the division problem.

1) $40 \div 5 =$

0

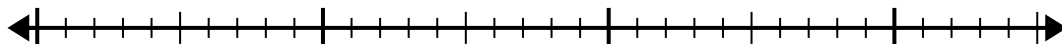
40



2) $28 \div 4 =$

0

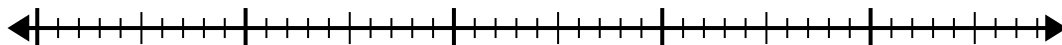
28



3) $42 \div 6 =$

0

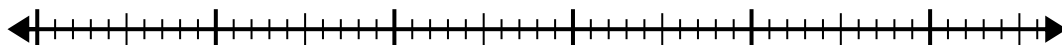
42



4) $56 \div 8 =$

0


56



5) $56 \div 7 =$

0

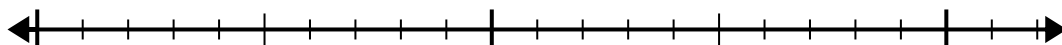
56



6) $20 \div 5 =$

0

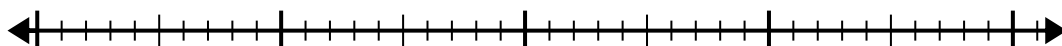
20



7) $35 \div 7 =$

0

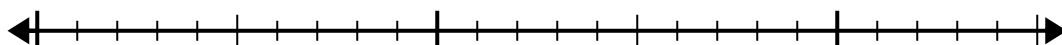
35



8) $24 \div 8 =$

0

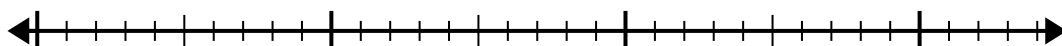
24



9) $30 \div 5 =$

0

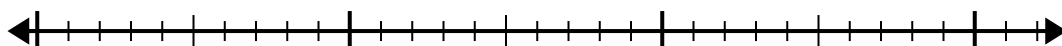
30



10) $32 \div 4 =$

0

32

**Answers**

1. _____

2. _____

3. _____

4. _____

5. _____

6. _____

7. _____

8. _____

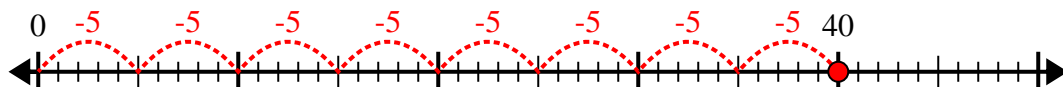
9. _____

10. _____

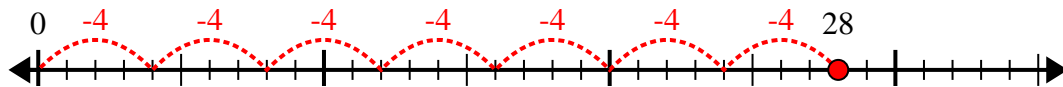


Use the number line to solve the division problem.

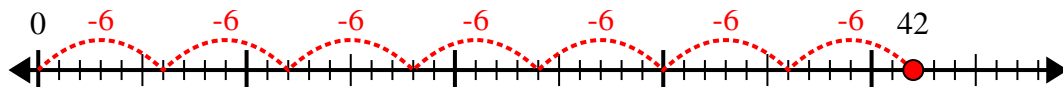
1) $40 \div 5 =$



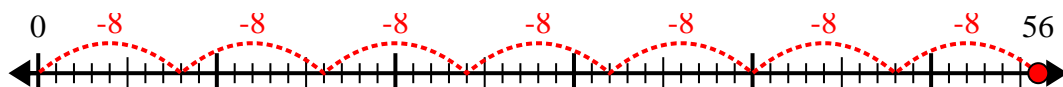
2) $28 \div 4 =$



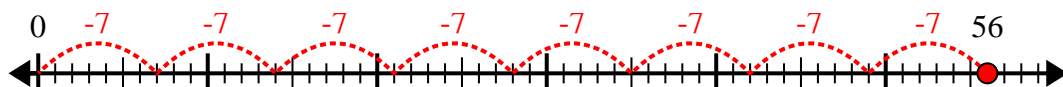
3) $42 \div 6 =$



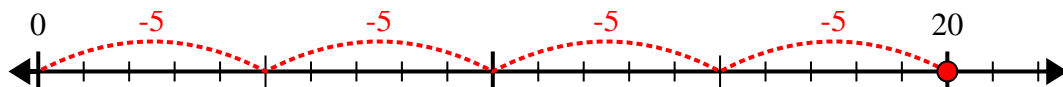
4) $56 \div 8 =$



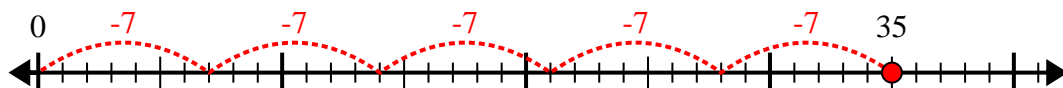
5) $56 \div 7 =$



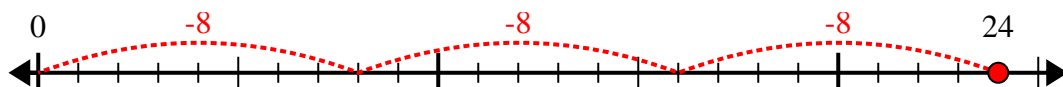
6) $20 \div 5 =$



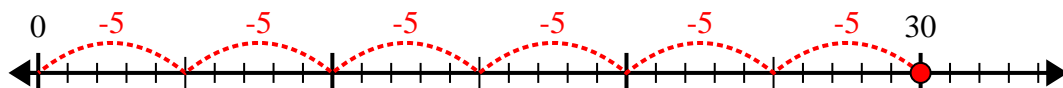
7) $35 \div 7 =$



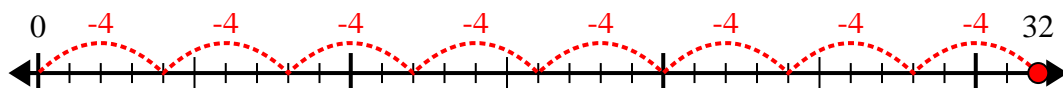
8) $24 \div 8 =$



9) $30 \div 5 =$



10) $32 \div 4 =$



Answers

1. 8

2. 7

3. 7

4. 7

5. 8

6. 4

7. 5

8. 3

9. 6

10. 8

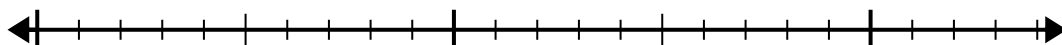


Use the number line to solve the division problem.

1) $24 \div 4 =$

0

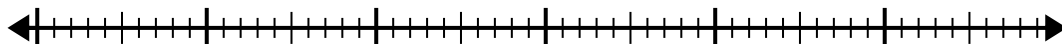
24



2) $56 \div 8 =$

0

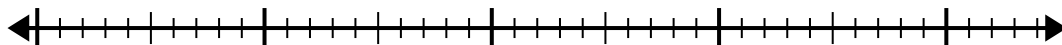
56



3) $35 \div 5 =$

0

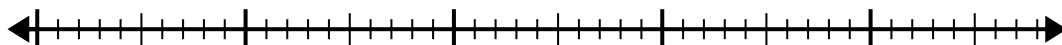
35



4) $48 \div 8 =$

0

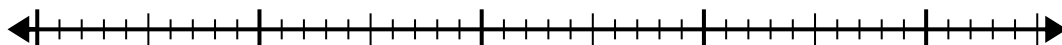
48



5) $42 \div 6 =$

0

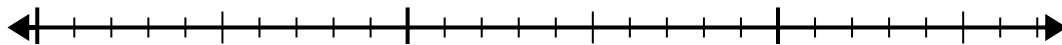
42



6) $24 \div 6 =$

0

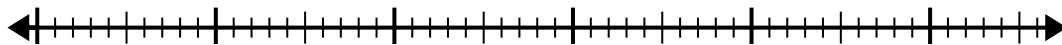
24



7) $48 \div 6 =$

0

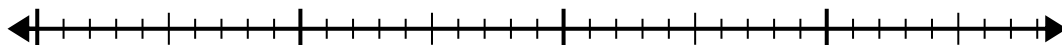
48



8) $30 \div 5 =$

0

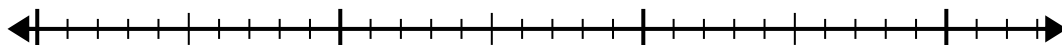
30



9) $28 \div 7 =$

0

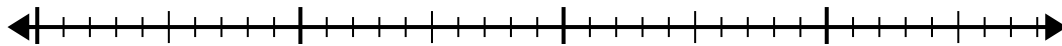
28



10) $28 \div 4 =$

0

28

**Answers**

1. _____

2. _____

3. _____

4. _____

5. _____

6. _____

7. _____

8. _____

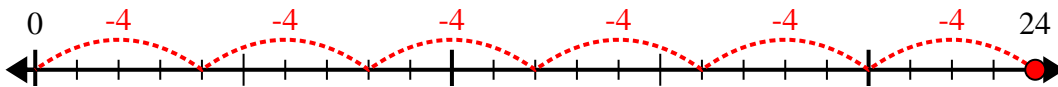
9. _____

10. _____

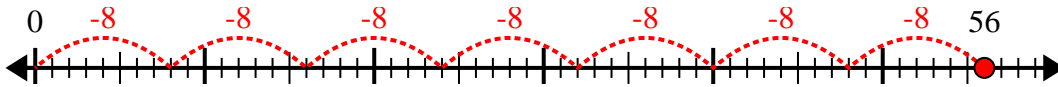


Use the number line to solve the division problem.

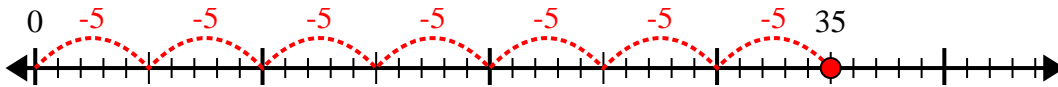
1) $24 \div 4 =$



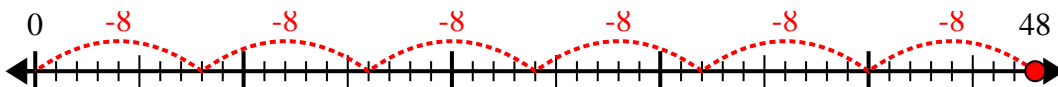
2) $56 \div 8 =$



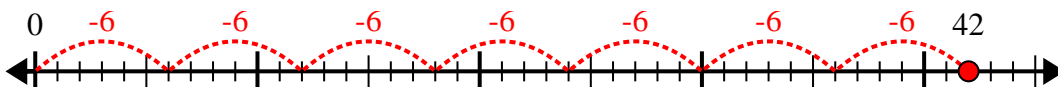
3) $35 \div 5 =$



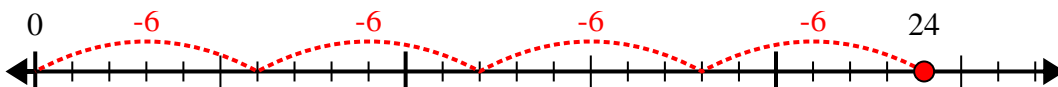
4) $48 \div 8 =$



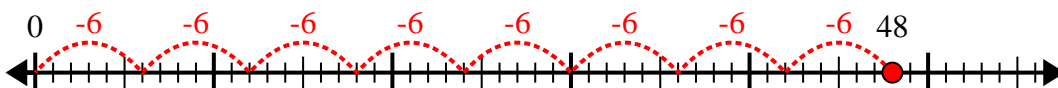
5) $42 \div 6 =$



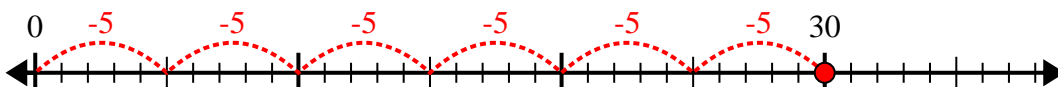
6) $24 \div 6 =$



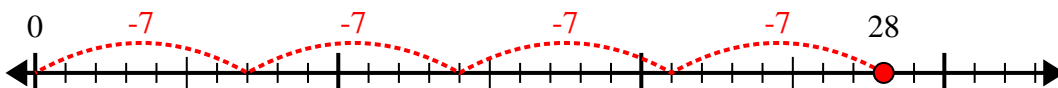
7) $48 \div 6 =$



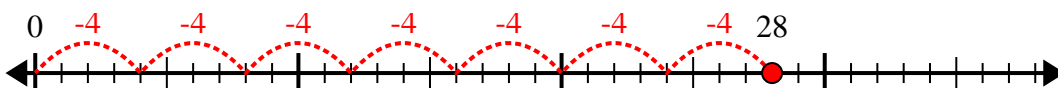
8) $30 \div 5 =$



9) $28 \div 7 =$



10) $28 \div 4 =$



Answers

1. 6

2. 7

3. 7

4. 6

5. 7

6. 4

7. 8

8. 6

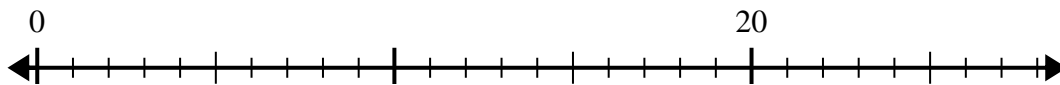
9. 4

10. 7

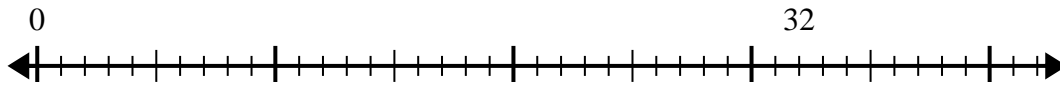


Use the number line to solve the division problem.

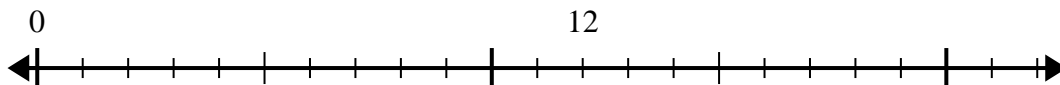
1) $20 \div 4 =$



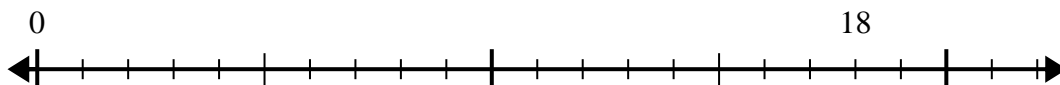
2) $32 \div 8 =$



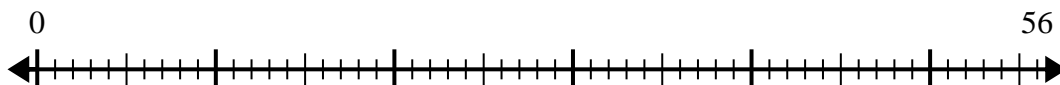
3) $12 \div 4 =$



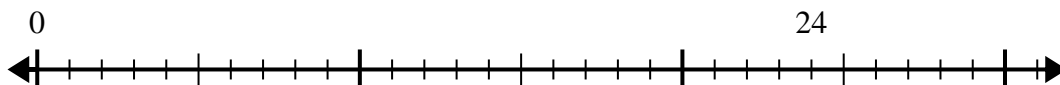
4) $18 \div 6 =$



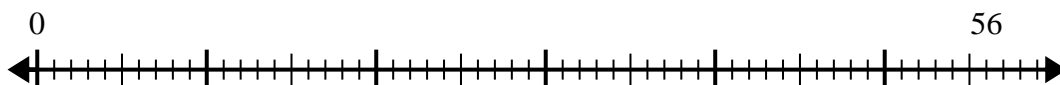
5) $56 \div 8 =$



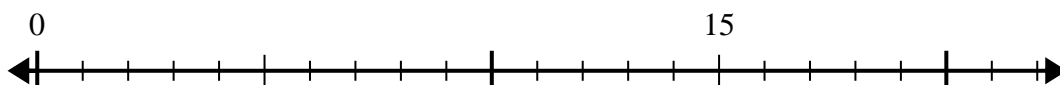
6) $24 \div 8 =$



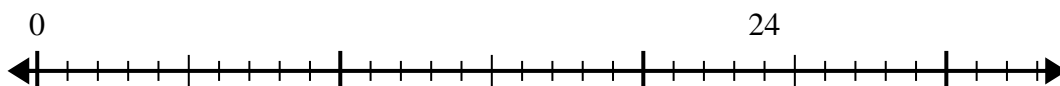
7) $56 \div 7 =$



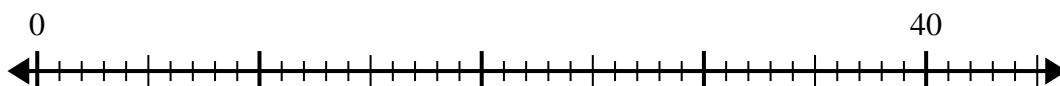
8) $15 \div 5 =$



9) $24 \div 4 =$



10) $40 \div 5 =$

**Answers**

1. _____

2. _____

3. _____

4. _____

5. _____

6. _____

7. _____

8. _____

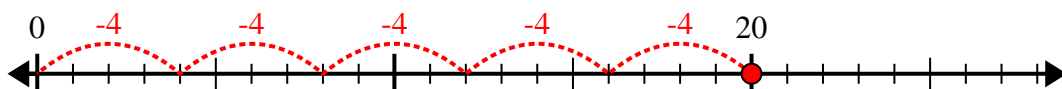
9. _____

10. _____

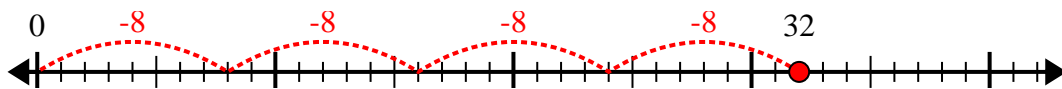


Use the number line to solve the division problem.

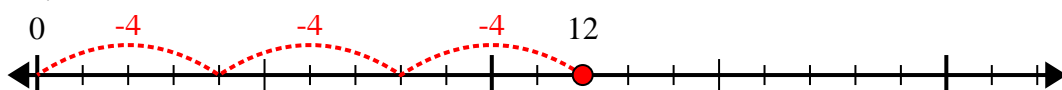
1) $20 \div 4 =$



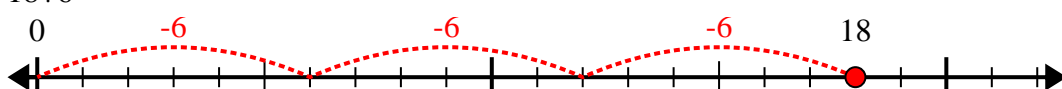
2) $32 \div 8 =$



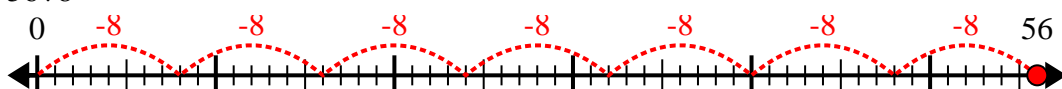
3) $12 \div 4 =$



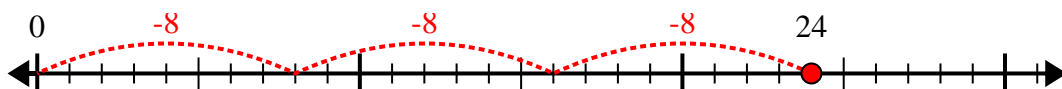
4) $18 \div 6 =$



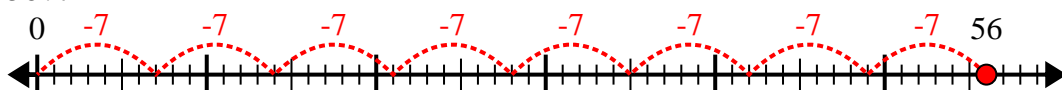
5) $56 \div 8 =$



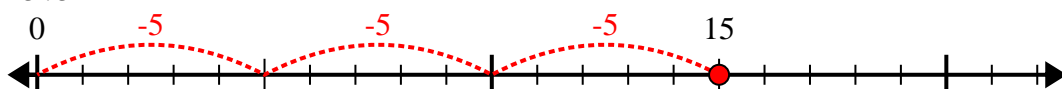
6) $24 \div 8 =$



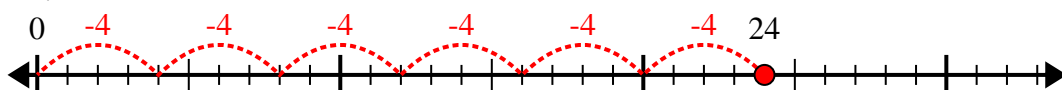
7) $56 \div 7 =$



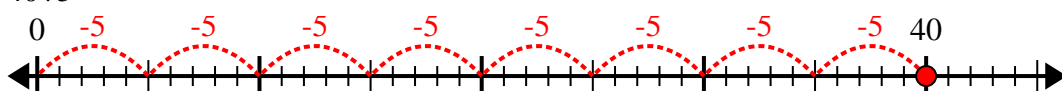
8) $15 \div 5 =$



9) $24 \div 4 =$



10) $40 \div 5 =$



Answers

1. 5

2. 4

3. 3

4. 3

5. 7

6. 3

7. 8

8. 3

9. 6

10. 8