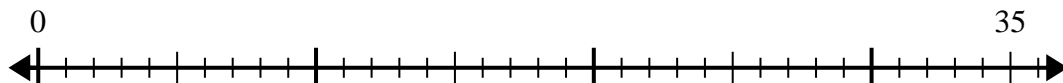


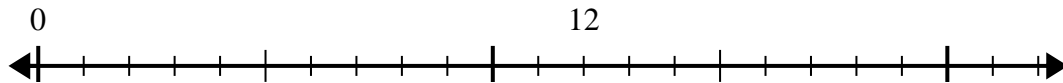


Use the number line to solve the division problem.

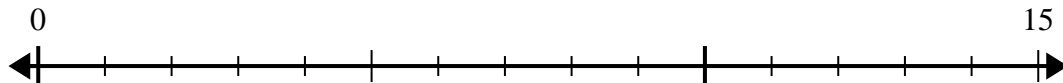
1) $35 \div 5 =$



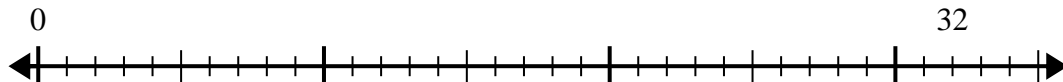
2) $12 \div 4 =$



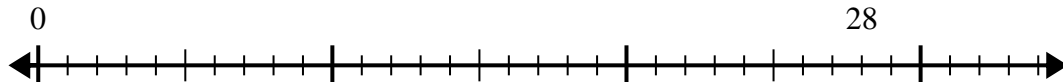
3) $15 \div 5 =$



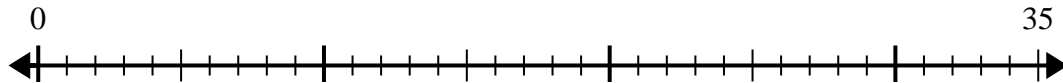
4) $32 \div 4 =$



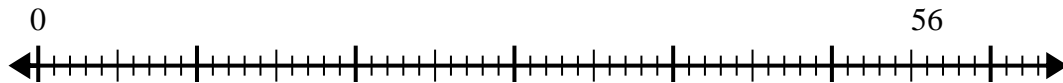
5) $28 \div 7 =$



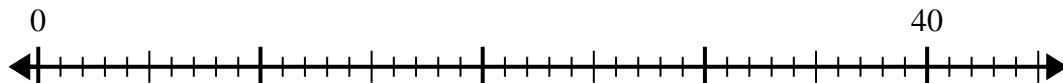
6) $35 \div 7 =$



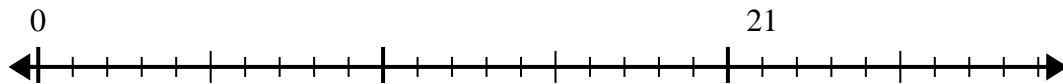
7) $56 \div 8 =$



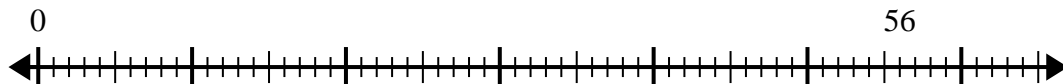
8) $40 \div 8 =$



9) $21 \div 7 =$



10) $56 \div 7 =$



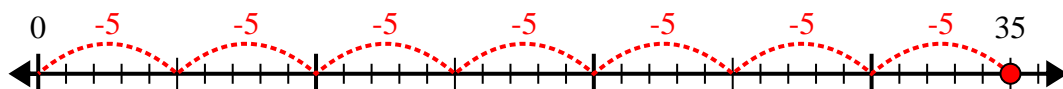
Answers

- 1. _____
- 2. _____
- 3. _____
- 4. _____
- 5. _____
- 6. _____
- 7. _____
- 8. _____
- 9. _____
- 10. _____

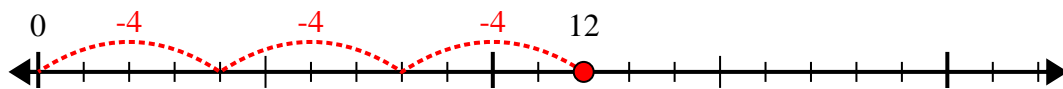


Use the number line to solve the division problem.

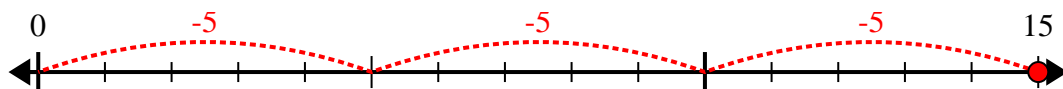
1) $35 \div 5 =$



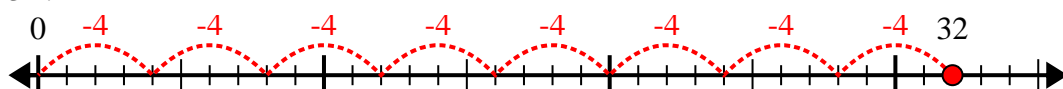
2) $12 \div 4 =$



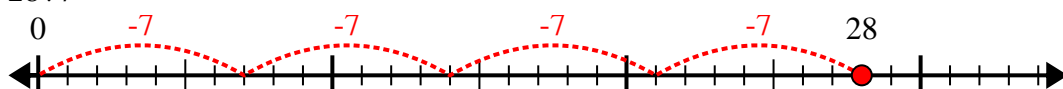
3) $15 \div 5 =$



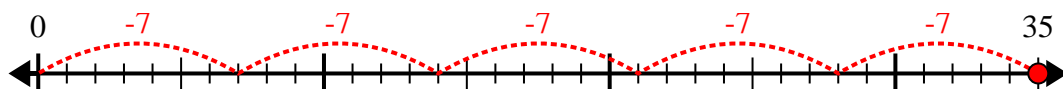
4) $32 \div 4 =$



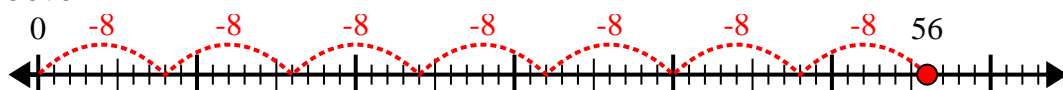
5) $28 \div 7 =$



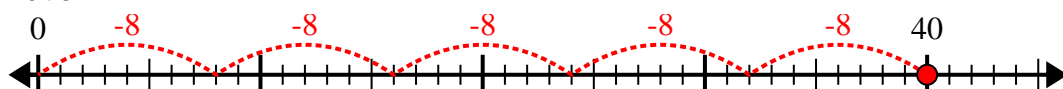
6) $35 \div 7 =$



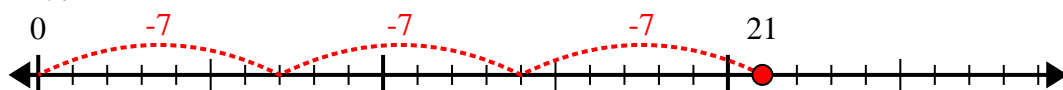
7) $56 \div 8 =$



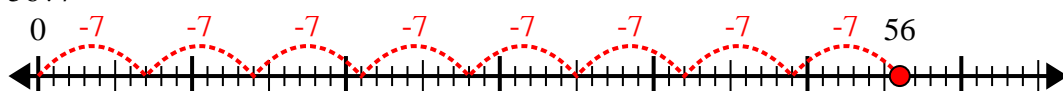
8) $40 \div 8 =$



9) $21 \div 7 =$



10) $56 \div 7 =$



Answers

1. 7

2. 3

3. 3

4. 8

5. 4

6. 5

7. 7

8. 5

9. 3

10. 8