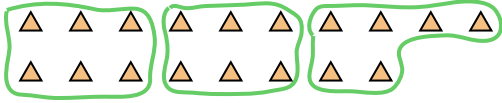




Use the shapes provided to answer the questions.

Ex) How many groups of 6 can you make with the 18 shapes below?



1) How many groups of 3 can you make with the 21 shapes below?



Answers

Ex. 3

1. _____

2. _____

3. _____

4. _____

5. _____

6. _____

7. _____


8. _____

9. _____

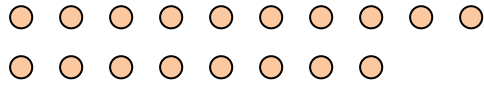
10. _____

11. _____

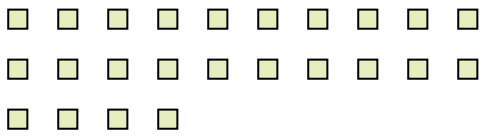
2) How many groups of 5 can you make with the 25 shapes below?




3) How many groups of 6 can you make with the 18 shapes below?




4) How many groups of 6 can you make with the 24 shapes below?



5) How many groups of 5 can you make with the 40 shapes below?




6) How many groups of 5 can you make with the 40 shapes below?



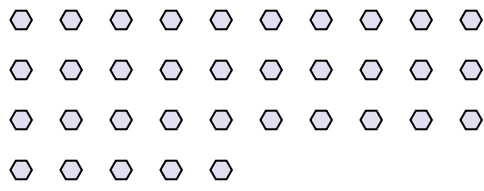
7) How many groups of 4 can you make with the 28 shapes below?




8) How many groups of 7 can you make with the 21 shapes below?



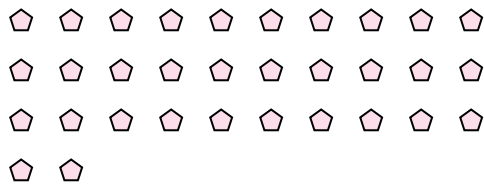
9) How many groups of 7 can you make with the 35 shapes below?



10) How many groups of 8 can you make with the 32 shapes below?



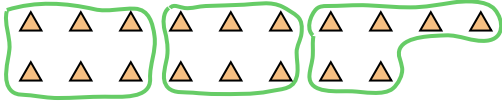
11) How many groups of 2 can you make with the 32 shapes below?





Use the shapes provided to answer the questions.


Ex) How many groups of 6 can you make with the 18 shapes below?



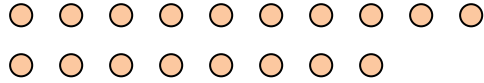
1) How many groups of 3 can you make with the 21 shapes below?



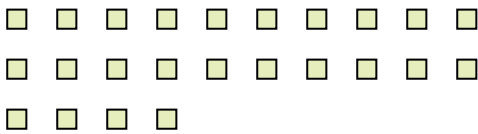
2) How many groups of 5 can you make with the 25 shapes below?




3) How many groups of 6 can you make with the 18 shapes below?




4) How many groups of 6 can you make with the 24 shapes below?



5) How many groups of 5 can you make with the 40 shapes below?




6) How many groups of 5 can you make with the 40 shapes below?



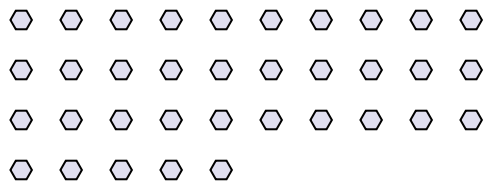
7) How many groups of 4 can you make with the 28 shapes below?




8) How many groups of 7 can you make with the 21 shapes below?



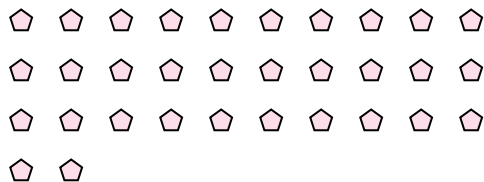
9) How many groups of 7 can you make with the 35 shapes below?



10) How many groups of 8 can you make with the 32 shapes below?



11) How many groups of 2 can you make with the 32 shapes below?



Answers

Ex. 3

1. 7

2. 5

3. 3

4. 4

5. 8

6. 8

7. 7

8. 3

9. 5

10. 4

11. 16