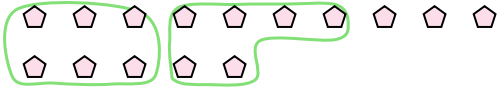




Use the shapes provided to answer the questions.

Answers

Ex) There are 15 shapes below. How many groups of 6 can you make with them? How many will you have left over?



1) There are 10 shapes below. How many groups of 7 can you make with them? How many will you have left over?

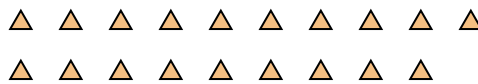


Ex. 2 3

2) There are 10 shapes below. How many groups of 3 can you make with them? How many will you have left over?



3) There are 19 shapes below. How many groups of 6 can you make with them? How many will you have left over?



1. _____

2. _____

3. _____

4. _____

5. _____

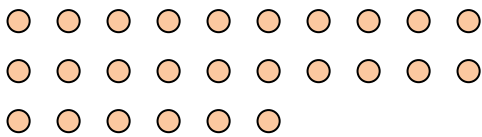
6. _____

7. _____

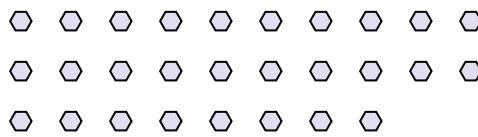
8. _____

9. _____

4) There are 26 shapes below. How many groups of 8 can you make with them? How many will you have left over?




5) There are 28 shapes below. How many groups of 8 can you make with them? How many will you have left over?



6) There are 18 shapes below. How many groups of 4 can you make with them? How many will you have left over?



7) There are 28 shapes below. How many groups of 7 can you make with them? How many will you have left over?



8) There are 22 shapes below. How many groups of 3 can you make with them? How many will you have left over?



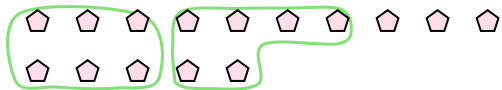
9) There are 20 shapes below. How many groups of 2 can you make with them? How many will you have left over?





Use the shapes provided to answer the questions.

Ex) There are 15 shapes below. How many groups of 6 can you make with them? How many will you have left over?



1) There are 10 shapes below. How many groups of 7 can you make with them? How many will you have left over?



Answers

Ex. 2 3

1. 1 3

2. 3 1

3. 3 1

4. 3 2

5. 3 4

6. 4 2

7. 4 0

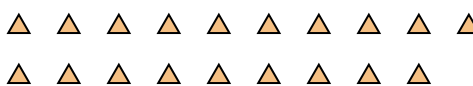
8. 7 1

9. 10 0

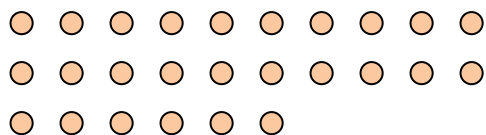
2) There are 10 shapes below. How many groups of 3 can you make with them? How many will you have left over?



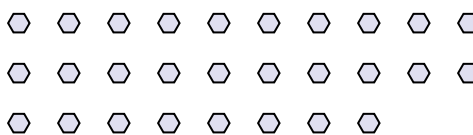
3) There are 19 shapes below. How many groups of 6 can you make with them? How many will you have left over?



4) There are 26 shapes below. How many groups of 8 can you make with them? How many will you have left over?




5) There are 28 shapes below. How many groups of 8 can you make with them? How many will you have left over?



6) There are 18 shapes below. How many groups of 4 can you make with them? How many will you have left over?



7) There are 28 shapes below. How many groups of 7 can you make with them? How many will you have left over?



8) There are 22 shapes below. How many groups of 3 can you make with them? How many will you have left over?



9) There are 20 shapes below. How many groups of 2 can you make with them? How many will you have left over?

