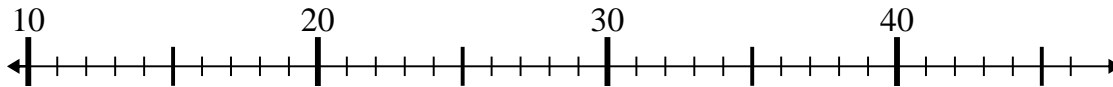




Use the numberlines to solve each problem.

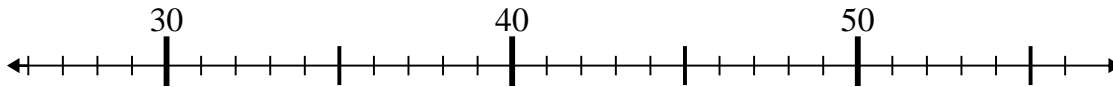
Answers

1)  $24 - 11 =$



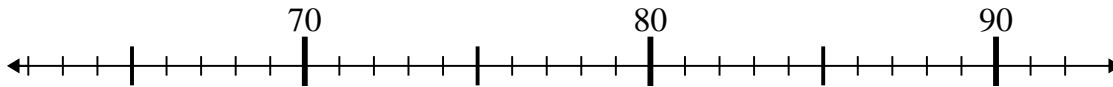
1. \_\_\_\_\_

2)  $29 + 6 =$



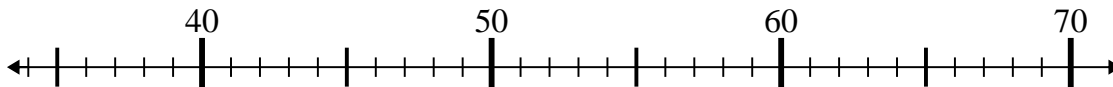
2. \_\_\_\_\_

3)  $72 + 7 =$



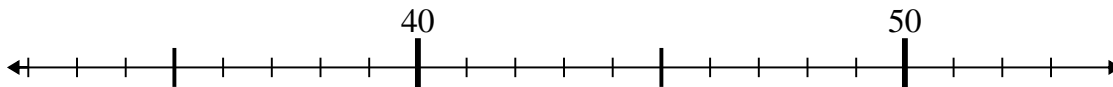
3. \_\_\_\_\_

4)  $41 + 16 =$



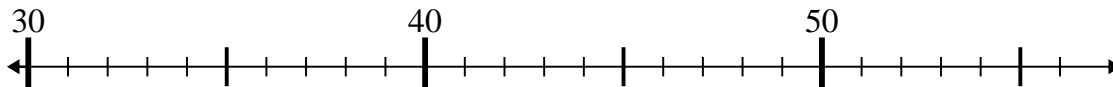
4. \_\_\_\_\_

5)  $51 - 3 =$



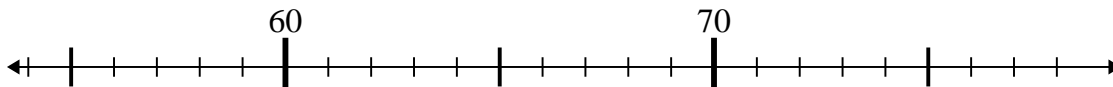
5. \_\_\_\_\_

6)  $35 - 0 =$



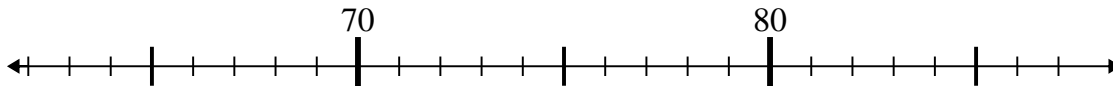
6. \_\_\_\_\_

7)  $65 + 10 =$



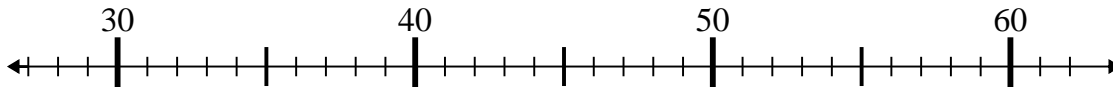
7. \_\_\_\_\_

8)  $65 + 14 =$



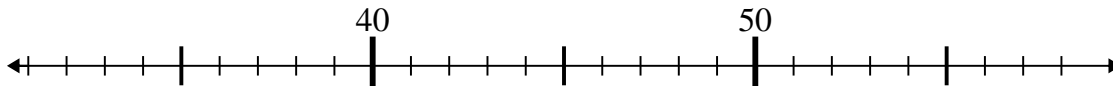
8. \_\_\_\_\_

9)  $57 - 16 =$



9. \_\_\_\_\_

10)  $58 - 19 =$

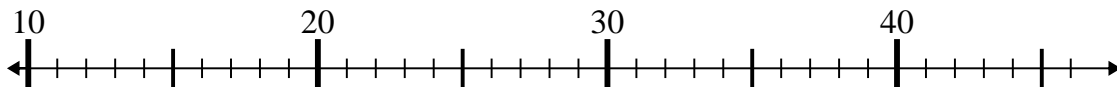


10. \_\_\_\_\_

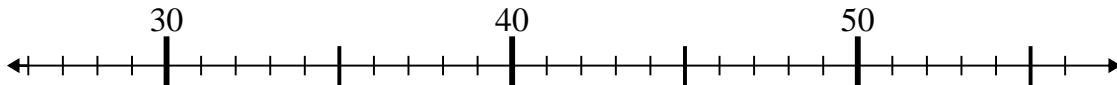


Use the numberlines to solve each problem.

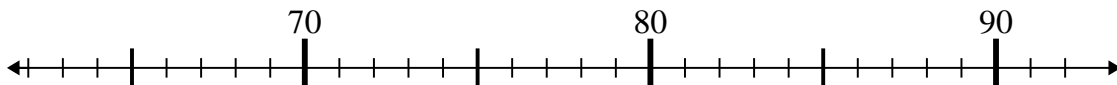
1)  $24 - 11 =$



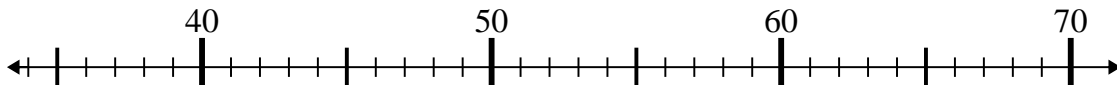
2)  $29 + 6 =$



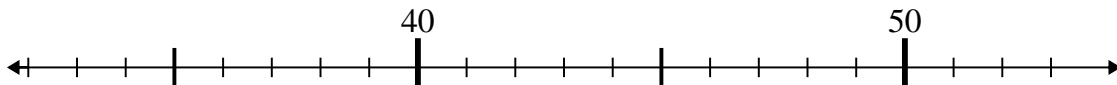
3)  $72 + 7 =$



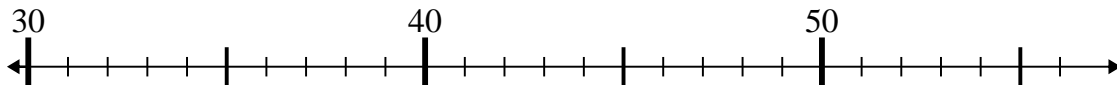
4)  $41 + 16 =$



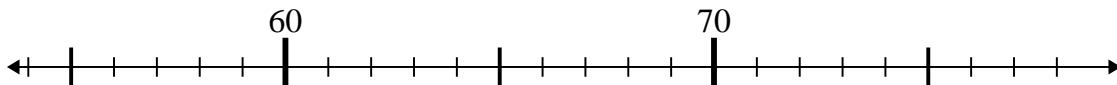
5)  $51 - 3 =$



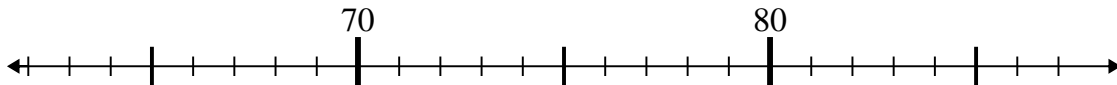
6)  $35 - 0 =$



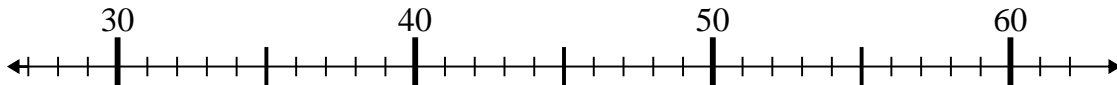
7)  $65 + 10 =$



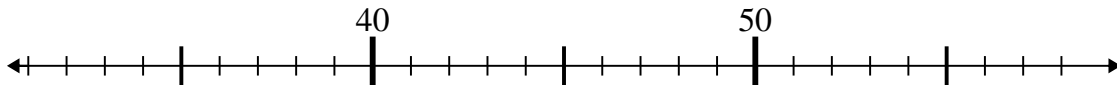
8)  $65 + 14 =$



9)  $57 - 16 =$



10)  $58 - 19 =$



Answers

1. 13

2. 35

3. 79

4. 57

5. 48

6. 35

7. 75

8. 79

9. 41

10. 39