



Determine which letter best represents the sum.

1) $\frac{1}{8} + \frac{2}{8}$

3) $\frac{2}{6} + \frac{3}{6}$

5) $\frac{3}{5} + \frac{1}{5}$

7) $\frac{1}{2} + \frac{1}{2}$

9) $\frac{3}{6} + \frac{5}{6}$

11) $\frac{3}{10} + \frac{5}{10}$

13) $\frac{5}{8} + \frac{2}{8}$

2) $\frac{4}{6} + \frac{3}{6}$

4) $\frac{4}{6} + \frac{2}{6}$

6) $\frac{3}{4} + \frac{3}{4}$

8) $\frac{4}{5} + \frac{4}{5}$

10) $\frac{2}{10} + \frac{9}{10}$

12) $\frac{1}{6} + \frac{1}{6}$

14) $\frac{2}{8} + \frac{2}{8}$

Answers

1. _____

2. _____

3. _____

4. _____

5. _____

6. _____

7. _____

8. _____

9. _____

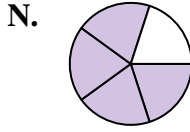
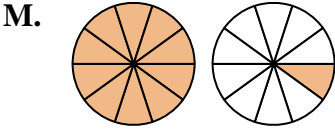
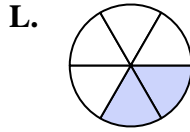
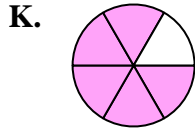
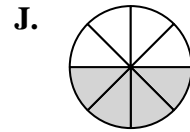
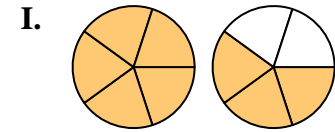
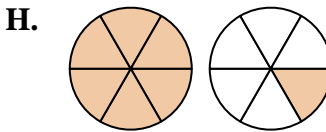
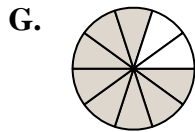
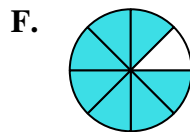
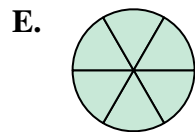
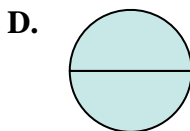
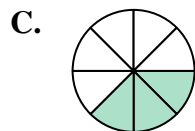
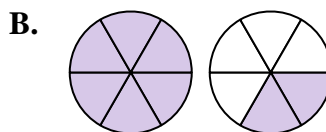
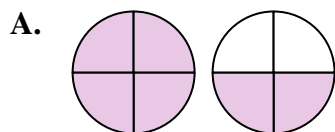
10. _____

11. _____

12. _____

13. _____

14. _____





Determine which letter best represents the sum.

1) $\frac{1}{8} + \frac{2}{8}$

3) $\frac{2}{6} + \frac{3}{6}$

5) $\frac{3}{5} + \frac{1}{5}$

7) $\frac{1}{2} + \frac{1}{2}$

9) $\frac{3}{6} + \frac{5}{6}$

11) $\frac{3}{10} + \frac{5}{10}$

13) $\frac{5}{8} + \frac{2}{8}$

2) $\frac{4}{6} + \frac{3}{6}$

4) $\frac{4}{6} + \frac{2}{6}$

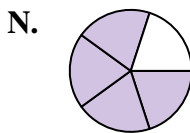
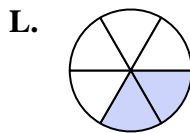
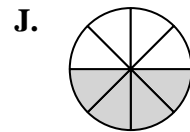
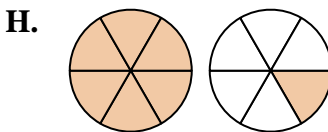
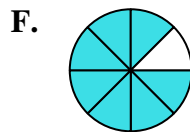
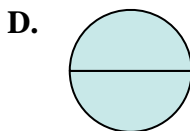
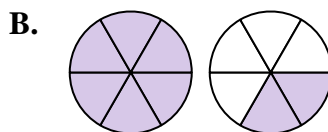
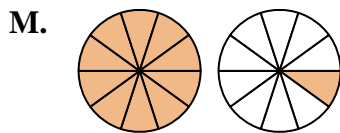
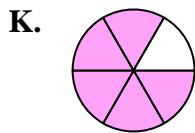
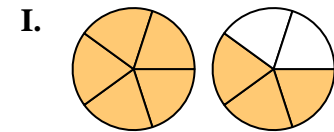
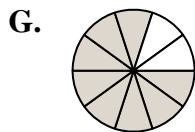
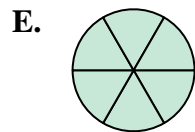
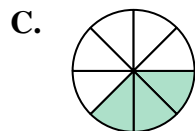
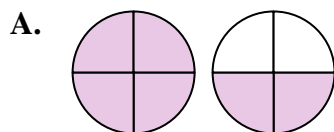
6) $\frac{3}{4} + \frac{3}{4}$

8) $\frac{4}{5} + \frac{4}{5}$

10) $\frac{2}{10} + \frac{9}{10}$

12) $\frac{1}{6} + \frac{1}{6}$

14) $\frac{2}{8} + \frac{2}{8}$



Answers

1. **C** $\frac{3}{8}$

2. **H** $1\frac{1}{6}$

3. **K** $\frac{5}{6}$

4. **E** $\frac{6}{6}$

5. **N** $\frac{4}{5}$

6. **A** $1\frac{2}{4}$

7. **D** $\frac{2}{2}$

8. **I** $1\frac{3}{5}$

9. **B** $1\frac{2}{6}$

10. **M** $1\frac{1}{10}$

11. **G** $\frac{8}{10}$

12. **L** $\frac{2}{6}$

13. **F** $\frac{7}{8}$

14. **J** $\frac{4}{8}$