



Use the visual model to solve each problem.

$$1 \frac{3}{5} + 2 \frac{4}{5} = ?$$



To solve a fraction addition problem one strategy is to shade in the whole amounts first (1 & 2).



Next fill in the fraction amounts ( $\frac{3}{5}$  &  $\frac{4}{5}$ ).



When all of the pieces are filled in we can see that  $1 \frac{3}{5} + 2 \frac{4}{5} = 4 \frac{2}{5}$

**Answers**

1. \_\_\_\_\_
2. \_\_\_\_\_
3. \_\_\_\_\_
4. \_\_\_\_\_
5. \_\_\_\_\_
6. \_\_\_\_\_
7. \_\_\_\_\_
8. \_\_\_\_\_
9. \_\_\_\_\_
10. \_\_\_\_\_

1)  $2 \frac{5}{12} + 2 \frac{8}{12} =$

2)  $3 \frac{1}{4} + 2 \frac{2}{4} =$

3)  $3 \frac{2}{5} + 3 \frac{3}{5} =$

4)  $1 \frac{1}{4} + 1 \frac{3}{4} =$

5)  $3 \frac{3}{6} + 2 \frac{5}{6} =$

6)  $3 \frac{9}{10} + 1 \frac{4}{10} =$

7)  $3 \frac{4}{12} + 3 \frac{10}{12} =$

8)  $1 \frac{8}{10} + 2 \frac{2}{10} =$


9)  $3 \frac{8}{10} + 1 \frac{5}{10} =$

10)  $3 \frac{3}{12} + 1 \frac{7}{12} =$




Use the visual model to solve each problem.


$1\frac{3}{5} + 2\frac{4}{5} = ?$



To solve a fraction addition problem one strategy is to shade in the whole amounts first (1 & 2).

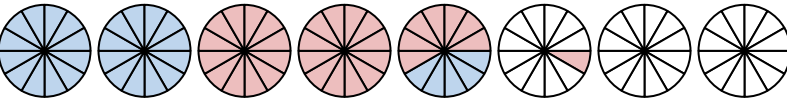


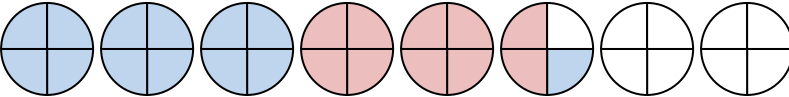
Next fill in the fraction amounts ( $\frac{3}{5}$  &  $\frac{4}{5}$ ).

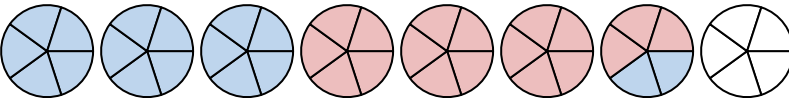


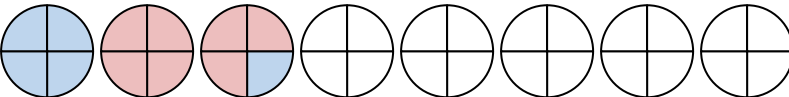
When all of the pieces are filled in we can see that  $1\frac{3}{5} + 2\frac{4}{5} = 4\frac{2}{5}$

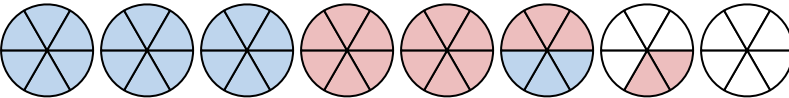
**Answers**

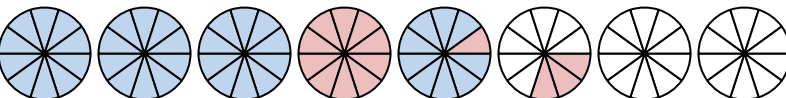
1)  $2\frac{5}{12} + 2\frac{8}{12} =$  

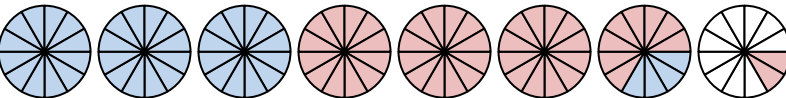
2)  $3\frac{1}{4} + 2\frac{2}{4} =$  

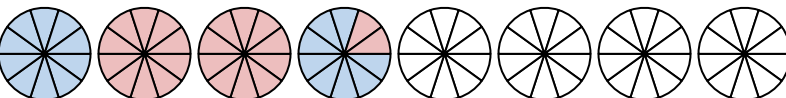
3)  $3\frac{2}{5} + 3\frac{3}{5} =$  

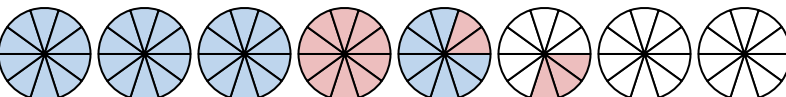
4)  $1\frac{1}{4} + 1\frac{3}{4} =$  

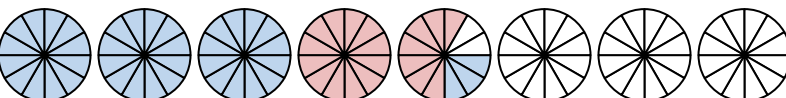
5)  $3\frac{3}{6} + 2\frac{5}{6} =$  

6)  $3\frac{9}{10} + 1\frac{4}{10} =$  

7)  $3\frac{4}{12} + 3\frac{10}{12} =$  

8)  $1\frac{8}{10} + 2\frac{2}{10} =$  

9)  $3\frac{8}{10} + 1\frac{5}{10} =$  

10)  $3\frac{3}{12} + 1\frac{7}{12} =$  

1.  $5\frac{1}{12}$

2.  $5\frac{3}{4}$

3.  $7\frac{0}{5}$

4.  $3\frac{0}{4}$

5.  $6\frac{2}{6}$

6.  $5\frac{3}{10}$

7.  $7\frac{2}{12}$

8.  $4\frac{0}{10}$

9.  $5\frac{3}{10}$

10.  $4\frac{10}{12}$