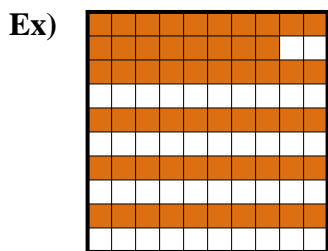
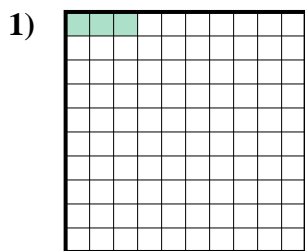




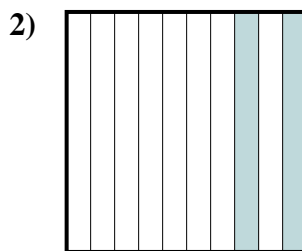
Determine the value written as a fraction , decimal & a percent.



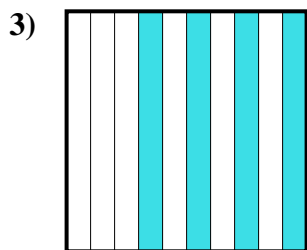
fraction $\frac{58}{100}$
 decimal 0.58
 percent 58



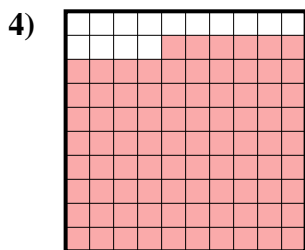
fraction $\frac{3}{100}$
 decimal 0.03
 percent 3



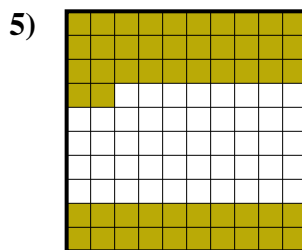
fraction $\frac{2}{10}$
 decimal 0.2
 percent 20




fraction $\frac{4}{10}$
 decimal 0.4
 percent 40



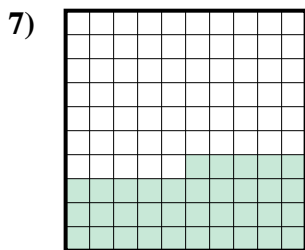
fraction $\frac{86}{100}$
 decimal 0.86
 percent 86



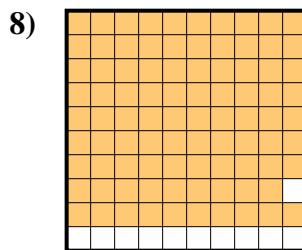
fraction $\frac{52}{100}$
 decimal 0.52
 percent 52



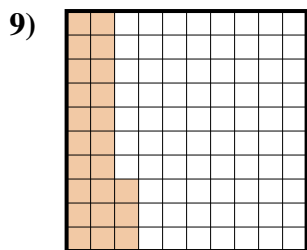
fraction $\frac{5}{10}$
 decimal 0.5
 percent 50



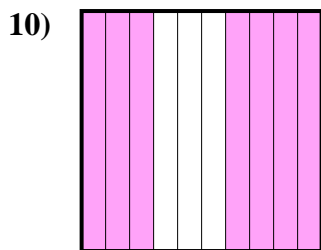
fraction $\frac{35}{100}$
 decimal 0.35
 percent 35



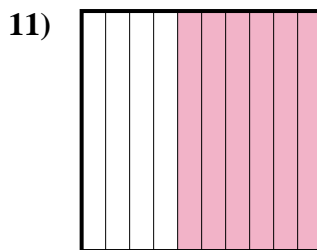
fraction $\frac{89}{100}$
 decimal 0.89
 percent 89



fraction $\frac{23}{100}$
 decimal 0.23
 percent 23



fraction $\frac{7}{10}$
 decimal 0.7
 percent 70



fraction $\frac{6}{10}$
 decimal 0.6
 percent 60

Answers

- Ex. $\frac{58}{100}$ **0.58** **58%**
 1. $\frac{3}{100}$ **0.03** **3%**
 2. $\frac{2}{10}$ **0.2** **20%**
 3. $\frac{4}{10}$ **0.4** **40%**
 4. $\frac{86}{100}$ **0.86** **86%**
 5. $\frac{52}{100}$ **0.52** **52%**
 6. $\frac{5}{10}$ **0.5** **50%**
 7. $\frac{35}{100}$ **0.35** **35%**
 8. $\frac{89}{100}$ **0.89** **89%**
 9. $\frac{23}{100}$ **0.23** **23%**
 10. $\frac{7}{10}$ **0.7** **70%**
 11. $\frac{6}{10}$ **0.6** **60%**