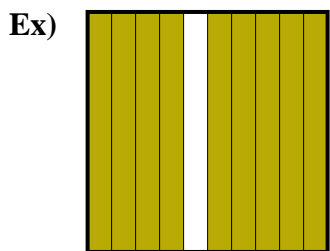


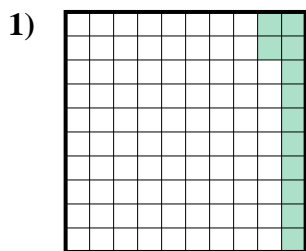




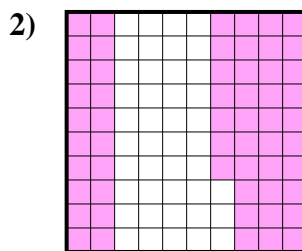
Determine the value written as a fraction , decimal & a percent.



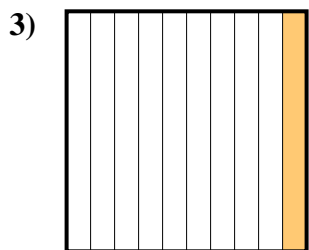
fraction  $\frac{9}{10}$   
 decimal  $0.9$   
 percent  $90$



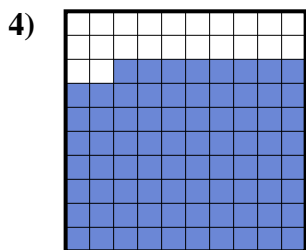
fraction  $\frac{12}{100}$   
 decimal  $0.12$   
 percent  $12$



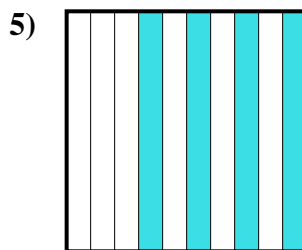
fraction  $\frac{57}{100}$   
 decimal  $0.57$   
 percent  $57$



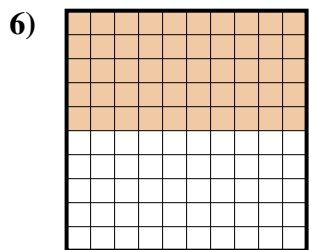
fraction  $\frac{1}{10}$   
 decimal  $0.1$   
 percent  $10$



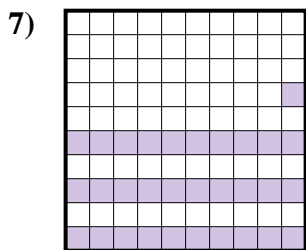
fraction  $\frac{78}{100}$   
 decimal  $0.78$   
 percent  $78$



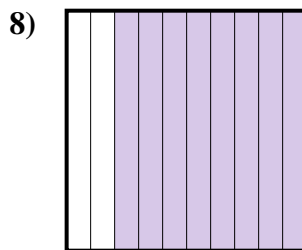
fraction  $\frac{4}{10}$   
 decimal  $0.4$   
 percent  $40$



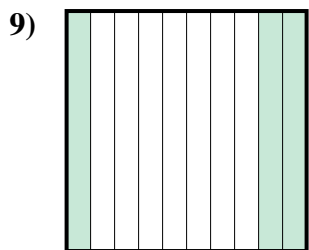
fraction  $\frac{50}{100}$   
 decimal  $0.50$   
 percent  $50$



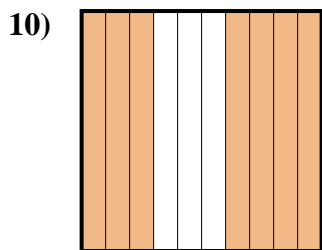
fraction  $\frac{31}{100}$   
 decimal  $0.31$   
 percent  $31$



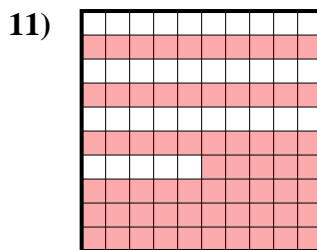
fraction  $\frac{8}{10}$   
 decimal  $0.8$   
 percent  $80$



fraction  $\frac{3}{10}$   
 decimal  $0.3$   
 percent  $30$



fraction  $\frac{7}{10}$   
 decimal  $0.7$   
 percent  $70$



fraction  $\frac{65}{100}$   
 decimal  $0.65$   
 percent  $65$

**Answers**

- Ex.  $\frac{9}{10}$  **0.9** **90%**  
 1.  $\frac{12}{100}$  **0.12** **12%**  
 2.  $\frac{57}{100}$  **0.57** **57%**  
 3.  $\frac{1}{10}$  **0.1** **10%**  
 4.  $\frac{78}{100}$  **0.78** **78%**  
 5.  $\frac{4}{10}$  **0.4** **40%**  
 6.  $\frac{50}{100}$  **0.50** **50%**  
 7.  $\frac{31}{100}$  **0.31** **31%**  
 8.  $\frac{8}{10}$  **0.8** **80%**  
 9.  $\frac{3}{10}$  **0.3** **30%**  
 10.  $\frac{7}{10}$  **0.7** **70%**  
 11.  $\frac{65}{100}$  **0.65** **65%**