



Determine the value written as a fraction , decimal & a percent.


Answers

Ex)



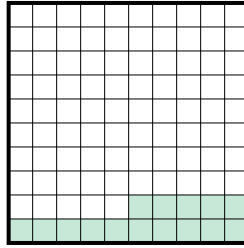
fraction $\frac{2}{10}$
 decimal 0.2
 percent 20

1)



fraction _____
 decimal _____
 percent _____

2)



fraction _____
 decimal _____
 percent _____

Ex. $\frac{2}{10}$ **0.2** **20%**

1. _____

2. _____

3. _____

4. _____

5. _____

6. _____

7. _____

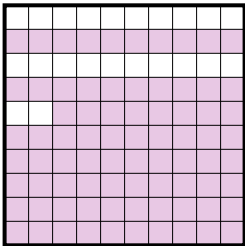
8. _____

9. _____

10. _____

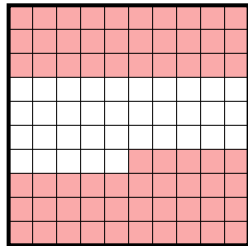
11. _____

3)




fraction _____
 decimal _____
 percent _____

4)



fraction _____
 decimal _____
 percent _____

5)




fraction _____
 decimal _____
 percent _____

6)



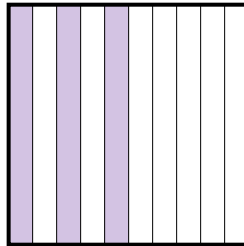
fraction _____
 decimal _____
 percent _____

7)



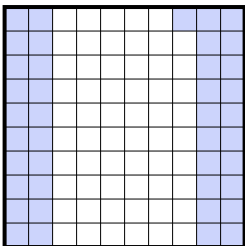
fraction _____
 decimal _____
 percent _____

8)



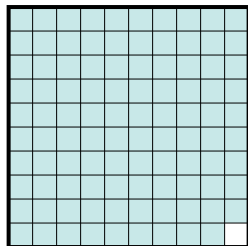
fraction _____
 decimal _____
 percent _____

9)




fraction _____
 decimal _____
 percent _____

10)



fraction _____
 decimal _____
 percent _____


11)




fraction _____
 decimal _____
 percent _____



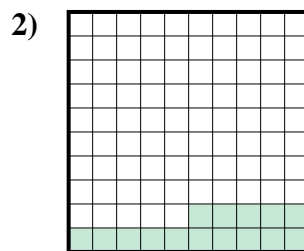
Determine the value written as a fraction , decimal & a percent.



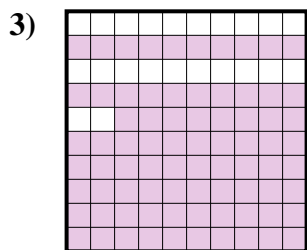
fraction $\frac{2}{10}$
 decimal 0.2
 percent 20



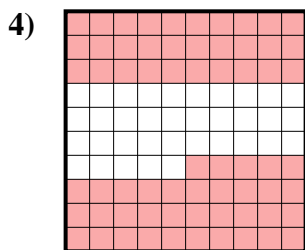
fraction $\frac{7}{10}$
 decimal 0.7
 percent 70



fraction $\frac{15}{100}$
 decimal 0.15
 percent 15



fraction $\frac{78}{100}$
 decimal 0.78
 percent 78



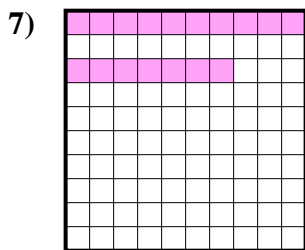
fraction $\frac{65}{100}$
 decimal 0.65
 percent 65



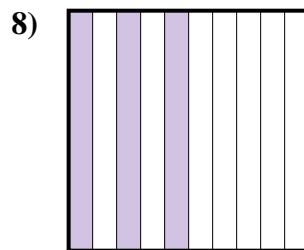
fraction $\frac{1}{10}$
 decimal 0.1
 percent 10



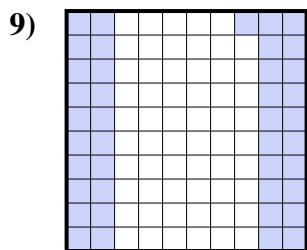
fraction $\frac{4}{10}$
 decimal 0.4
 percent 40



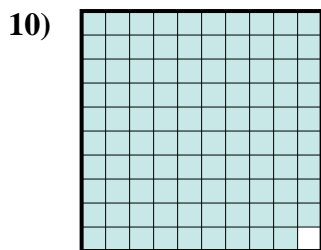
fraction $\frac{17}{100}$
 decimal 0.17
 percent 17



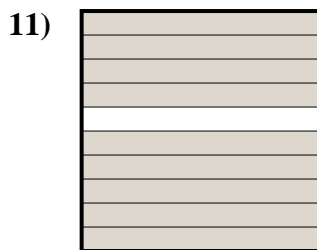
fraction $\frac{3}{10}$
 decimal 0.3
 percent 30



fraction $\frac{41}{100}$
 decimal 0.41
 percent 41



fraction $\frac{99}{100}$
 decimal 0.99
 percent 99



fraction $\frac{9}{10}$
 decimal 0.9
 percent 90

Answers

- Ex. $\frac{2}{10}$ **0.2** **20%**
 1. $\frac{7}{10}$ **0.7** **70%**
 2. $\frac{15}{100}$ **0.15** **15%**
 3. $\frac{78}{100}$ **0.78** **78%**
 4. $\frac{65}{100}$ **0.65** **65%**
 5. $\frac{1}{10}$ **0.1** **10%**
 6. $\frac{4}{10}$ **0.4** **40%**
 7. $\frac{17}{100}$ **0.17** **17%**
 8. $\frac{3}{10}$ **0.3** **30%**
 9. $\frac{41}{100}$ **0.41** **41%**
 10. $\frac{99}{100}$ **0.99** **99%**
 11. $\frac{9}{10}$ **0.9** **90%**