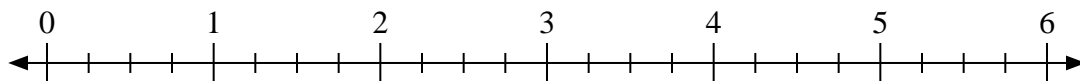


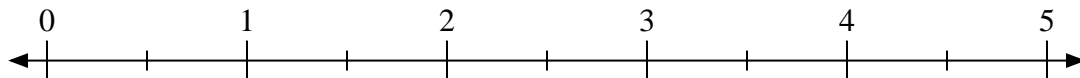


Use the numberline to solve.

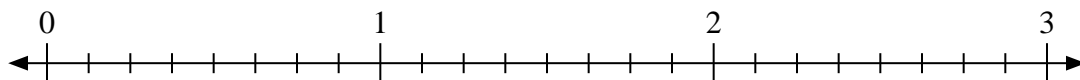
1)  $6 \div \frac{3}{4}$



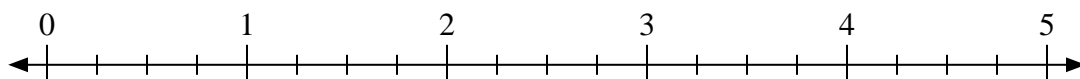
2)  $5 \div \frac{1}{2}$



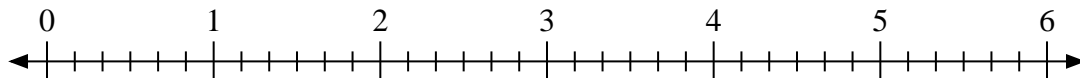
3)  $3 \div \frac{6}{8}$



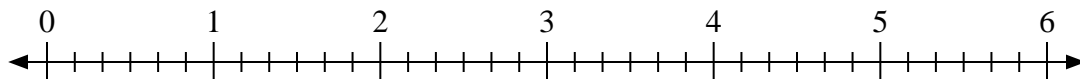
4)  $3 \div \frac{3}{4}$



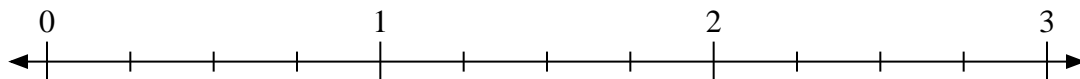
5)  $6 \div \frac{3}{6}$




6)  $5 \div \frac{1}{6}$



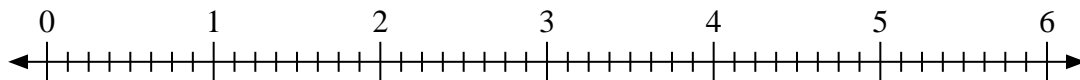
7)  $3 \div \frac{1}{4}$



8)  $3 \div \frac{2}{3}$



9)  $3 \div \frac{3}{8}$



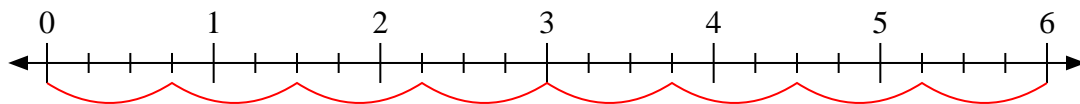
Answers

1. \_\_\_\_\_
2. \_\_\_\_\_
3. \_\_\_\_\_
4. \_\_\_\_\_
5. \_\_\_\_\_
6. \_\_\_\_\_
7. \_\_\_\_\_
8. \_\_\_\_\_
9. \_\_\_\_\_

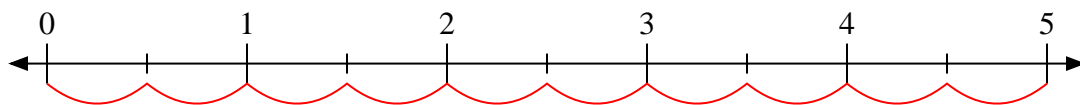


Use the numberline to solve.

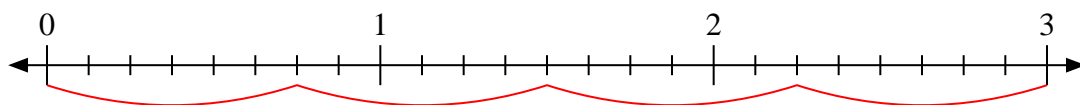
1)  $6 \div \frac{3}{4}$



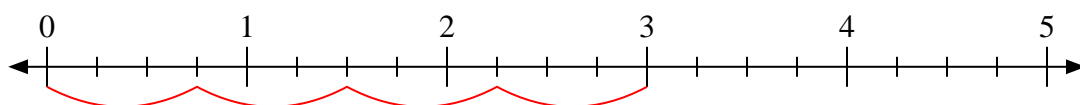
2)  $5 \div \frac{1}{2}$



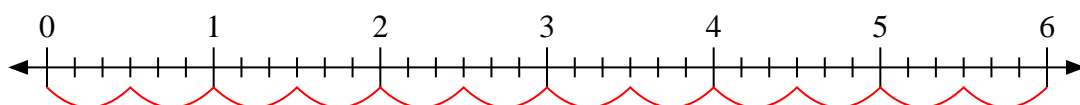
3)  $3 \div \frac{6}{8}$



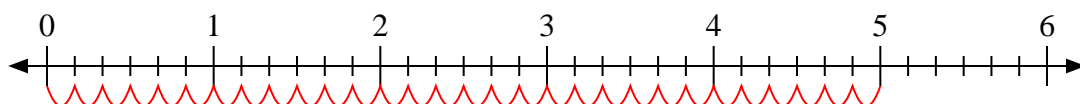
4)  $3 \div \frac{3}{4}$



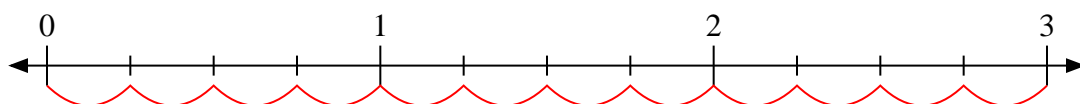
5)  $6 \div \frac{3}{6}$



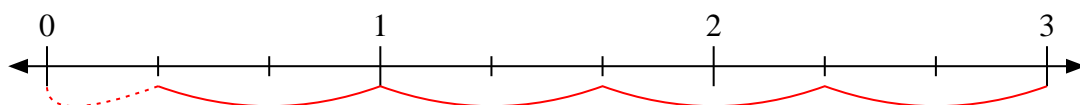
6)  $5 \div \frac{1}{6}$



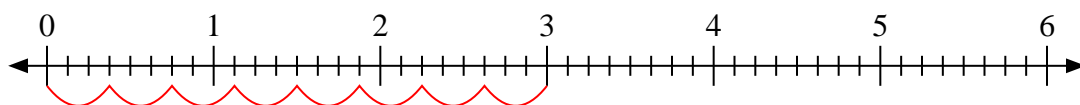
7)  $3 \div \frac{1}{4}$



8)  $3 \div \frac{2}{3}$



9)  $3 \div \frac{3}{8}$



Answers

1. 8

2. 10

3. 4

4. 4

5. 12

6. 30

7. 12

8.  $4 \frac{1}{2}$

9. 8