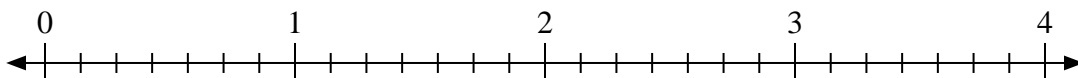


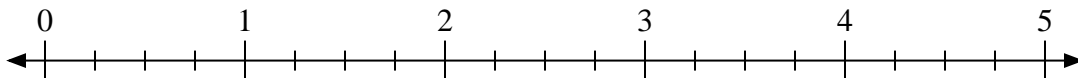


Use the numberline to solve.

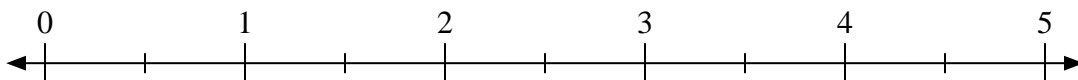
1) $2 \div \frac{5}{7}$



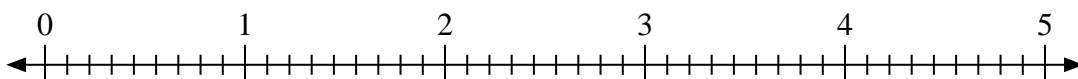
2) $2 \div \frac{1}{4}$



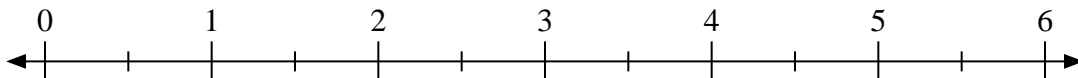
3) $5 \div \frac{1}{2}$



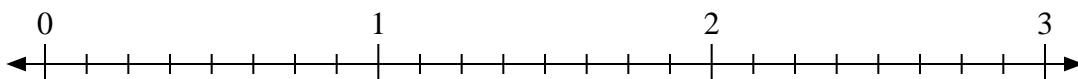
4) $2 \div \frac{5}{9}$



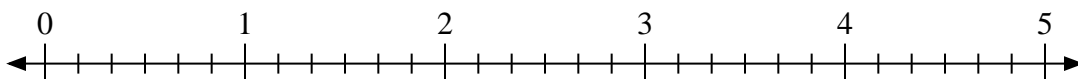
5) $5 \div \frac{1}{2}$



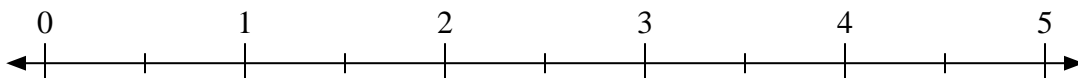
6) $3 \div \frac{6}{8}$



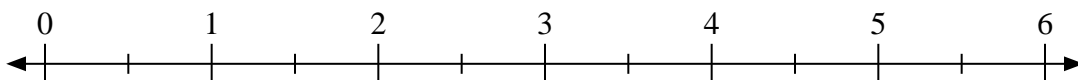
7) $5 \div \frac{1}{6}$



8) $5 \div \frac{1}{2}$



9) $3 \div \frac{1}{2}$



Answers

1. _____

2. _____

3. _____

4. _____

5. _____

6. _____

7. _____

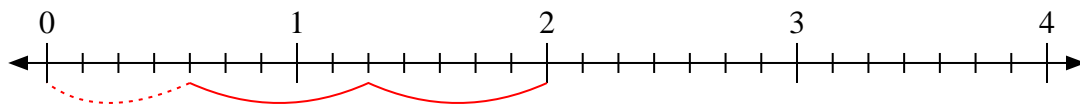
8. _____

9. _____

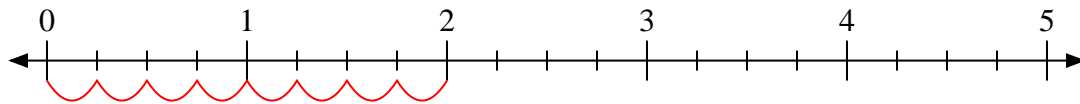


Use the numberline to solve.

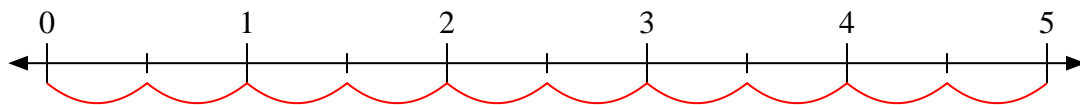
1) $2 \div \frac{5}{7}$



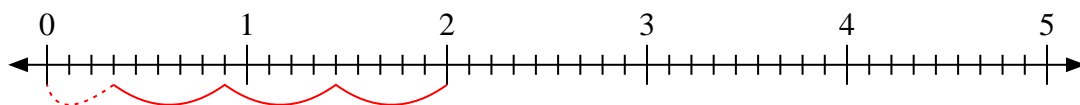
2) $2 \div \frac{1}{4}$



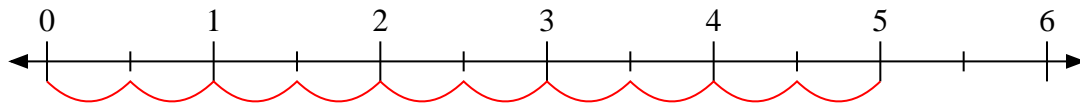
3) $5 \div \frac{1}{2}$



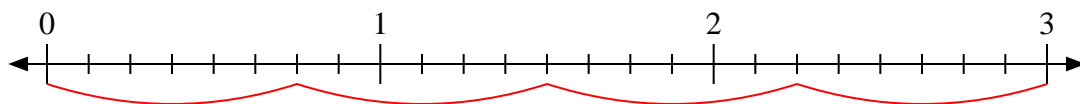
4) $2 \div \frac{5}{9}$



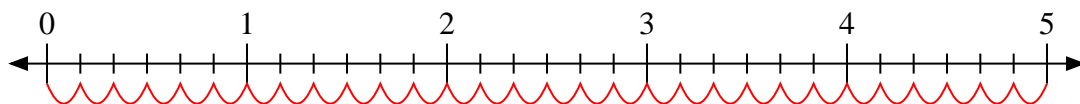
5) $5 \div \frac{1}{2}$



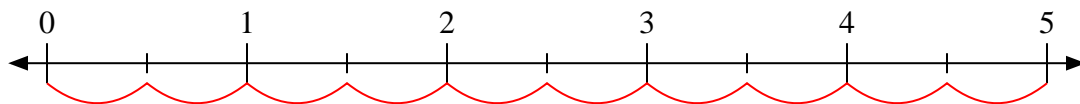
6) $3 \div \frac{6}{8}$



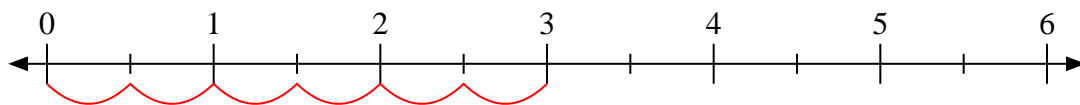
7) $5 \div \frac{1}{6}$



8) $5 \div \frac{1}{2}$



9) $3 \div \frac{1}{2}$



Answers

1. 2 ⁴/₅

2. 8

3. 10

4. 3 ³/₅

5. 10

6. 4

7. 30

8. 10

9. 6