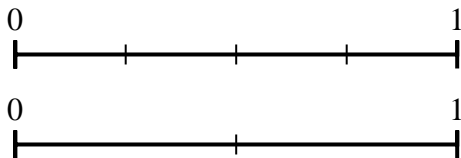




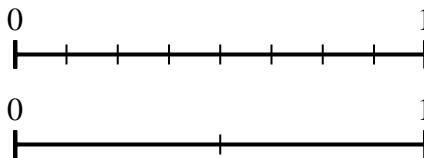
Use the number lines to answer the questions.

Answers

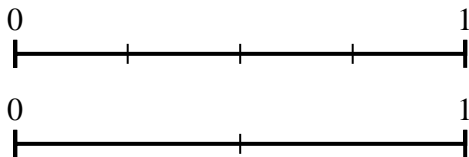
1) Using the number lines shown, what is the equivalent fraction to $\frac{2}{4}$?



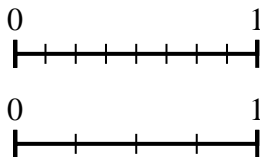
2) Using the number lines shown, what is the equivalent fraction to $\frac{8}{8}$?



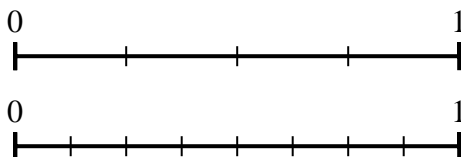
3) Using the number lines shown, what is the equivalent fraction to $\frac{4}{4}$?



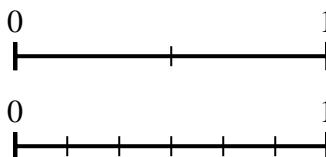
4) Using the number lines shown, what is the equivalent fraction to $\frac{6}{8}$?



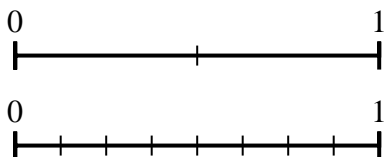
5) Using the number lines shown, what is the equivalent fraction to $\frac{2}{4}$?



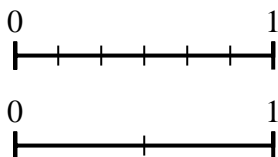
6) Using the number lines shown, what is the equivalent fraction to $\frac{2}{2}$?



7) Using the number lines shown, what is the equivalent fraction to $\frac{1}{2}$?



8) Using the number lines shown, what is the equivalent fraction to $\frac{0}{6}$?

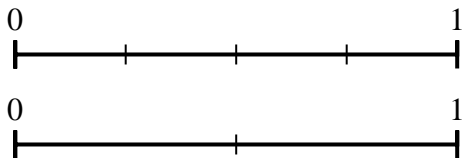


1. _____
2. _____
3. _____
4. _____
5. _____
6. _____
7. _____
8. _____

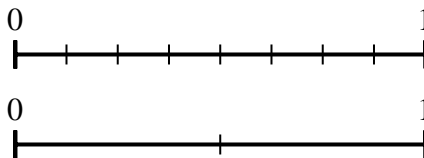


Use the number lines to answer the questions.

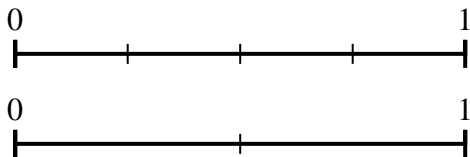
1) Using the number lines shown, what is the equivalent fraction to $\frac{2}{4}$?



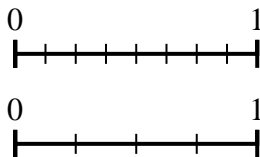
2) Using the number lines shown, what is the equivalent fraction to $\frac{8}{8}$?



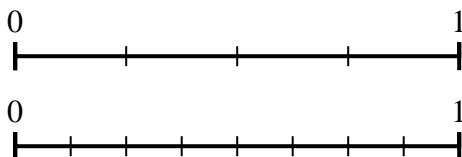
3) Using the number lines shown, what is the equivalent fraction to $\frac{4}{4}$?



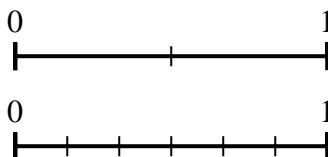
4) Using the number lines shown, what is the equivalent fraction to $\frac{6}{8}$?



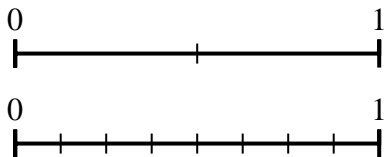
5) Using the number lines shown, what is the equivalent fraction to $\frac{2}{4}$?



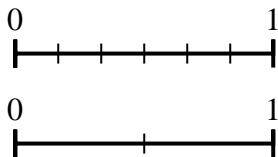
6) Using the number lines shown, what is the equivalent fraction to $\frac{2}{2}$?



7) Using the number lines shown, what is the equivalent fraction to $\frac{1}{2}$?



8) Using the number lines shown, what is the equivalent fraction to $\frac{0}{6}$?



Answers

1. $\frac{1}{2}$
2. $\frac{2}{2}$
3. $\frac{2}{2}$
4. $\frac{3}{4}$
5. $\frac{4}{8}$
6. $\frac{6}{6}$
7. $\frac{4}{8}$
8. $\frac{0}{2}$