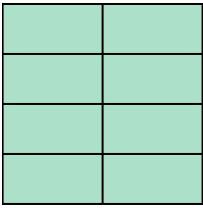





Write the shaded amount as a fraction.

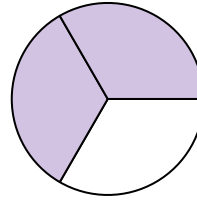
Ex)



1)



2)



Answers

Ex. $\frac{8}{8}$

1. _____

2. _____

3. _____

4. _____

5. _____

6. _____

7. _____

8. _____

9. _____

10. _____

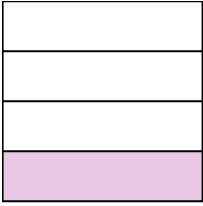
11. _____

12. _____

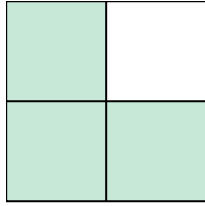
13. _____

14. _____


3)



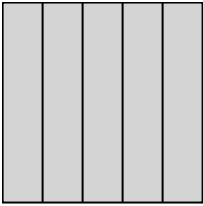
4)



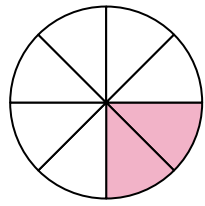
5)




6)




7)



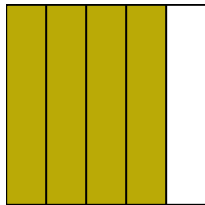
8)




9)




10)




11)




12)



13)



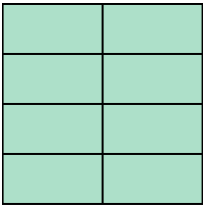
14)






Write the shaded amount as a fraction.

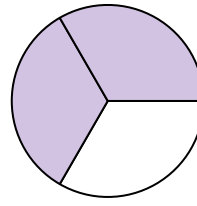
Ex)



1)



2)



Answers

Ex. $\frac{8}{8}$

1. $\frac{2}{2}$

2. $\frac{2}{3}$

3. $\frac{1}{4}$

4. $\frac{3}{4}$

5. $\frac{2}{2}$

6. $\frac{5}{5}$

7. $\frac{2}{8}$

8. $\frac{1}{4}$

9. $\frac{3}{8}$

10. $\frac{4}{5}$

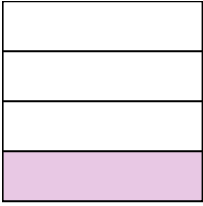
11. $\frac{1}{3}$

12. $\frac{1}{5}$

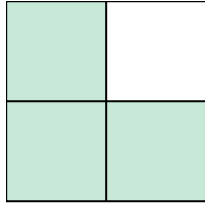
13. $\frac{2}{2}$

14. $\frac{3}{3}$


3)



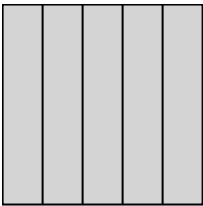
4)



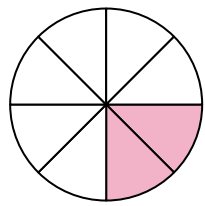
5)



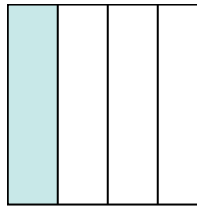
6)




7)



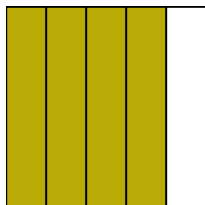
8)



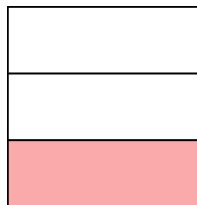
9)




10)




11)



12)



13)



14)

