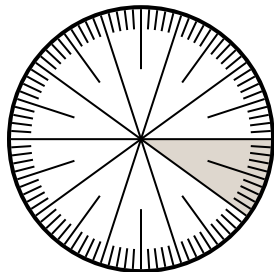


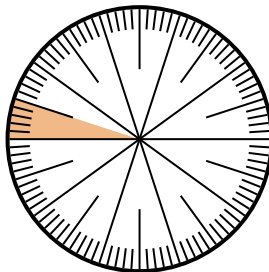


Solve each problem.

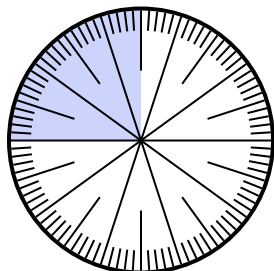
1) Express the un-shaded portion as a decimal of the whole.



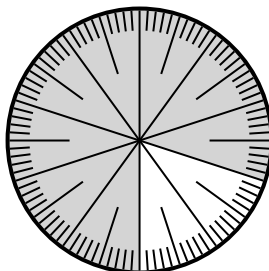
2) Express the un-shaded portion as a decimal of the whole.



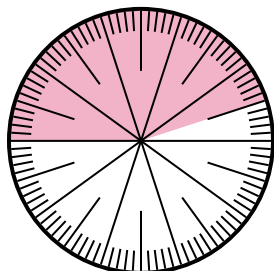
3) Express the shaded portion as a fraction of the whole with a 100 as the denominator.



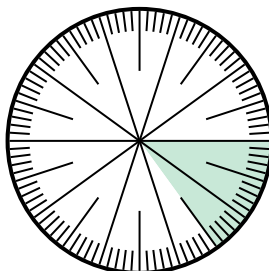
4) Express the un-shaded portion as a decimal of the whole.



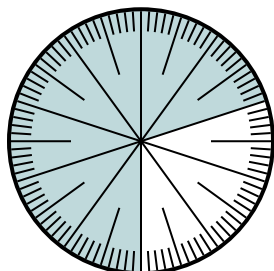
5) Express the un-shaded portion as a fraction of the whole with a 100 as the denominator.



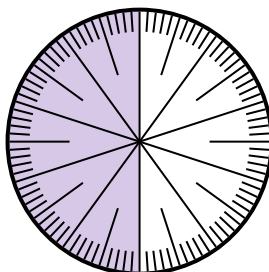
6) Express the shaded portion as a decimal of the whole.



7) Express the un-shaded portion as a fraction of the whole with a 100 as the denominator.



8) Express the un-shaded portion as a fraction of the whole with a 10 as the denominator.



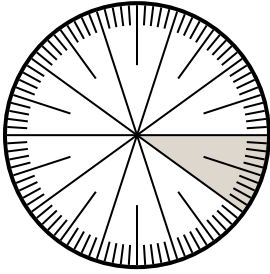
Answers

- 1. \_\_\_\_\_
- 2. \_\_\_\_\_
- 3. \_\_\_\_\_
- 4. \_\_\_\_\_
- 5. \_\_\_\_\_
- 6. \_\_\_\_\_
- 7. \_\_\_\_\_
- 8. \_\_\_\_\_

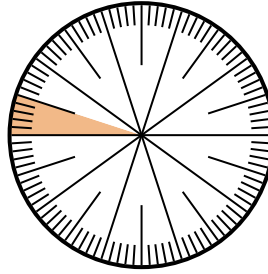


Solve each problem.

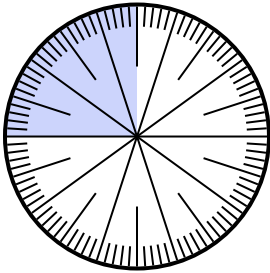
- 1) Express the un-shaded portion as a decimal of the whole.



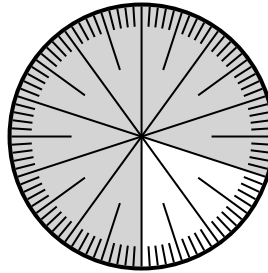
- 2) Express the un-shaded portion as a decimal of the whole.



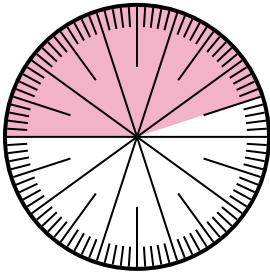
- 3) Express the shaded portion as a fraction of the whole with a 100 as the denominator.



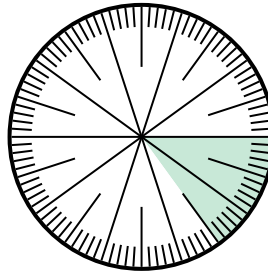
- 4) Express the un-shaded portion as a decimal of the whole.



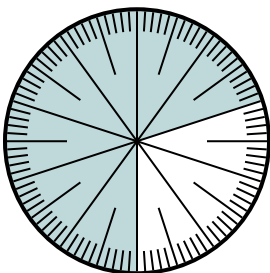
- 5) Express the un-shaded portion as a fraction of the whole with a 100 as the denominator.



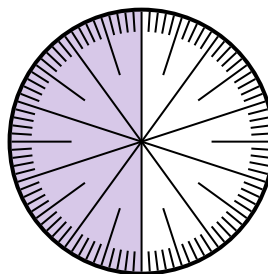
- 6) Express the shaded portion as a decimal of the whole.



- 7) Express the un-shaded portion as a fraction of the whole with a 100 as the denominator.



- 8) Express the un-shaded portion as a fraction of the whole with a 10 as the denominator.



Answers

1. 0.9

2. 0.95

3.  $\frac{25}{100}$

4. 0.2

5.  $\frac{55}{100}$

6. 0.15

7.  $\frac{30}{100}$

8.  $\frac{5}{10}$