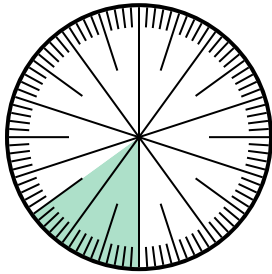


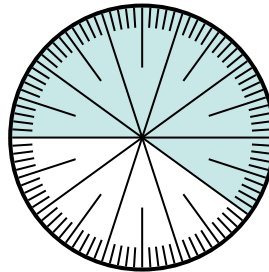


Solve each problem.

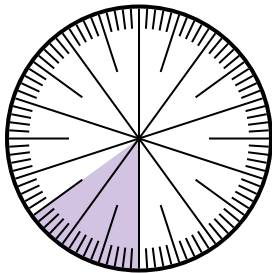
- 1) Express the un-shaded portion as a fraction of the whole with a 100 as the denominator.



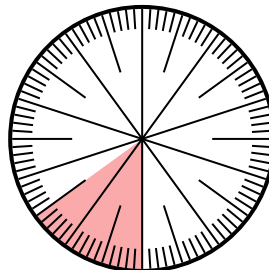
- 2) Express the shaded portion as a fraction of the whole with a 100 as the denominator.



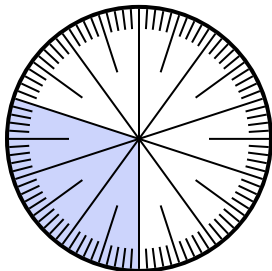
- 3) Express the shaded portion as a fraction of the whole with a 100 as the denominator.



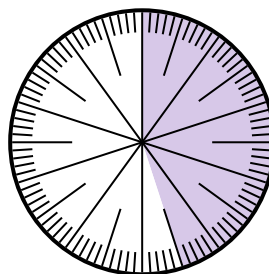
- 4) Express the shaded portion as a fraction of the whole with a 100 as the denominator.



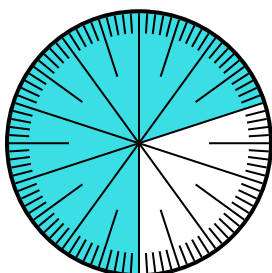
- 5) Express the shaded portion as a fraction of the whole with a 100 as the denominator.



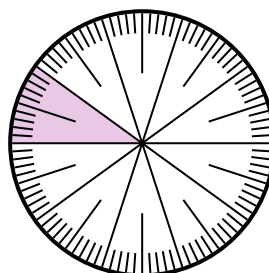
- 6) Express the shaded portion as a fraction of the whole with a 100 as the denominator.



- 7) Express the shaded portion as a fraction of the whole with a 100 as the denominator.



- 8) Express the shaded portion as a decimal of the whole.



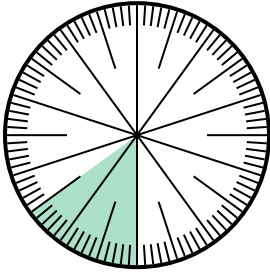
Answers

1. _____
2. _____
3. _____
4. _____
5. _____
6. _____
7. _____
8. _____

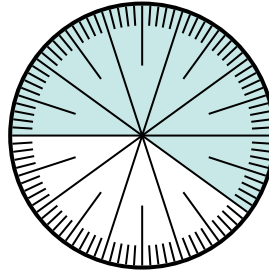


Solve each problem.

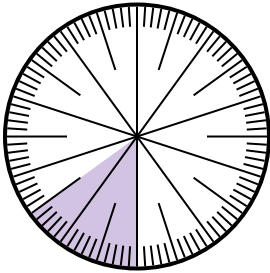
- 1) Express the un-shaded portion as a fraction of the whole with a 100 as the denominator.



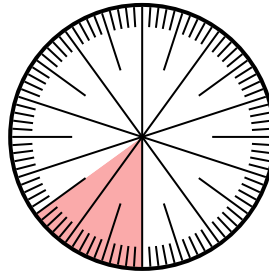
- 2) Express the shaded portion as a fraction of the whole with a 100 as the denominator.



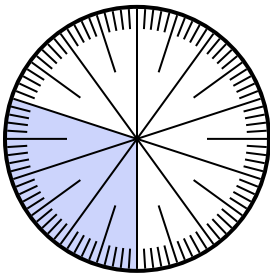
- 3) Express the shaded portion as a fraction of the whole with a 100 as the denominator.



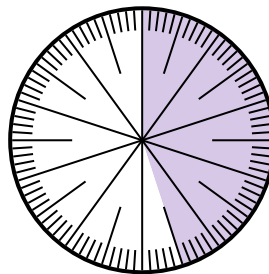
- 4) Express the shaded portion as a fraction of the whole with a 100 as the denominator.



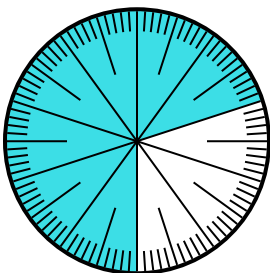
- 5) Express the shaded portion as a fraction of the whole with a 100 as the denominator.



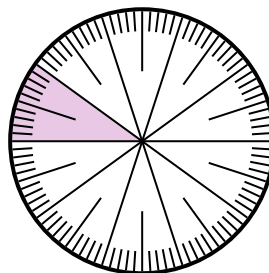
- 6) Express the shaded portion as a fraction of the whole with a 100 as the denominator.



- 7) Express the shaded portion as a fraction of the whole with a 100 as the denominator.



- 8) Express the shaded portion as a decimal of the whole.



Answers

1. $\frac{85}{100}$
2. $\frac{60}{100}$
3. $\frac{15}{100}$
4. $\frac{45}{100}$
5. $\frac{30}{100}$
6. $\frac{70}{100}$
7. $\frac{70}{100}$
8. **0.1**