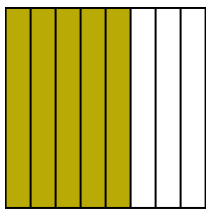


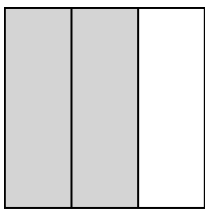


Write the shaded amount in word form.

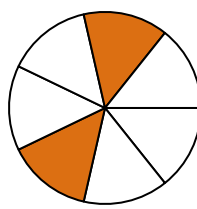
Ex)




1)




2)



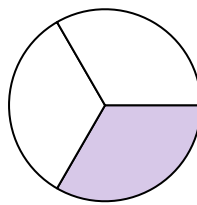
3)



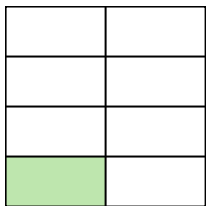
4)



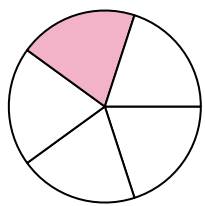
5)



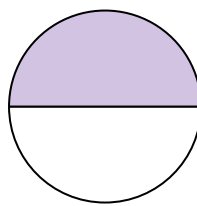
6)



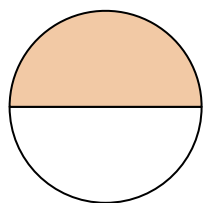
7)



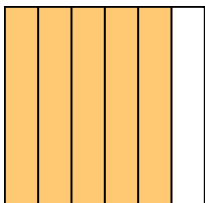
8)



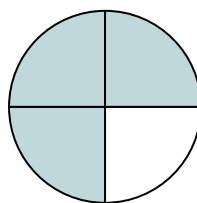
9)



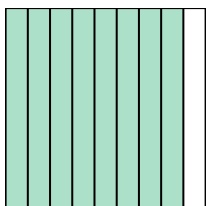
10)



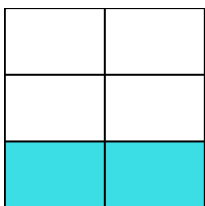
11)



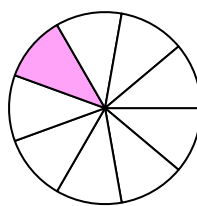
12)



13)



14)

**Answers**Ex. five-eighths

1. \_\_\_\_\_

2. \_\_\_\_\_

3. \_\_\_\_\_

4. \_\_\_\_\_

5. \_\_\_\_\_

6. \_\_\_\_\_

7. \_\_\_\_\_

8. \_\_\_\_\_

9. \_\_\_\_\_

10. \_\_\_\_\_

11. \_\_\_\_\_

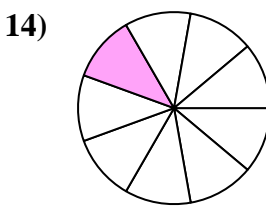
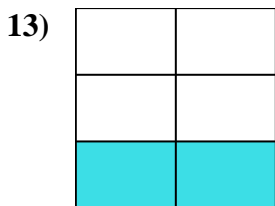
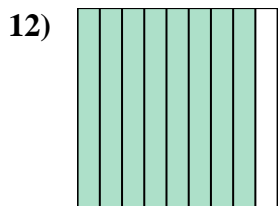
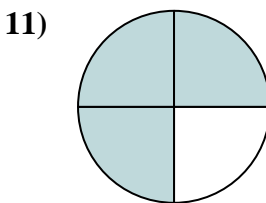
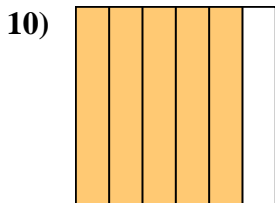
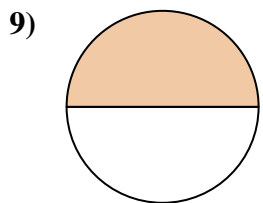
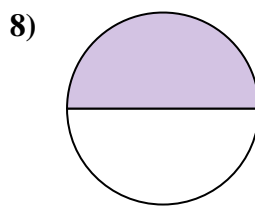
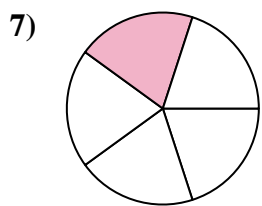
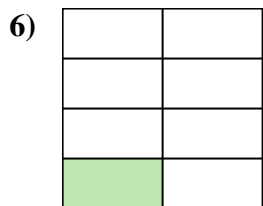
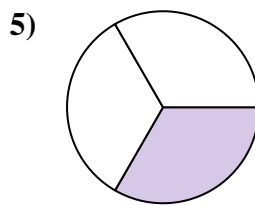
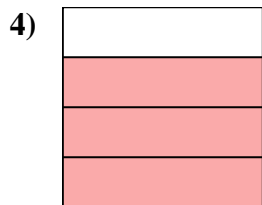
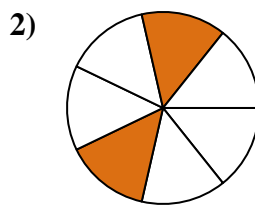
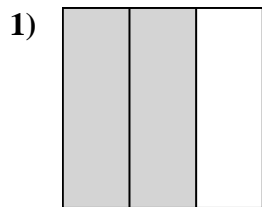
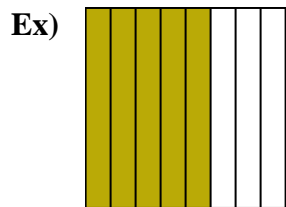
12. \_\_\_\_\_

13. \_\_\_\_\_

14. \_\_\_\_\_



Write the shaded amount in word form.

**Answers**Ex. five-eighths1. two-thirds2. two-sevenths3. one-tenth4. three-fourths5. one-third6. one-seventh7. one-fifth8. one-half9. one-half10. five-sixths11. three-fourths12. eight-ninths13. two-fifths14. one-ninth