




Solve each problem.

Ex) Express the stars as a fraction of the entire set.



1) Express the pentagons as a fraction of the entire set.



**Answers**

Ex.  $\frac{15}{25}$

1. \_\_\_\_\_

2. \_\_\_\_\_

3. \_\_\_\_\_

4. \_\_\_\_\_

5. \_\_\_\_\_

6. \_\_\_\_\_

7. \_\_\_\_\_

8. \_\_\_\_\_

9. \_\_\_\_\_

10. \_\_\_\_\_

11. \_\_\_\_\_


2) Express the hearts as a fraction of the entire set.



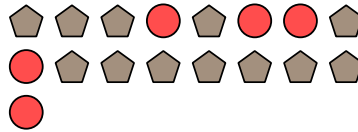
3) Express the pentagons as a fraction of the entire set.




4) Express the stars as a fraction of the entire set.



5) Express the circles as a fraction of the entire set.



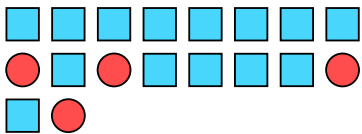
6) Express the pentagons as a fraction of the entire set.



7) Express the triangles as a fraction of the entire set.



8) Express the squares as a fraction of the entire set.



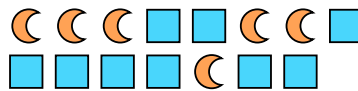
9) Express the stars as a fraction of the entire set.



10) Express the moons as a fraction of the entire set.




11) Express the moons as a fraction of the entire set.





Solve each problem.

Ex) Express the stars as a fraction of the entire set.



1) Express the pentagons as a fraction of the entire set.




2) Express the hearts as a fraction of the entire set.



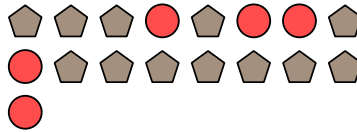
3) Express the pentagons as a fraction of the entire set.




4) Express the stars as a fraction of the entire set.



5) Express the circles as a fraction of the entire set.



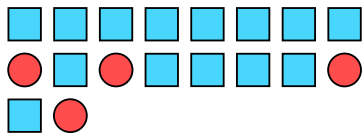
6) Express the pentagons as a fraction of the entire set.



7) Express the triangles as a fraction of the entire set.



8) Express the squares as a fraction of the entire set.



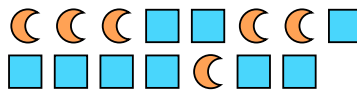
9) Express the stars as a fraction of the entire set.



10) Express the moons as a fraction of the entire set.



11) Express the moons as a fraction of the entire set.



**Answers**

Ex.  $\frac{15}{25}$

1.  $\frac{8}{20}$

2.  $\frac{10}{12}$

3.  $\frac{11}{16}$

4.  $\frac{3}{13}$

5.  $\frac{5}{17}$

6.  $\frac{14}{29}$

7.  $\frac{8}{14}$

8.  $\frac{14}{18}$

9.  $\frac{7}{12}$

10.  $\frac{8}{13}$

11.  $\frac{6}{15}$