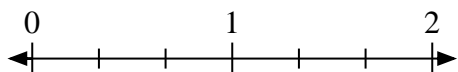


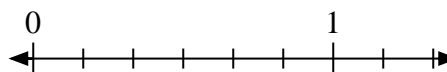


Solve each problem.

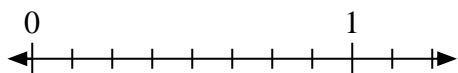
- 1) Mark the location of
- $\frac{1}{3}$



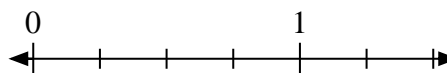
- 2) Mark the location of
- $\frac{2}{6}$



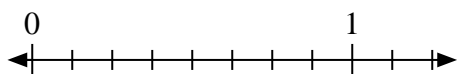
- 3) Mark the location of
- $\frac{6}{8}$




- 4) Mark the location of
- $\frac{2}{4}$



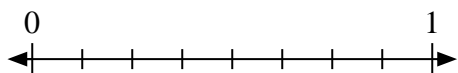
- 5) Mark the location of
- $\frac{4}{8}$



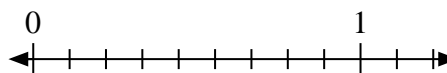
- 6) Mark the location of
- $\frac{0}{2}$



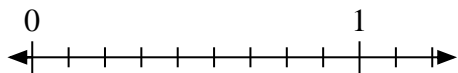
- 7) Mark the location of
- $\frac{8}{8}$



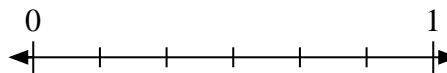
- 8) Mark the location of
- $\frac{8}{9}$



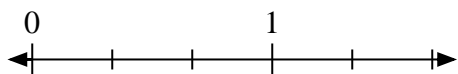
- 9) Mark the location of
- $\frac{9}{9}$



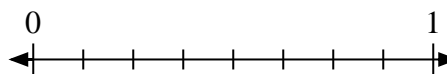
- 10) Mark the location of
- $\frac{4}{6}$



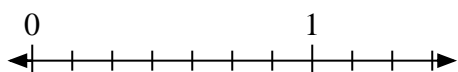
- 11) Mark the location of
- $\frac{3}{3}$



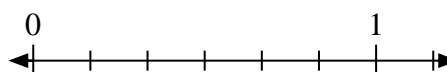
- 12) Mark the location of
- $\frac{2}{8}$



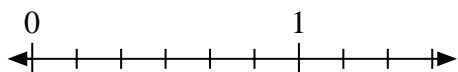
- 13) Mark the location of
- $\frac{0}{7}$




- 14) Mark the location of
- $\frac{3}{6}$



- 15) Mark the location of
- $\frac{1}{6}$



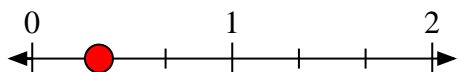
- 16) Mark the location of
- $\frac{2}{2}$



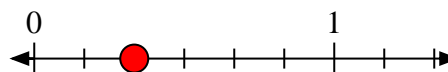


Solve each problem.

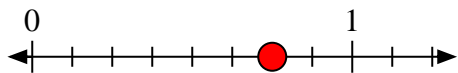
- 1) Mark the location of
- $\frac{1}{3}$



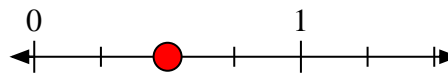
- 2) Mark the location of
- $\frac{2}{6}$



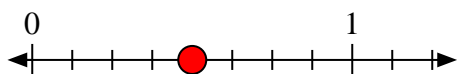
- 3) Mark the location of
- $\frac{6}{8}$




- 4) Mark the location of
- $\frac{2}{4}$



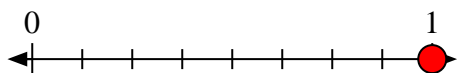
- 5) Mark the location of
- $\frac{4}{8}$



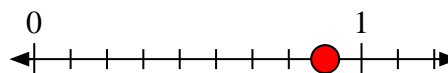
- 6) Mark the location of
- $\frac{0}{2}$



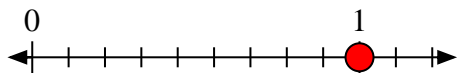
- 7) Mark the location of
- $\frac{8}{8}$



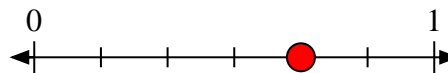
- 8) Mark the location of
- $\frac{8}{9}$



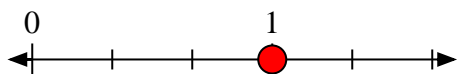
- 9) Mark the location of
- $\frac{9}{9}$



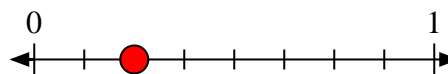
- 10) Mark the location of
- $\frac{4}{6}$



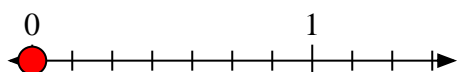
- 11) Mark the location of
- $\frac{3}{3}$



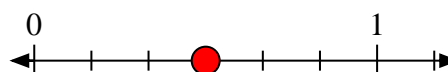
- 12) Mark the location of
- $\frac{2}{8}$



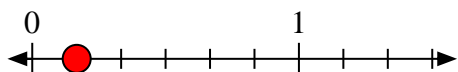
- 13) Mark the location of
- $\frac{0}{7}$



- 14) Mark the location of
- $\frac{3}{6}$



- 15) Mark the location of
- $\frac{1}{6}$



- 16) Mark the location of
- $\frac{2}{2}$

