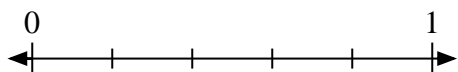


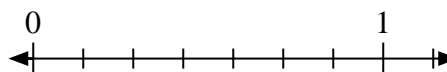


Solve each problem.

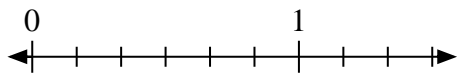
- 1) Mark the location of
- $\frac{2}{5}$



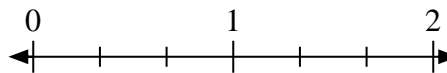
- 2) Mark the location of
- $\frac{1}{7}$



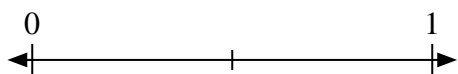
- 3) Mark the location of
- $\frac{1}{6}$



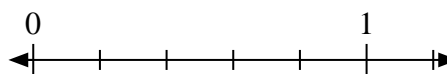
- 4) Mark the location of
- $\frac{2}{3}$



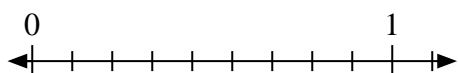
- 5) Mark the location of
- $\frac{1}{2}$



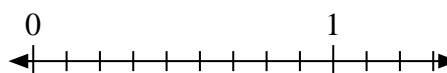
- 6) Mark the location of
- $\frac{0}{5}$



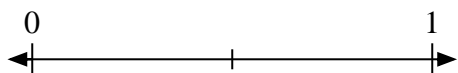
- 7) Mark the location of
- $\frac{0}{9}$



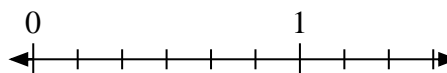
- 8) Mark the location of
- $\frac{5}{9}$



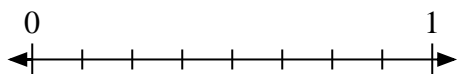
- 9) Mark the location of
- $\frac{0}{2}$



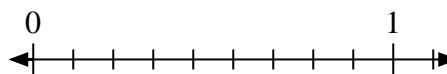
- 10) Mark the location of
- $\frac{3}{6}$



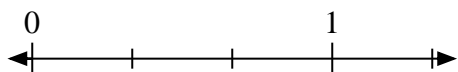
- 11) Mark the location of
- $\frac{4}{8}$



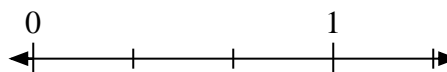
- 12) Mark the location of
- $\frac{3}{9}$



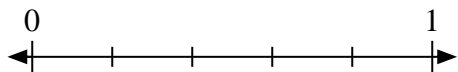
- 13) Mark the location of
- $\frac{3}{3}$



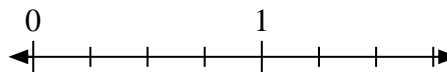
- 14) Mark the location of
- $\frac{1}{3}$



- 15) Mark the location of
- $\frac{1}{5}$



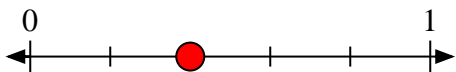
- 16) Mark the location of
- $\frac{4}{4}$



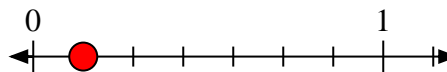


Solve each problem.

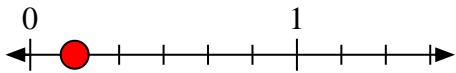
1) Mark the location of  $\frac{2}{5}$



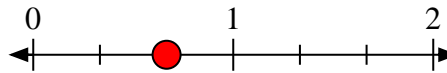
2) Mark the location of  $\frac{1}{7}$



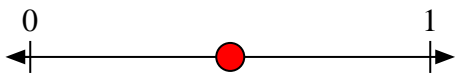
3) Mark the location of  $\frac{1}{6}$



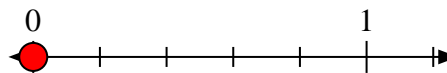
4) Mark the location of  $\frac{2}{3}$



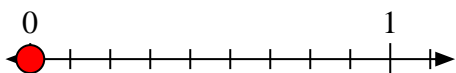
5) Mark the location of  $\frac{1}{2}$



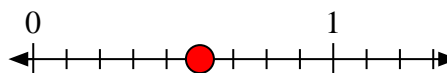
6) Mark the location of  $\frac{0}{5}$



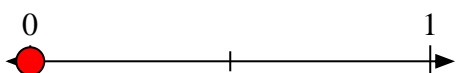
7) Mark the location of  $\frac{0}{9}$



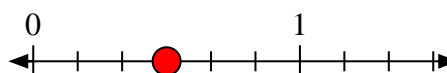
8) Mark the location of  $\frac{5}{9}$



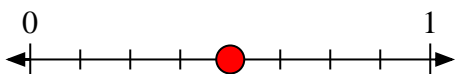
9) Mark the location of  $\frac{0}{2}$



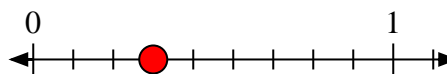
10) Mark the location of  $\frac{3}{6}$



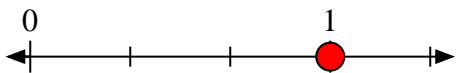
11) Mark the location of  $\frac{4}{8}$



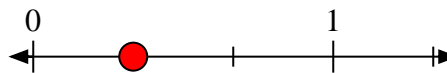
12) Mark the location of  $\frac{3}{9}$



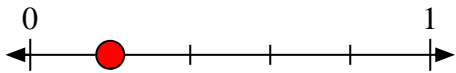
13) Mark the location of  $\frac{3}{3}$



14) Mark the location of  $\frac{1}{3}$



15) Mark the location of  $\frac{1}{5}$



16) Mark the location of  $\frac{4}{4}$

