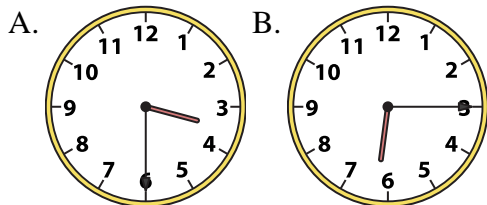




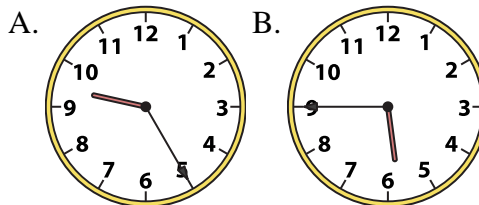
Determine which clock accurately shows the time.

**Answers**

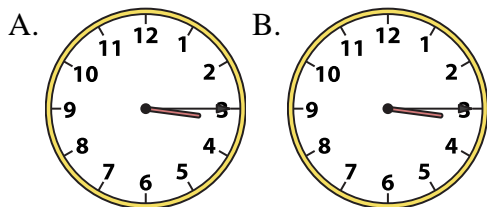
1) 3:30



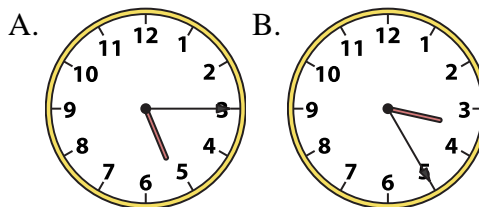
2) 5:45



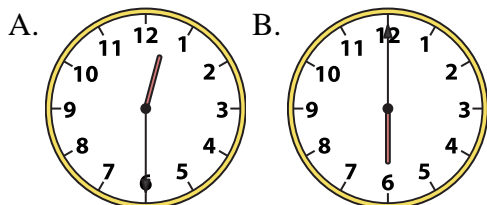
3) 3:15



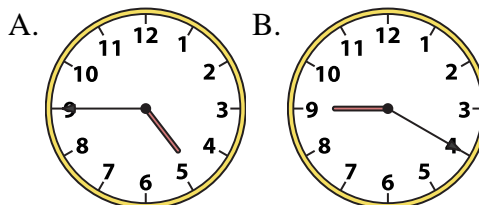
4) 5:15



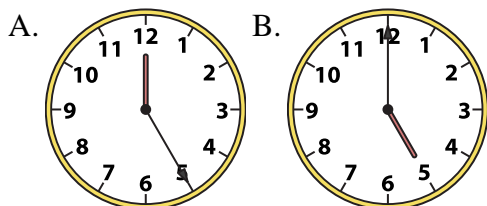
5) 12:30



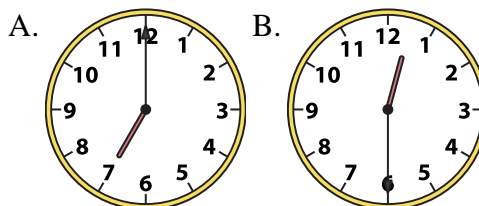
6) 4:45



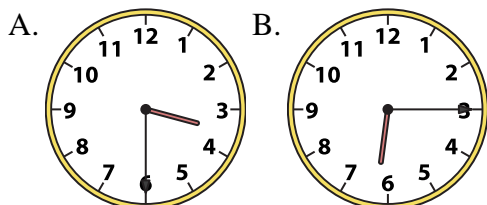
7) 5:00



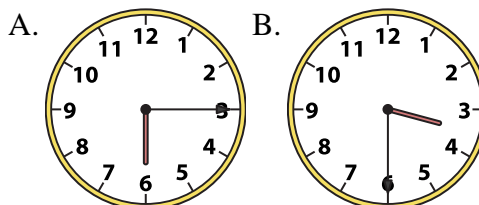
8) 12:30



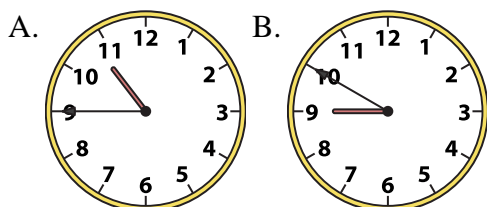
9) 6:15



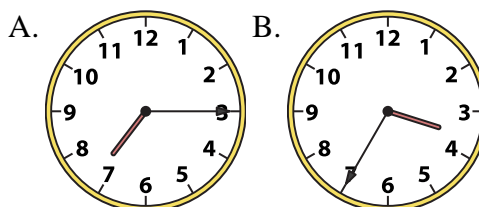
10) 3:30



11) 10:45



12) 7:15



1. \_\_\_\_\_
2. \_\_\_\_\_
3. \_\_\_\_\_
4. \_\_\_\_\_
5. \_\_\_\_\_
6. \_\_\_\_\_
7. \_\_\_\_\_
8. \_\_\_\_\_
9. \_\_\_\_\_
10. \_\_\_\_\_
11. \_\_\_\_\_
12. \_\_\_\_\_

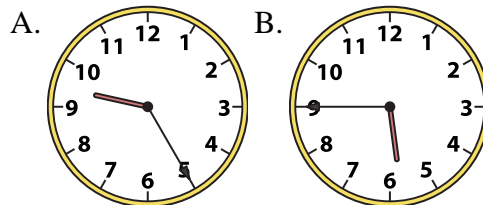
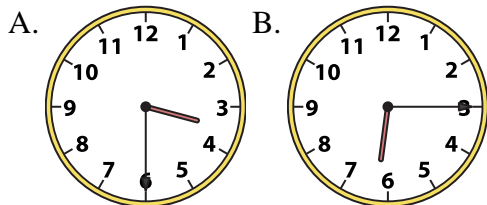


Determine which clock accurately shows the time.

**Answers**

1) 3:30

2) 5:45

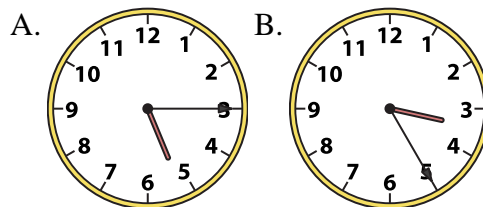
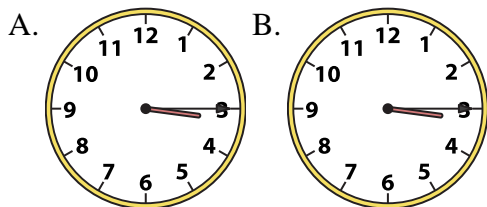


1. **A**

2. **B**

3) 3:15

4) 5:15



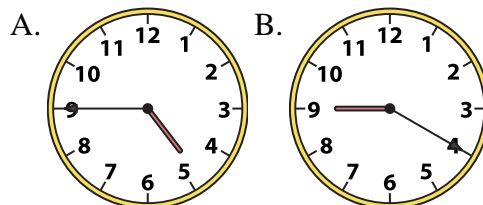
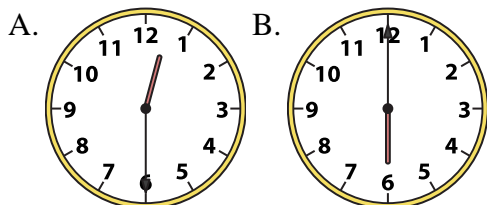
3. **B**

4. **A**

5. **A**

5) 12:30

6) 4:45



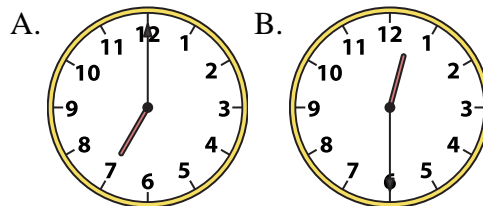
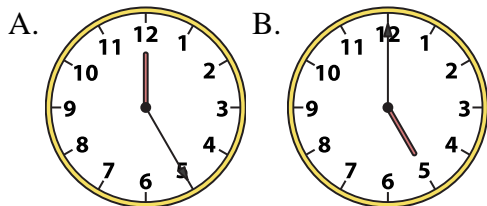
6. **A**

7. **B**

8. **B**

7) 5:00

8) 12:30



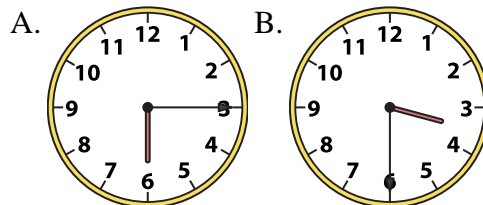
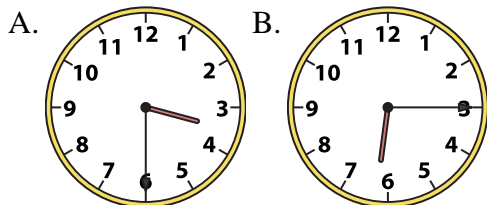
9. **B**

10. **B**

11. **A**

9) 6:15

10) 3:30



12. **A**

11) 10:45

12) 7:15

