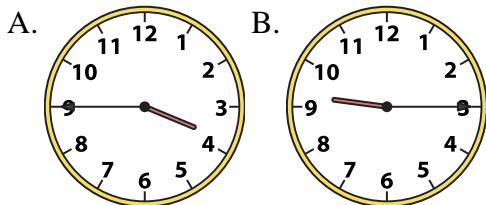




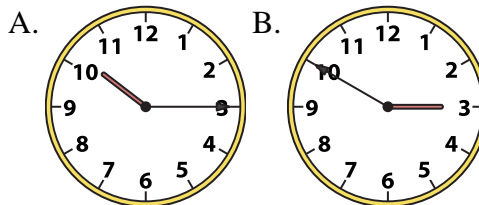
Determine which clock accurately shows the time.

**Answers**

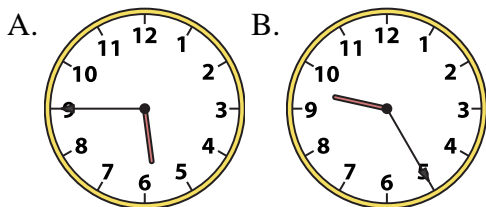
1) 3:45



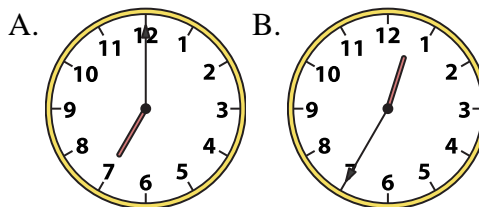
2) 10:15



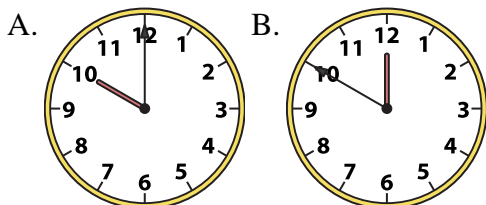
3) 5:45



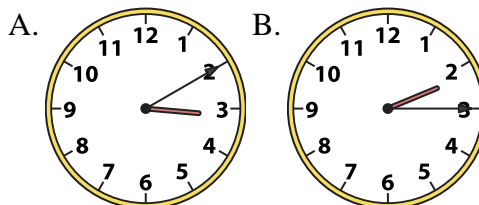
4) 7:00



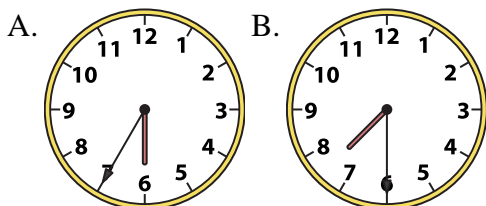
5) 10:00



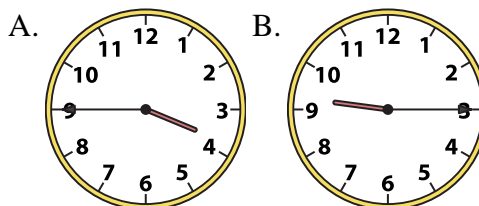
6) 2:15



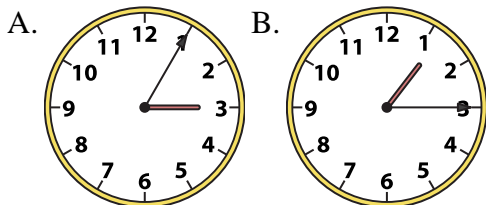
7) 7:30



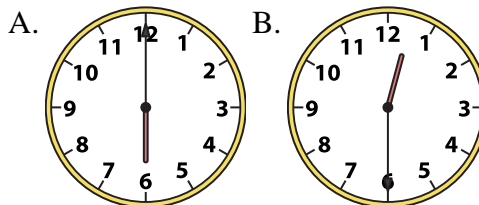
8) 9:15



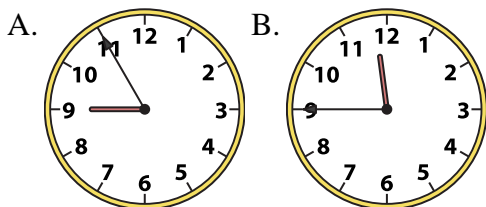
9) 1:15



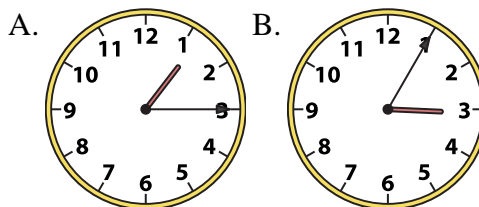
10) 12:30



11) 11:45



12) 1:15



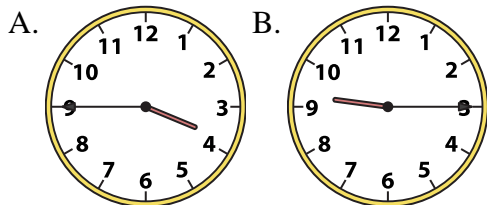
1. \_\_\_\_\_
2. \_\_\_\_\_
3. \_\_\_\_\_
4. \_\_\_\_\_
5. \_\_\_\_\_
6. \_\_\_\_\_
7. \_\_\_\_\_
8. \_\_\_\_\_
9. \_\_\_\_\_
10. \_\_\_\_\_
11. \_\_\_\_\_
12. \_\_\_\_\_



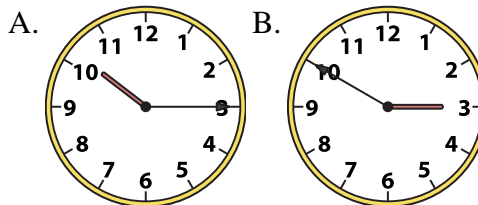
Determine which clock accurately shows the time.

**Answers**

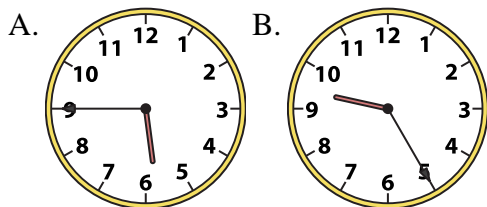
1) 3:45



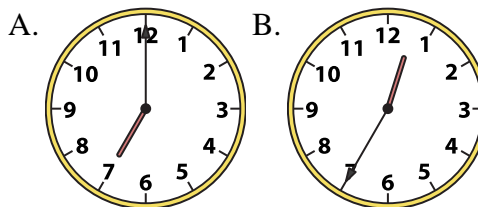
2) 10:15



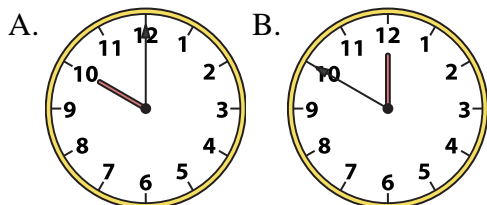
3) 5:45



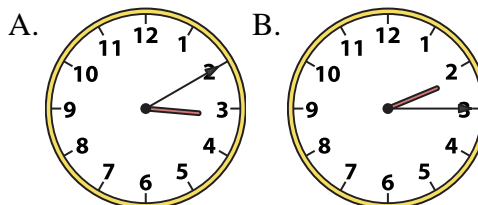
4) 7:00



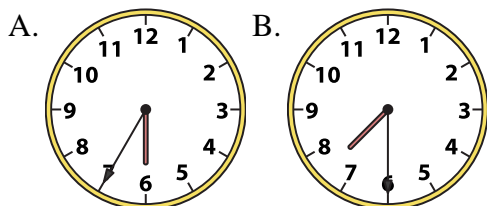
5) 10:00



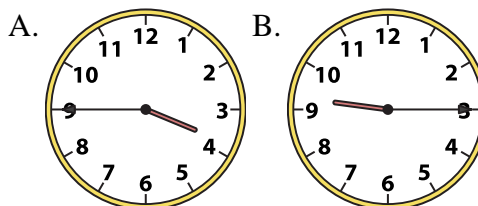
6) 2:15



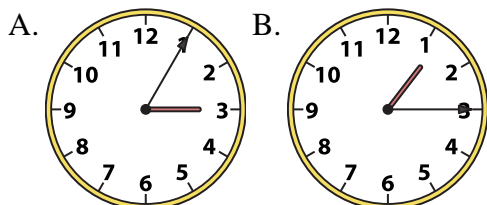
7) 7:30



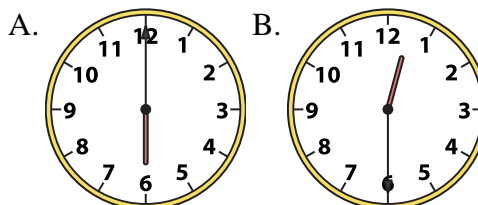
8) 9:15



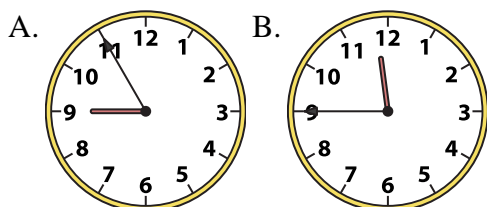
9) 1:15



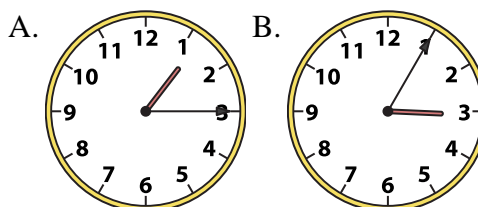
10) 12:30



11) 11:45



12) 1:15



- 1.   **A**
- 2.   **A**
- 3.   **A**
- 4.   **A**
- 5.   **A**
- 6.   **B**
- 7.   **B**
- 8.   **B**
- 9.   **B**
- 10.   **B**
- 11.   **B**
- 12.   **A**