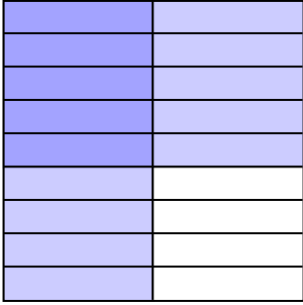




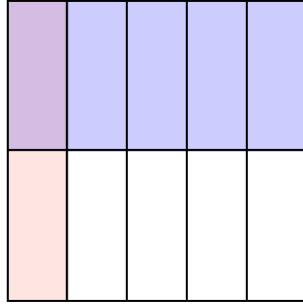


Use the box provided to show a visual example of how to multiply two fractions.


Ex)  $\frac{1}{2} \times \frac{5}{9} =$



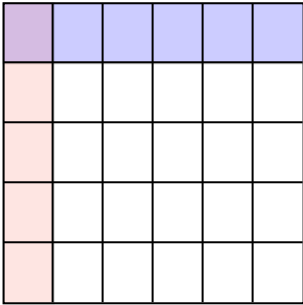
1)  $\frac{1}{5} \times \frac{1}{2} =$



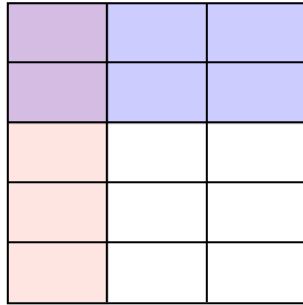
2)  $\frac{6}{7} \times \frac{4}{7} =$




3)  $\frac{1}{6} \times \frac{1}{5} =$



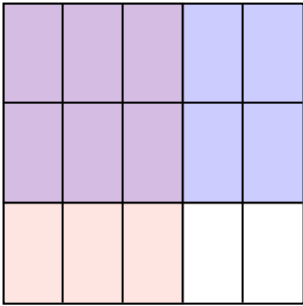
4)  $\frac{1}{3} \times \frac{2}{5} =$



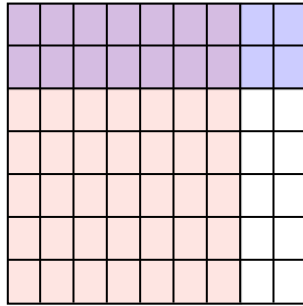
5)  $\frac{1}{2} \times \frac{1}{2} =$



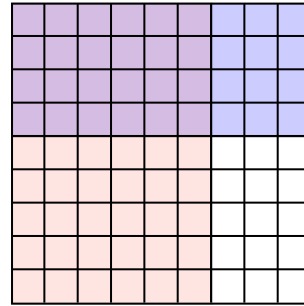
6)  $\frac{3}{5} \times \frac{2}{3} =$



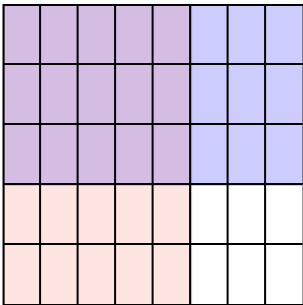
7)  $\frac{7}{9} \times \frac{2}{7} =$



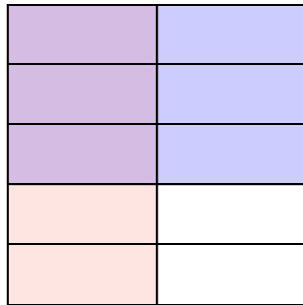
8)  $\frac{6}{9} \times \frac{4}{9} =$



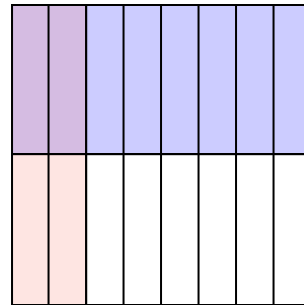
9)  $\frac{5}{8} \times \frac{3}{5} =$



10)  $\frac{1}{2} \times \frac{3}{5} =$



11)  $\frac{2}{8} \times \frac{1}{2} =$



**Answers**

Ex.  $\frac{5}{18}$

1.  $\frac{1}{10}$

2.  $\frac{24}{49}$

3.  $\frac{1}{30}$

4.  $\frac{2}{15}$

5.  $\frac{1}{4}$

6.  $\frac{6}{15}$

7.  $\frac{14}{63}$

8.  $\frac{24}{81}$

9.  $\frac{15}{40}$

10.  $\frac{3}{10}$

11.  $\frac{2}{16}$