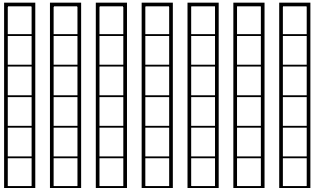


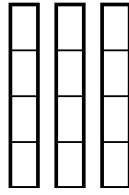


Use the visual models to solve.

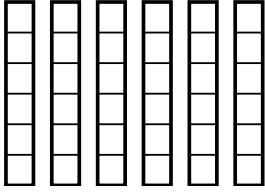
1)  $\frac{4}{6} \times 7 =$



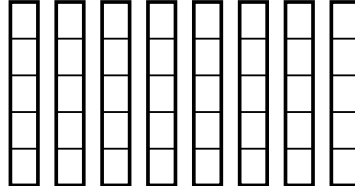
2)  $\frac{1}{4} \times 3 =$



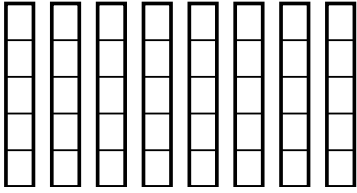
3)  $\frac{4}{6} \times 6 =$



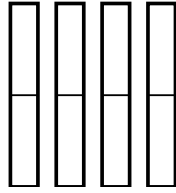
4)  $\frac{1}{5} \times 8 =$



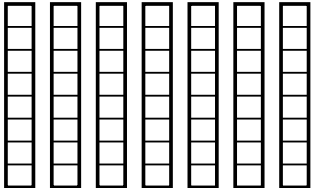
5)  $\frac{4}{5} \times 8 =$



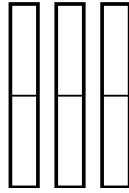
6)  $\frac{1}{2} \times 4 =$



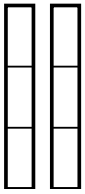
7)  $\frac{1}{8} \times 7 =$



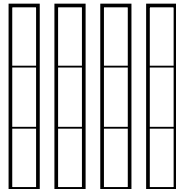
8)  $\frac{1}{2} \times 3 =$



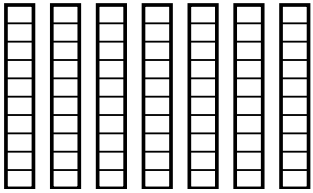
9)  $\frac{1}{3} \times 2 =$



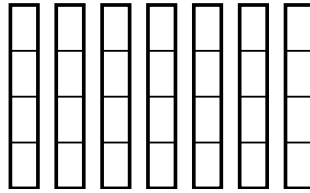
10)  $\frac{2}{3} \times 4 =$



11)  $\frac{3}{10} \times 7 =$



12)  $\frac{2}{4} \times 7 =$



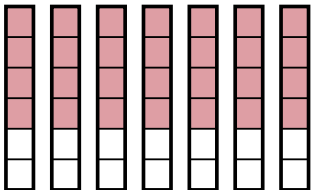
**Answers**

1. \_\_\_\_\_
2. \_\_\_\_\_
3. \_\_\_\_\_
4. \_\_\_\_\_
5. \_\_\_\_\_
6. \_\_\_\_\_
7. \_\_\_\_\_
8. \_\_\_\_\_
9. \_\_\_\_\_
10. \_\_\_\_\_
11. \_\_\_\_\_
12. \_\_\_\_\_

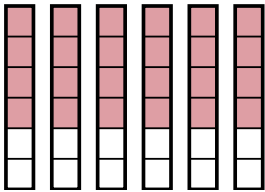


Use the visual models to solve.

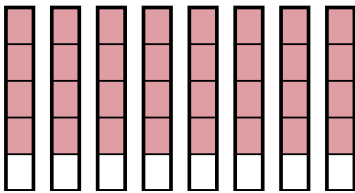
1)  $\frac{4}{6} \times 7 =$



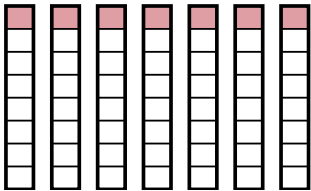
3)  $\frac{4}{6} \times 6 =$



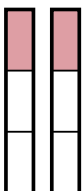
5)  $\frac{4}{5} \times 8 =$



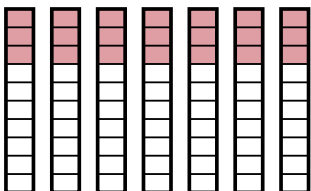
7)  $\frac{1}{8} \times 7 =$



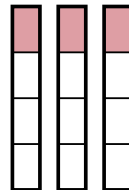
9)  $\frac{1}{3} \times 2 =$



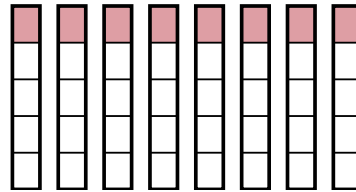
11)  $\frac{3}{10} \times 7 =$



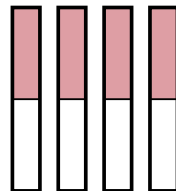
2)  $\frac{1}{4} \times 3 =$



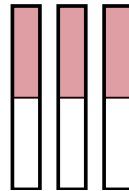
4)  $\frac{1}{5} \times 8 =$



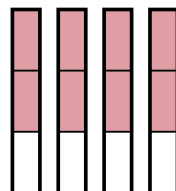
6)  $\frac{1}{2} \times 4 =$



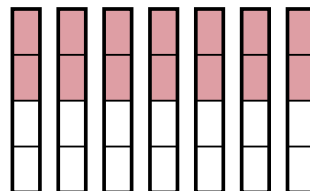
8)  $\frac{1}{2} \times 3 =$



10)  $\frac{2}{3} \times 4 =$



12)  $\frac{2}{4} \times 7 =$



**Answers**

1.  $\frac{28}{6}$

2.  $\frac{3}{4}$

3.  $\frac{24}{6}$

4.  $\frac{8}{5}$

5.  $\frac{32}{5}$

6.  $\frac{4}{2}$

7.  $\frac{7}{8}$

8.  $\frac{3}{2}$

9.  $\frac{2}{3}$

10.  $\frac{8}{3}$

11.  $\frac{21}{10}$

12.  $\frac{14}{4}$