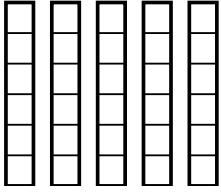


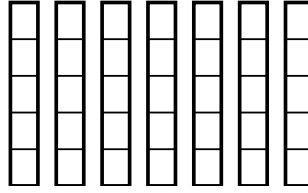


Use the visual models to solve.

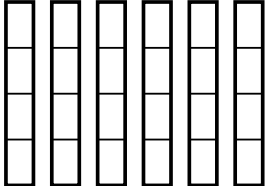
1) $\frac{2}{6} \times 5 =$



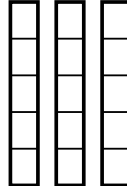
2) $\frac{3}{5} \times 7 =$



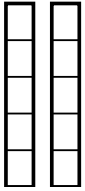
3) $\frac{1}{4} \times 6 =$



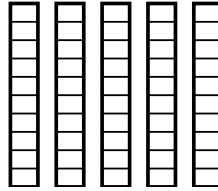
4) $\frac{3}{5} \times 3 =$



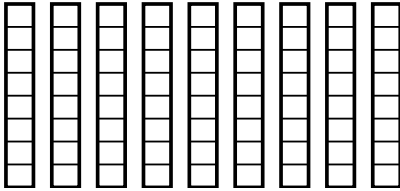
5) $\frac{2}{5} \times 2 =$



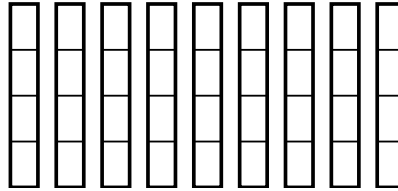
6) $\frac{3}{10} \times 5 =$



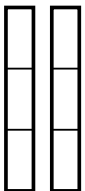
7) $\frac{2}{8} \times 9 =$



8) $\frac{3}{4} \times 9 =$




9) $\frac{2}{3} \times 2 =$



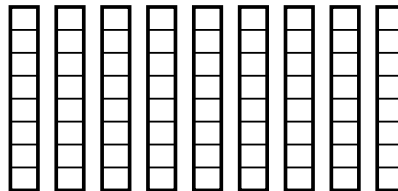
10) $\frac{1}{4} \times 2 =$



11) $\frac{1}{4} \times 8 =$



12) $\frac{6}{8} \times 9 =$



Answers

1. _____

2. _____

3. _____

4. _____

5. _____

6. _____

7. _____

8. _____

9. _____

10. _____

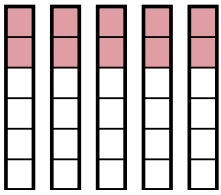
11. _____

12. _____

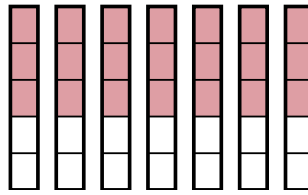


Use the visual models to solve.

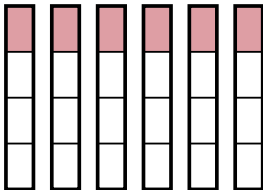
1) $\frac{2}{6} \times 5 =$



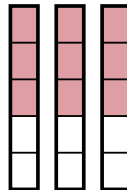
2) $\frac{3}{5} \times 7 =$



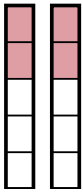
3) $\frac{1}{4} \times 6 =$



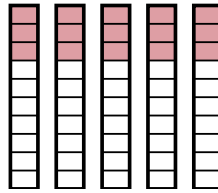
4) $\frac{3}{5} \times 3 =$



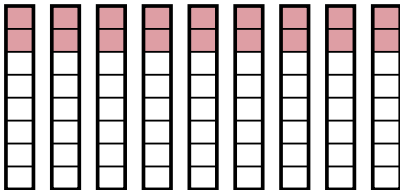
5) $\frac{2}{5} \times 2 =$



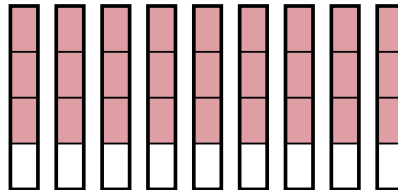
6) $\frac{3}{10} \times 5 =$



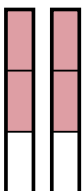
7) $\frac{2}{8} \times 9 =$



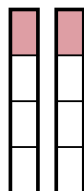
8) $\frac{3}{4} \times 9 =$



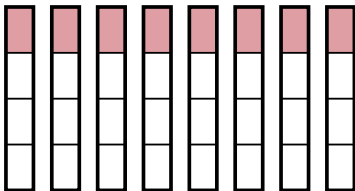
9) $\frac{2}{3} \times 2 =$



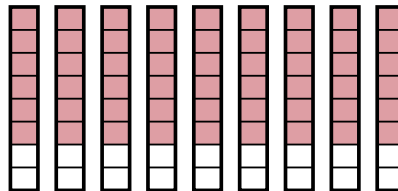
10) $\frac{1}{4} \times 2 =$



11) $\frac{1}{4} \times 8 =$



12) $\frac{6}{8} \times 9 =$



Answers

1. $\frac{10}{6}$

2. $\frac{21}{5}$

3. $\frac{6}{4}$

4. $\frac{9}{5}$

5. $\frac{4}{5}$

6. $\frac{15}{10}$

7. $\frac{18}{8}$

8. $\frac{27}{4}$

9. $\frac{4}{3}$

10. $\frac{2}{4}$

11. $\frac{8}{4}$

12. $\frac{54}{8}$