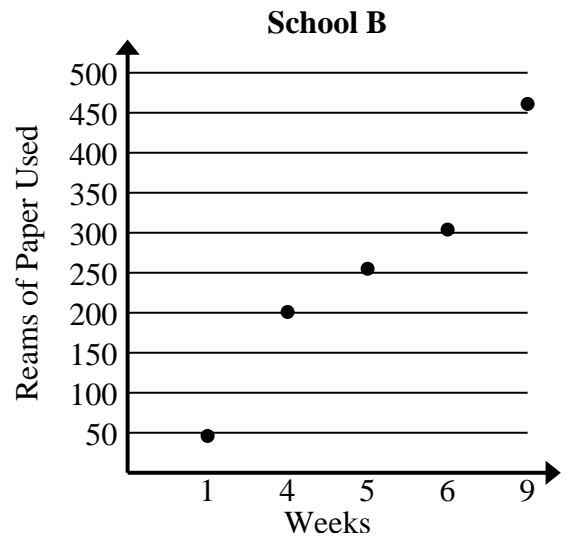




Solve each problem.

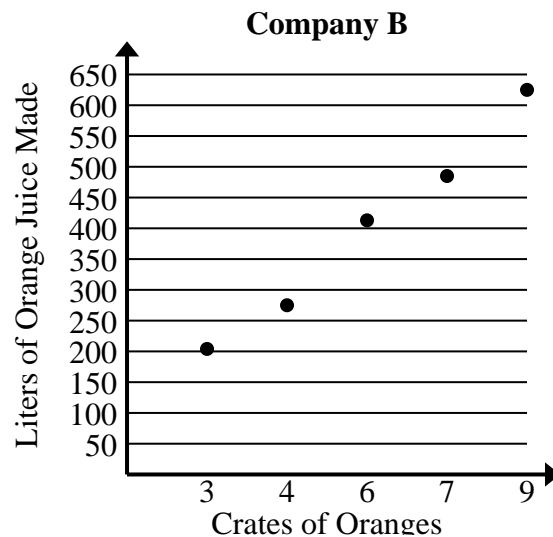
- 1) Compare the approximate reams of paper used per week of School A to School B.

School A	
Weeks	Reams of Paper Used
3	162
4	213
6	318
8	423
9	473



- 2) Compare the approximate liters of orange juice produced per crates used of Company A to Company B.

Company A	
Crates of Oranges	Liters of Orange Juice Made
1	76
2	147
3	215
7	495
9	636





Solve each problem.

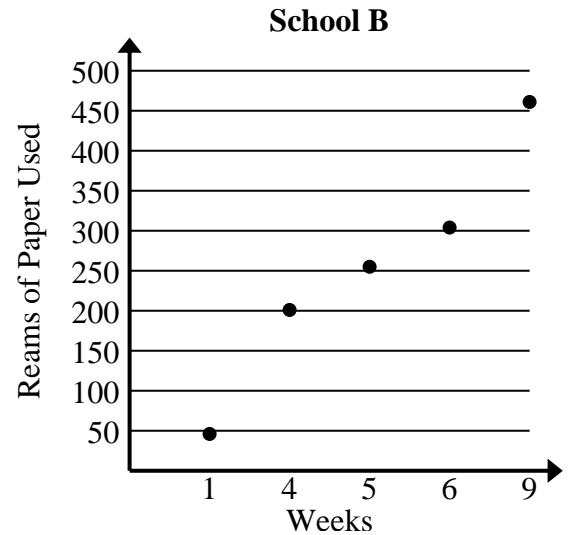
- 1) Compare the approximate reams of paper used per week of School A to School B.

School A	
Weeks	Reams of Paper Used
3	162
4	213
6	318
8	423
9	473

$$162+213+318+423+473 = 1,589 \text{ total reams used}$$

$$3+4+6+8+9 = 30 \text{ total weeks}$$

$$1,589 \div 30 = 53.0$$



$$46+201+255+304+461 = 1,267 \text{ total reams used}$$

$$1+4+5+6+9 = 25 \text{ total weeks}$$

$$1,267 \div 25 = 50.7$$

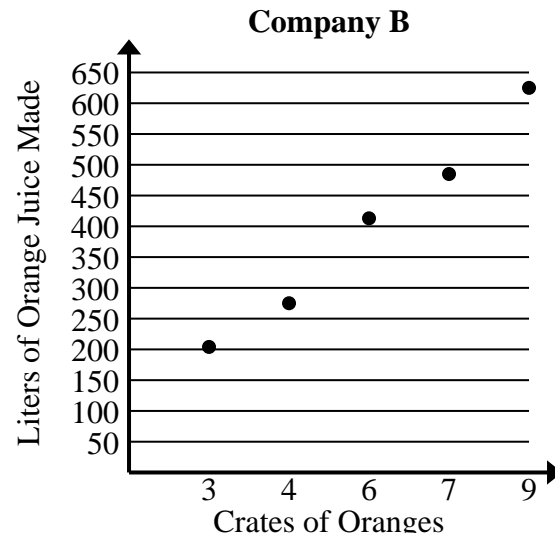
- 2) Compare the approximate liters of orange juice produced per crates used of Company A to Company B.

Company A	
Crates of Oranges	Liters of Orange Juice Made
1	76
2	147
3	215
7	495
9	636

$$76+147+215+495+636 = 1,569 \text{ total liters}$$

$$1+2+3+7+9 = 22 \text{ total crates}$$

$$1,569 \div 22 = 71.3$$



$$204+275+413+485+625 = 2,002 \text{ total liters}$$

$$3+4+6+7+9 = 29 \text{ total crates}$$

$$2,002 \div 29 = 69.0$$