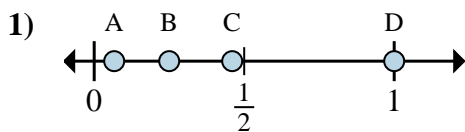


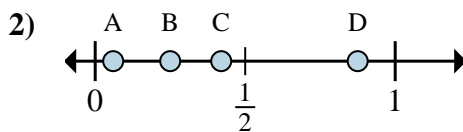


Determine which letter best shows the location of the fraction.

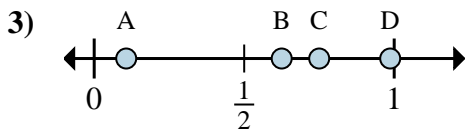
**Answers**



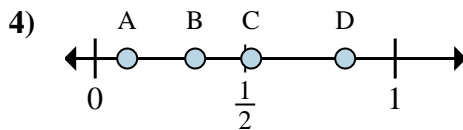
- a. Which letter best shows  $\frac{4}{4}$ ?
- b. Which letter best shows  $\frac{1}{4}$ ?



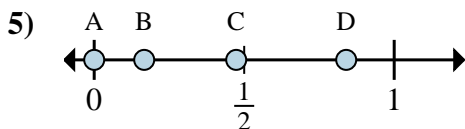
- a. Which letter best shows  $\frac{7}{8}$ ?
- b. Which letter best shows  $\frac{2}{8}$ ?



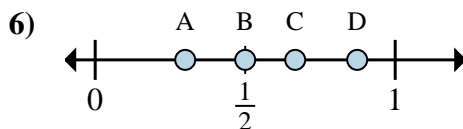
- a. Which letter best shows  $\frac{5}{8}$ ?
- b. Which letter best shows  $\frac{6}{8}$ ?



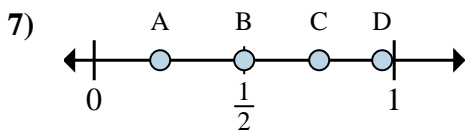
- a. Which letter best shows  $\frac{5}{6}$ ?
- b. Which letter best shows  $\frac{2}{6}$ ?



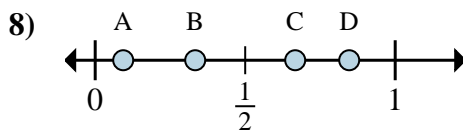
- a. Which letter best shows  $\frac{0}{6}$ ?
- b. Which letter best shows  $\frac{1}{6}$ ?



- a. Which letter best shows  $\frac{3}{6}$ ?
- b. Which letter best shows  $\frac{4}{6}$ ?



- a. Which letter best shows  $\frac{3}{4}$ ?
- b. Which letter best shows  $\frac{2}{4}$ ?



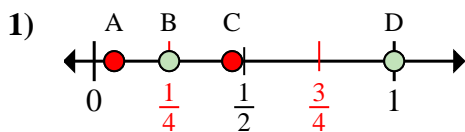
- a. Which letter best shows  $\frac{2}{3}$ ?
- b. Which letter best shows  $\frac{1}{3}$ ?

- 1. \_\_\_\_\_
- 2. \_\_\_\_\_
- 3. \_\_\_\_\_
- 4. \_\_\_\_\_
- 5. \_\_\_\_\_
- 6. \_\_\_\_\_
- 7. \_\_\_\_\_
- 8. \_\_\_\_\_

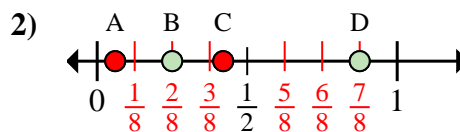


Determine which letter best shows the location of the fraction.

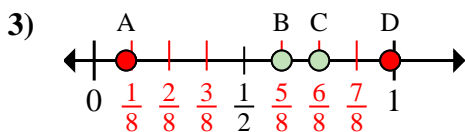
**Answers**



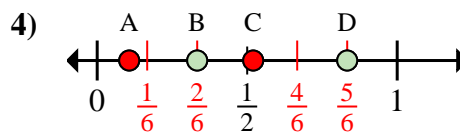
- a. Which letter best shows  $\frac{4}{4}$ ?
- b. Which letter best shows  $\frac{1}{4}$ ?



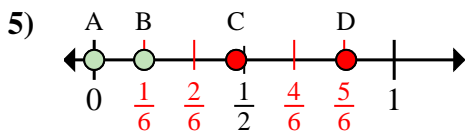
- a. Which letter best shows  $\frac{7}{8}$ ?
- b. Which letter best shows  $\frac{2}{8}$ ?



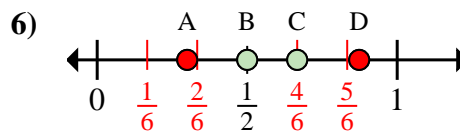
- a. Which letter best shows  $\frac{5}{8}$ ?
- b. Which letter best shows  $\frac{6}{8}$ ?



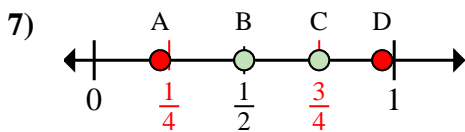
- a. Which letter best shows  $\frac{5}{6}$ ?
- b. Which letter best shows  $\frac{2}{6}$ ?



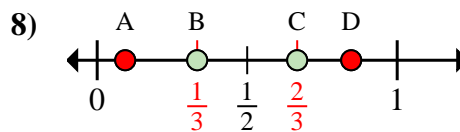
- a. Which letter best shows  $\frac{0}{6}$ ?
- b. Which letter best shows  $\frac{1}{6}$ ?



- a. Which letter best shows  $\frac{3}{6}$ ?
- b. Which letter best shows  $\frac{4}{6}$ ?



- a. Which letter best shows  $\frac{3}{4}$ ?
- b. Which letter best shows  $\frac{2}{4}$ ?



- a. Which letter best shows  $\frac{2}{3}$ ?
- b. Which letter best shows  $\frac{1}{3}$ ?

- 1.   D     B
- 2.   D     B
- 3.   B     C
- 4.   D     B
- 5.   A     B
- 6.   B     C
- 7.   C     B
- 8.   C     B