



Use the numberline to solve each problem. The first is marked for you.

**Answers**




1. \_\_\_\_\_



2. \_\_\_\_\_



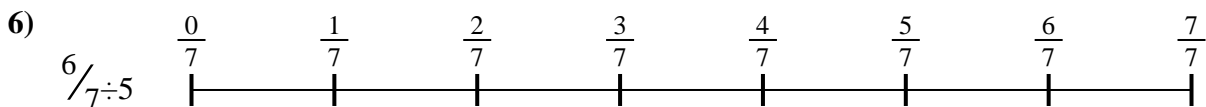
3. \_\_\_\_\_



4. \_\_\_\_\_



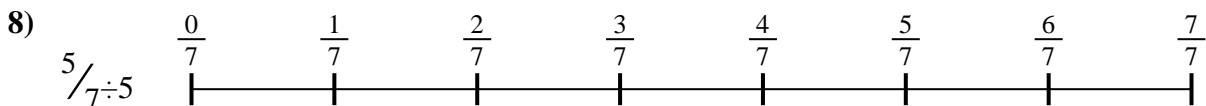
5. \_\_\_\_\_




6. \_\_\_\_\_



7. \_\_\_\_\_



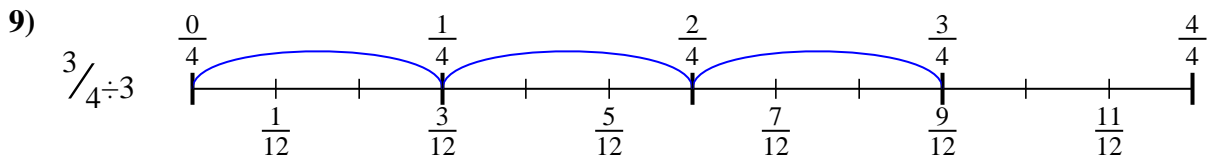
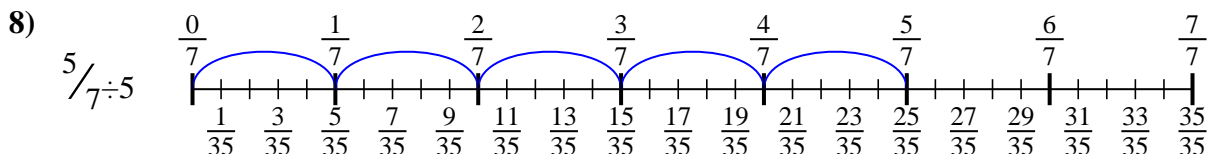
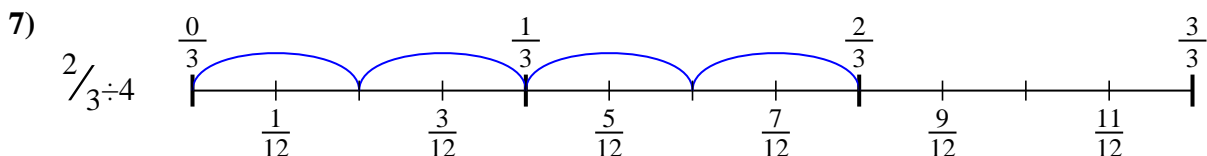
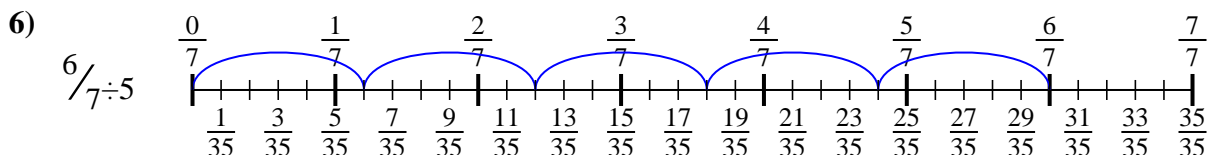
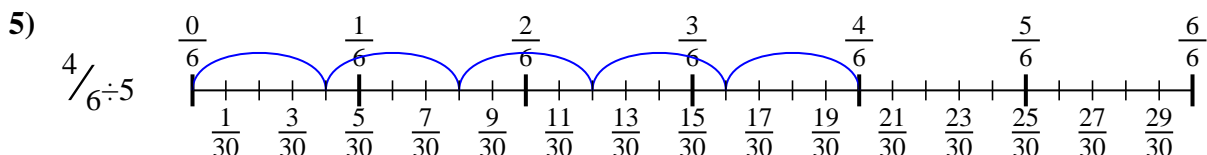
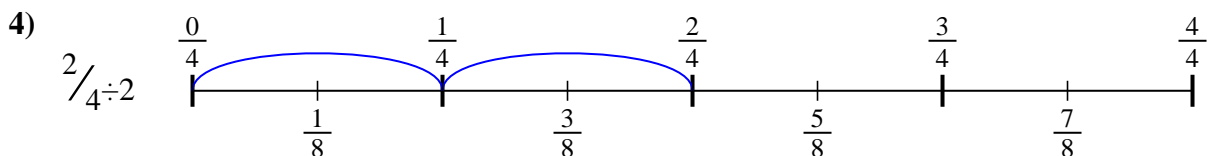
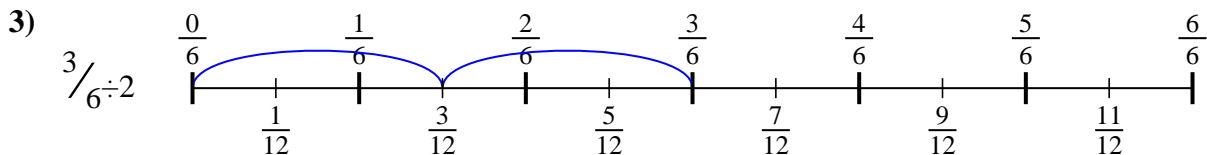
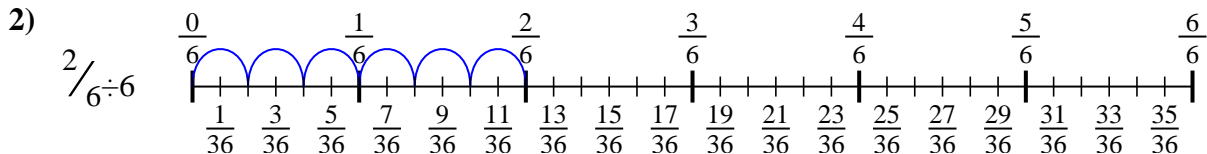
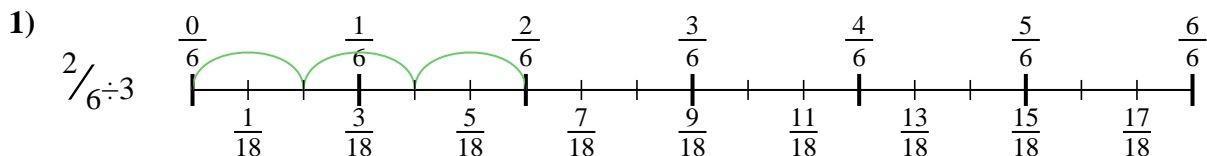
8. \_\_\_\_\_



9. \_\_\_\_\_



Use the numberline to solve each problem. The first is marked for you.



**Answers**

1.  $\frac{2}{18}$

2.  $\frac{2}{36}$

3.  $\frac{3}{12}$

4.  $\frac{2}{8}$

5.  $\frac{4}{30}$

6.  $\frac{6}{35}$

7.  $\frac{2}{12}$

8.  $\frac{5}{35}$

9.  $\frac{3}{12}$



Use the numberline to solve each problem. The first is marked for you.

**Answers**

$\frac{2}{18}$

$\frac{2}{8}$

$\frac{2}{36}$

$\frac{3}{12}$

$\frac{6}{35}$

$\frac{5}{35}$

$\frac{4}{30}$

$\frac{2}{12}$

$\frac{3}{12}$

1. \_\_\_\_\_

2. \_\_\_\_\_

3. \_\_\_\_\_

4. \_\_\_\_\_

5. \_\_\_\_\_

6. \_\_\_\_\_

7. \_\_\_\_\_

8. \_\_\_\_\_

9. \_\_\_\_\_

