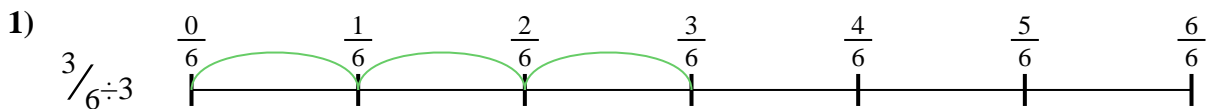




Use the numberline to solve each problem. The first is marked for you.

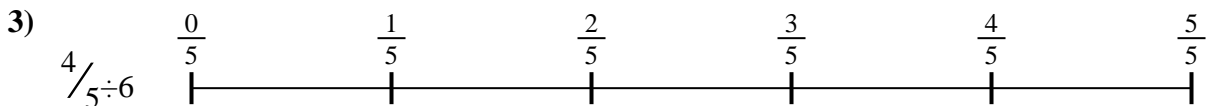
**Answers**



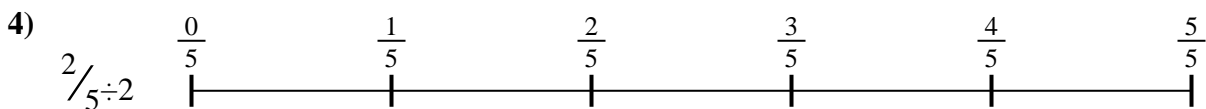
1. \_\_\_\_\_



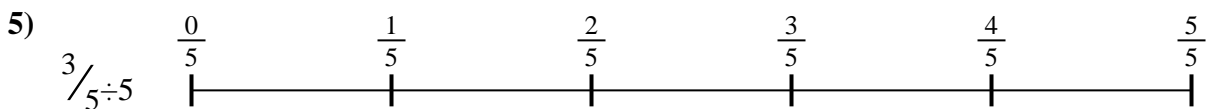
2. \_\_\_\_\_



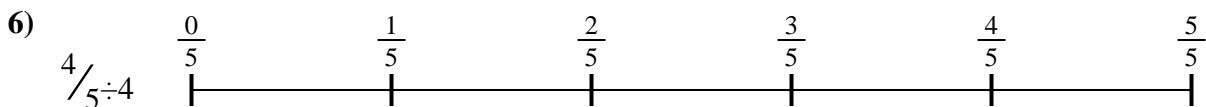
3. \_\_\_\_\_



4. \_\_\_\_\_



5. \_\_\_\_\_



6. \_\_\_\_\_



7. \_\_\_\_\_



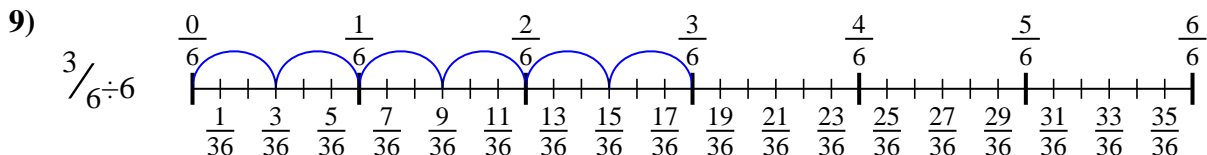
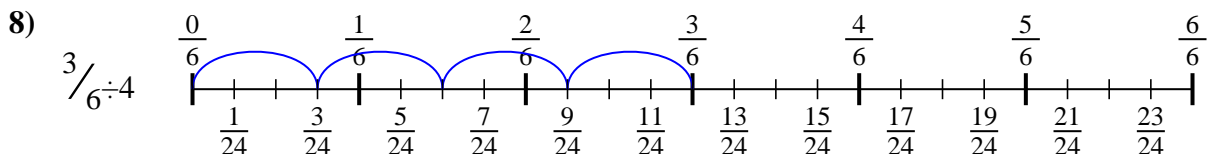
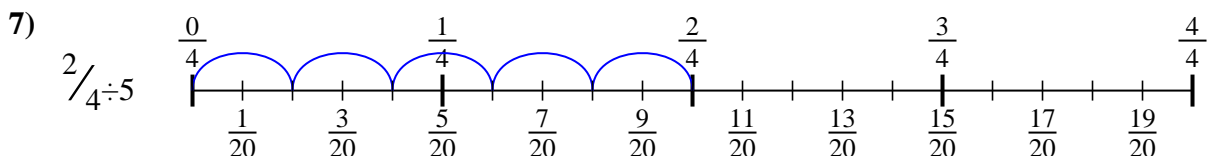
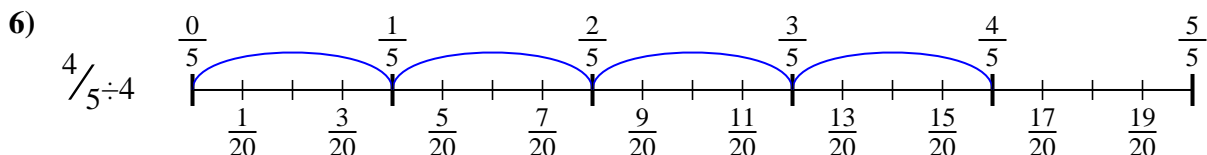
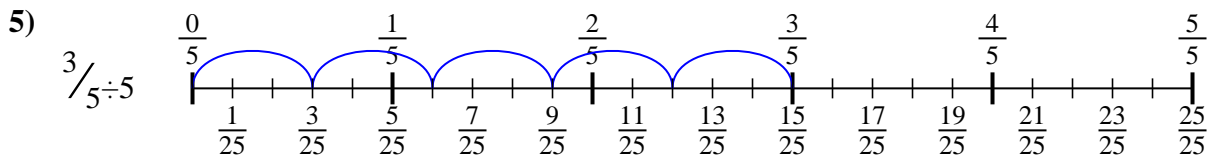
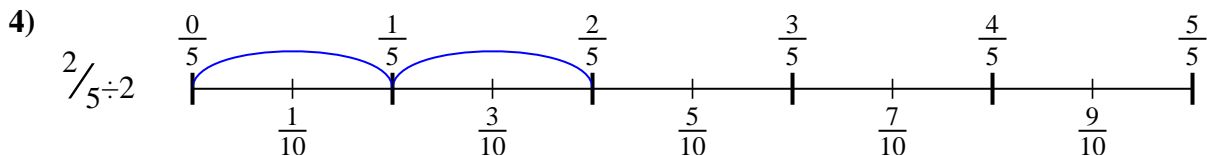
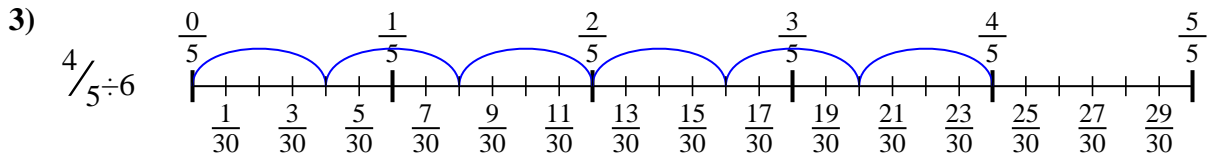
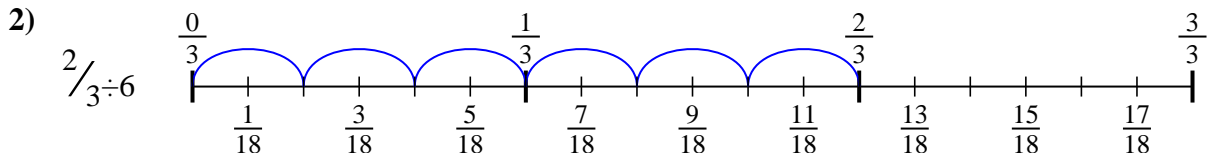
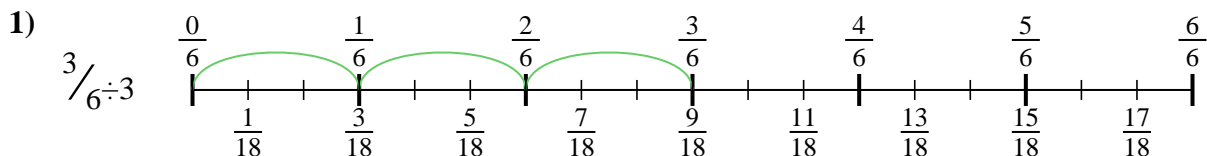
8. \_\_\_\_\_



9. \_\_\_\_\_



Use the numberline to solve each problem. The first is marked for you.



**Answers**

1.  $\frac{3}{18}$

2.  $\frac{2}{18}$

3.  $\frac{4}{30}$

4.  $\frac{2}{10}$

5.  $\frac{3}{25}$

6.  $\frac{4}{20}$

7.  $\frac{2}{20}$

8.  $\frac{3}{24}$

9.  $\frac{3}{36}$



Use the numberline to solve each problem. The first is marked for you.

**Answers**

$$\frac{3}{24}$$

$$\frac{2}{10}$$

$$\frac{3}{36}$$

$$\frac{2}{20}$$

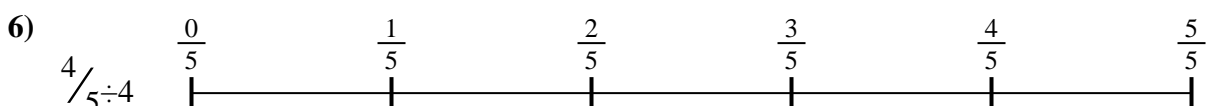
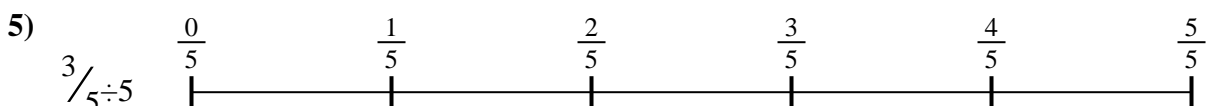
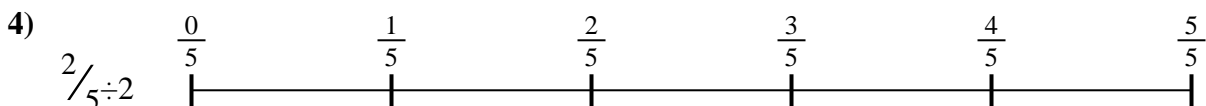
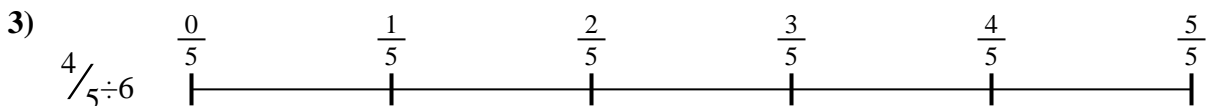
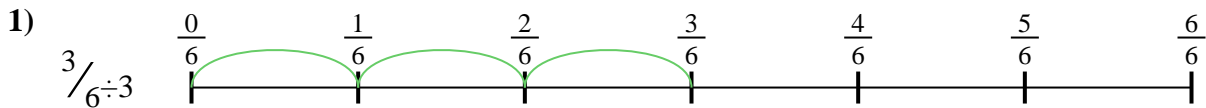
$$\frac{3}{18}$$

$$\frac{4}{20}$$

$$\frac{4}{30}$$

$$\frac{2}{18}$$

$$\frac{3}{25}$$



1. \_\_\_\_\_
2. \_\_\_\_\_
3. \_\_\_\_\_
4. \_\_\_\_\_
5. \_\_\_\_\_
6. \_\_\_\_\_
7. \_\_\_\_\_
8. \_\_\_\_\_
9. \_\_\_\_\_