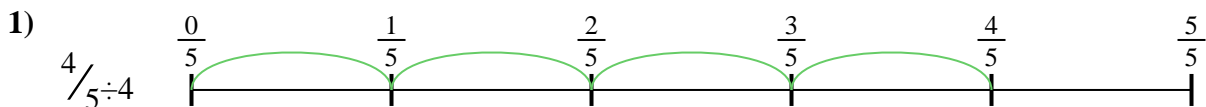




Use the numberline to solve each problem. The first is marked for you.

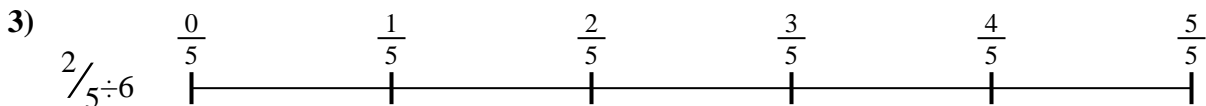
Answers




1. _____



2. _____



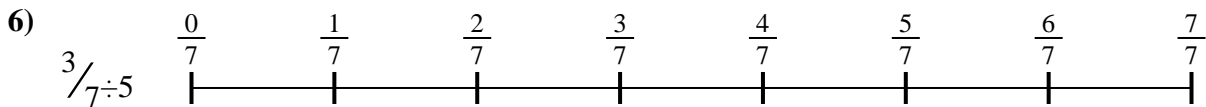
3. _____



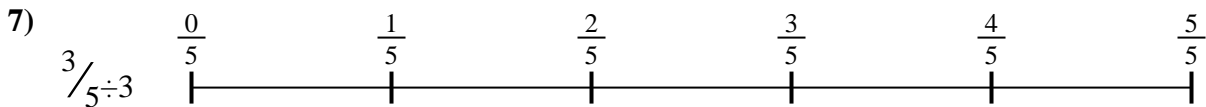
4. _____



5. _____



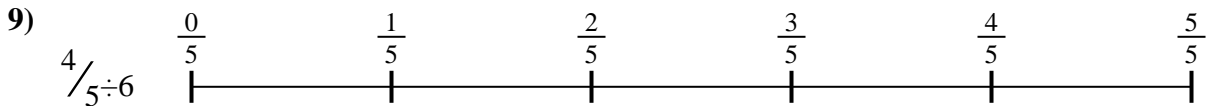
6. _____



7. _____



8. _____

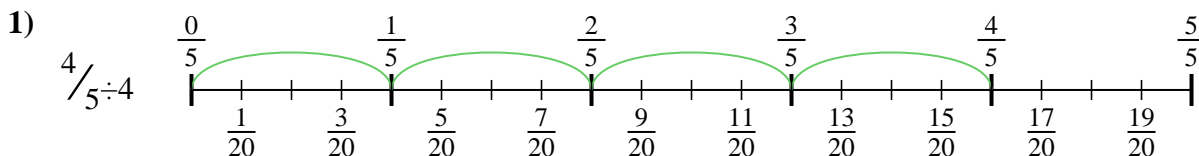


9. _____

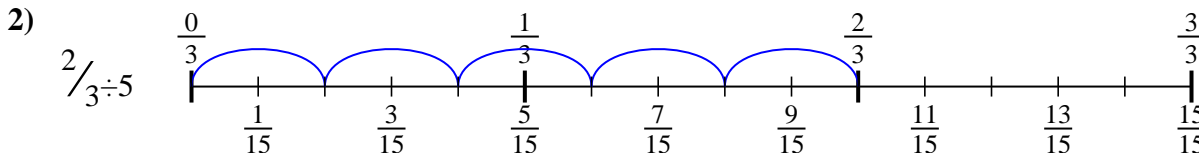


Use the numberline to solve each problem. The first is marked for you.

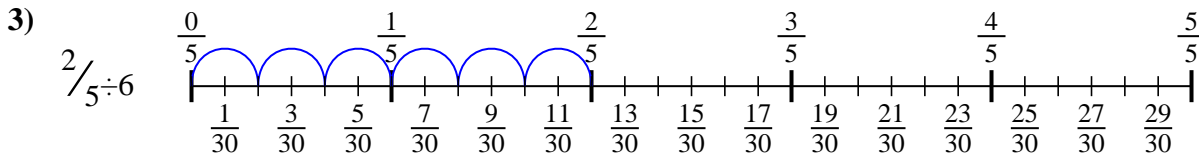
Answers



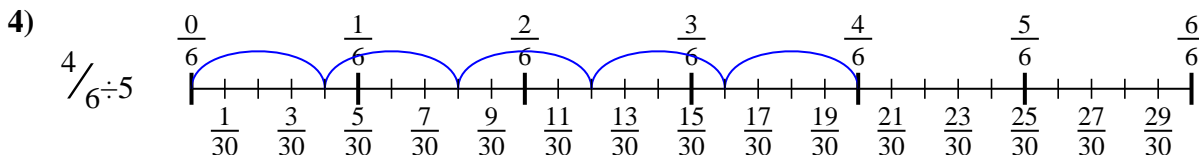
1. $\frac{4}{20}$



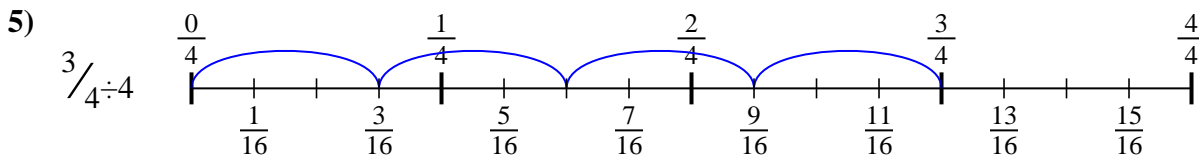
2. $\frac{2}{15}$



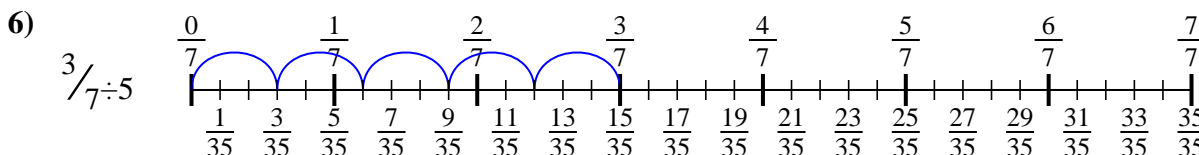
3. $\frac{2}{30}$



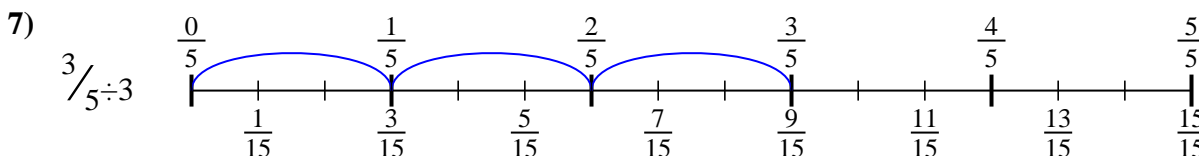
4. $\frac{4}{30}$



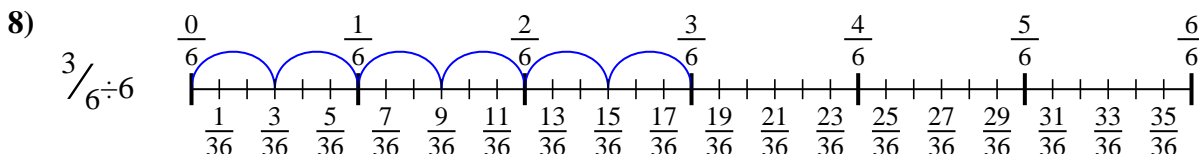
5. $\frac{3}{16}$



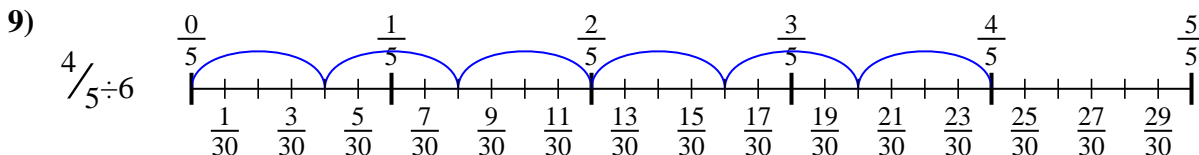
6. $\frac{3}{35}$



7. $\frac{3}{15}$



8. $\frac{3}{36}$



9. $\frac{4}{30}$



Use the numberline to solve each problem. The first is marked for you.

Answers

$\frac{4}{20}$

$\frac{3}{36}$

$\frac{3}{35}$

$\frac{4}{30}$

$\frac{3}{15}$

$\frac{3}{16}$

$\frac{2}{15}$

$\frac{2}{30}$

$\frac{4}{30}$

1. _____

2. _____

3. _____

4. _____

5. _____

6. _____

7. _____

8. _____

9. _____

