




Use the numberline to solve each problem. The first is marked for you.

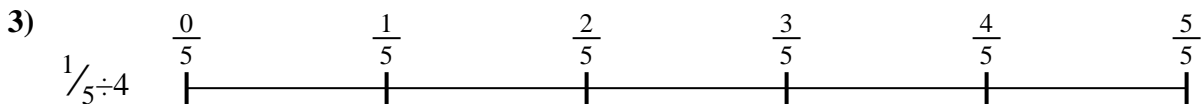
Answers



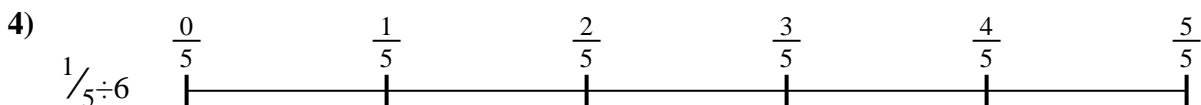
1. _____



2. _____



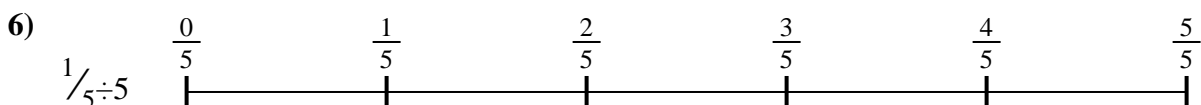
3. _____




4. _____




5. _____



6. _____



7. _____



8. _____

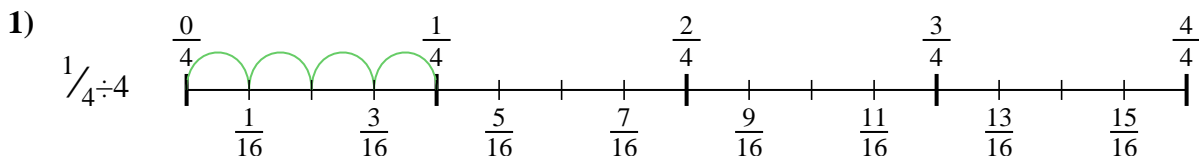


9. _____

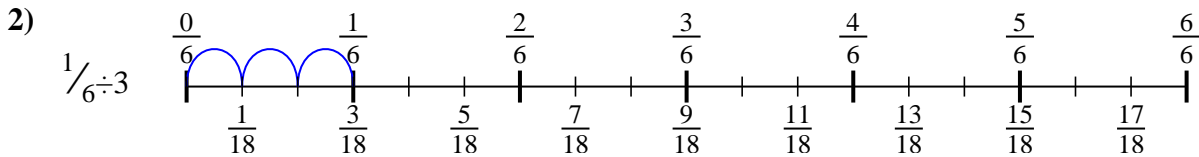


Use the numberline to solve each problem. The first is marked for you.

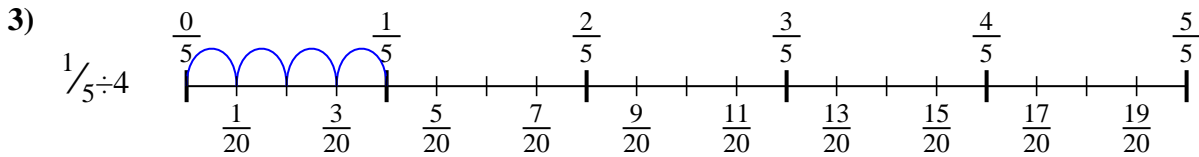
Answers



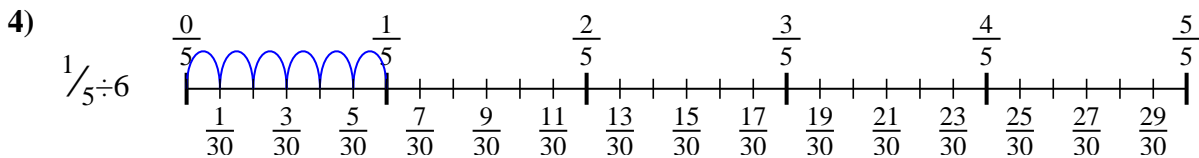
1. $\frac{1}{16}$



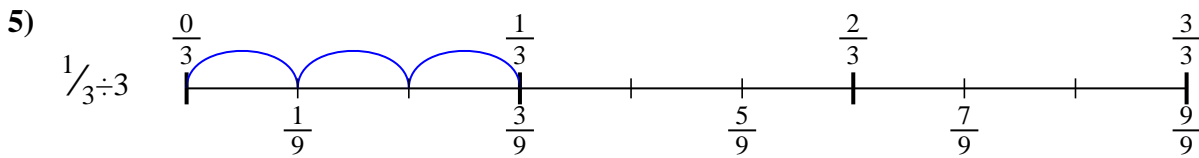
2. $\frac{1}{18}$



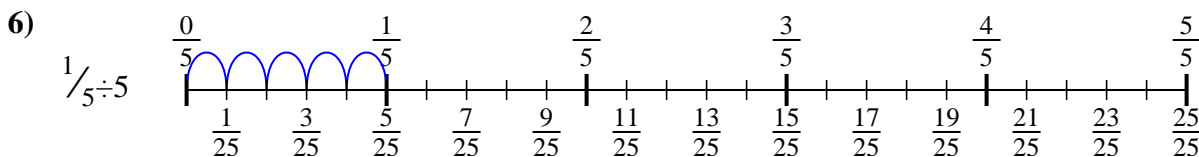
3. $\frac{1}{20}$



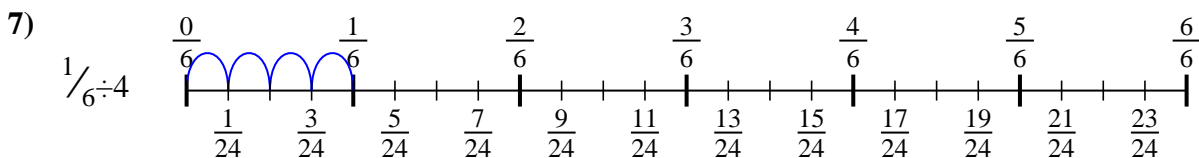
4. $\frac{1}{30}$



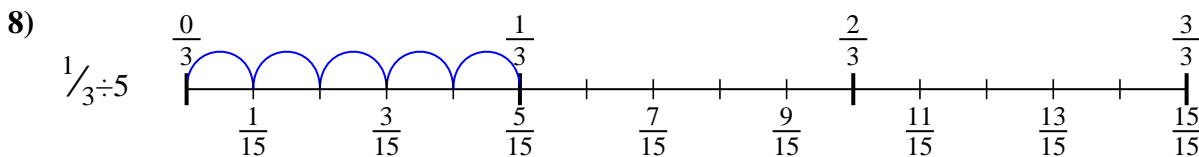
5. $\frac{1}{9}$



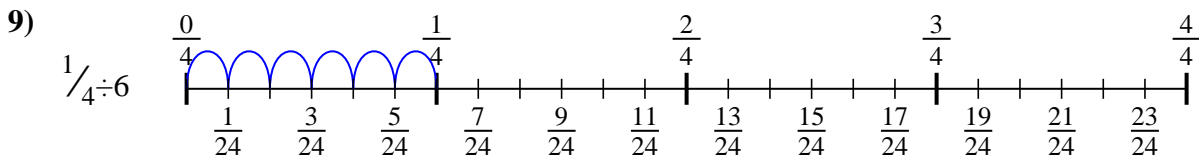
6. $\frac{1}{25}$



7. $\frac{1}{24}$



8. $\frac{1}{15}$



9. $\frac{1}{24}$



Use the numberline to solve each problem. The first is marked for you.

Answers

$\frac{1}{30}$

$\frac{1}{9}$

$\frac{1}{20}$

$\frac{1}{24}$

$\frac{1}{25}$

$\frac{1}{24}$

$\frac{1}{18}$

$\frac{1}{16}$

$\frac{1}{15}$

1. _____

2. _____

3. _____

4. _____

5. _____

6. _____

7. _____

8. _____

9. _____

