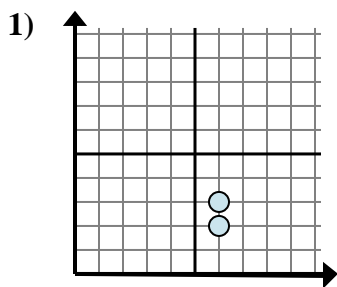


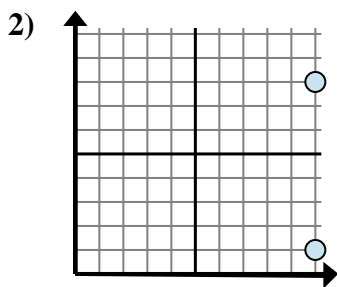


Determine which expression best shows the distance between the two points.

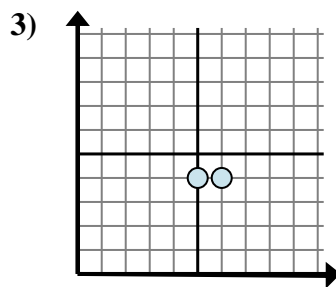
Answers



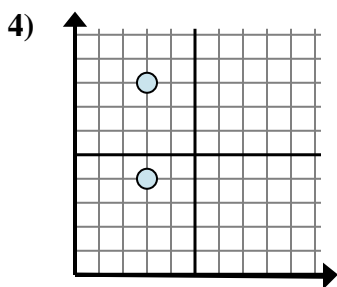
- A. $3 - 2$
- B. $6 - 6$
- C. $3 - 6$
- D. $2 - 3$



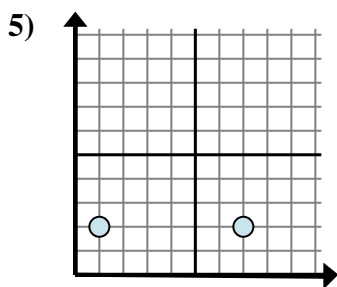
- A. $10 - 10$
- B. $10 - 8$
- C. $8 - 10$
- D. $8 - 1$



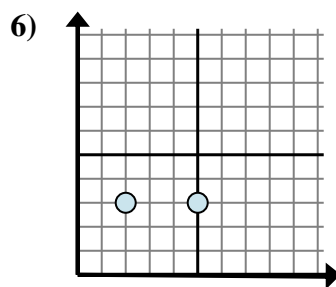
- A. $6 - 5$
- B. $4 - 4$
- C. $5 - 4$
- D. $6 - 4$



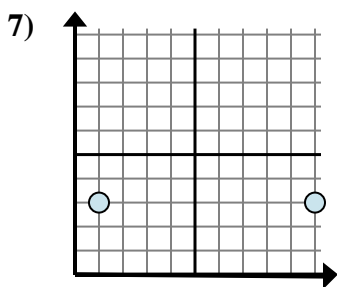
- A. $3 - 3$
- B. $3 - 4$
- C. $8 - 4$
- D. $4 - 8$



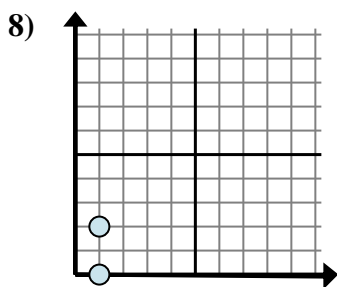
- A. $1 - 2$
- B. $2 - 2$
- C. $7 - 1$
- D. $2 - 2$



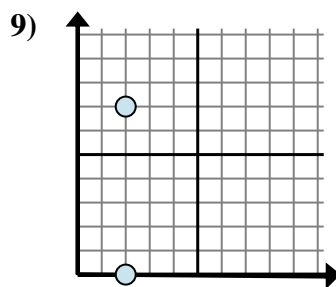
- A. $3 - 5$
- B. $2 - 5$
- C. $5 - 2$
- D. $3 - 5$



- A. $10 - 1$
- B. $3 - 3$
- C. $1 - 3$
- D. $3 - 10$



- A. $2 - 0$
- B. $1 - 0$
- C. $1 - 1$
- D. $2 - 1$

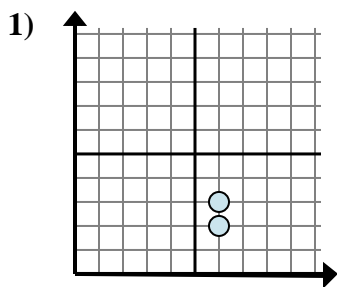


- A. $2 - 2$
- B. $0 - 2$
- C. $7 - 0$
- D. $2 - 7$

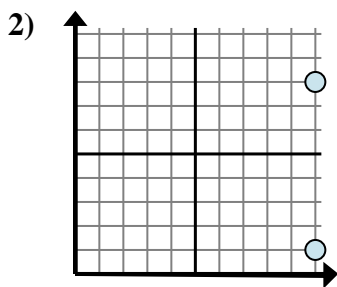
1. _____
2. _____
3. _____
4. _____
5. _____
6. _____
7. _____
8. _____
9. _____



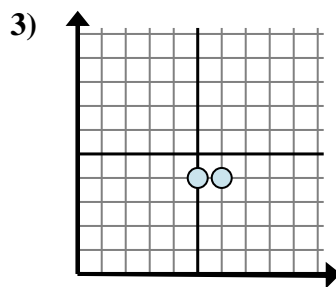
Determine which expression best shows the distance between the two points.



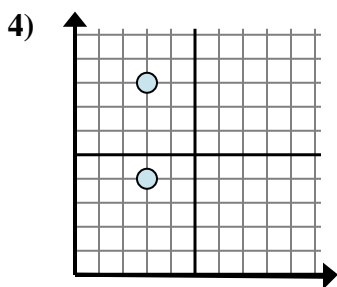
- A. $3 - 2$
- B. $6 - 6$
- C. $3 - 6$
- D. $2 - 3$



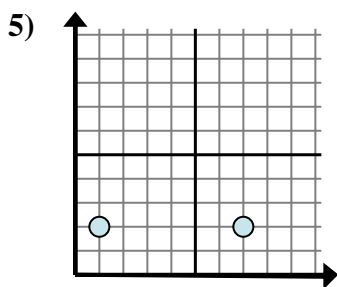
- A. $10 - 10$
- B. $10 - 8$
- C. $8 - 10$
- D. $8 - 1$



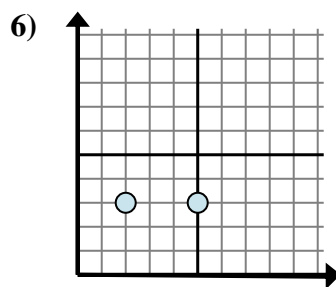
- A. $6 - 5$
- B. $4 - 4$
- C. $5 - 4$
- D. $6 - 4$



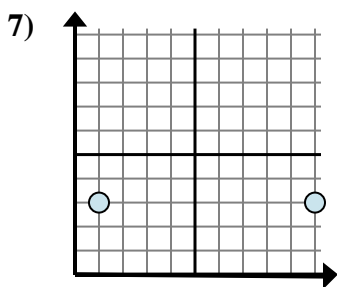
- A. $3 - 3$
- B. $3 - 4$
- C. $8 - 4$
- D. $4 - 8$



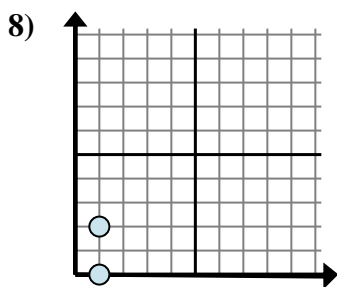
- A. $1 - 2$
- B. $2 - 2$
- C. $7 - 1$
- D. $2 - 2$



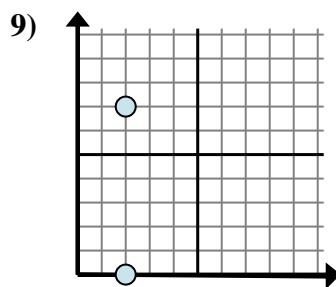
- A. $3 - 5$
- B. $2 - 5$
- C. $5 - 2$
- D. $3 - 5$



- A. $10 - 1$
- B. $3 - 3$
- C. $1 - 3$
- D. $3 - 10$



- A. $2 - 0$
- B. $1 - 0$
- C. $1 - 1$
- D. $2 - 1$



- A. $2 - 2$
- B. $0 - 2$
- C. $7 - 0$
- D. $2 - 7$

Answers

1. **A**

2. **D**

3. **A**

4. **C**

5. **C**

6. **C**

7. **A**

8. **A**

9. **C**