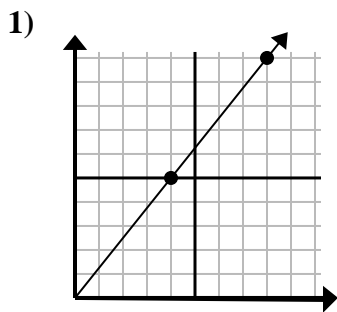


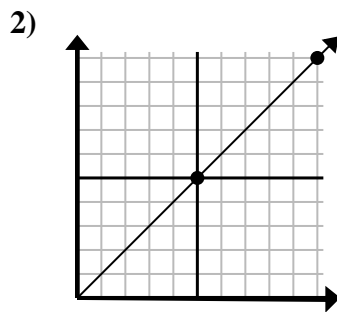


Determine which choice represents a point on the line if it were to continue.

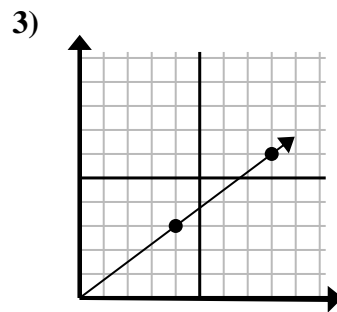
Answers



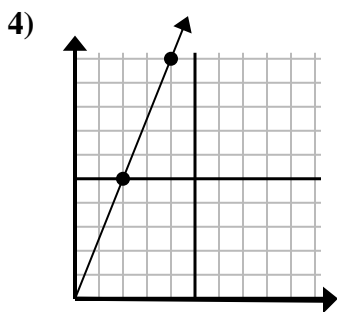
- A. (20 , 25)
- B. (12 , 15)
- C. (24 , 30)
- D. (11 , 10)



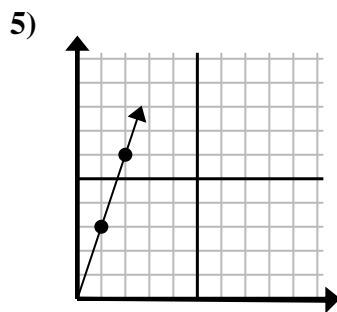
- A. (15 , 15)
- B. (12 , 10)
- C. (14 , 6)
- D. (25 , 25)



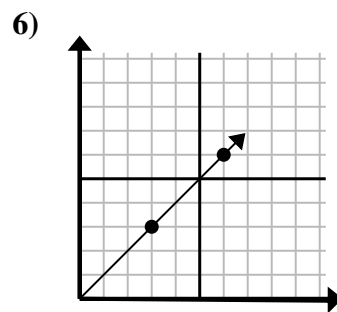
- A. (28 , 21)
- B. (12 , 9)
- C. (24 , 18)
- D. (16 , 12)



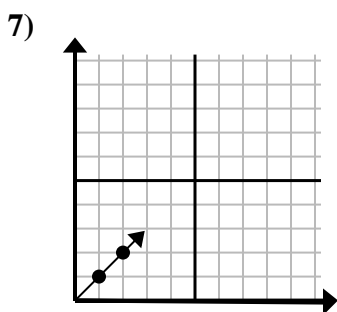
- A. (6 , 15)
- B. (5 , 9)
- C. (8 , 20)
- D. (12 , 30)



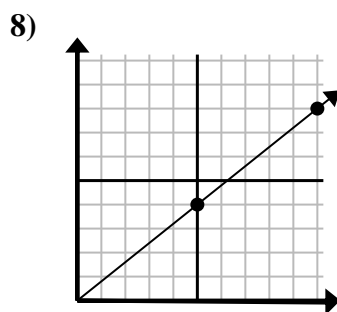
- A. (4 , 12)
- B. (3 , 9)
- C. (4 , 6)
- D. (7 , 6)



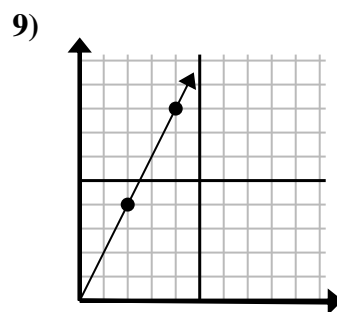
- A. (12 , 12)
- B. (9 , 9)
- C. (18 , 18)
- D. (9 , 5)



- A. (5 , 6)
- B. (3 , 3)
- C. (5 , 5)
- D. (7 , 3)



- A. (15 , 12)
- B. (35 , 28)
- C. (14 , 8)
- D. (14 , 5)



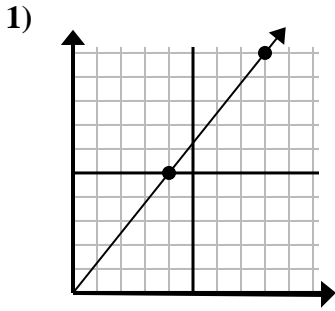
- A. (6 , 12)
- B. (7 , 9)
- C. (10 , 20)
- D. (8 , 16)

1. \_\_\_\_\_
2. \_\_\_\_\_
3. \_\_\_\_\_
4. \_\_\_\_\_
5. \_\_\_\_\_
6. \_\_\_\_\_
7. \_\_\_\_\_
8. \_\_\_\_\_
9. \_\_\_\_\_

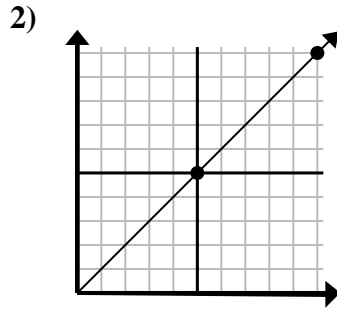


Determine which choice represents a point on the line if it were to continue.

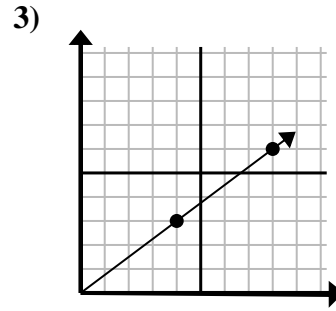
Answers



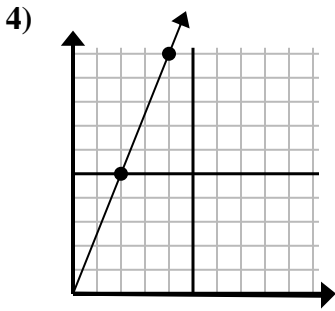
- A. (20 , 25)
- B. (12 , 15)
- C. (24 , 30)
- D. (11 , 10)



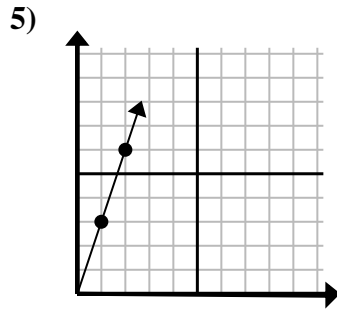
- A. (15 , 15)
- B. (12 , 10)
- C. (14 , 6)
- D. (25 , 25)



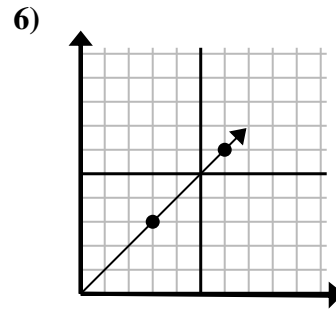
- A. (28 , 21)
- B. (12 , 9)
- C. (24 , 18)
- D. (16 , 12)



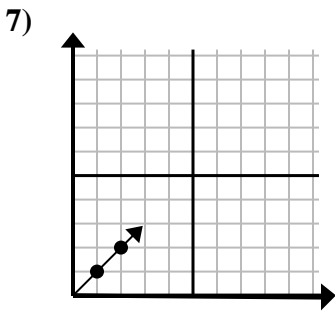
- A. (6 , 15)
- B. (5 , 9)
- C. (8 , 20)
- D. (12 , 30)



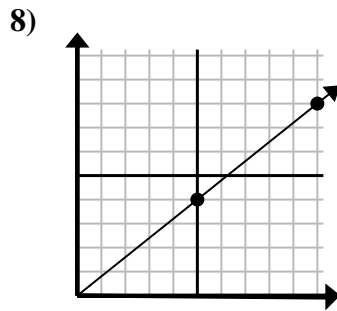
- A. (4 , 12)
- B. (3 , 9)
- C. (4 , 6)
- D. (7 , 6)



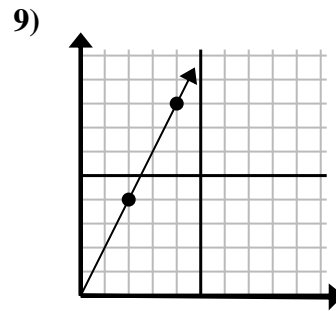
- A. (12 , 12)
- B. (9 , 9)
- C. (18 , 18)
- D. (9 , 5)



- A. (5 , 6)
- B. (3 , 3)
- C. (5 , 5)
- D. (7 , 3)



- A. (15 , 12)
- B. (35 , 28)
- C. (14 , 8)
- D. (14 , 5)



- A. (6 , 12)
- B. (7 , 9)
- C. (10 , 20)
- D. (8 , 16)

- 1.           **B**
- 2.           **A**
- 3.           **B**
- 4.           **A**
- 5.           **B**
- 6.           **B**
- 7.           **B**
- 8.           **A**
- 9.           **A**