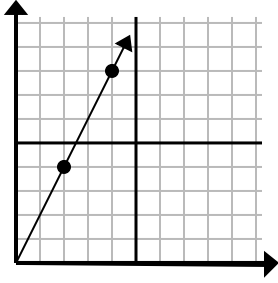




Determine which choice represents a point on the line if it were to continue.

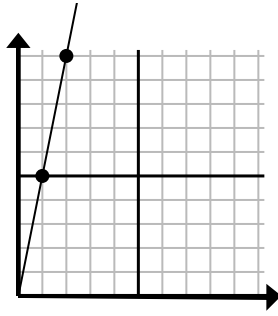
Answers

1)



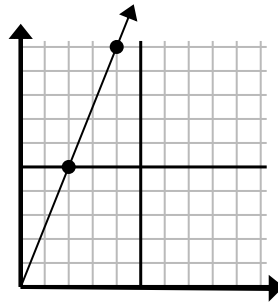
- A. (6, 12)
- B. (8, 8)
- C. (14, 28)
- D. (5, 9)

2)



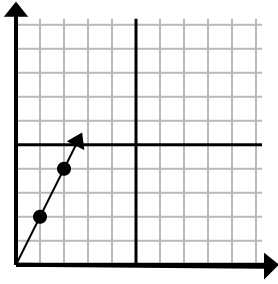
- A. (4, 20)
- B. (3, 15)
- C. (6, 30)
- D. (7, 35)

3)



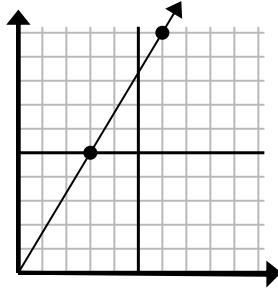
- A. (12, 30)
- B. (9, 8)
- C. (14, 35)
- D. (6, 15)

4)



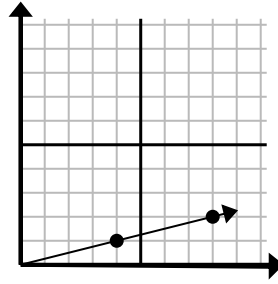
- A. (3, 6)
- B. (4, 8)
- C. (6, 7)
- D. (7, 6)

5)



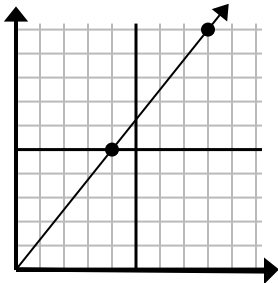
- A. (12, 20)
- B. (10, 8)
- C. (9, 15)
- D. (21, 35)

6)



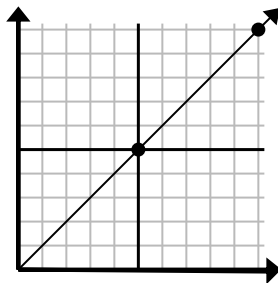
- A. (24, 6)
- B. (12, 3)
- C. (13, 5)
- D. (28, 7)

7)



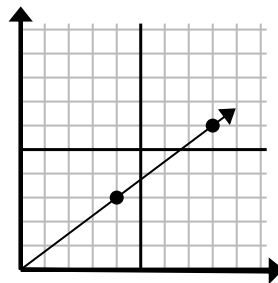
- A. (28, 35)
- B. (24, 30)
- C. (10, 7)
- D. (12, 15)

8)



- A. (13, 9)
- B. (15, 15)
- C. (35, 35)
- D. (15, 8)

9)



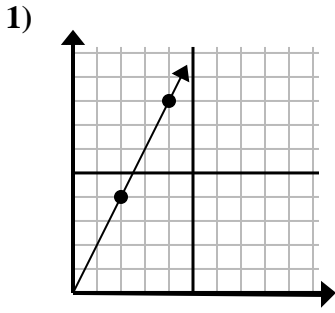
- A. (12, 5)
- B. (20, 15)
- C. (13, 8)
- D. (12, 9)

1. _____
2. _____
3. _____
4. _____
5. _____
6. _____
7. _____
8. _____
9. _____

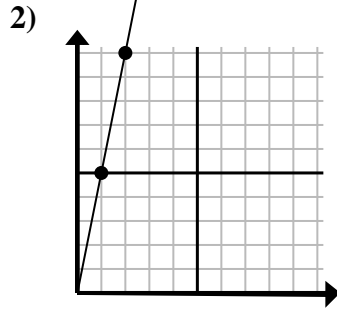


Determine which choice represents a point on the line if it were to continue.

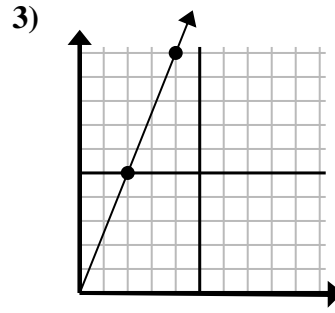
Answers



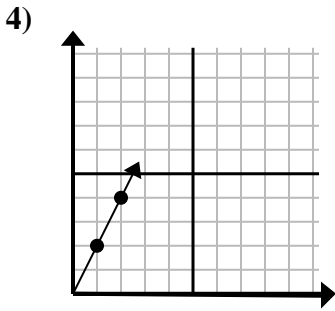
- A. (6, 12)
- B. (8, 8)
- C. (14, 28)
- D. (5, 9)



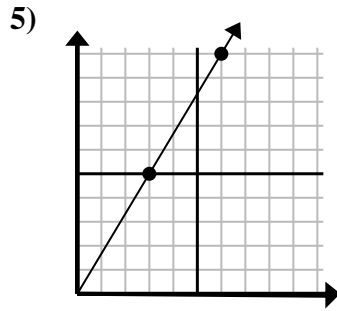
- A. (4, 20)
- B. (3, 15)
- C. (6, 30)
- D. (7, 35)



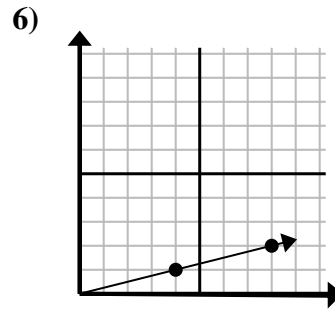
- A. (12, 30)
- B. (9, 8)
- C. (14, 35)
- D. (6, 15)



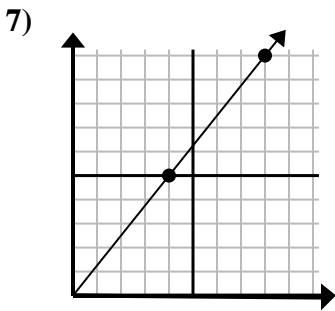
- A. (3, 6)
- B. (4, 8)
- C. (6, 7)
- D. (7, 6)



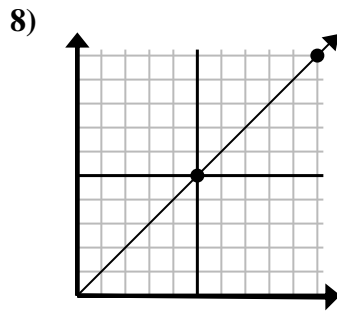
- A. (12, 20)
- B. (10, 8)
- C. (9, 15)
- D. (21, 35)



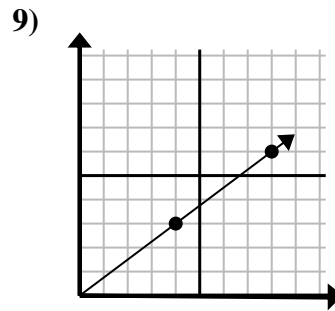
- A. (24, 6)
- B. (12, 3)
- C. (13, 5)
- D. (28, 7)



- A. (28, 35)
- B. (24, 30)
- C. (10, 7)
- D. (12, 15)



- A. (13, 9)
- B. (15, 15)
- C. (35, 35)
- D. (15, 8)



- A. (12, 5)
- B. (20, 15)
- C. (13, 8)
- D. (12, 9)

- 1. **A**
- 2. **B**
- 3. **D**
- 4. **A**
- 5. **C**
- 6. **B**
- 7. **D**
- 8. **B**
- 9. **D**