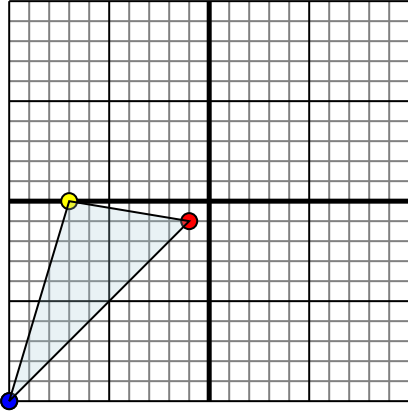




Reflect each shape as described.

1)

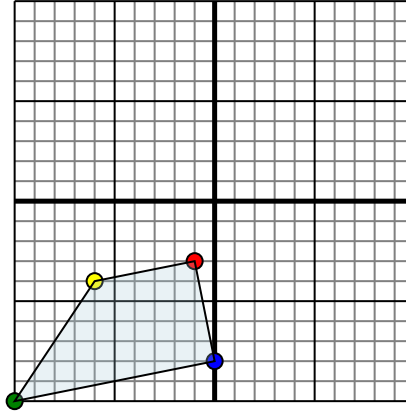


The shape above has the following coordinates:

- A. (-1,-1)
- B. (-7,0)
- C. (-10,-10)

Reflect the shape over the X axis.

2)

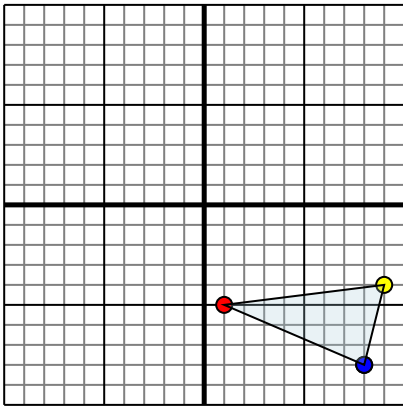


The shape above has the following coordinates:

- A. (-1,-3)
- B. (-6,-4)
- C. (-10,-10)
- D. (0,-8)

Reflect the shape over the X axis.

3)

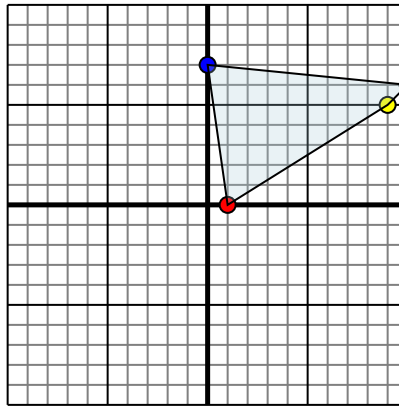


The shape above has the following coordinates:

- A. (1,-5)
- B. (9,-4)
- C. (8,-8)

Reflect the shape over the X axis.

4)



The shape above has the following coordinates:

- A. (1,0)
- B. (9,5)
- C. (10,6)
- D. (0,7)

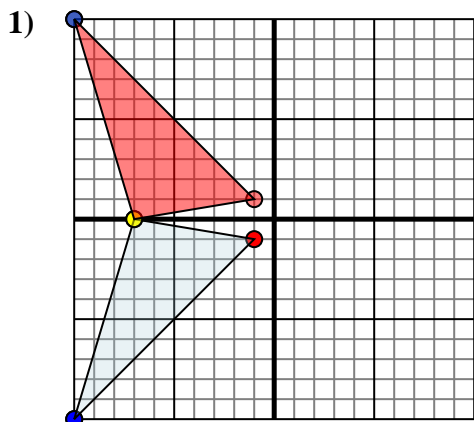
Reflect the shape over the X axis.

Answers

- 1. \_\_\_\_\_
- 2. \_\_\_\_\_
- 3. \_\_\_\_\_
- 4. \_\_\_\_\_



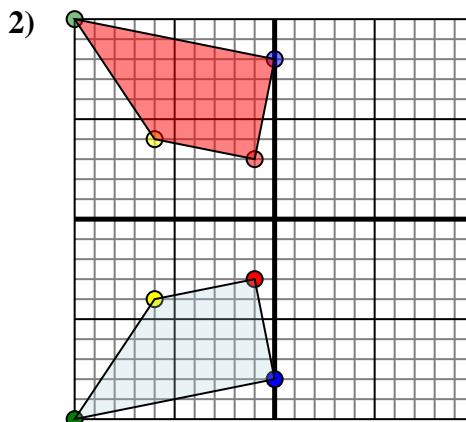
Reflect each shape as described.



The shape above has the following coordinates:

- A. (-1,-1)
- B. (-7,0)
- C. (-10,-10)

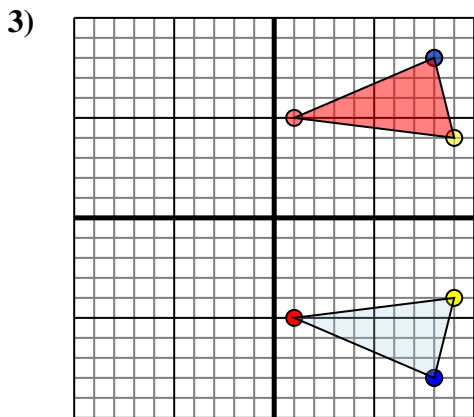
Reflect the shape over the X axis.



The shape above has the following coordinates:

- A. (-1,-3)
- B. (-6,-4)
- C. (-10,-10)
- D. (0,-8)

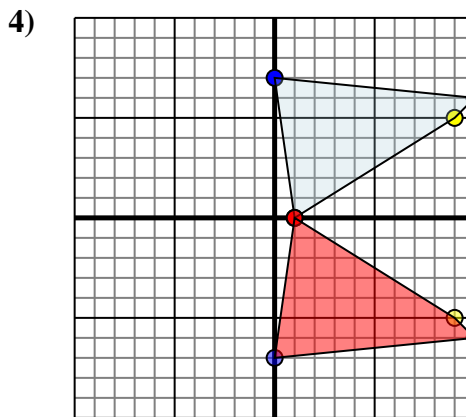
Reflect the shape over the X axis.



The shape above has the following coordinates:

- A. (1,-5)
- B. (9,-4)
- C. (8,-8)

Reflect the shape over the X axis.



The shape above has the following coordinates:

- A. (1,0)
- B. (9,5)
- C. (10,6)
- D. (0,7)

Reflect the shape over the X axis.

**Answers**

1. **-1,1** **-7,0** **-10,10** Graph
2. **-1,3** **-6,4** **-10,10** **0,8** Graph
3. **1,5** **9,4** **8,8** Graph
4. **1,0** **9,-5** **10,-6** **0,-7** Graph