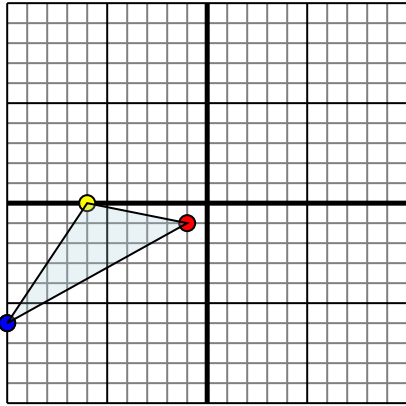




Reflect each shape as described.

1)

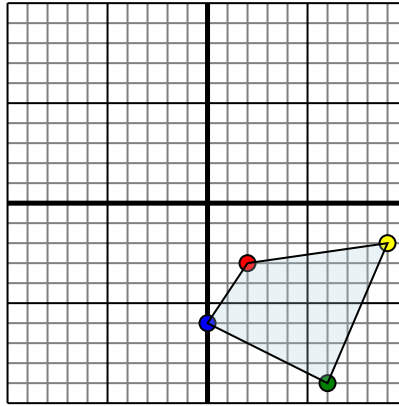


The shape above has the following coordinates:

- A. (-1,-1)
- B. (-6,0)
- C. (-10,-6)

Reflect the shape over the X axis.

2)

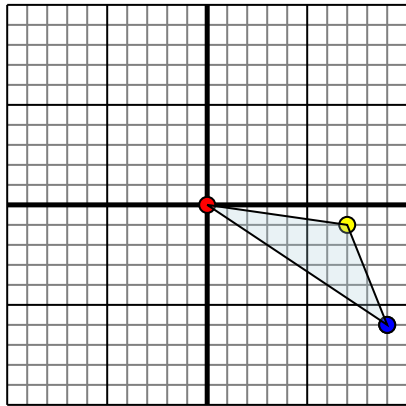


The shape above has the following coordinates:

- A. (2,-3)
- B. (9,-2)
- C. (6,-9)
- D. (0,-6)

Reflect the shape over the Y axis.

3)

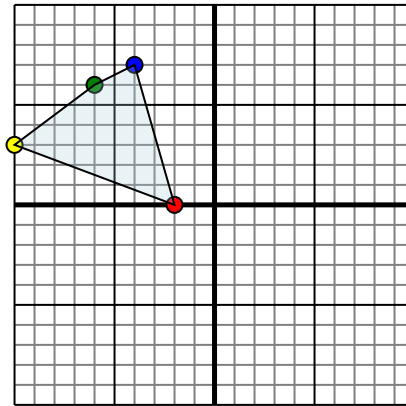


The shape above has the following coordinates:

- A. (0,0)
- B. (7,-1)
- C. (9,-6)

Reflect the shape over the X axis.

4)



The shape above has the following coordinates:

- A. (-2,0)
- B. (-10,3)
- C. (-6,6)
- D. (-4,7)

Reflect the shape over the X axis.

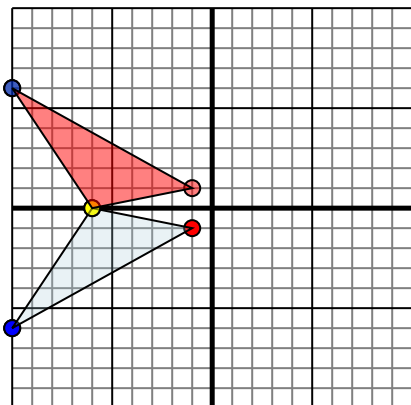
Answers

- 1. \_\_\_\_\_
- 2. \_\_\_\_\_
- 3. \_\_\_\_\_
- 4. \_\_\_\_\_



Reflect each shape as described.

1)

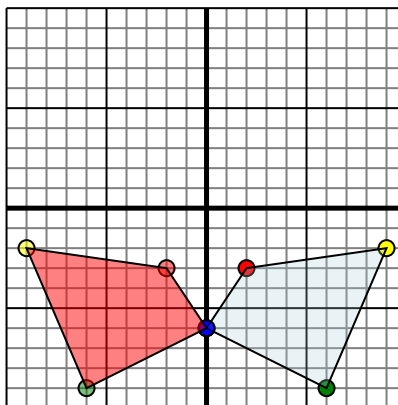


The shape above has the following coordinates:

- A. (-1,-1)
- B. (-6,0)
- C. (-10,-6)

Reflect the shape over the X axis.

2)

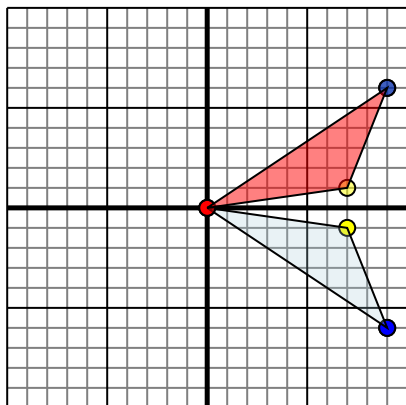


The shape above has the following coordinates:

- A. (2,-3)
- B. (9,-2)
- C. (6,-9)
- D. (0,-6)

Reflect the shape over the Y axis.

3)

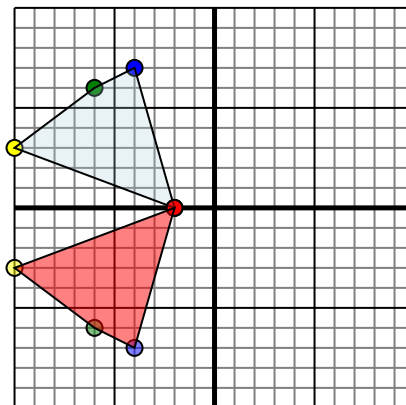


The shape above has the following coordinates:

- A. (0,0)
- B. (7,-1)
- C. (9,-6)

Reflect the shape over the X axis.

4)



The shape above has the following coordinates:

- A. (-2,0)
- B. (-10,3)
- C. (-6,6)
- D. (-4,7)

Reflect the shape over the X axis.

**Answers**

1. **-1,1** **-6,0** **-10,6** Graph
2. **-2,-3** **-9,-2** **-6,-9** **0,-6** Graph
3. **0,0** **7,1** **9,6** Graph
4. **-2,0** **-10,-3** **-6,-6** **-4,-7** Graph