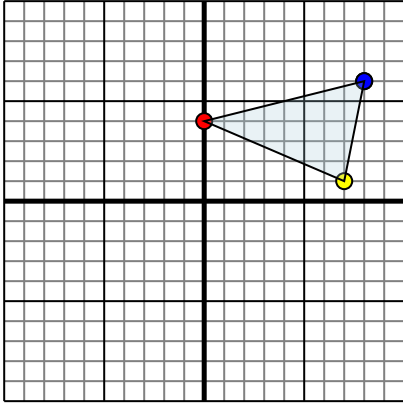




Reflect each shape as described.

1)

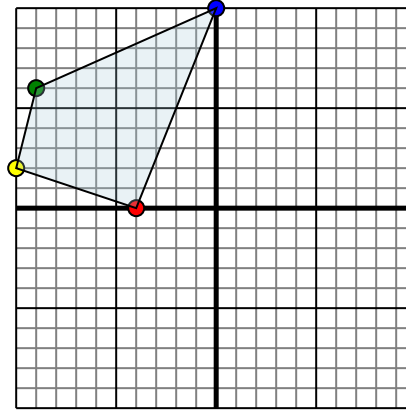


The shape above has the following coordinates:

- A. (0,4)
- B. (7,1)
- C. (8,6)

Reflect the shape over the X axis.

2)

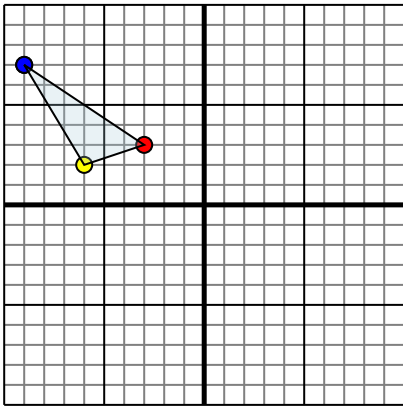


The shape above has the following coordinates:

- A. (-4,0)
- B. (-10,2)
- C. (-9,6)
- D. (0,10)

Reflect the shape over the Y axis.

3)

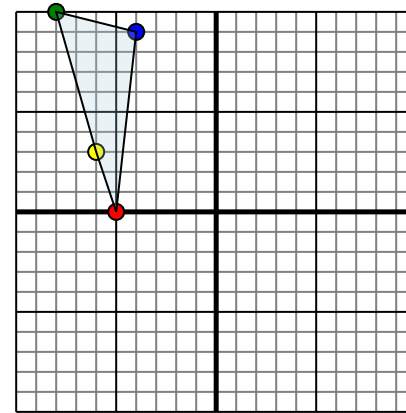


The shape above has the following coordinates:

- A. (-3,3)
- B. (-6,2)
- C. (-9,7)

Reflect the shape over the Y axis.

4)



The shape above has the following coordinates:

- A. (-5,0)
- B. (-6,3)
- C. (-8,10)
- D. (-4,9)

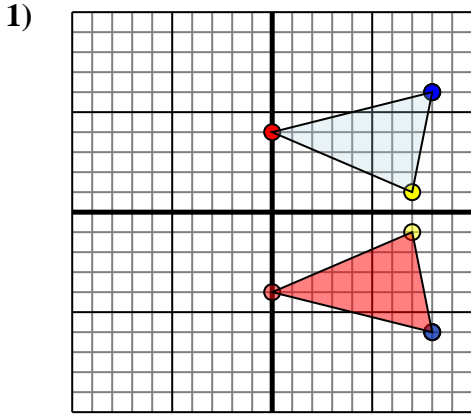
Reflect the shape over the X axis.

Answers

- 1. \_\_\_\_\_
- 2. \_\_\_\_\_
- 3. \_\_\_\_\_
- 4. \_\_\_\_\_



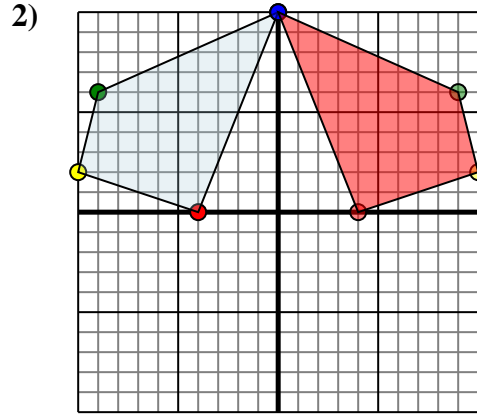
Reflect each shape as described.



The shape above has the following coordinates:

- A. (0,4)
- B. (7,1)
- C. (8,6)

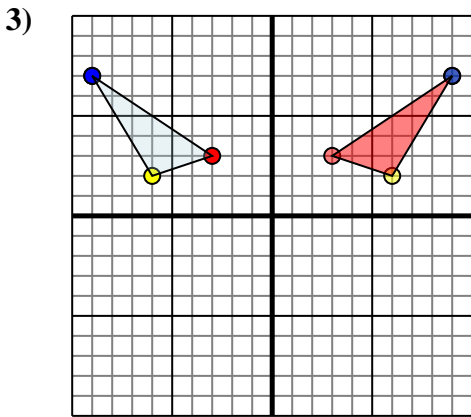
Reflect the shape over the X axis.



The shape above has the following coordinates:

- A. (-4,0)
- B. (-10,2)
- C. (-9,6)
- D. (0,10)

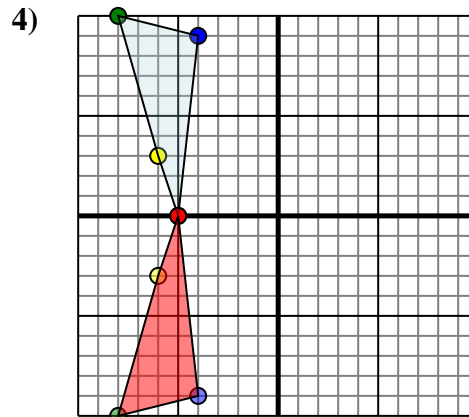
Reflect the shape over the Y axis.



The shape above has the following coordinates:

- A. (-3,3)
- B. (-6,2)
- C. (-9,7)

Reflect the shape over the Y axis.



The shape above has the following coordinates:

- A. (-5,0)
- B. (-6,3)
- C. (-8,10)
- D. (-4,9)

Reflect the shape over the X axis.

**Answers**

1. **0,-4 7,-1 8,-6** Graph
2. **4,0 10,2 9,6 0,10** Graph
3. **3,3 6,2 9,7** Graph
4. **-5,0 -6,3 -8,10 -4,9** Graph