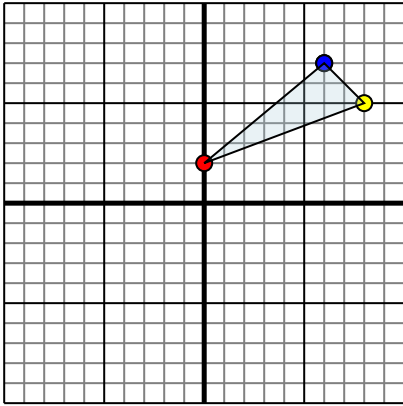




Reflect each shape as described.

1)

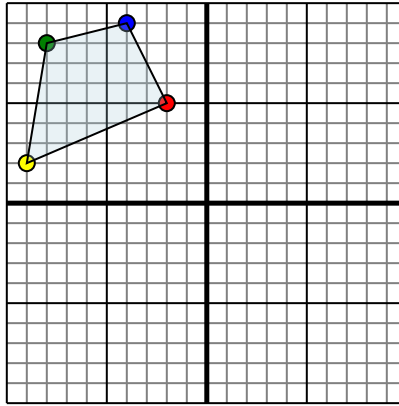


The shape above has the following coordinates:

- A. (0,2)
- B. (8,5)
- C. (6,7)

Reflect the shape over the X axis.

2)

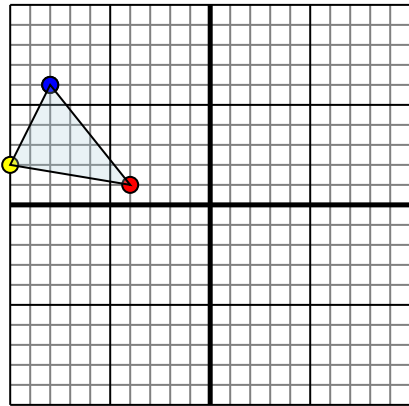


The shape above has the following coordinates:

- A. (-2,5)
- B. (-9,2)
- C. (-8,8)
- D. (-4,9)

Reflect the shape over the Y axis.

3)

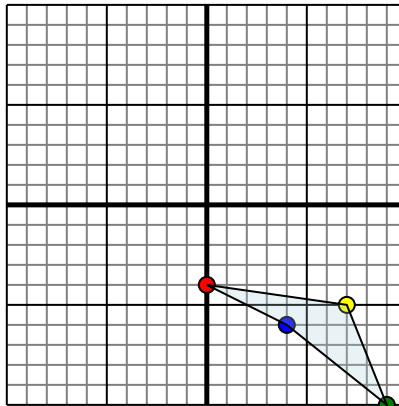


The shape above has the following coordinates:

- A. (-4,1)
- B. (-10,2)
- C. (-8,6)

Reflect the shape over the Y axis.

4)



The shape above has the following coordinates:

- A. (0,-4)
- B. (7,-5)
- C. (9,-10)
- D. (4,-6)

Reflect the shape over the Y axis.

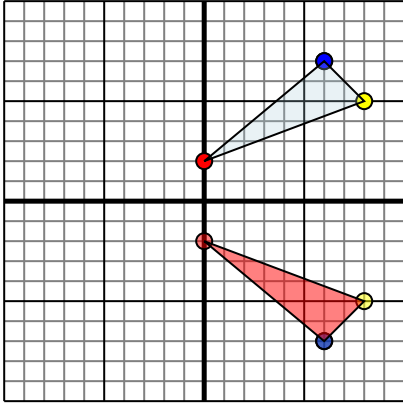
Answers

- 1. \_\_\_\_\_
- 2. \_\_\_\_\_
- 3. \_\_\_\_\_
- 4. \_\_\_\_\_



Reflect each shape as described.

1)

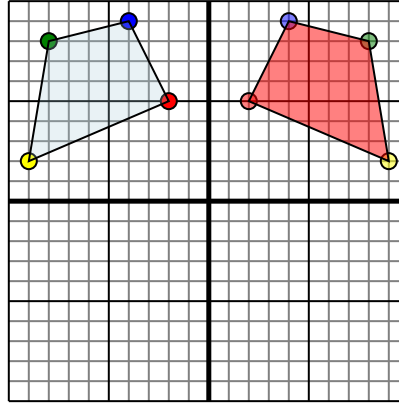


The shape above has the following coordinates:

- A. (0,2)
- B. (8,5)
- C. (6,7)

Reflect the shape over the X axis.

2)

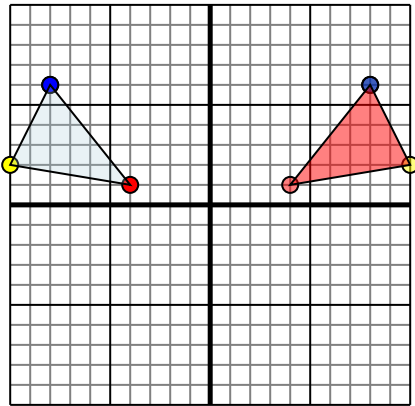


The shape above has the following coordinates:

- A. (-2,5)
- B. (-9,2)
- C. (-8,8)
- D. (-4,9)

Reflect the shape over the Y axis.

3)

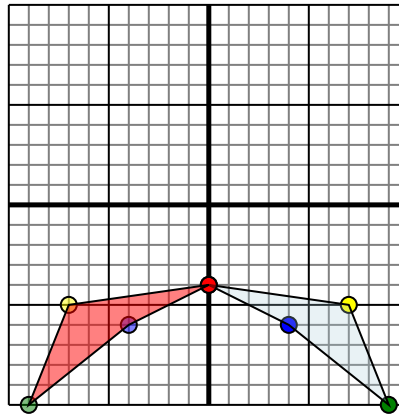


The shape above has the following coordinates:

- A. (-4,1)
- B. (-10,2)
- C. (-8,6)

Reflect the shape over the Y axis.

4)



The shape above has the following coordinates:

- A. (0,-4)
- B. (7,-5)
- C. (9,-10)
- D. (4,-6)

Reflect the shape over the Y axis.

**Answers**

1. 0,-2 8,-5 6,-7 Graph
2. 2,5 9,2 8,8 4,9 Graph
3. 4,1 10,2 8,6 Graph
4. 0,-4 -7,-5 -9,-10 -4,-6 Graph