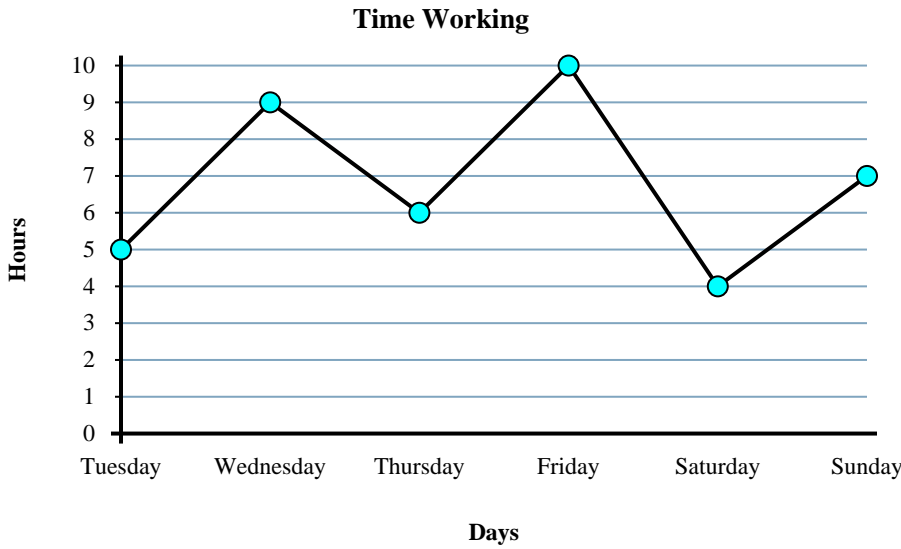




Solve each problem.

Answers

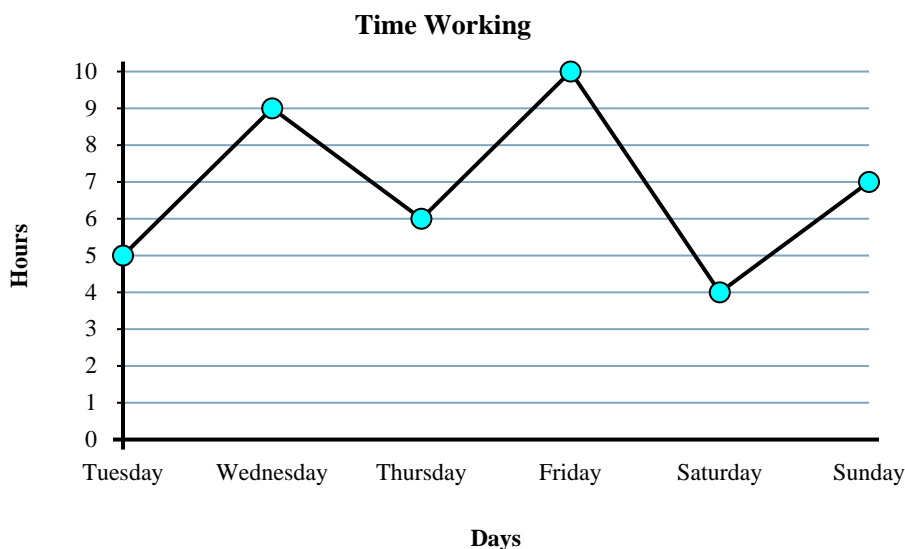


- 1) From Friday to Saturday did the number of hours she worked increase or decrease?
- 2) What is the total number of hours she worked?
- 3) Did she work fewer hours on Friday or on Sunday?
- 4) On Tuesday Sarah wanted to work at least 8 hours. Did she reach her goal?
- 5) How many hours did she work on Friday?
- 6) What is the difference in the number of hours she worked on Wednesday and the number she worked on Thursday?
- 7) Did she work more hours on Wednesday or on Saturday?
- 8) Which day did she work the least?
- 9) How many hours did she work on Friday?
- 10) Which day did she work the most?

1. _____
2. _____
3. _____
4. _____
5. _____
6. _____
7. _____
8. _____
9. _____
10. _____



Solve each problem.



- 1) From Friday to Saturday did the number of hours she worked increase or decrease?
- 2) What is the total number of hours she worked?
- 3) Did she work fewer hours on Friday or on Sunday?
- 4) On Tuesday Sarah wanted to work at least 8 hours. Did she reach her goal?
- 5) How many hours did she work on Friday?
- 6) What is the difference in the number of hours she worked on Wednesday and the number she worked on Thursday?
- 7) Did she work more hours on Wednesday or on Saturday?
- 8) Which day did she work the least?
- 9) How many hours did she work on Friday?
- 10) Which day did she work the most?

Answers

1. Decrease

2. 41

3. Sunday

4. no

5. 10

6. 3

7. Wednesday

8. Saturday

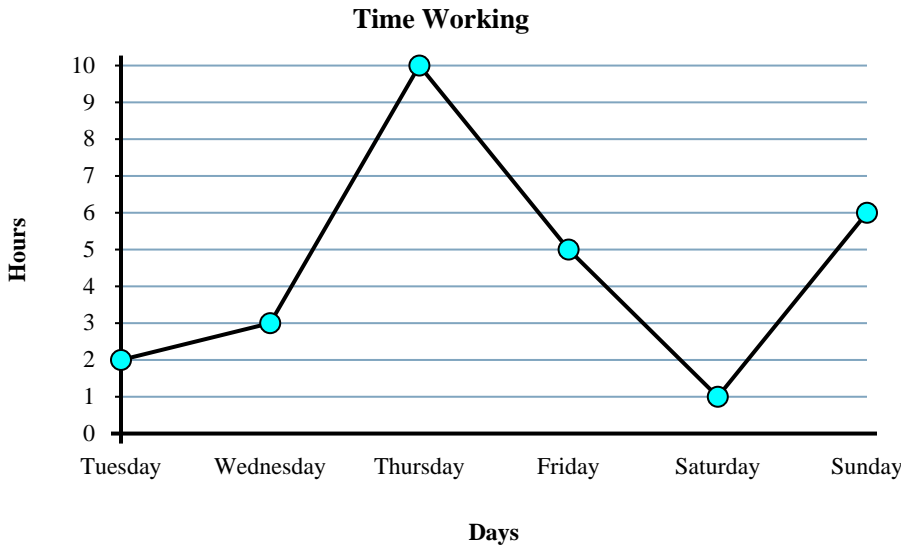
9. 10

10. Friday



Solve each problem.

Answers

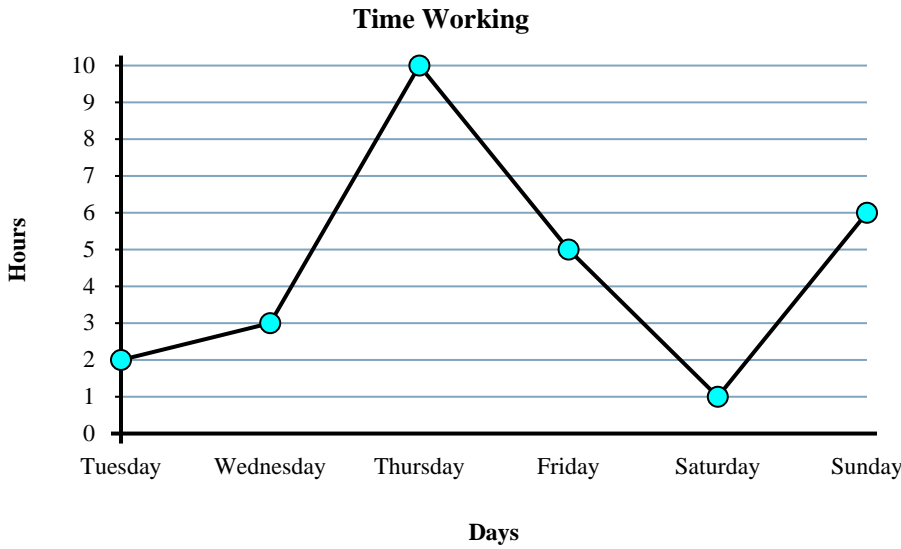


- 1) What is the total number of hours she worked?
- 2) What is the difference in the number of hours she worked on Tuesday and the number she worked on Friday?
- 3) How many hours did she work on Sunday?
- 4) Which day did she work the least?
- 5) From Friday to Saturday did the number of hours she worked increase or decrease?
- 6) On Thursday Sarah wanted to work at least 6 hours. Did she reach her goal?
- 7) Did she work fewer hours on Tuesday or on Saturday?
- 8) How many hours did she work on Thursday?
- 9) Which day did she work the most?
- 10) Did she work more hours on Friday or on Saturday?

1. _____
2. _____
3. _____
4. _____
5. _____
6. _____
7. _____
8. _____
9. _____
10. _____



Solve each problem.



- 1) What is the total number of hours she worked?
- 2) What is the difference in the number of hours she worked on Tuesday and the number she worked on Friday?
- 3) How many hours did she work on Sunday?
- 4) Which day did she work the least?
- 5) From Friday to Saturday did the number of hours she worked increase or decrease?
- 6) On Thursday Sarah wanted to work at least 6 hours. Did she reach her goal?
- 7) Did she work fewer hours on Tuesday or on Saturday?
- 8) How many hours did she work on Thursday?
- 9) Which day did she work the most?
- 10) Did she work more hours on Friday or on Saturday?

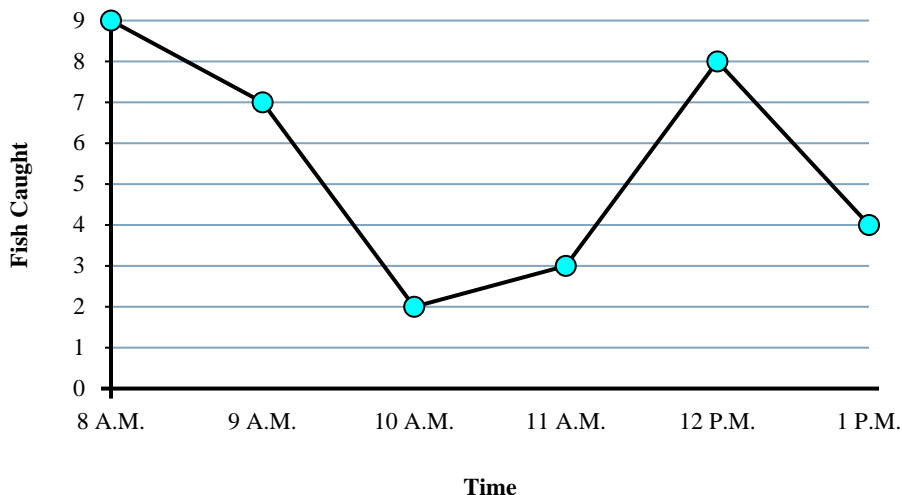
Answers

1. 27
2. 3
3. 6
4. Saturday
5. Decrease
6. yes
7. Saturday
8. 10
9. Thursday
10. Friday



Solve each problem.

Fishing Trip Results



Answers

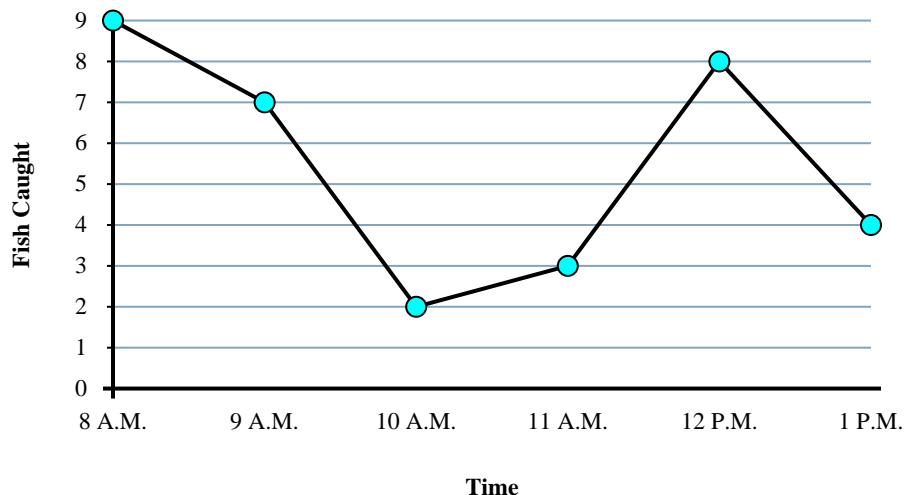
1. _____
2. _____
3. _____
4. _____
5. _____
6. _____
7. _____
8. _____
9. _____
10. _____

- 1) What time were the most fish caught?
- 2) How many fish were caught at 9 A.M.?
- 3) How many fish were caught at 12 P.M.?
- 4) What time were the fewest fish caught?
- 5) Were more fish caught at 9 A.M. or at 12 P.M.?
- 6) What is the total number of fish caught?
- 7) From 9 A.M. to 10 A.M. did the number of fish caught increase or decrease?
- 8) Were fewer fish caught at 9 A.M. or at 10 A.M.?
- 9) Were there at least 9 caught at 9 A.M.?
- 10) What is the difference in the number of fish caught at 9 A.M. and the number caught at 12 P.M.?



Solve each problem.

Fishing Trip Results



- 1) What time were the most fish caught?
- 2) How many fish were caught at 9 A.M.?
- 3) How many fish were caught at 12 P.M.?
- 4) What time were the fewest fish caught?
- 5) Were more fish caught at 9 A.M. or at 12 P.M.?
- 6) What is the total number of fish caught?
- 7) From 9 A.M. to 10 A.M. did the number of fish caught increase or decrease?
- 8) Were fewer fish caught at 9 A.M. or at 10 A.M.?
- 9) Were there at least 9 caught at 9 A.M.?
- 10) What is the difference in the number of fish caught at 9 A.M. and the number caught at 12 P.M.?

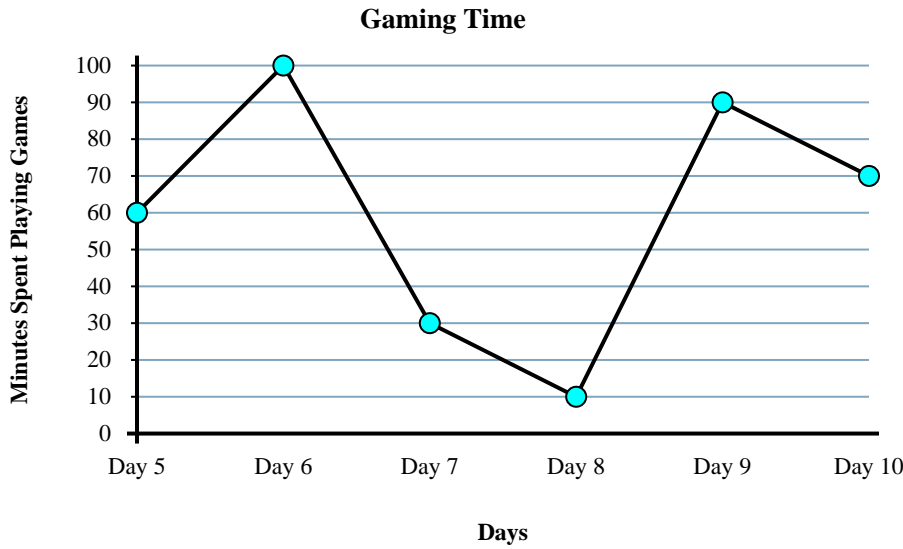
Answers

1. 8 A.M.
2. 7
3. 8
4. 10 A.M.
5. 12 P.M.
6. 33
7. Decrease
8. 10 A.M.
9. no
10. 1



Solve each problem.

Answers

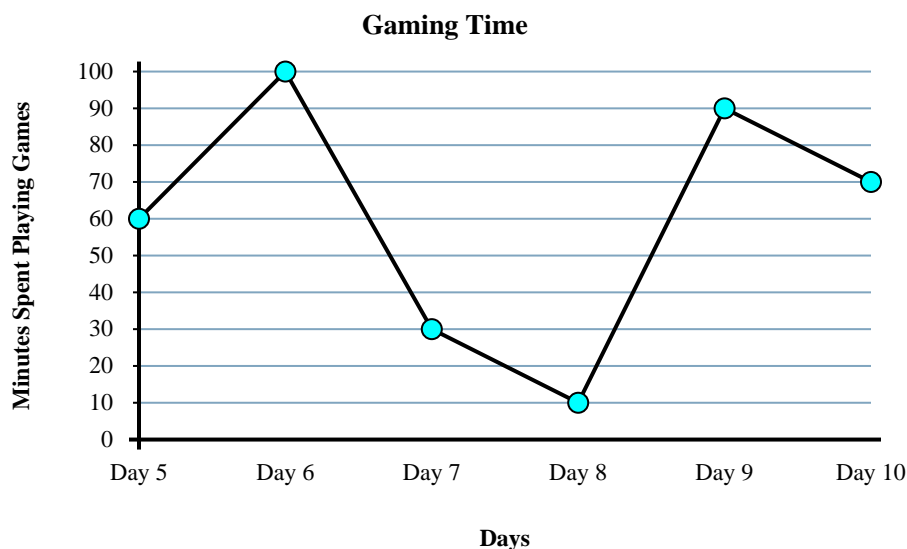


- 1) On Day 8 he wanted to play at least 70 minutes. Did he get to or not?
- 2) From Day 6 to Day 7 did the amount of time he spent playing games increase or decrease?
- 3) Did he spend more time playing on Day 5 or Day 7?
- 4) What is the total time he spent playing?
- 5) How many minutes did he play on Day 9?
- 6) Which day did he spend the least time playing games?
- 7) What is the difference in the amount of time spent playing on Day 6 and the amount spent playing on Day 8?
- 8) Did he spend less time playing on Day 7 or Day 9?
- 9) How many minutes did he play on Day 9?
- 10) Which day did he spend the most time playing games?

1. _____
2. _____
3. _____
4. _____
5. _____
6. _____
7. _____
8. _____
9. _____
10. _____



Solve each problem.



- 1) On Day 8 he wanted to play at least 70 minutes. Did he get to or not?
- 2) From Day 6 to Day 7 did the amount of time he spent playing games increase or decrease?
- 3) Did he spend more time playing on Day 5 or Day 7?
- 4) What is the total time he spent playing?
- 5) How many minutes did he play on Day 9?
- 6) Which day did he spend the least time playing games?
- 7) What is the difference in the amount of time spent playing on Day 6 and the amount spent playing on Day 8?
- 8) Did he spend less time playing on Day 7 or Day 9?
- 9) How many minutes did he play on Day 9?
- 10) Which day did he spend the most time playing games?

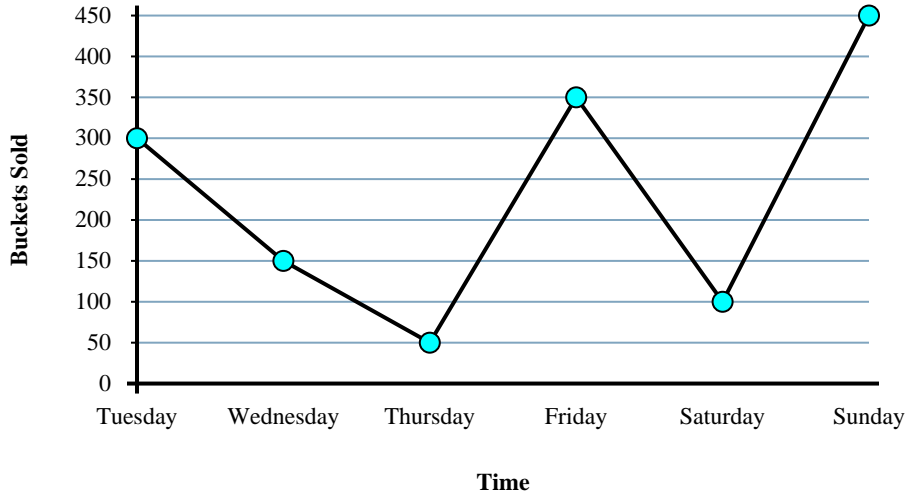
Answers

1. no
2. Decrease
3. Day 5
4. 360
5. 90
6. Day 8
7. 90
8. Day 7
9. 90
10. Day 6



Solve each problem.

Popcorn Sold



Answers

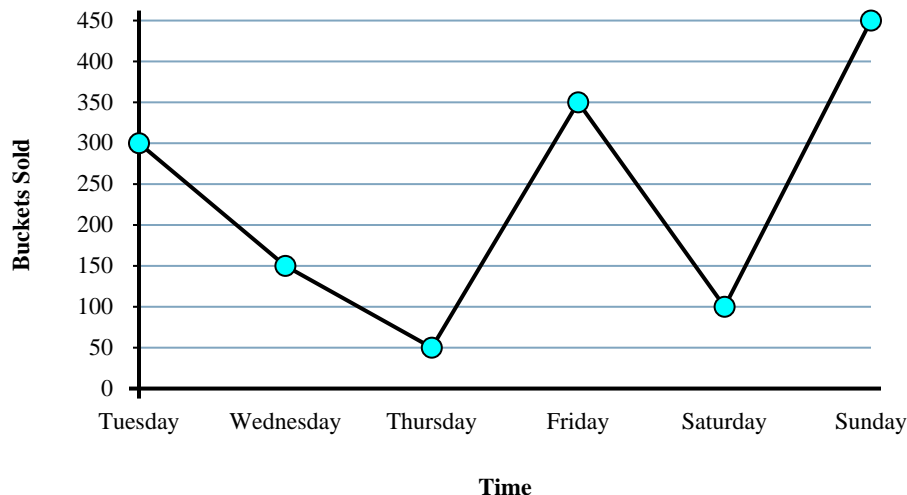
1. _____
2. _____
3. _____
4. _____
5. _____
6. _____
7. _____
8. _____
9. _____
10. _____

- 1) On Wednesday the goal was to sell at least 200 buckets. Was that goal reached?
- 2) How many buckets were sold on Sunday?
- 3) From Tuesday to Wednesday did the amount of popcorn sold increase or decrease?
- 4) How many buckets were sold on Tuesday?
- 5) What is the total number of buckets sold?
- 6) Which day had the least popcorn sold?
- 7) Which day had the most popcorn sold?
- 8) Were fewer buckets sold on Wednesday or on Sunday?
- 9) What is the difference in the number of buckets sold on Tuesday and the number sold on Thursday?
- 10) Were more buckets sold on Thursday or on Friday?



Solve each problem.

Popcorn Sold



Answers

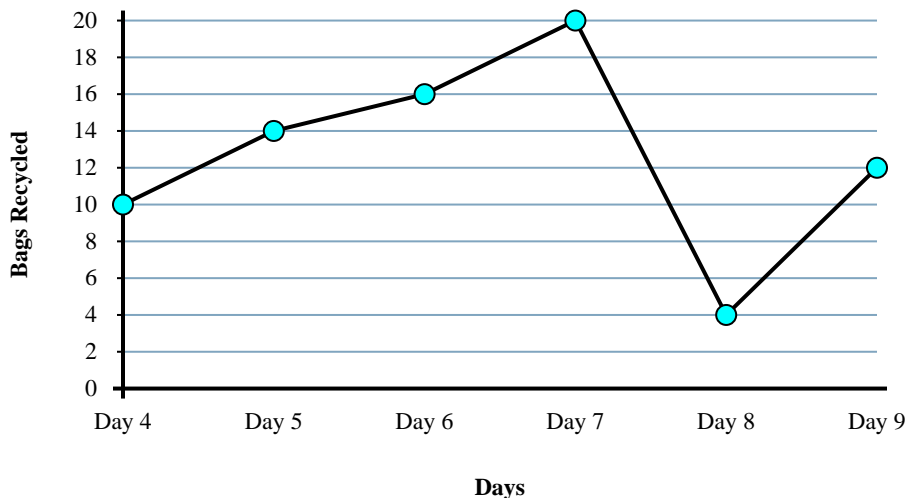
- On Wednesday the goal was to sell at least 200 buckets. Was that goal reached?
- How many buckets were sold on Sunday?
- From Tuesday to Wednesday did the amount of popcorn sold increase or decrease?
- How many buckets were sold on Tuesday?
- What is the total number of buckets sold?
- Which day had the least popcorn sold?
- Which day had the most popcorn sold?
- Were fewer buckets sold on Wednesday or on Sunday?
- What is the difference in the number of buckets sold on Tuesday and the number sold on Thursday?
- Were more buckets sold on Thursday or on Friday?

- no
- 450
- Decrease
- 300
- 1400
- Thursday
- Sunday
- Wednesday
- 250
- Friday



Solve each problem.

Cans Recycled



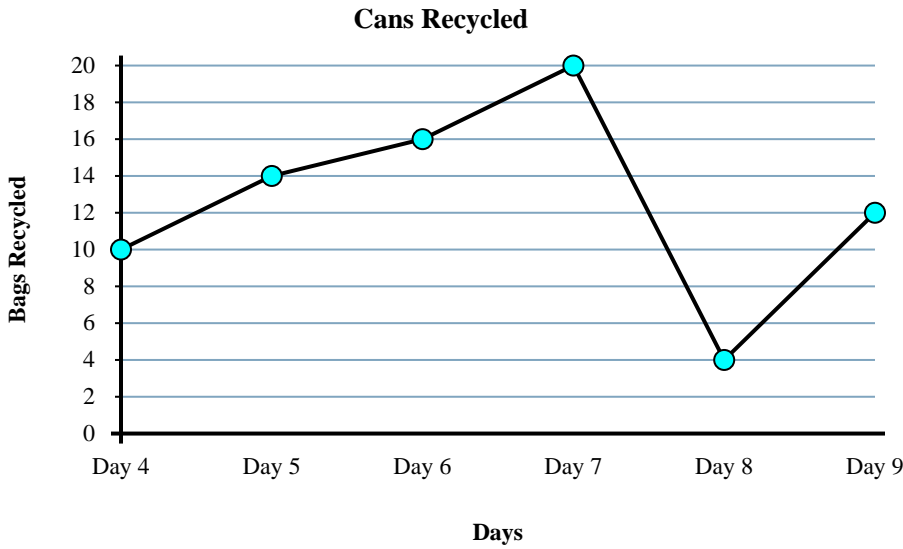
Answers

1. _____
2. _____
3. _____
4. _____
5. _____
6. _____
7. _____
8. _____
9. _____
10. _____

- 1) Were more bags recycled on Day 4 or Day 7?
- 2) How many bags were recycled on Day 6?
- 3) Which day had the fewest bags recycled?
- 4) What is the difference in the number of bags recycled on Day 6 and the number recycled on Day 7?
- 5) Were fewer bags recycled on Day 7 or Day 8?
- 6) Which day had the greatest number of bags recycled?
- 7) What is the total number of bags recycled?
- 8) From Day 4 to Day 5 did the amount of bags recycled increase or decrease?
- 9) How many bags were recycled on Day 9?
- 10) On Day 6 the goal was to recycle 18 bags. Was the goal reached?



Solve each problem.



- 1) Were more bags recycled on Day 4 or Day 7?
- 2) How many bags were recycled on Day 6?
- 3) Which day had the fewest bags recycled?
- 4) What is the difference in the number of bags recycled on Day 6 and the number recycled on Day 7?
- 5) Were fewer bags recycled on Day 7 or Day 8?
- 6) Which day had the greatest number of bags recycled?
- 7) What is the total number of bags recycled?
- 8) From Day 4 to Day 5 did the amount of bags recycled increase or decrease?
- 9) How many bags were recycled on Day 9?
- 10) On Day 6 the goal was to recycle 18 bags. Was the goal reached?

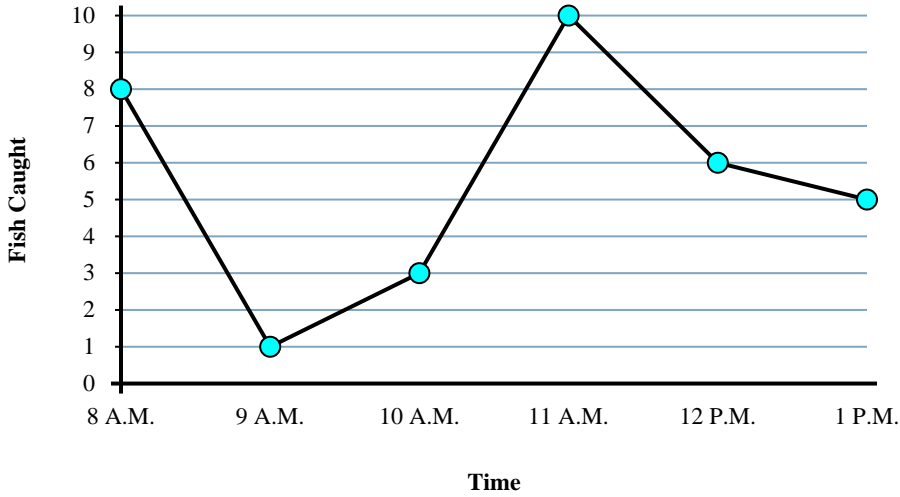
Answers

1. Day 7
2. 16
3. Day 8
4. 4
5. Day 8
6. Day 7
7. 76
8. Increase
9. 12
10. no



Solve each problem.

Fishing Trip Results



Answers

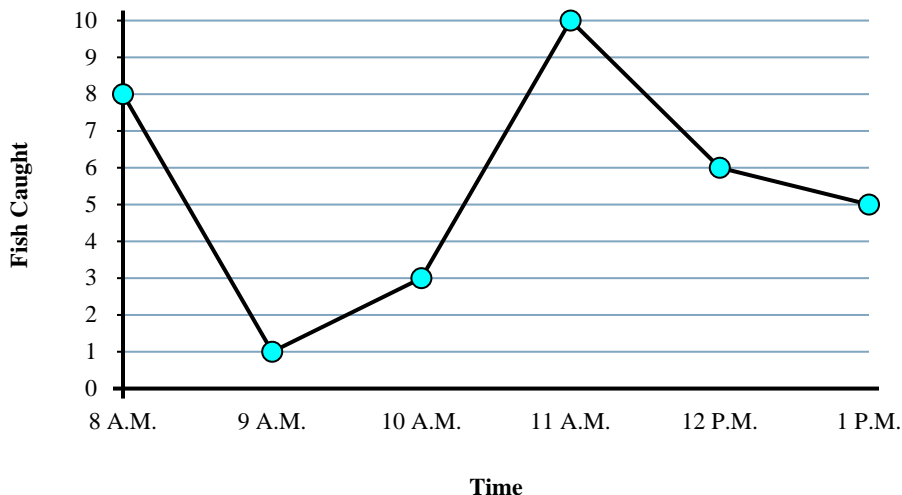
1. _____
2. _____
3. _____
4. _____
5. _____
6. _____
7. _____
8. _____
9. _____
10. _____

- 1) What is the difference in the number of fish caught at 10 A.M. and the number caught at 1 P.M.?
- 2) Were more fish caught at 8 A.M. or at 9 A.M.?
- 3) What time were the most fish caught?
- 4) How many fish were caught at 11 A.M.?
- 5) From 10 A.M. to 11 A.M. did the number of fish caught increase or decrease?
- 6) Were fewer fish caught at 11 A.M. or at 1 P.M.?
- 7) How many fish were caught at 10 A.M.?
- 8) What time were the fewest fish caught?
- 9) What is the total number of fish caught?
- 10) Were there at least 10 caught at 12 P.M.?



Solve each problem.

Fishing Trip Results



Answers

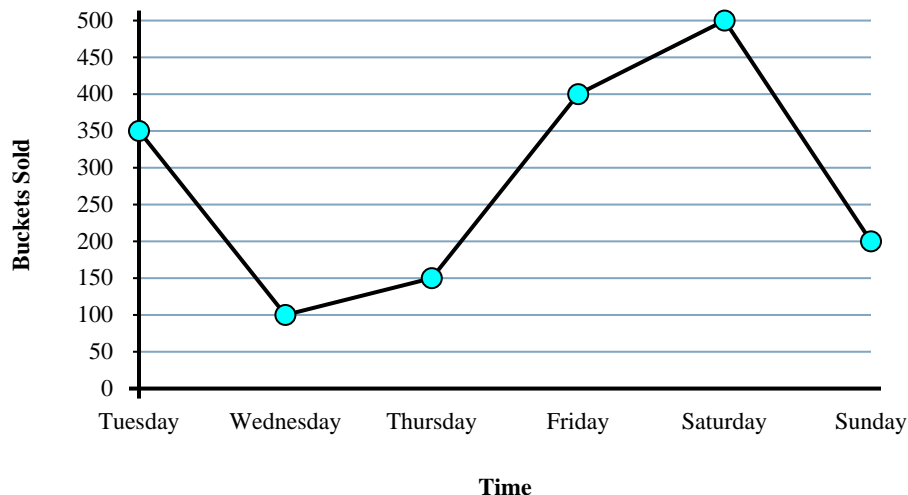
- 1) What is the difference in the number of fish caught at 10 A.M. and the number caught at 1 P.M.?
- 2) Were more fish caught at 8 A.M. or at 9 A.M.?
- 3) What time were the most fish caught?
- 4) How many fish were caught at 11 A.M.?
- 5) From 10 A.M. to 11 A.M. did the number of fish caught increase or decrease?
- 6) Were fewer fish caught at 11 A.M. or at 1 P.M.?
- 7) How many fish were caught at 10 A.M.?
- 8) What time were the fewest fish caught?
- 9) What is the total number of fish caught?
- 10) Were there at least 10 caught at 12 P.M.?

1. 2
2. 8 A.M.
3. 11 A.M.
4. 10
5. Increase
6. 1 P.M.
7. 3
8. 9 A.M.
9. 33
10. no



Solve each problem.

Popcorn Sold



Answers

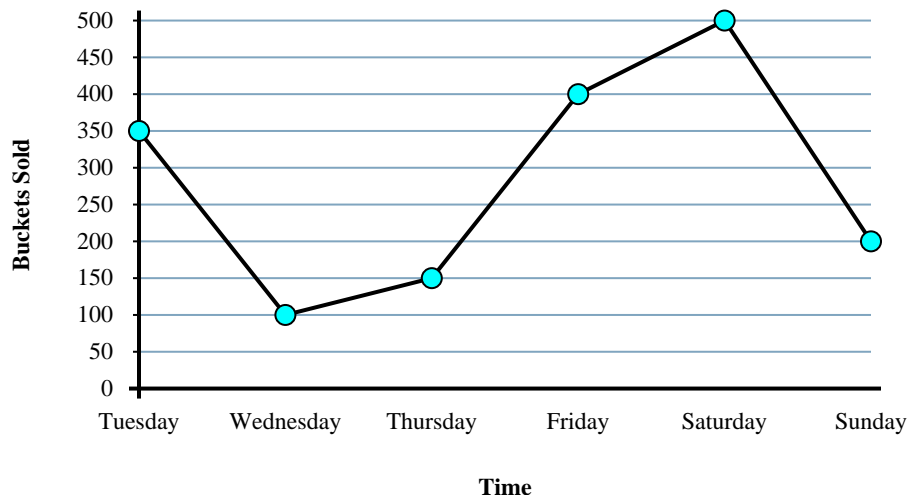
1. _____
2. _____
3. _____
4. _____
5. _____
6. _____
7. _____
8. _____
9. _____
10. _____

- 1) Were more buckets sold on Wednesday or on Friday?
- 2) On Sunday the goal was to sell at least 300 buckets. Was that goal reached?
- 3) From Friday to Saturday did the amount of popcorn sold increase or decrease?
- 4) How many buckets were sold on Sunday?
- 5) Were fewer buckets sold on Thursday or on Sunday?
- 6) How many buckets were sold on Wednesday?
- 7) What is the total number of buckets sold?
- 8) Which day had the least popcorn sold?
- 9) Which day had the most popcorn sold?
- 10) What is the difference in the number of buckets sold on Thursday and the number sold on Friday?



Solve each problem.

Popcorn Sold



- Were more buckets sold on Wednesday or on Friday?
- On Sunday the goal was to sell at least 300 buckets. Was that goal reached?
- From Friday to Saturday did the amount of popcorn sold increase or decrease?
- How many buckets were sold on Sunday?
- Were fewer buckets sold on Thursday or on Sunday?
- How many buckets were sold on Wednesday?
- What is the total number of buckets sold?
- Which day had the least popcorn sold?
- Which day had the most popcorn sold?
- What is the difference in the number of buckets sold on Thursday and the number sold on Friday?

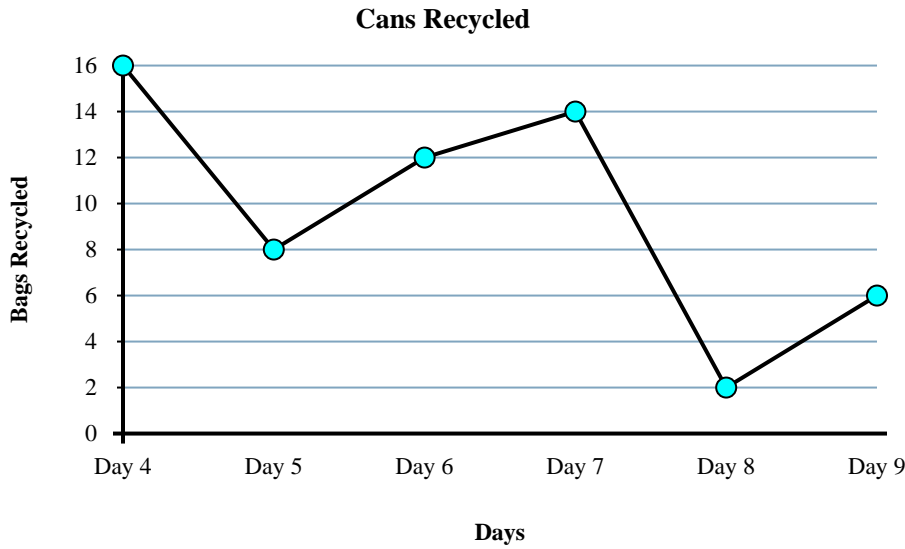
Answers

- Friday**
- no**
- Increase**
- 200**
- Thursday**
- 100**
- 1700**
- Wednesday**
- Saturday**
- 250**



Solve each problem.

Answers



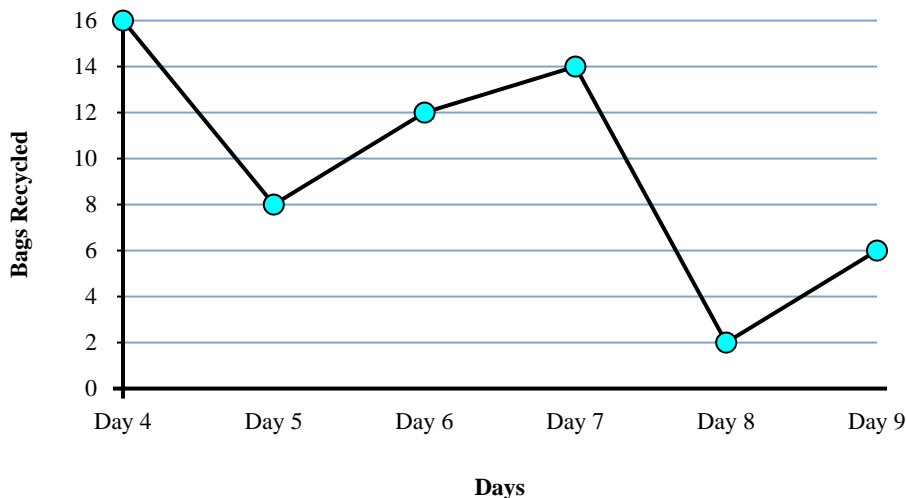
- 1) From Day 5 to Day 6 did the amount of bags recycled increase or decrease?
- 2) Which day had the greatest number of bags recycled?
- 3) On Day 9 the goal was to recycle 4 bags. Was the goal reached?
- 4) Which day had the fewest bags recycled?
- 5) Were fewer bags recycled on Day 7 or Day 9?
- 6) How many bags were recycled on Day 6?
- 7) What is the total number of bags recycled?
- 8) What is the difference in the number of bags recycled on Day 4 and the number recycled on Day 7?
- 9) How many bags were recycled on Day 5?
- 10) Were more bags recycled on Day 4 or Day 7?

1. _____
2. _____
3. _____
4. _____
5. _____
6. _____
7. _____
8. _____
9. _____
10. _____



Solve each problem.

Cans Recycled



- From Day 5 to Day 6 did the amount of bags recycled increase or decrease?
- Which day had the greatest number of bags recycled?
- On Day 9 the goal was to recycle 4 bags. Was the goal reached?
- Which day had the fewest bags recycled?
- Were fewer bags recycled on Day 7 or Day 9?
- How many bags were recycled on Day 6?
- What is the total number of bags recycled?
- What is the difference in the number of bags recycled on Day 4 and the number recycled on Day 7?
- How many bags were recycled on Day 5?
- Were more bags recycled on Day 4 or Day 7?

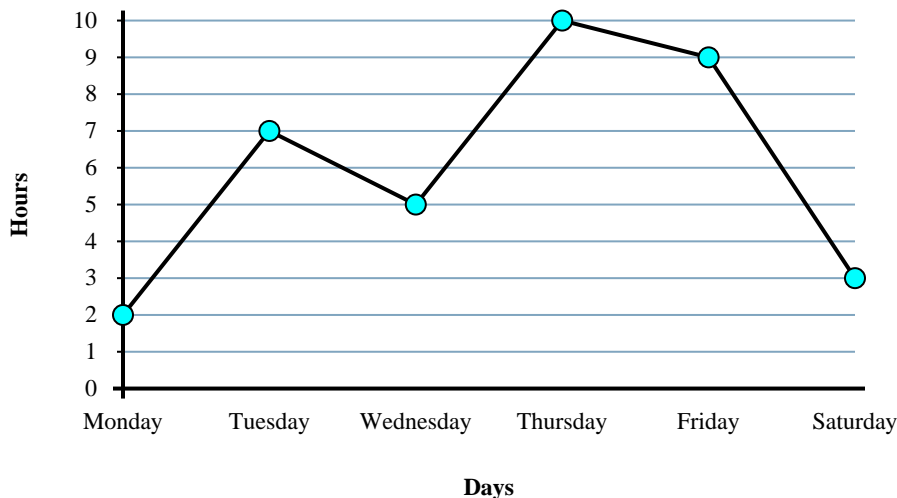
Answers

- Increase**
- Day 4**
- yes**
- Day 8**
- Day 9**
- 12**
- 58**
- 2**
- 8**
- Day 4**



Solve each problem.

Time Working



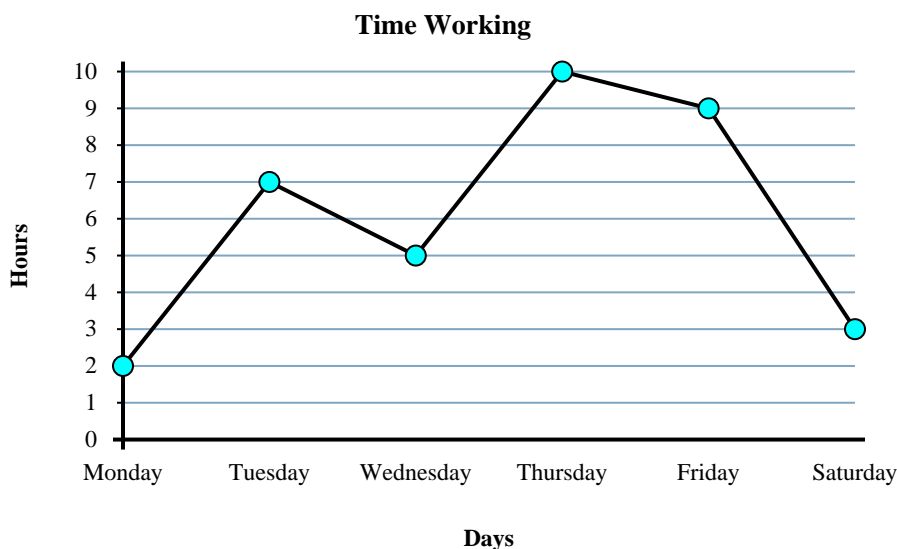
Answers

- 1) How many hours did she work on Monday?
- 2) From Monday to Tuesday did the number of hours she worked increase or decrease?
- 3) Which day did she work the most?
- 4) How many hours did she work on Saturday?
- 5) What is the total number of hours she worked?
- 6) On Thursday Sarah wanted to work at least 3 hours. Did she reach her goal?
- 7) Which day did she work the least?
- 8) What is the difference in the number of hours she worked on Tuesday and the number she worked on Friday?
- 9) Did she work more hours on Tuesday or on Wednesday?
- 10) Did she work fewer hours on Wednesday or on Thursday?

1. _____
2. _____
3. _____
4. _____
5. _____
6. _____
7. _____
8. _____
9. _____
10. _____



Solve each problem.



- 1) How many hours did she work on Monday?
- 2) From Monday to Tuesday did the number of hours she worked increase or decrease?
- 3) Which day did she work the most?
- 4) How many hours did she work on Saturday?
- 5) What is the total number of hours she worked?
- 6) On Thursday Sarah wanted to work at least 3 hours. Did she reach her goal?
- 7) Which day did she work the least?
- 8) What is the difference in the number of hours she worked on Tuesday and the number she worked on Friday?
- 9) Did she work more hours on Tuesday or on Wednesday?
- 10) Did she work fewer hours on Wednesday or on Thursday?

Answers

1. 2
2. Increase
3. Thursday
4. 3
5. 36
6. yes
7. Monday
8. 2
9. Tuesday
10. Wednesday