





Create and label the line plot using the set of numbers provided.

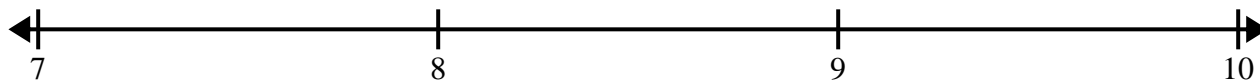
- 1) 4 $3\frac{1}{4}$ $5\frac{1}{4}$ $4\frac{3}{4}$ 3 $5\frac{3}{4}$ $5\frac{1}{4}$ $4\frac{2}{4}$
 $4\frac{3}{4}$ $3\frac{1}{4}$ $5\frac{1}{4}$ 4 $4\frac{1}{4}$ $3\frac{3}{4}$ $3\frac{3}{4}$ $3\frac{3}{4}$




- 2) $3\frac{1}{4}$ $3\frac{2}{4}$ $3\frac{3}{4}$ $3\frac{1}{4}$ $5\frac{3}{4}$ $4\frac{2}{4}$ $4\frac{3}{4}$ 3
 4 4 $5\frac{2}{4}$ $4\frac{2}{4}$ $3\frac{3}{4}$ $4\frac{1}{4}$ $3\frac{3}{4}$ $5\frac{1}{4}$




- 3) $9\frac{1}{2}$ 8 $7\frac{1}{2}$ $9\frac{1}{2}$ 8 8 $9\frac{1}{2}$ 7
 9 7 $7\frac{1}{2}$ 7 $7\frac{1}{2}$ 9 9 $8\frac{1}{2}$



- 4) 7 $9\frac{6}{8}$ $7\frac{4}{8}$ $7\frac{7}{8}$ $7\frac{1}{8}$ $8\frac{4}{8}$ $9\frac{1}{8}$ $8\frac{6}{8}$
 $7\frac{7}{8}$ $9\frac{1}{8}$ $9\frac{5}{8}$ $7\frac{6}{8}$ 7 $8\frac{6}{8}$ $7\frac{4}{8}$ $7\frac{1}{8}$

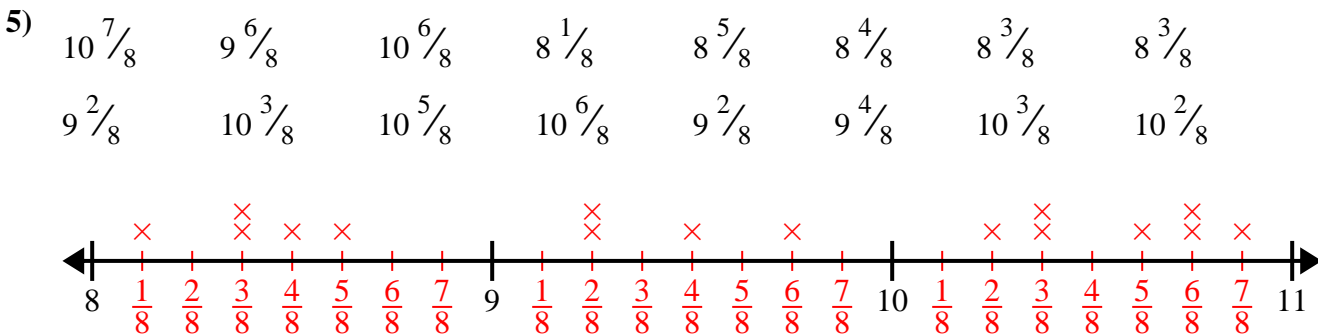
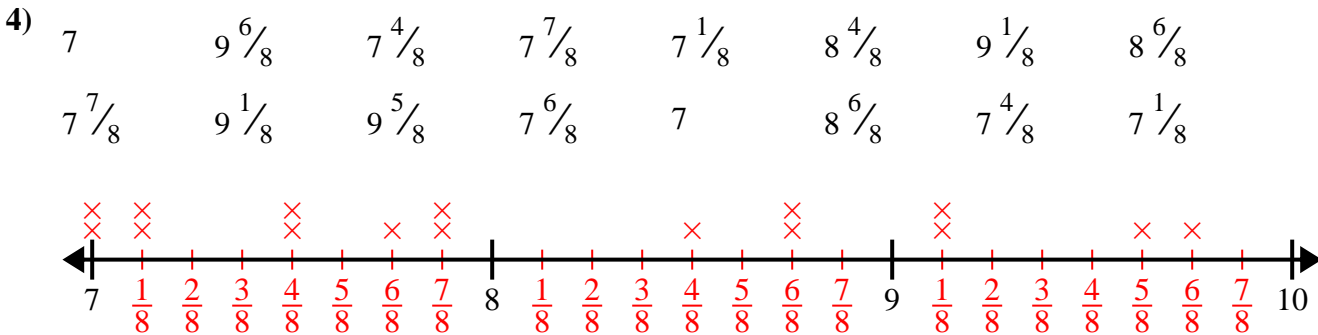
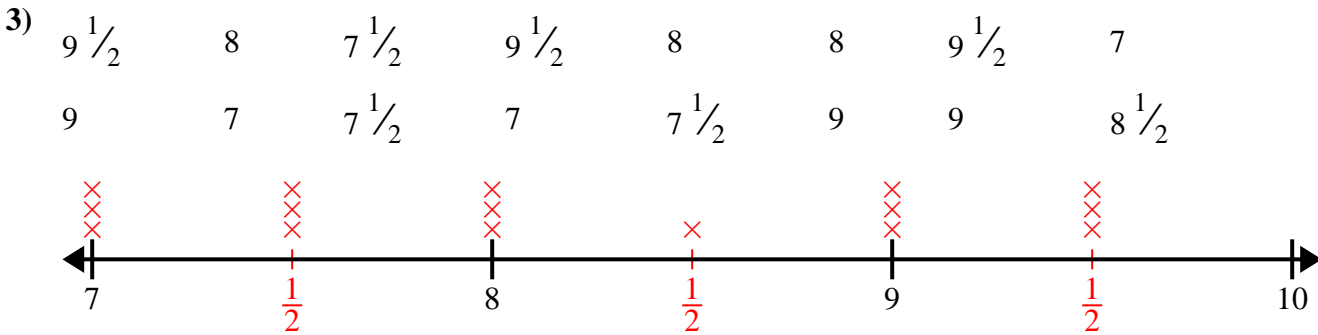
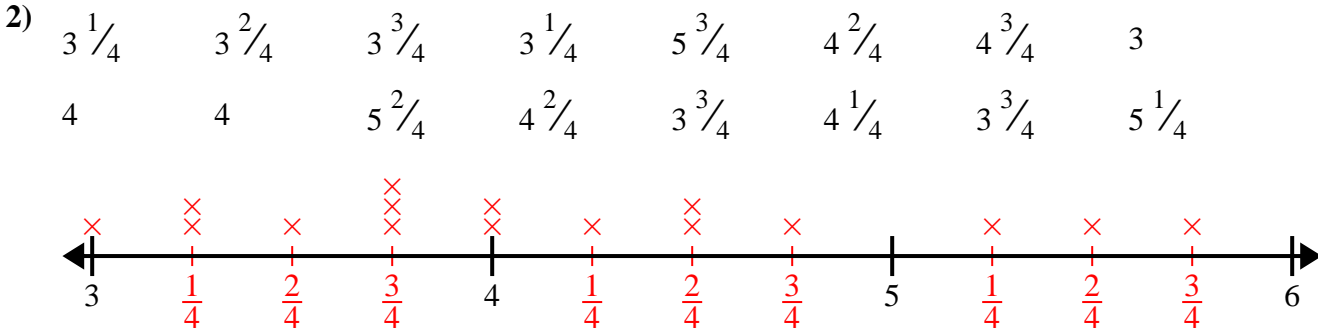
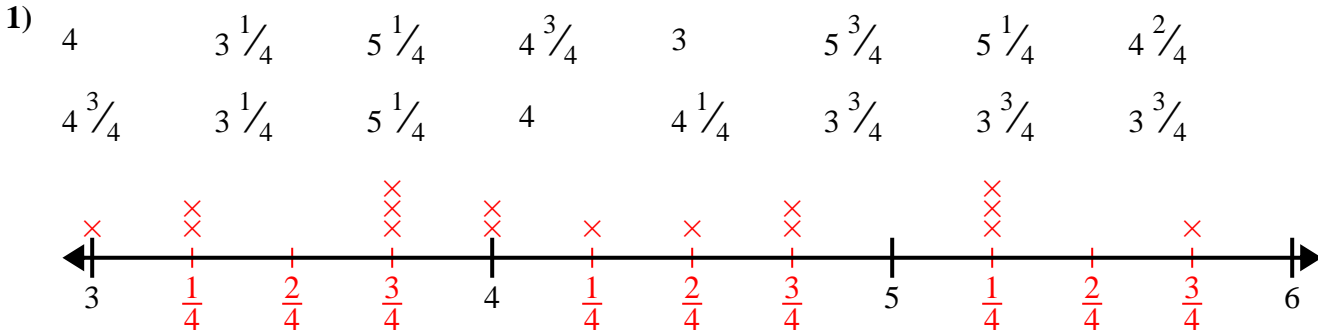


- 5) $10\frac{7}{8}$ $9\frac{6}{8}$ $10\frac{6}{8}$ $8\frac{1}{8}$ $8\frac{5}{8}$ $8\frac{4}{8}$ $8\frac{3}{8}$ $8\frac{3}{8}$
 $9\frac{2}{8}$ $10\frac{3}{8}$ $10\frac{5}{8}$ $10\frac{6}{8}$ $9\frac{2}{8}$ $9\frac{4}{8}$ $10\frac{3}{8}$ $10\frac{2}{8}$





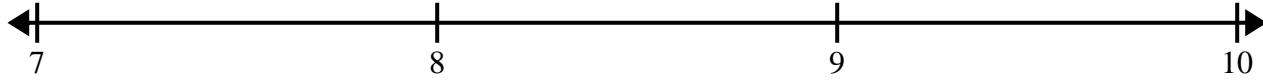
Create and label the line plot using the set of numbers provided.






Create and label the line plot using the set of numbers provided.


- 1) $7\frac{6}{8}$ $7\frac{5}{8}$ $9\frac{3}{8}$ $9\frac{7}{8}$ $8\frac{3}{8}$ 8 $7\frac{3}{8}$ $9\frac{2}{8}$
 $7\frac{3}{8}$ $8\frac{4}{8}$ $9\frac{1}{8}$ $8\frac{3}{8}$ $8\frac{2}{8}$ $7\frac{6}{8}$ $9\frac{1}{8}$ $9\frac{2}{8}$




- 2) $3\frac{1}{8}$ $5\frac{1}{8}$ $3\frac{7}{8}$ 3 4 $3\frac{5}{8}$ $5\frac{6}{8}$ $3\frac{6}{8}$
 $4\frac{5}{8}$ $5\frac{5}{8}$ $3\frac{5}{8}$ $4\frac{6}{8}$ $4\frac{2}{8}$ $3\frac{3}{8}$ 4 $3\frac{4}{8}$




- 3) 6 $8\frac{1}{4}$ $6\frac{2}{4}$ $6\frac{1}{4}$ $7\frac{2}{4}$ $8\frac{2}{4}$ $8\frac{2}{4}$ $8\frac{1}{4}$
 $6\frac{2}{4}$ $6\frac{2}{4}$ 8 8 6 8 $8\frac{1}{4}$ $8\frac{3}{4}$



- 4) $9\frac{2}{4}$ 8 $9\frac{1}{4}$ $8\frac{2}{4}$ $9\frac{2}{4}$ $8\frac{2}{4}$ $10\frac{2}{4}$ $9\frac{3}{4}$
 $8\frac{1}{4}$ $9\frac{3}{4}$ $8\frac{2}{4}$ $9\frac{2}{4}$ $9\frac{1}{4}$ $9\frac{3}{4}$ $8\frac{3}{4}$ $8\frac{3}{4}$



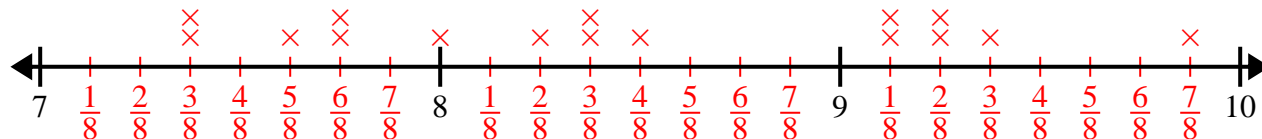
- 5) $8\frac{1}{2}$ 10 $10\frac{1}{2}$ 10 $10\frac{1}{2}$ 10 $9\frac{1}{2}$ 9
 $10\frac{1}{2}$ $8\frac{1}{2}$ 8 9 9 $9\frac{1}{2}$ $9\frac{1}{2}$ 8



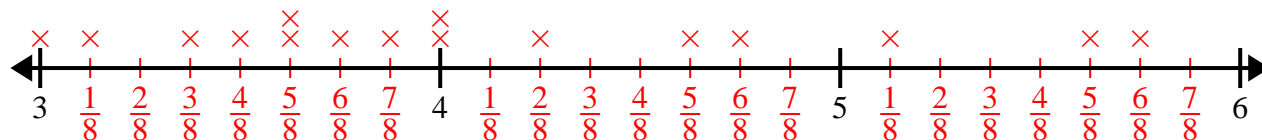


Create and label the line plot using the set of numbers provided.

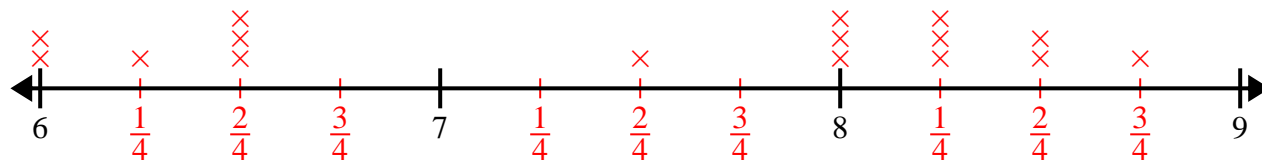
- 1) $7\frac{6}{8}$ $7\frac{5}{8}$ $9\frac{3}{8}$ $9\frac{7}{8}$ $8\frac{3}{8}$ 8 $7\frac{3}{8}$ $9\frac{2}{8}$
 $7\frac{3}{8}$ $8\frac{4}{8}$ $9\frac{1}{8}$ $8\frac{3}{8}$ $8\frac{2}{8}$ $7\frac{6}{8}$ $9\frac{1}{8}$ $9\frac{2}{8}$



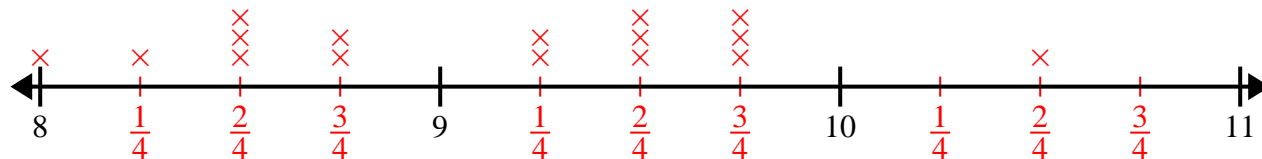
- 2) $3\frac{1}{8}$ $5\frac{1}{8}$ $3\frac{7}{8}$ 3 4 $3\frac{5}{8}$ $5\frac{6}{8}$ $3\frac{6}{8}$
 $4\frac{5}{8}$ $5\frac{5}{8}$ $3\frac{5}{8}$ $4\frac{6}{8}$ $4\frac{2}{8}$ $3\frac{3}{8}$ 4 $3\frac{4}{8}$



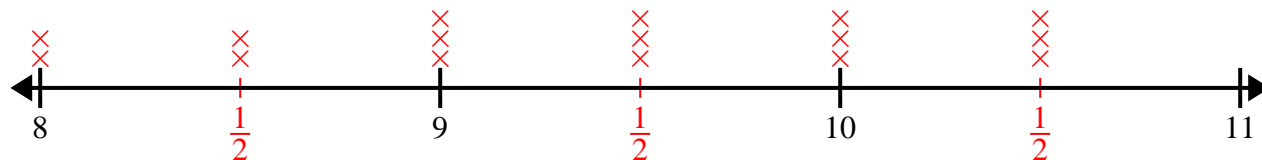
- 3) 6 $8\frac{1}{4}$ $6\frac{2}{4}$ $6\frac{1}{4}$ $7\frac{2}{4}$ $8\frac{2}{4}$ $8\frac{2}{4}$ $8\frac{1}{4}$
 $6\frac{2}{4}$ $6\frac{2}{4}$ 8 8 6 8 $8\frac{1}{4}$ $8\frac{3}{4}$



- 4) $9\frac{2}{4}$ 8 $9\frac{1}{4}$ $8\frac{2}{4}$ $9\frac{2}{4}$ $8\frac{2}{4}$ $10\frac{2}{4}$ $9\frac{3}{4}$
 $8\frac{1}{4}$ $9\frac{3}{4}$ $8\frac{2}{4}$ $9\frac{2}{4}$ $9\frac{1}{4}$ $9\frac{3}{4}$ $8\frac{3}{4}$ $8\frac{3}{4}$




- 5) $8\frac{1}{2}$ 10 $10\frac{1}{2}$ 10 $10\frac{1}{2}$ 10 $9\frac{1}{2}$ 9
 $10\frac{1}{2}$ $8\frac{1}{2}$ 8 9 9 $9\frac{1}{2}$ $9\frac{1}{2}$ 8






Create and label the line plot using the set of numbers provided.

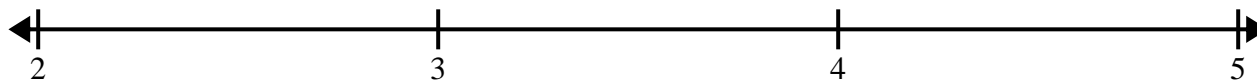
- 1) 5 5 4 4 $4\frac{1}{2}$ 5 4 $5\frac{1}{2}$
 3 $3\frac{1}{2}$ $5\frac{1}{2}$ $5\frac{1}{2}$ $4\frac{1}{2}$ $4\frac{1}{2}$ 3 3




- 2) $6\frac{3}{4}$ $5\frac{1}{4}$ 4 4 $6\frac{1}{4}$ $5\frac{3}{4}$ $5\frac{1}{4}$ $5\frac{2}{4}$
 $5\frac{1}{4}$ 6 $4\frac{2}{4}$ $6\frac{1}{4}$ 4 $4\frac{3}{4}$ $5\frac{3}{4}$ $4\frac{3}{4}$




- 3) 3 $3\frac{6}{8}$ $4\frac{5}{8}$ $2\frac{3}{8}$ $3\frac{4}{8}$ 3 $2\frac{1}{8}$ $2\frac{1}{8}$
 $4\frac{4}{8}$ $3\frac{5}{8}$ $4\frac{4}{8}$ 2 $3\frac{1}{8}$ $4\frac{6}{8}$ $4\frac{1}{8}$ $4\frac{7}{8}$



- 4) 4 $6\frac{1}{4}$ 4 $4\frac{2}{4}$ $4\frac{2}{4}$ 6 4 $5\frac{1}{4}$
 $4\frac{2}{4}$ 6 $5\frac{1}{4}$ 6 $6\frac{1}{4}$ 5 $6\frac{2}{4}$ $6\frac{3}{4}$



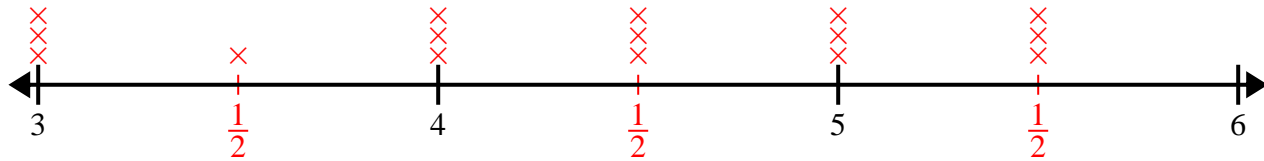
- 5) 10 10 9 $9\frac{1}{2}$ 10 $10\frac{1}{2}$ 11 9
 11 $11\frac{1}{2}$ 9 $11\frac{1}{2}$ $9\frac{1}{2}$ $10\frac{1}{2}$ $10\frac{1}{2}$ $11\frac{1}{2}$



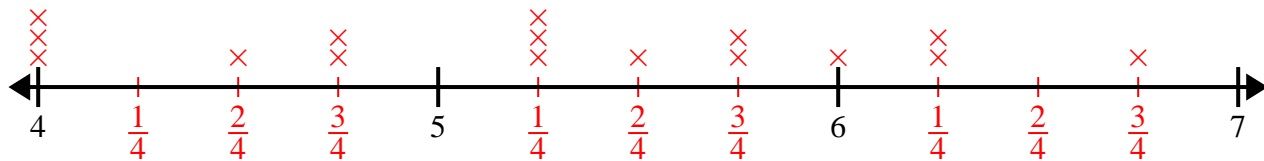


Create and label the line plot using the set of numbers provided.

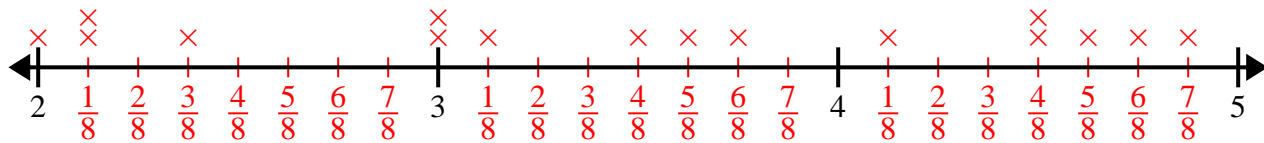
- 1) 5 5 4 4 $4\frac{1}{2}$ 5 4 $5\frac{1}{2}$
 3 $3\frac{1}{2}$ $5\frac{1}{2}$ $5\frac{1}{2}$ $4\frac{1}{2}$ $4\frac{1}{2}$ 3 3



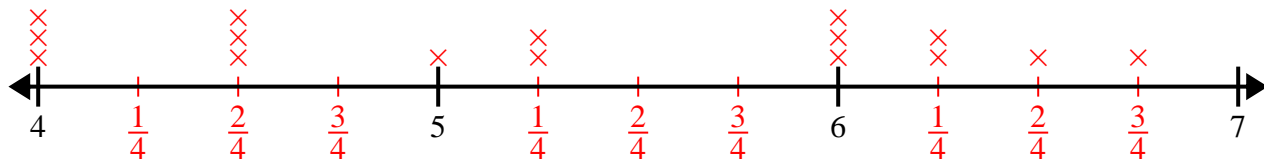
- 2) $6\frac{3}{4}$ $5\frac{1}{4}$ 4 4 $6\frac{1}{4}$ $5\frac{3}{4}$ $5\frac{1}{4}$ $5\frac{2}{4}$
 $5\frac{1}{4}$ 6 $4\frac{2}{4}$ $6\frac{1}{4}$ 4 $4\frac{3}{4}$ $5\frac{3}{4}$ $4\frac{3}{4}$



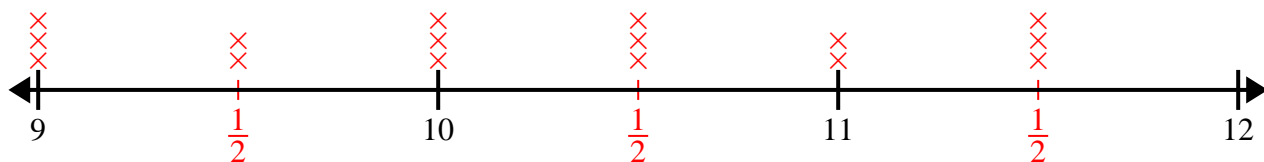
- 3) 3 $3\frac{6}{8}$ $4\frac{5}{8}$ $2\frac{3}{8}$ $3\frac{4}{8}$ 3 $2\frac{1}{8}$ $2\frac{1}{8}$
 $4\frac{4}{8}$ $3\frac{5}{8}$ $4\frac{4}{8}$ 2 $3\frac{1}{8}$ $4\frac{6}{8}$ $4\frac{1}{8}$ $4\frac{7}{8}$



- 4) 4 $6\frac{1}{4}$ 4 $4\frac{2}{4}$ $4\frac{2}{4}$ 6 4 $5\frac{1}{4}$
 $4\frac{2}{4}$ 6 $5\frac{1}{4}$ 6 $6\frac{1}{4}$ 5 $6\frac{2}{4}$ $6\frac{3}{4}$




- 5) 10 10 9 $9\frac{1}{2}$ 10 $10\frac{1}{2}$ 11 9
 11 $11\frac{1}{2}$ 9 $11\frac{1}{2}$ $9\frac{1}{2}$ $10\frac{1}{2}$ $10\frac{1}{2}$ $11\frac{1}{2}$






Create and label the line plot using the set of numbers provided.

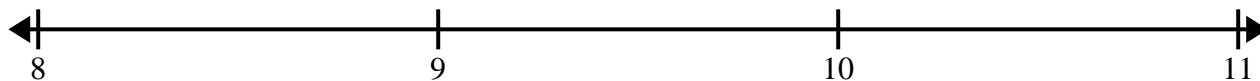
- 1) $4\frac{1}{2}$ $3\frac{1}{2}$ 3 $3\frac{1}{2}$ $3\frac{1}{2}$ 5 3 5
 3 $4\frac{1}{2}$ $4\frac{1}{2}$ 4 5 4 4 $5\frac{1}{2}$




- 2) $6\frac{2}{4}$ 8 $8\frac{2}{4}$ $7\frac{2}{4}$ $7\frac{3}{4}$ $6\frac{1}{4}$ $7\frac{3}{4}$ $7\frac{3}{4}$
 $6\frac{3}{4}$ $6\frac{2}{4}$ $7\frac{1}{4}$ $6\frac{3}{4}$ $8\frac{3}{4}$ 6 $8\frac{3}{4}$ $6\frac{3}{4}$




- 3) $8\frac{2}{4}$ $8\frac{3}{4}$ 8 $10\frac{3}{4}$ $8\frac{1}{4}$ $10\frac{2}{4}$ $8\frac{2}{4}$ 8
 9 $8\frac{3}{4}$ $8\frac{3}{4}$ $10\frac{3}{4}$ $10\frac{2}{4}$ $8\frac{2}{4}$ 10 $9\frac{3}{4}$



- 4) $4\frac{6}{8}$ $4\frac{6}{8}$ $5\frac{3}{8}$ $6\frac{6}{8}$ $4\frac{3}{8}$ $6\frac{4}{8}$ $5\frac{5}{8}$ $6\frac{4}{8}$
 $6\frac{4}{8}$ $6\frac{6}{8}$ $4\frac{5}{8}$ $6\frac{7}{8}$ $4\frac{4}{8}$ 6 $4\frac{7}{8}$ $4\frac{4}{8}$

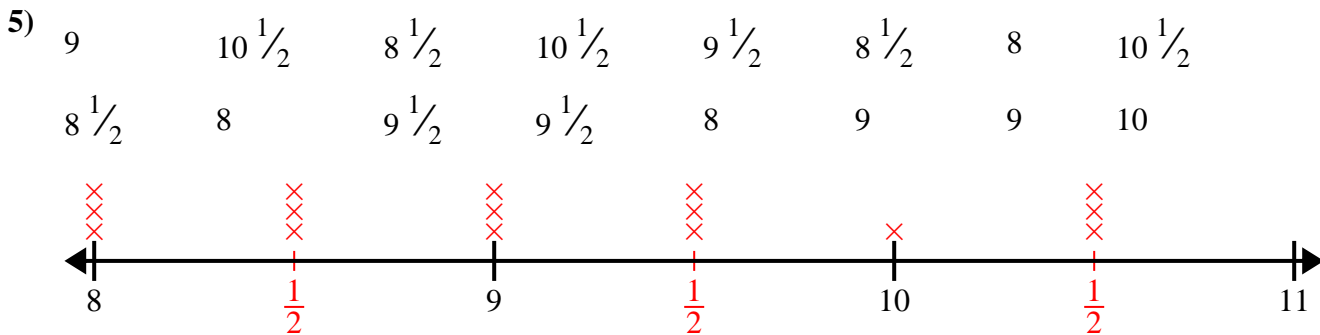
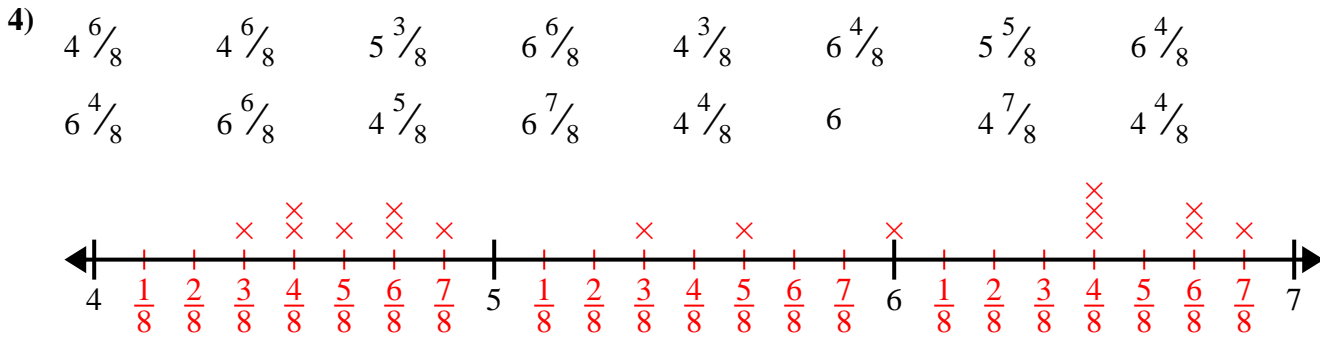
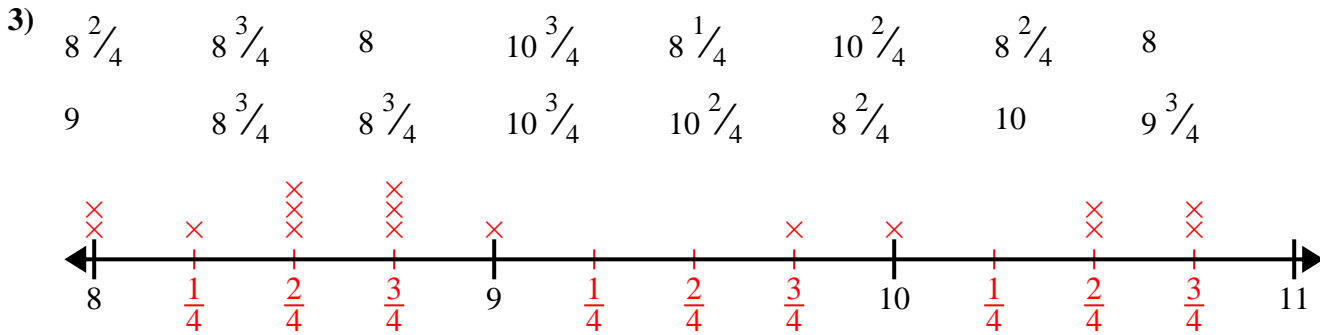
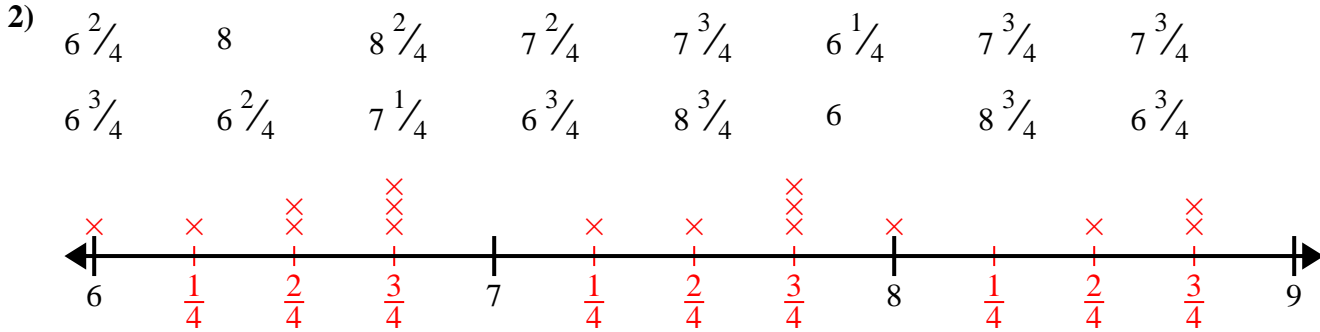
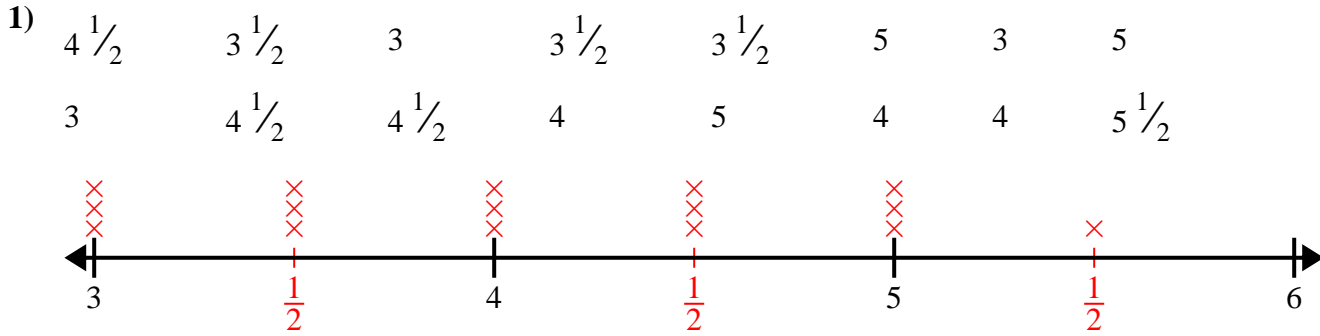


- 5) 9 $10\frac{1}{2}$ $8\frac{1}{2}$ $10\frac{1}{2}$ $9\frac{1}{2}$ $8\frac{1}{2}$ 8 $10\frac{1}{2}$
 $8\frac{1}{2}$ 8 $9\frac{1}{2}$ $9\frac{1}{2}$ 8 9 9 10






Create and label the line plot using the set of numbers provided.






Create and label the line plot using the set of numbers provided.

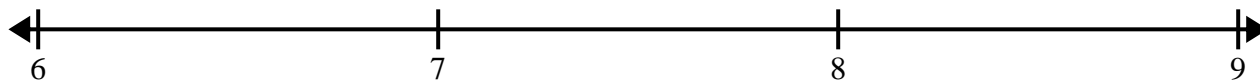
- 1) 7 $6\frac{2}{8}$ $7\frac{1}{8}$ $7\frac{2}{8}$ $7\frac{3}{8}$ $7\frac{5}{8}$ $7\frac{2}{8}$ $5\frac{4}{8}$
 $5\frac{5}{8}$ $5\frac{6}{8}$ $7\frac{4}{8}$ $5\frac{1}{8}$ $7\frac{3}{8}$ $7\frac{3}{8}$ $7\frac{7}{8}$ $5\frac{7}{8}$




- 2) $9\frac{1}{4}$ $7\frac{1}{4}$ $7\frac{2}{4}$ $7\frac{2}{4}$ $9\frac{3}{4}$ $9\frac{3}{4}$ $9\frac{3}{4}$ $9\frac{1}{4}$
 8 $7\frac{2}{4}$ $8\frac{1}{4}$ $7\frac{3}{4}$ 8 $7\frac{3}{4}$ $9\frac{1}{4}$ $8\frac{3}{4}$




- 3) $7\frac{1}{2}$ $8\frac{1}{2}$ $6\frac{1}{2}$ $6\frac{1}{2}$ 6 7 6 $8\frac{1}{2}$
 $7\frac{1}{2}$ 8 $6\frac{1}{2}$ 7 7 8 $8\frac{1}{2}$ $7\frac{1}{2}$



- 4) $3\frac{3}{4}$ 3 $5\frac{3}{4}$ 5 $5\frac{1}{4}$ 3 $4\frac{1}{4}$ $4\frac{3}{4}$
 5 $4\frac{3}{4}$ $4\frac{2}{4}$ $4\frac{2}{4}$ $5\frac{2}{4}$ $5\frac{3}{4}$ $4\frac{2}{4}$ $5\frac{2}{4}$



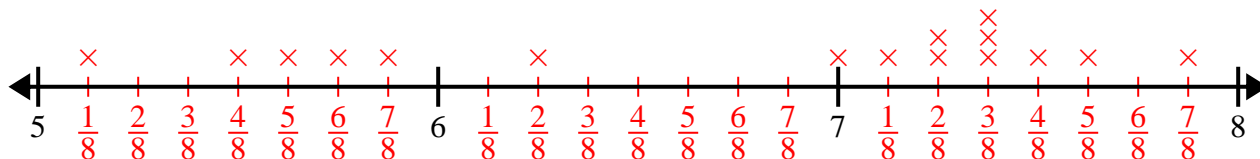
- 5) 3 $4\frac{2}{8}$ $2\frac{3}{8}$ $4\frac{1}{8}$ $2\frac{2}{8}$ $2\frac{6}{8}$ $4\frac{6}{8}$ $3\frac{5}{8}$
 $3\frac{3}{8}$ $3\frac{6}{8}$ $2\frac{4}{8}$ 2 4 $4\frac{2}{8}$ $2\frac{1}{8}$ $2\frac{2}{8}$



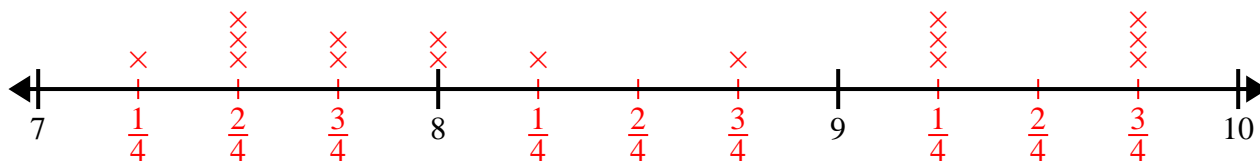


Create and label the line plot using the set of numbers provided.

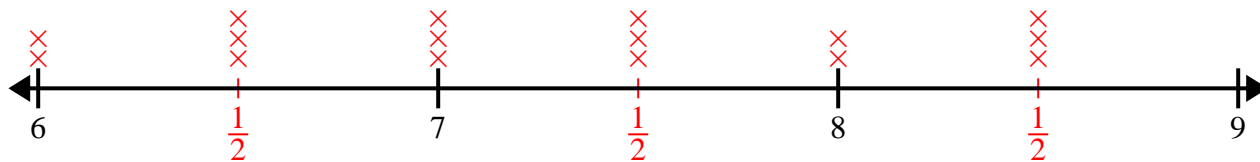
- 1) 7 $6\frac{2}{8}$ $7\frac{1}{8}$ $7\frac{2}{8}$ $7\frac{3}{8}$ $7\frac{5}{8}$ $7\frac{2}{8}$ $5\frac{4}{8}$
 $5\frac{5}{8}$ $5\frac{6}{8}$ $7\frac{4}{8}$ $5\frac{1}{8}$ $7\frac{3}{8}$ $7\frac{3}{8}$ $7\frac{7}{8}$ $5\frac{7}{8}$



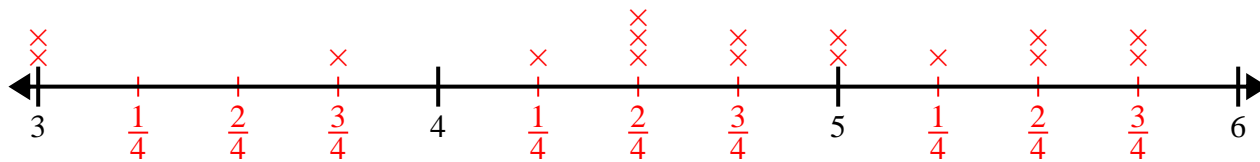
- 2) $9\frac{1}{4}$ $7\frac{1}{4}$ $7\frac{2}{4}$ $7\frac{2}{4}$ $9\frac{3}{4}$ $9\frac{3}{4}$ $9\frac{3}{4}$ $9\frac{1}{4}$
 8 $7\frac{2}{4}$ $8\frac{1}{4}$ $7\frac{3}{4}$ 8 $7\frac{3}{4}$ $9\frac{1}{4}$ $8\frac{3}{4}$



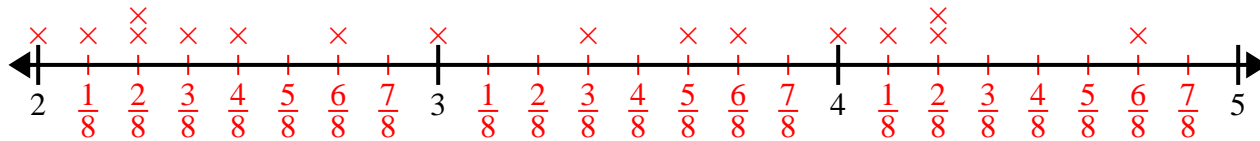
- 3) $7\frac{1}{2}$ $8\frac{1}{2}$ $6\frac{1}{2}$ $6\frac{1}{2}$ 6 7 6 $8\frac{1}{2}$
 $7\frac{1}{2}$ 8 $6\frac{1}{2}$ 7 7 8 $8\frac{1}{2}$ $7\frac{1}{2}$



- 4) $3\frac{3}{4}$ 3 $5\frac{3}{4}$ 5 $5\frac{1}{4}$ 3 $4\frac{1}{4}$ $4\frac{3}{4}$
 5 $4\frac{3}{4}$ $4\frac{2}{4}$ $4\frac{2}{4}$ $5\frac{2}{4}$ $5\frac{3}{4}$ $4\frac{2}{4}$ $5\frac{2}{4}$




- 5) 3 $4\frac{2}{8}$ $2\frac{3}{8}$ $4\frac{1}{8}$ $2\frac{2}{8}$ $2\frac{6}{8}$ $4\frac{6}{8}$ $3\frac{5}{8}$
 $3\frac{3}{8}$ $3\frac{6}{8}$ $2\frac{4}{8}$ 2 4 $4\frac{2}{8}$ $2\frac{1}{8}$ $2\frac{2}{8}$



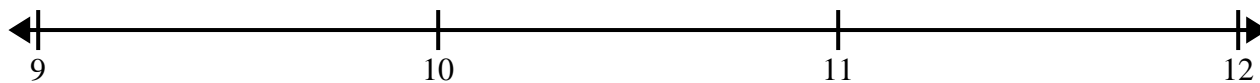


Create and label the line plot using the set of numbers provided.

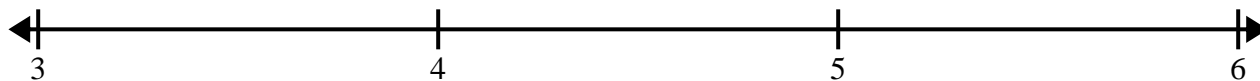
- 1) $3\frac{5}{8}$ $4\frac{6}{8}$ $4\frac{5}{8}$ $2\frac{7}{8}$ $3\frac{1}{8}$ $2\frac{2}{8}$ $2\frac{1}{8}$ $3\frac{7}{8}$
 $3\frac{5}{8}$ $3\frac{5}{8}$ $4\frac{1}{8}$ $2\frac{6}{8}$ $2\frac{3}{8}$ $3\frac{2}{8}$ $3\frac{2}{8}$ 3



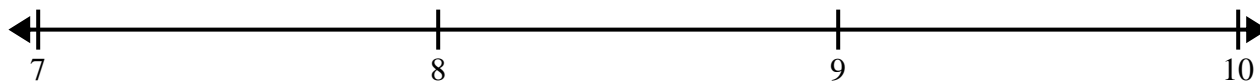
- 2) 11 9 9 10 $9\frac{1}{2}$ $10\frac{1}{2}$ $10\frac{1}{2}$ $9\frac{1}{2}$
 $11\frac{1}{2}$ $10\frac{1}{2}$ 9 $9\frac{1}{2}$ 10 10 $11\frac{1}{2}$ $11\frac{1}{2}$




- 3) $3\frac{2}{4}$ 3 $3\frac{3}{4}$ $4\frac{3}{4}$ 4 $3\frac{2}{4}$ $4\frac{1}{4}$ $5\frac{2}{4}$
 $3\frac{1}{4}$ $3\frac{1}{4}$ $4\frac{3}{4}$ $4\frac{1}{4}$ $3\frac{3}{4}$ 3 5 $5\frac{2}{4}$



- 4) 7 $8\frac{1}{2}$ $9\frac{1}{2}$ 7 9 8 $9\frac{1}{2}$ $9\frac{1}{2}$
 $8\frac{1}{2}$ 9 9 8 $8\frac{1}{2}$ 8 $7\frac{1}{2}$ 7



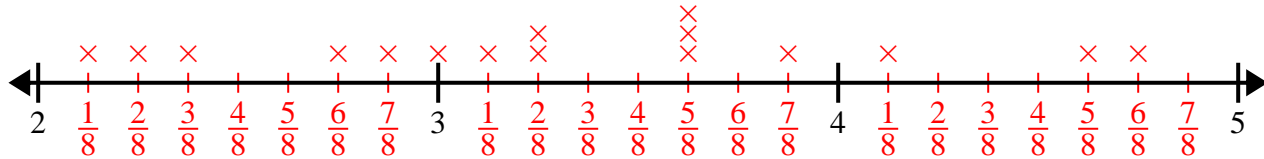
- 5) $2\frac{2}{4}$ $3\frac{3}{4}$ $4\frac{3}{4}$ $2\frac{2}{4}$ $4\frac{3}{4}$ $4\frac{1}{4}$ $4\frac{2}{4}$ $4\frac{3}{4}$
 $2\frac{3}{4}$ $4\frac{2}{4}$ 3 $2\frac{2}{4}$ 2 2 2 3



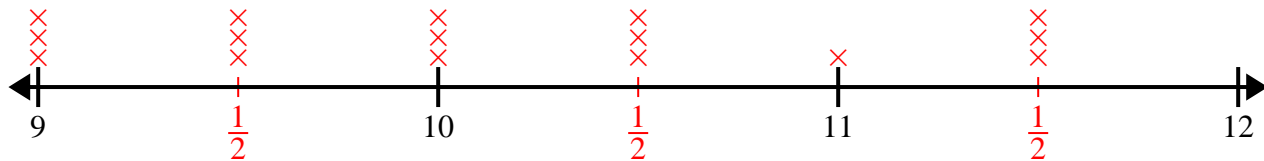


Create and label the line plot using the set of numbers provided.

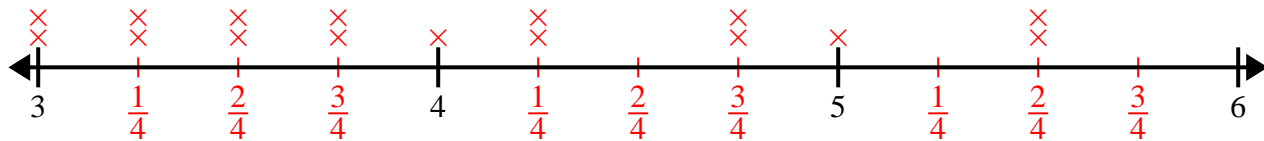
- 1) $3\frac{5}{8}$ $4\frac{6}{8}$ $4\frac{5}{8}$ $2\frac{7}{8}$ $3\frac{1}{8}$ $2\frac{2}{8}$ $2\frac{1}{8}$ $3\frac{7}{8}$
 $3\frac{5}{8}$ $3\frac{5}{8}$ $4\frac{1}{8}$ $2\frac{6}{8}$ $2\frac{3}{8}$ $3\frac{2}{8}$ $3\frac{2}{8}$ 3



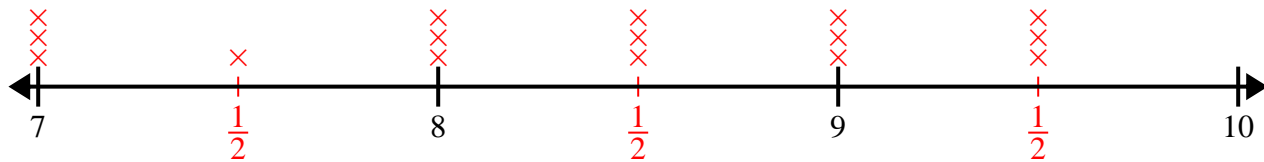
- 2) 11 9 9 10 $9\frac{1}{2}$ $10\frac{1}{2}$ $10\frac{1}{2}$ $9\frac{1}{2}$
 $11\frac{1}{2}$ $10\frac{1}{2}$ 9 $9\frac{1}{2}$ 10 10 $11\frac{1}{2}$ $11\frac{1}{2}$



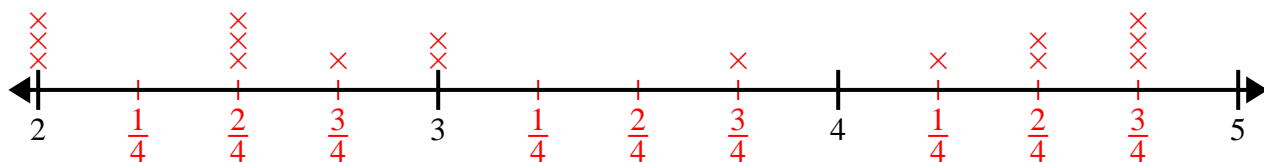
- 3) $3\frac{2}{4}$ 3 $3\frac{3}{4}$ $4\frac{3}{4}$ 4 $3\frac{2}{4}$ $4\frac{1}{4}$ $5\frac{2}{4}$
 $3\frac{1}{4}$ $3\frac{1}{4}$ $4\frac{3}{4}$ $4\frac{1}{4}$ $3\frac{3}{4}$ 3 5 $5\frac{2}{4}$



- 4) 7 $8\frac{1}{2}$ $9\frac{1}{2}$ 7 9 8 $9\frac{1}{2}$ $9\frac{1}{2}$
 $8\frac{1}{2}$ 9 9 8 $8\frac{1}{2}$ 8 $7\frac{1}{2}$ 7



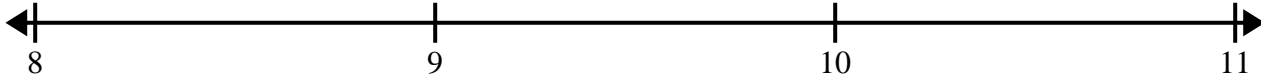
- 5) $2\frac{2}{4}$ $3\frac{3}{4}$ $4\frac{3}{4}$ $2\frac{2}{4}$ $4\frac{3}{4}$ $4\frac{1}{4}$ $4\frac{2}{4}$ $4\frac{3}{4}$
 $2\frac{3}{4}$ $4\frac{2}{4}$ 3 $2\frac{2}{4}$ 2 2 2 3






Create and label the line plot using the set of numbers provided.


- 1) $9\frac{1}{2}$ 9 8 10 9 $10\frac{1}{2}$ $9\frac{1}{2}$ 8
 $10\frac{1}{2}$ $9\frac{1}{2}$ 10 8 10 $8\frac{1}{2}$ $8\frac{1}{2}$ $8\frac{1}{2}$




- 2) $6\frac{1}{2}$ $8\frac{1}{2}$ 7 6 $8\frac{1}{2}$ 8 $6\frac{1}{2}$ $8\frac{1}{2}$
 7 $7\frac{1}{2}$ 6 $6\frac{1}{2}$ 8 8 6 7




- 3) $5\frac{2}{4}$ $7\frac{3}{4}$ $6\frac{3}{4}$ $5\frac{3}{4}$ $7\frac{3}{4}$ 6 $6\frac{1}{4}$ 5
 $6\frac{1}{4}$ $6\frac{1}{4}$ $5\frac{3}{4}$ $7\frac{3}{4}$ $6\frac{2}{4}$ 6 $5\frac{1}{4}$ $5\frac{1}{4}$



- 4) $5\frac{3}{4}$ 5 $5\frac{2}{4}$ $7\frac{2}{4}$ $7\frac{3}{4}$ $5\frac{3}{4}$ $6\frac{1}{4}$ $7\frac{2}{4}$
 5 $5\frac{1}{4}$ $6\frac{2}{4}$ $6\frac{3}{4}$ $6\frac{2}{4}$ $5\frac{2}{4}$ $5\frac{3}{4}$ 6

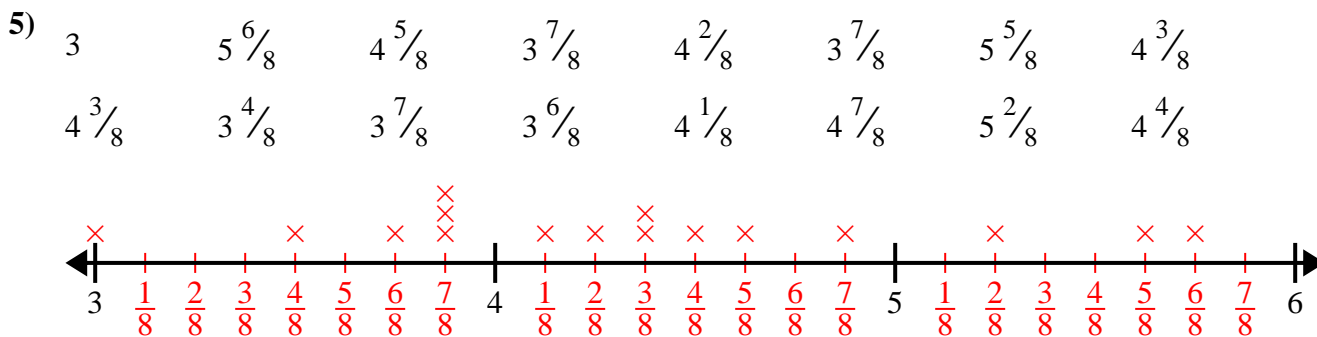
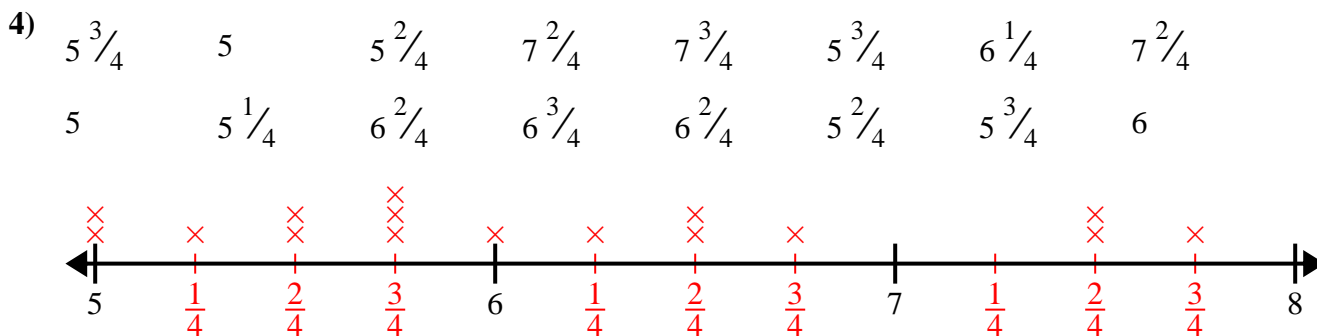
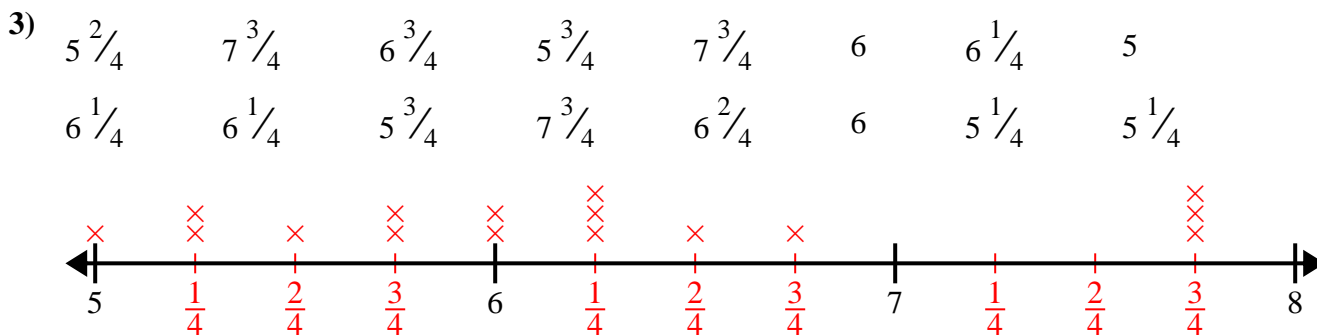
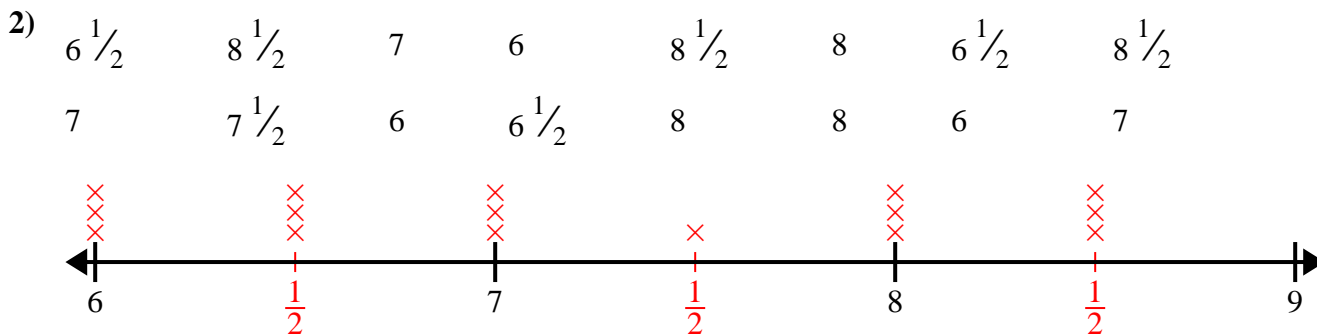
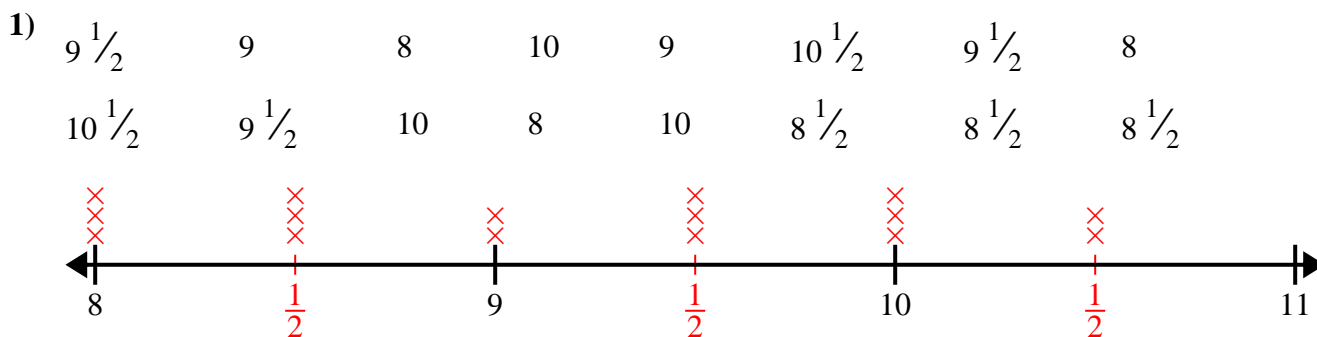


- 5) 3 $5\frac{6}{8}$ $4\frac{5}{8}$ $3\frac{7}{8}$ $4\frac{2}{8}$ $3\frac{7}{8}$ $5\frac{5}{8}$ $4\frac{3}{8}$
 $4\frac{3}{8}$ $3\frac{4}{8}$ $3\frac{7}{8}$ $3\frac{6}{8}$ $4\frac{1}{8}$ $4\frac{7}{8}$ $5\frac{2}{8}$ $4\frac{4}{8}$






Create and label the line plot using the set of numbers provided.






Create and label the line plot using the set of numbers provided.

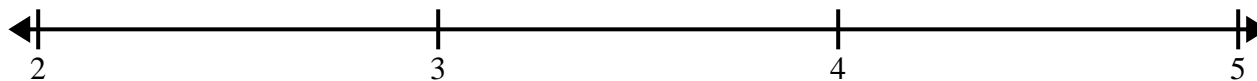
- 1) 7 7 5 $5\frac{1}{2}$ $5\frac{1}{2}$ 5 7 $7\frac{1}{2}$
 6 $7\frac{1}{2}$ 5 $6\frac{1}{2}$ $7\frac{1}{2}$ $5\frac{1}{2}$ 6 6



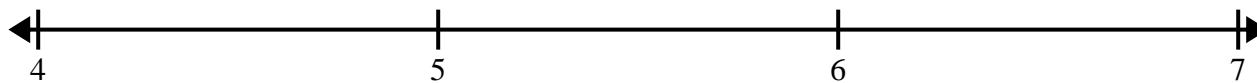
- 2) 6 $4\frac{3}{8}$ $6\frac{5}{8}$ $6\frac{6}{8}$ 6 $4\frac{4}{8}$ $4\frac{7}{8}$ $6\frac{5}{8}$
 $6\frac{6}{8}$ $4\frac{6}{8}$ $4\frac{4}{8}$ $4\frac{4}{8}$ $5\frac{1}{8}$ $5\frac{6}{8}$ $4\frac{3}{8}$ $6\frac{7}{8}$




- 3) $4\frac{2}{4}$ 3 $4\frac{1}{4}$ $2\frac{1}{4}$ $2\frac{2}{4}$ $3\frac{1}{4}$ $4\frac{2}{4}$ 3
 $4\frac{2}{4}$ 3 $2\frac{3}{4}$ 2 $2\frac{1}{4}$ $3\frac{1}{4}$ $2\frac{3}{4}$ $3\frac{3}{4}$



- 4) 6 $6\frac{1}{2}$ 5 $6\frac{1}{2}$ $5\frac{1}{2}$ $6\frac{1}{2}$ 4 $4\frac{1}{2}$
 $5\frac{1}{2}$ 4 5 6 $4\frac{1}{2}$ 5 4 $5\frac{1}{2}$



- 5) 11 9 $10\frac{2}{4}$ 11 $9\frac{3}{4}$ 9 9 $11\frac{3}{4}$
 $9\frac{2}{4}$ 10 $11\frac{2}{4}$ $11\frac{2}{4}$ $9\frac{2}{4}$ $9\frac{1}{4}$ $9\frac{2}{4}$ $11\frac{3}{4}$

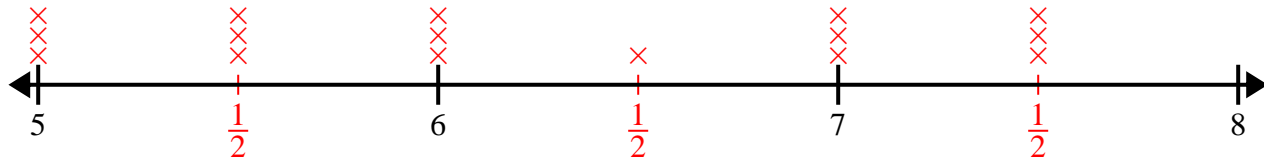




Create and label the line plot using the set of numbers provided.

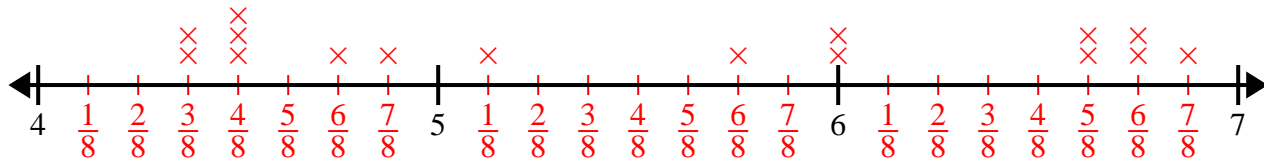
1) 7 7 5 $5\frac{1}{2}$ $5\frac{1}{2}$ 5 7 $7\frac{1}{2}$

6 $7\frac{1}{2}$ 5 $6\frac{1}{2}$ $7\frac{1}{2}$ $5\frac{1}{2}$ 6 6



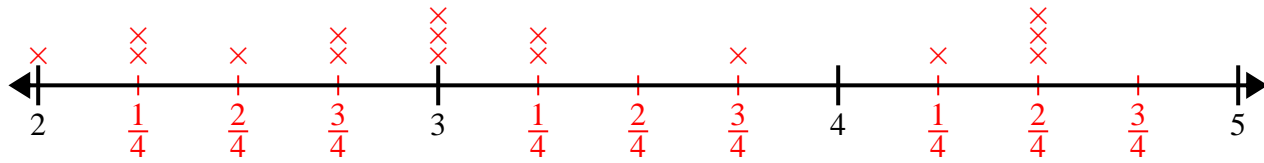
2) 6 $4\frac{3}{8}$ $6\frac{5}{8}$ $6\frac{6}{8}$ 6 $4\frac{4}{8}$ $4\frac{7}{8}$ $6\frac{5}{8}$

$6\frac{6}{8}$ $4\frac{6}{8}$ $4\frac{4}{8}$ $4\frac{4}{8}$ $5\frac{1}{8}$ $5\frac{6}{8}$ $4\frac{3}{8}$ $6\frac{7}{8}$



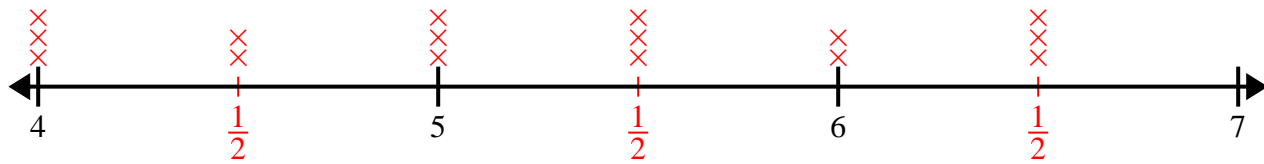
3) $4\frac{2}{4}$ 3 $4\frac{1}{4}$ $2\frac{1}{4}$ $2\frac{2}{4}$ $3\frac{1}{4}$ $4\frac{2}{4}$ 3

$4\frac{2}{4}$ 3 $2\frac{3}{4}$ 2 $2\frac{1}{4}$ $3\frac{1}{4}$ $2\frac{3}{4}$ $3\frac{3}{4}$



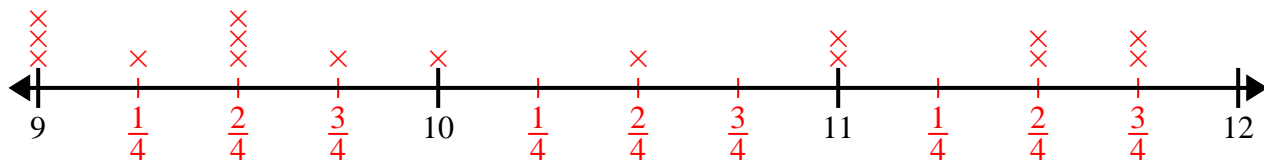
4) 6 $6\frac{1}{2}$ 5 $6\frac{1}{2}$ $5\frac{1}{2}$ $6\frac{1}{2}$ 4 $4\frac{1}{2}$

$5\frac{1}{2}$ 4 5 6 $4\frac{1}{2}$ 5 4 $5\frac{1}{2}$



5) 11 9 $10\frac{2}{4}$ 11 $9\frac{3}{4}$ 9 9 $11\frac{3}{4}$


$9\frac{2}{4}$ 10 $11\frac{2}{4}$ $11\frac{2}{4}$ $9\frac{2}{4}$ $9\frac{1}{4}$ $9\frac{2}{4}$ $11\frac{3}{4}$



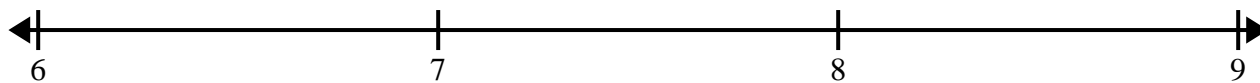


Create and label the line plot using the set of numbers provided.


- 1) $7\frac{3}{8}$ $8\frac{3}{8}$ $9\frac{2}{8}$ $7\frac{3}{8}$ 9 $9\frac{5}{8}$ $7\frac{1}{8}$ $8\frac{4}{8}$
 $8\frac{7}{8}$ $7\frac{2}{8}$ $9\frac{4}{8}$ $7\frac{2}{8}$ $7\frac{2}{8}$ $7\frac{1}{8}$ $9\frac{1}{8}$ $8\frac{7}{8}$



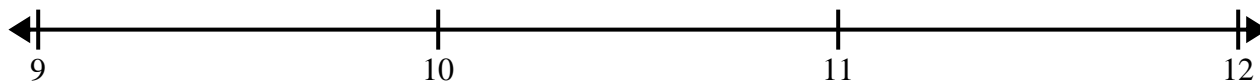
- 2) 7 $7\frac{4}{8}$ $8\frac{3}{8}$ $7\frac{7}{8}$ $8\frac{2}{8}$ $8\frac{1}{8}$ $7\frac{4}{8}$ $8\frac{5}{8}$
 $8\frac{7}{8}$ $8\frac{5}{8}$ 8 8 $7\frac{3}{8}$ $8\frac{2}{8}$ $6\frac{6}{8}$ $8\frac{5}{8}$




- 3) 6 $4\frac{1}{2}$ $5\frac{1}{2}$ 6 4 $6\frac{1}{2}$ 6 $5\frac{1}{2}$
 $6\frac{1}{2}$ $4\frac{1}{2}$ 5 $6\frac{1}{2}$ $5\frac{1}{2}$ 4 4 $4\frac{1}{2}$



- 4) $10\frac{3}{4}$ $10\frac{3}{4}$ 11 $9\frac{1}{4}$ $9\frac{2}{4}$ 11 $10\frac{2}{4}$ $11\frac{2}{4}$
 $11\frac{1}{4}$ $11\frac{1}{4}$ $9\frac{3}{4}$ $9\frac{2}{4}$ $11\frac{1}{4}$ $9\frac{3}{4}$ 10 $10\frac{2}{4}$



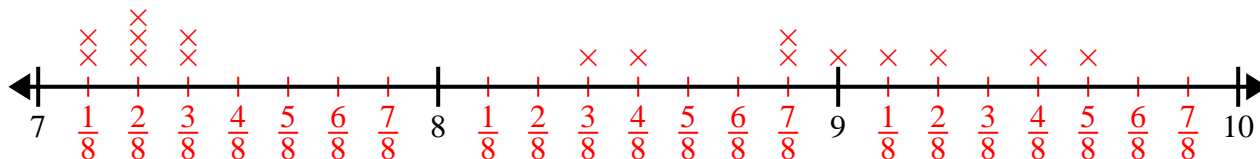
- 5) $8\frac{1}{4}$ $7\frac{3}{4}$ $6\frac{3}{4}$ $7\frac{2}{4}$ $6\frac{1}{4}$ $8\frac{2}{4}$ $6\frac{3}{4}$ $7\frac{3}{4}$
 $7\frac{2}{4}$ $8\frac{2}{4}$ $7\frac{3}{4}$ $6\frac{2}{4}$ $7\frac{1}{4}$ 6 $6\frac{1}{4}$ $6\frac{3}{4}$



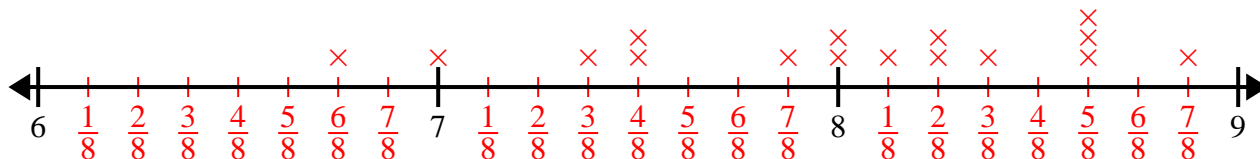


Create and label the line plot using the set of numbers provided.

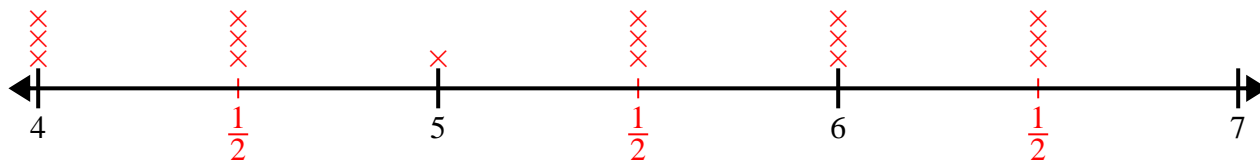
- 1) $7\frac{3}{8}$ $8\frac{3}{8}$ $9\frac{2}{8}$ $7\frac{3}{8}$ 9 $9\frac{5}{8}$ $7\frac{1}{8}$ $8\frac{4}{8}$
 $8\frac{7}{8}$ $7\frac{2}{8}$ $9\frac{4}{8}$ $7\frac{2}{8}$ $7\frac{2}{8}$ $7\frac{1}{8}$ $9\frac{1}{8}$ $8\frac{7}{8}$



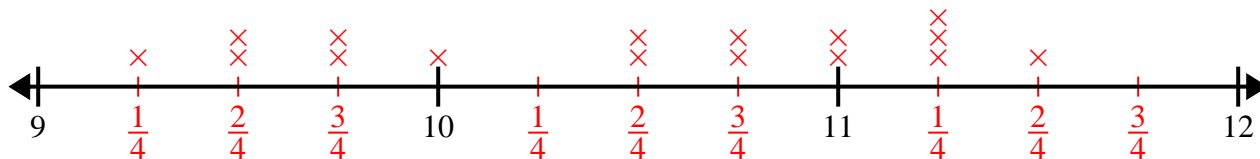
- 2) 7 $7\frac{4}{8}$ $8\frac{3}{8}$ $7\frac{7}{8}$ $8\frac{2}{8}$ $8\frac{1}{8}$ $7\frac{4}{8}$ $8\frac{5}{8}$
 $8\frac{7}{8}$ $8\frac{5}{8}$ 8 8 $7\frac{3}{8}$ $8\frac{2}{8}$ $6\frac{6}{8}$ $8\frac{5}{8}$



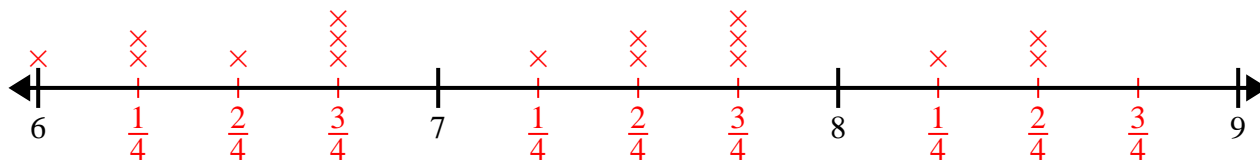
- 3) 6 $4\frac{1}{2}$ $5\frac{1}{2}$ 6 4 $6\frac{1}{2}$ 6 $5\frac{1}{2}$
 $6\frac{1}{2}$ $4\frac{1}{2}$ 5 $6\frac{1}{2}$ $5\frac{1}{2}$ 4 4 $4\frac{1}{2}$



- 4) $10\frac{3}{4}$ $10\frac{3}{4}$ 11 $9\frac{1}{4}$ $9\frac{2}{4}$ 11 $10\frac{2}{4}$ $11\frac{2}{4}$
 $11\frac{1}{4}$ $11\frac{1}{4}$ $9\frac{3}{4}$ $9\frac{2}{4}$ $11\frac{1}{4}$ $9\frac{3}{4}$ 10 $10\frac{2}{4}$




- 5) $8\frac{1}{4}$ $7\frac{3}{4}$ $6\frac{3}{4}$ $7\frac{2}{4}$ $6\frac{1}{4}$ $8\frac{2}{4}$ $6\frac{3}{4}$ $7\frac{3}{4}$
 $7\frac{2}{4}$ $8\frac{2}{4}$ $7\frac{3}{4}$ $6\frac{2}{4}$ $7\frac{1}{4}$ 6 $6\frac{1}{4}$ $6\frac{3}{4}$






Create and label the line plot using the set of numbers provided.

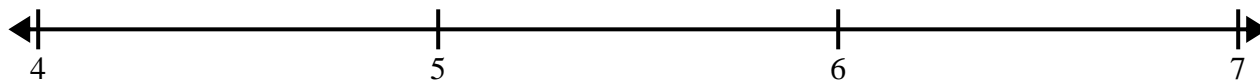
- 1) 7 $8\frac{1}{2}$ $8\frac{1}{2}$ 6 8 6 7 $8\frac{1}{2}$
 6 $7\frac{1}{2}$ $6\frac{1}{2}$ $7\frac{1}{2}$ $6\frac{1}{2}$ 8 $7\frac{1}{2}$ $6\frac{1}{2}$



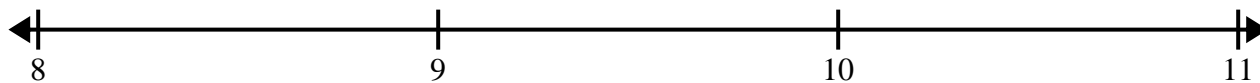
- 2) $7\frac{3}{8}$ $9\frac{1}{8}$ $8\frac{2}{8}$ $8\frac{4}{8}$ 7 $8\frac{2}{8}$ $8\frac{4}{8}$ $9\frac{7}{8}$
 $7\frac{5}{8}$ 7 $8\frac{2}{8}$ $8\frac{4}{8}$ $8\frac{5}{8}$ 8 $9\frac{5}{8}$ $9\frac{4}{8}$




- 3) $4\frac{1}{8}$ 5 $5\frac{4}{8}$ 5 6 $4\frac{7}{8}$ $5\frac{4}{8}$ $6\frac{3}{8}$
 $5\frac{3}{8}$ $6\frac{3}{8}$ $5\frac{4}{8}$ $5\frac{3}{8}$ $6\frac{4}{8}$ $5\frac{2}{8}$ $6\frac{4}{8}$ 6



- 4) 10 10 $8\frac{1}{2}$ $8\frac{1}{2}$ 9 $9\frac{1}{2}$ 9 $10\frac{1}{2}$
 $9\frac{1}{2}$ $8\frac{1}{2}$ 10 $10\frac{1}{2}$ $9\frac{1}{2}$ $10\frac{1}{2}$ 8 9



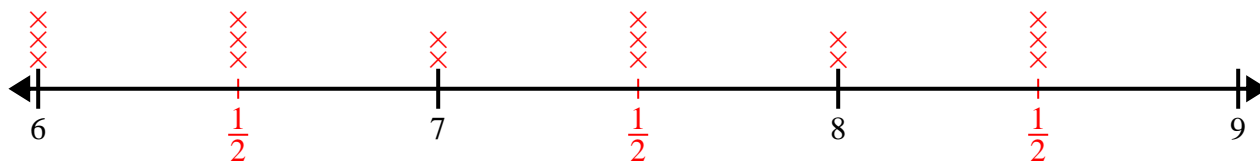
- 5) $6\frac{3}{4}$ $6\frac{3}{4}$ 6 $5\frac{1}{4}$ $4\frac{3}{4}$ $5\frac{2}{4}$ $6\frac{2}{4}$ $5\frac{1}{4}$
 $4\frac{2}{4}$ 4 $6\frac{1}{4}$ $4\frac{1}{4}$ 6 $4\frac{2}{4}$ 5 $4\frac{1}{4}$



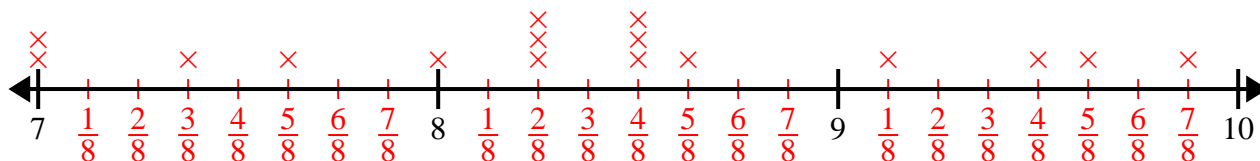


Create and label the line plot using the set of numbers provided.

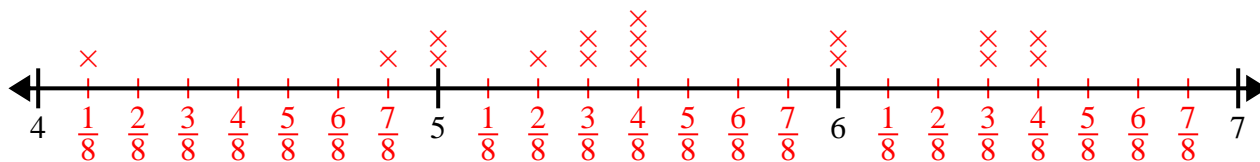
- 1) 7 $8\frac{1}{2}$ $8\frac{1}{2}$ 6 8 6 7 $8\frac{1}{2}$
 6 $7\frac{1}{2}$ $6\frac{1}{2}$ $7\frac{1}{2}$ $6\frac{1}{2}$ 8 $7\frac{1}{2}$ $6\frac{1}{2}$



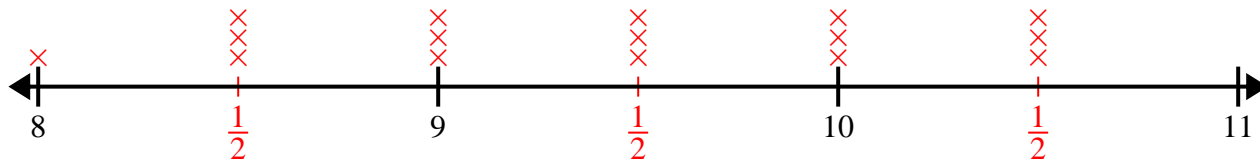
- 2) $7\frac{3}{8}$ $9\frac{1}{8}$ $8\frac{2}{8}$ $8\frac{4}{8}$ 7 $8\frac{2}{8}$ $8\frac{4}{8}$ $9\frac{7}{8}$
 $7\frac{5}{8}$ 7 $8\frac{2}{8}$ $8\frac{4}{8}$ $8\frac{5}{8}$ 8 $9\frac{5}{8}$ $9\frac{4}{8}$



- 3) $4\frac{1}{8}$ 5 $5\frac{4}{8}$ 5 6 $4\frac{7}{8}$ $5\frac{4}{8}$ $6\frac{3}{8}$
 $5\frac{3}{8}$ $6\frac{3}{8}$ $5\frac{4}{8}$ $5\frac{3}{8}$ $6\frac{4}{8}$ $5\frac{2}{8}$ $6\frac{4}{8}$ 6



- 4) 10 10 $8\frac{1}{2}$ $8\frac{1}{2}$ 9 $9\frac{1}{2}$ 9 $10\frac{1}{2}$
 $9\frac{1}{2}$ $8\frac{1}{2}$ 10 $10\frac{1}{2}$ $9\frac{1}{2}$ $10\frac{1}{2}$ 8 9



- 5) $6\frac{3}{4}$ $6\frac{3}{4}$ 6 $5\frac{1}{4}$ $4\frac{3}{4}$ $5\frac{2}{4}$ $6\frac{2}{4}$ $5\frac{1}{4}$
 $4\frac{2}{4}$ 4 $6\frac{1}{4}$ $4\frac{1}{4}$ 6 $4\frac{2}{4}$ 5 $4\frac{1}{4}$

