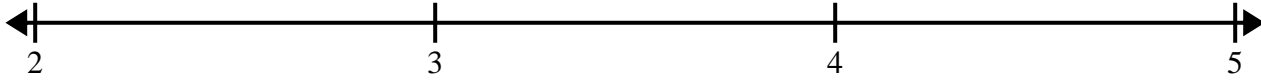





Create and label the line plot using the set of numbers provided.


- 1) 4 $4\frac{4}{8}$ $3\frac{1}{8}$ 4 $3\frac{3}{8}$ $2\frac{5}{8}$ 4 $3\frac{5}{8}$
 $3\frac{7}{8}$ $3\frac{4}{8}$ $4\frac{2}{8}$ $3\frac{3}{8}$ 3 $2\frac{3}{8}$ $4\frac{6}{8}$ $4\frac{5}{8}$




- 2) 4 4 5 $3\frac{2}{4}$ $3\frac{2}{4}$ $3\frac{2}{4}$ $4\frac{2}{4}$ $5\frac{3}{4}$
 3 $5\frac{1}{4}$ $5\frac{3}{4}$ $5\frac{1}{4}$ 5 $4\frac{1}{4}$ $3\frac{3}{4}$ $3\frac{3}{4}$




- 3) 10 $10\frac{1}{2}$ 9 $11\frac{1}{2}$ $11\frac{1}{2}$ $9\frac{1}{2}$ 9 $11\frac{1}{2}$
 11 9 $9\frac{1}{2}$ 10 $9\frac{1}{2}$ 10 $10\frac{1}{2}$ 11



- 4) $4\frac{1}{8}$ $3\frac{1}{8}$ $3\frac{1}{8}$ $3\frac{2}{8}$ $3\frac{6}{8}$ $4\frac{1}{8}$ $2\frac{5}{8}$ $3\frac{6}{8}$
 4 $2\frac{5}{8}$ $2\frac{4}{8}$ 4 $4\frac{3}{8}$ $2\frac{4}{8}$ $3\frac{2}{8}$ $4\frac{6}{8}$



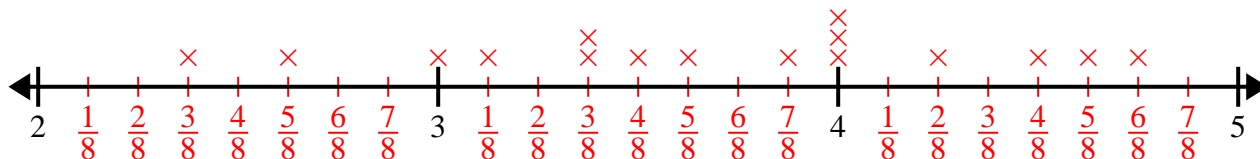
- 5) $5\frac{1}{4}$ $5\frac{3}{4}$ $3\frac{3}{4}$ $5\frac{3}{4}$ 4 $4\frac{3}{4}$ $5\frac{3}{4}$ $5\frac{2}{4}$
 $3\frac{1}{4}$ $4\frac{3}{4}$ $3\frac{2}{4}$ $3\frac{1}{4}$ $5\frac{1}{4}$ $3\frac{2}{4}$ $3\frac{3}{4}$ $4\frac{1}{4}$



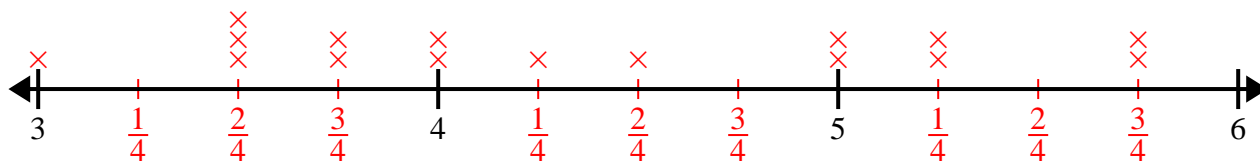


Create and label the line plot using the set of numbers provided.

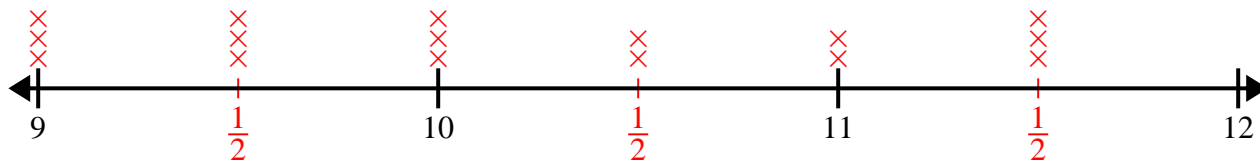
- 1) 4 $4\frac{4}{8}$ $3\frac{1}{8}$ 4 $3\frac{3}{8}$ $2\frac{5}{8}$ 4 $3\frac{5}{8}$
 $3\frac{7}{8}$ $3\frac{4}{8}$ $4\frac{2}{8}$ $3\frac{3}{8}$ 3 $2\frac{3}{8}$ $4\frac{6}{8}$ $4\frac{5}{8}$



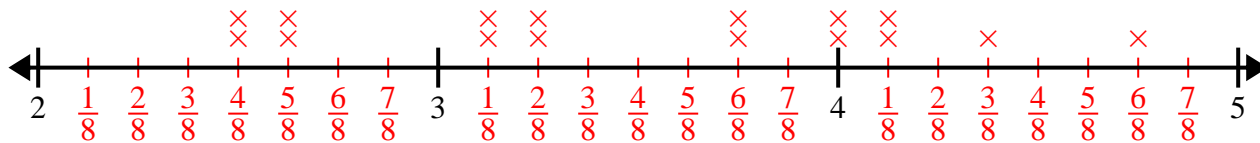
- 2) 4 4 5 $3\frac{2}{4}$ $3\frac{2}{4}$ $3\frac{2}{4}$ $4\frac{2}{4}$ $5\frac{3}{4}$
 3 $5\frac{1}{4}$ $5\frac{3}{4}$ $5\frac{1}{4}$ 5 $4\frac{1}{4}$ $3\frac{3}{4}$ $3\frac{3}{4}$



- 3) 10 $10\frac{1}{2}$ 9 $11\frac{1}{2}$ $11\frac{1}{2}$ $9\frac{1}{2}$ 9 $11\frac{1}{2}$
 11 9 $9\frac{1}{2}$ 10 $9\frac{1}{2}$ 10 $10\frac{1}{2}$ 11



- 4) $4\frac{1}{8}$ $3\frac{1}{8}$ $3\frac{1}{8}$ $3\frac{2}{8}$ $3\frac{6}{8}$ $4\frac{1}{8}$ $2\frac{5}{8}$ $3\frac{6}{8}$
 4 $2\frac{5}{8}$ $2\frac{4}{8}$ 4 $4\frac{3}{8}$ $2\frac{4}{8}$ $3\frac{2}{8}$ $4\frac{6}{8}$



- 5) $5\frac{1}{4}$ $5\frac{3}{4}$ $3\frac{3}{4}$ $5\frac{3}{4}$ 4 $4\frac{3}{4}$ $5\frac{3}{4}$ $5\frac{2}{4}$
 $3\frac{1}{4}$ $4\frac{3}{4}$ $3\frac{2}{4}$ $3\frac{1}{4}$ $5\frac{1}{4}$ $3\frac{2}{4}$ $3\frac{3}{4}$ $4\frac{1}{4}$

