



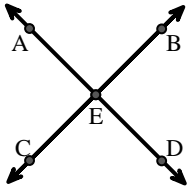
Match the description on the top with the visual image on the bottom.

**Answers**

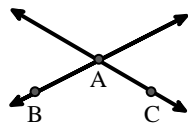
- 1)  $\vec{AC}$  parallel to  $\vec{EB}$
- 2)  $\vec{BA}$  intersecting  $\vec{AD}$
- 3) Acute  $\angle BED$
- 4)  $\vec{AD}$  intersecting  $\vec{BC}$  at point E
- 5)  $\vec{BE}$  intersecting  $\vec{CD}$
- 6)  $\vec{AC}$  intersected by  $\vec{BD}$
- 7)  $\angle BAC$  creating an obtuse angle
- 8)  $\vec{BC}$  intersecting  $\angle ACD$
- 9)  $\vec{AB}$  intersecting  $\vec{AD}$
- 10) Acute  $\angle ABC$  intersecting  $\vec{AD}$
- 11)  $\angle DEC$  intersected by  $\vec{AC}$
- 12)  $\vec{AC}$  perpendicular to  $\vec{AD}$

1. \_\_\_\_\_
2. \_\_\_\_\_
3. \_\_\_\_\_
4. \_\_\_\_\_
5. \_\_\_\_\_
6. \_\_\_\_\_
7. \_\_\_\_\_
8. \_\_\_\_\_
9. \_\_\_\_\_
10. \_\_\_\_\_
11. \_\_\_\_\_
12. \_\_\_\_\_

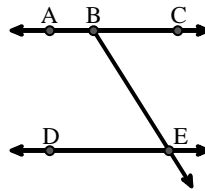
A.



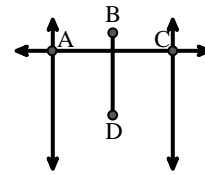
B.



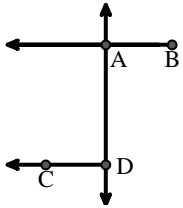
C.



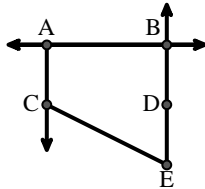
D.



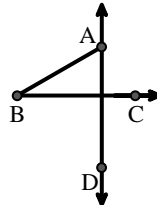
E.



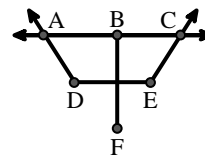
F.



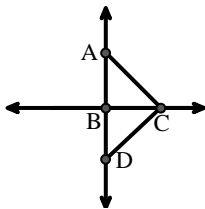
G.



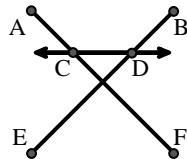
H.



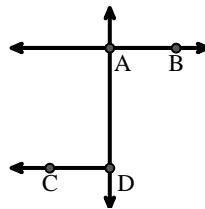
I.



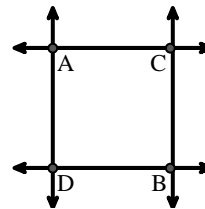
J.



K.



L.





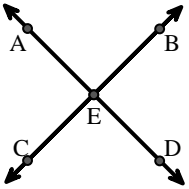
Match the description on the top with the visual image on the bottom.

**Answers**

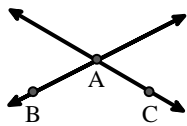
- 1)  $\vec{AC}$  parallel to  $\vec{EB}$
- 2)  $\vec{BA}$  intersecting  $\vec{AD}$
- 3) Acute  $\angle BED$
- 4)  $\vec{AD}$  intersecting  $\vec{BC}$  at point E
- 5)  $\vec{BE}$  intersecting  $\vec{CD}$
- 6)  $\vec{AC}$  intersected by  $\vec{BD}$
- 7)  $\angle BAC$  creating an obtuse angle
- 8)  $\vec{BC}$  intersecting  $\angle ACD$
- 9)  $\vec{AB}$  intersecting  $\vec{AD}$
- 10) Acute  $\angle ABC$  intersecting  $\vec{AD}$
- 11)  $\angle DEC$  intersected by  $\vec{AC}$
- 12)  $\vec{AC}$  perpendicular to  $\vec{AD}$

1. **F**
2. **E**
3. **C**
4. **A**
5. **J**
6. **D**
7. **B**
8. **I**
9. **K**
10. **G**
11. **H**
12. **L**

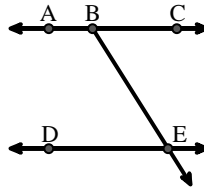
A.



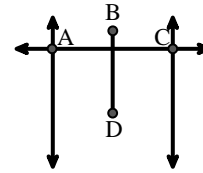
B.



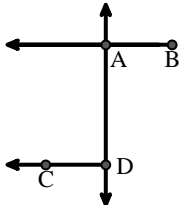
C.



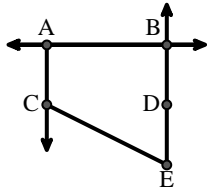
D.



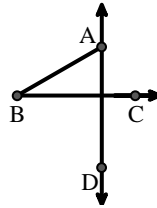
E.



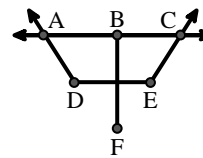
F.



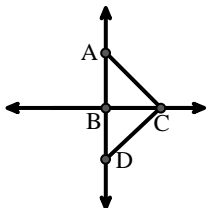
G.



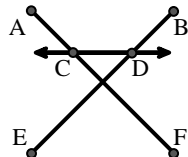
H.



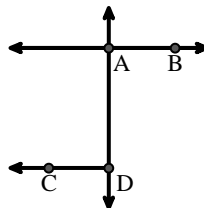
I.



J.



K.



L.

