




Measure the width of each block in inches and in centimeters.

Ex)



**Answers**

Ex. 1 2-3

1)



1. \_\_\_\_\_

2. \_\_\_\_\_

2)



3. \_\_\_\_\_

4. \_\_\_\_\_


3)



5. \_\_\_\_\_

6. \_\_\_\_\_

4)



7. \_\_\_\_\_

8. \_\_\_\_\_

5)



9. \_\_\_\_\_

6)



7)



8)




9)





Measure the width of each block in inches and in centimeters.



**Answers**

Ex. 1   2 - 3

1. 1 1/2   3 - 4

2. 5   12 - 13

3. 5 1/2   13 - 14

4. 0 1/2   1 - 2

5. 3   7 - 8

6. 2   5 - 6

7. 4   10 - 11

8. 4 1/2   11 - 12

9. 3 1/2   8 - 9