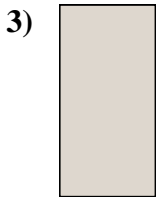





Measure the width and height of each block in inches and in centimeters.



Answers

Ex. 3 1 7.6 2.5

1. _____

2. _____


3. _____

4. _____



Measure the width and height of each block in inches and in centimeters.

Ex)



Answers

Ex. 3 1 7.6 2.5

1. 5 0 1/2 12.7 1.3

2. 1 1/2 0 1/2 3.8 1.3

3. 0 1/2 1 1.3 2.5

4. 4 1/2 0 1/2 11.4 1.3


1)



2)



3)



4)

