



Measure the width and height of each block in inches and in centimeters.

**Answers**

Ex)



Ex. 3 1/2 0 1/2 8.9 1.3


1. \_\_\_\_\_

2. \_\_\_\_\_

3. \_\_\_\_\_

4. \_\_\_\_\_


1)




2)



3)



4)





Measure the width and height of each block in inches and in centimeters.

Ex)



Answers

Ex. 3 1/2 0 1/2 8.9 1.3


1. 1 1 1/2 2.5 3.8

2. 1 1/2 1 3.8 2.5

3. 5 1/2 1 1/2 14 3.8

4. 5 1 12.7 2.5


1)



2)



3)



4)

